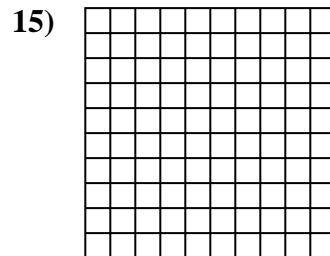
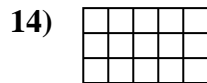
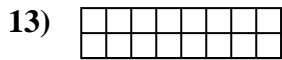
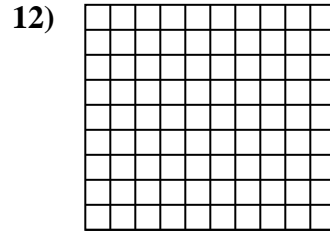
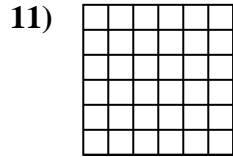
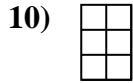
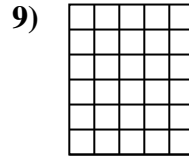

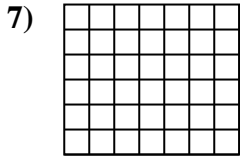

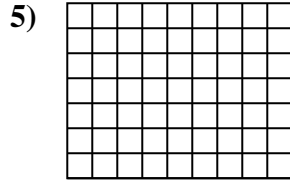
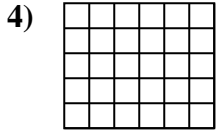
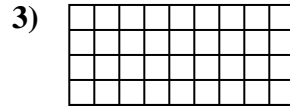
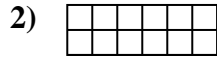
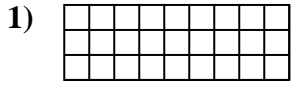




Calcola l'area. Ogni quadratino corrisponde ad 1 unità.



Risposte

1. _____

2. _____

3. _____

4. _____

5. _____

6. _____

7. _____

8. _____

9. _____

10. _____

11. _____

12. _____

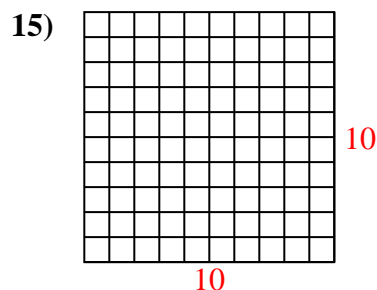
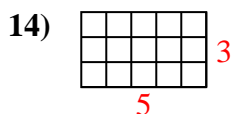
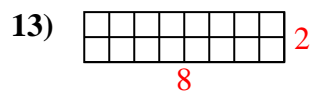
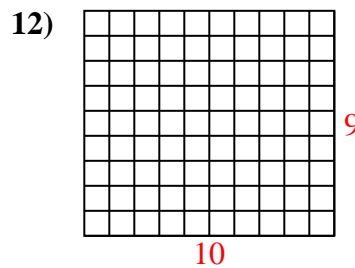
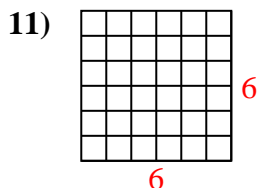
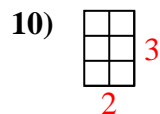
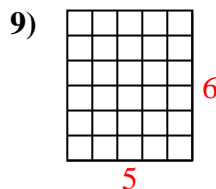
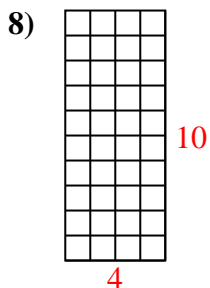
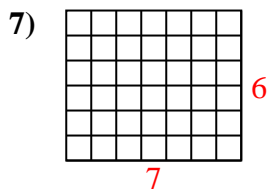
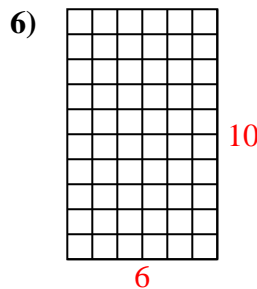
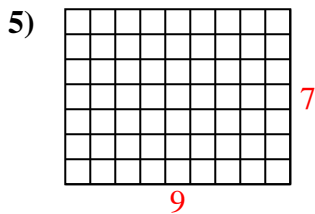
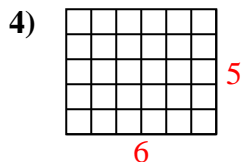
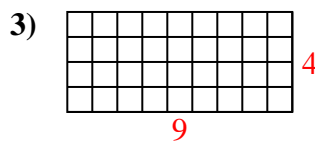
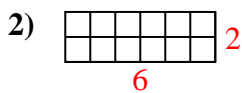
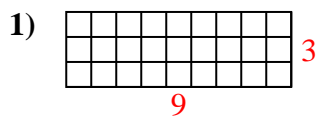
13. _____

14. _____

15. _____



Calcola l'area. Ogni quadratino corrisponde ad 1 unità.



Risposte

1. 27 u²

2. 12 u²

3. 36 u²

4. 30 u²

5. 63 u²

6. 60 u²

7. 42 u²

8. 40 u²

9. 30 u²

10. 6 u²

11. 36 u²

12. 90 u²

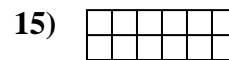
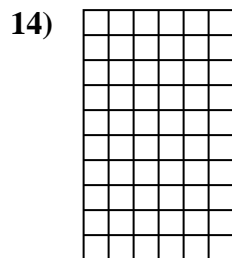
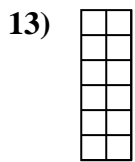
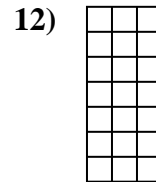
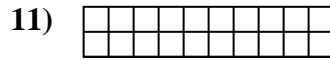
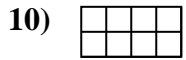
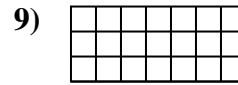
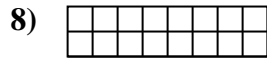
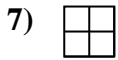
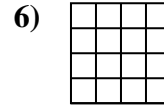
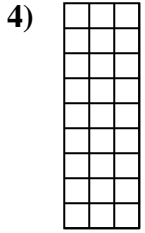
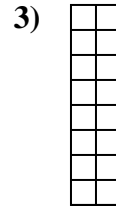
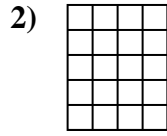
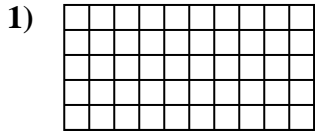
13. 16 u²

14. 15 u²

15. 100 u²



Calcola l'area. Ogni quadratino corrisponde ad 1 unità.

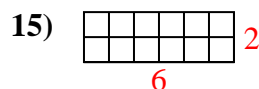
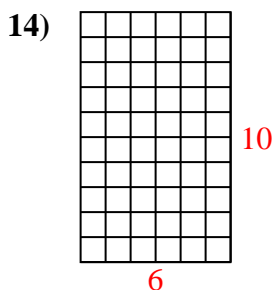
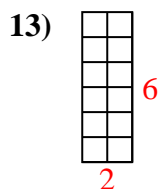
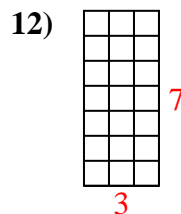
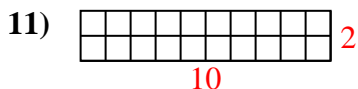
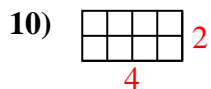
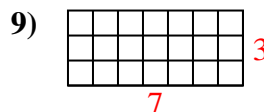
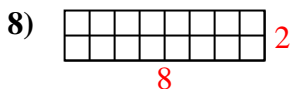
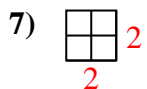
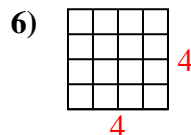
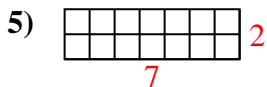
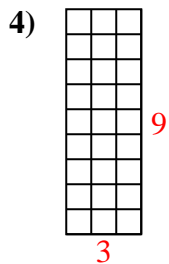
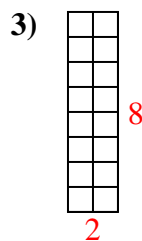
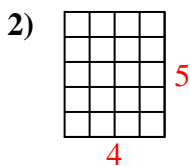
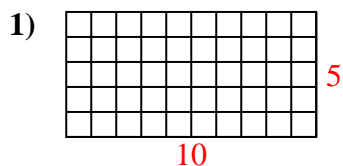


Risposte

1. _____
2. _____
3. _____
4. _____
5. _____
6. _____
7. _____
8. _____
9. _____
10. _____
11. _____
12. _____
13. _____
14. _____
15. _____



Calcola l'area. Ogni quadratino corrisponde ad 1 unità.



Risposte

1. 50 u²

2. 20 u²

3. 16 u²

4. 27 u²

5. 14 u²

6. 16 u²

7. 4 u²

8. 16 u²

9. 21 u²

10. 8 u²

11. 20 u²

12. 21 u²

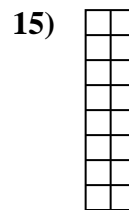

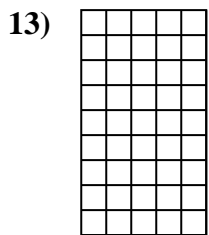
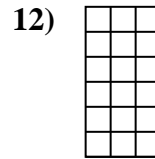
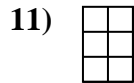
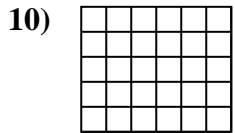
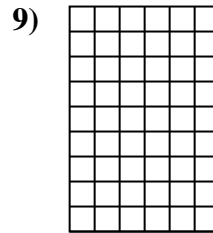

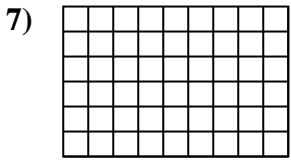

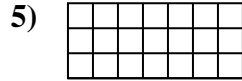
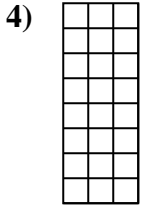
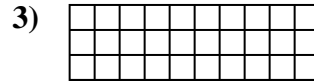
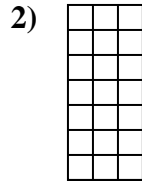

13. 12 u²

14. 60 u²

15. 12 u²



Calcola l'area. Ogni quadratino corrisponde ad 1 unità.



Risposte

1. _____

2. _____

3. _____

4. _____

5. _____

6. _____

7. _____

8. _____

9. _____

10. _____

11. _____

12. _____

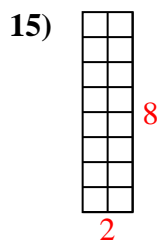
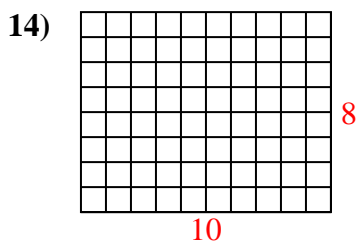
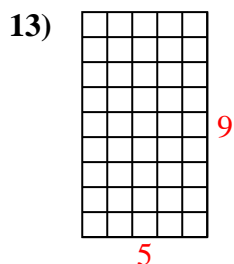
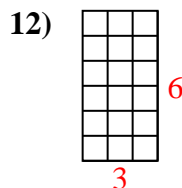
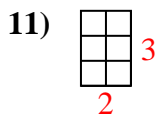
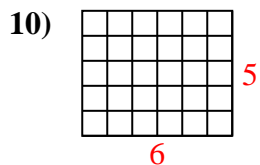
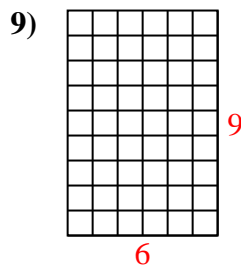
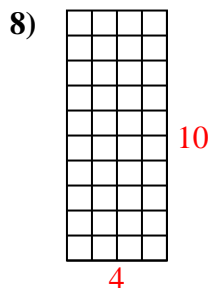
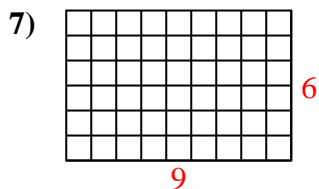
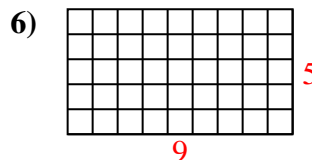
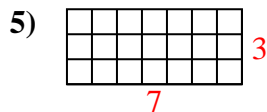
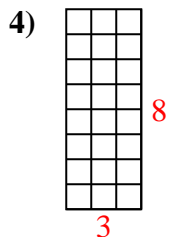
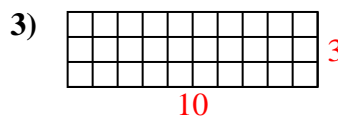
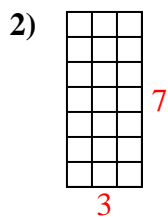
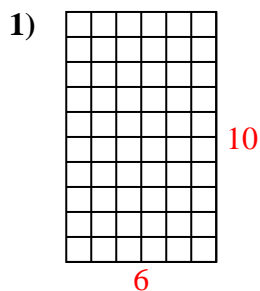
13. _____

14. _____

15. _____



Calcola l'area. Ogni quadratino corrisponde ad 1 unità.



Risposte

1. 60 u²

2. 21 u²

3. 30 u²

4. 24 u²

5. 21 u²

6. 45 u²

7. 54 u²

8. 40 u²

9. 54 u²

10. 30 u²

11. 6 u²

12. 18 u²

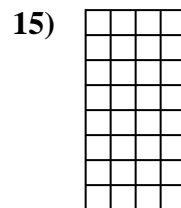
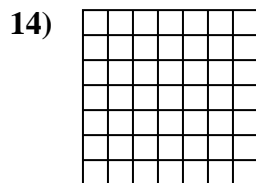


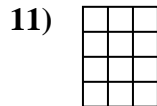
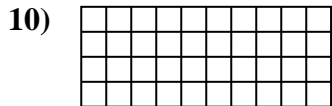
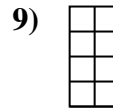
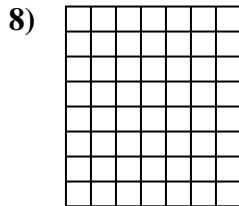

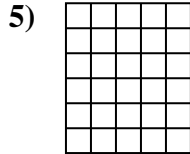
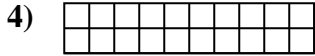
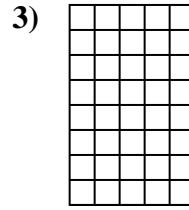
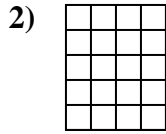
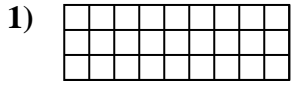
13. 45 u²

14. 80 u²

15. 16 u²



Calcola l'area. Ogni quadratino corrisponde ad 1 unità.

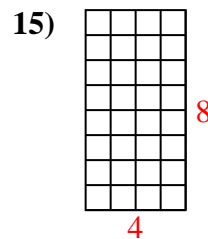
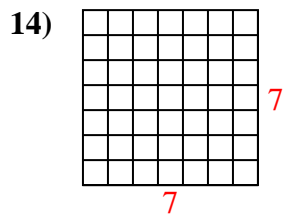
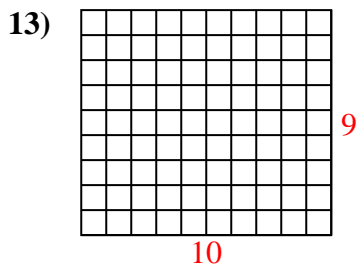
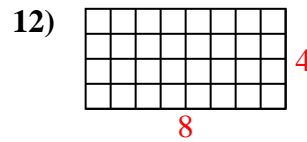
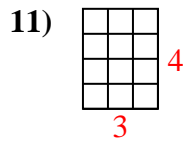
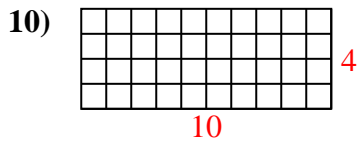
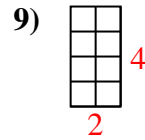
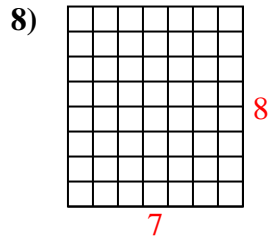
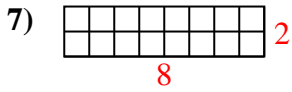
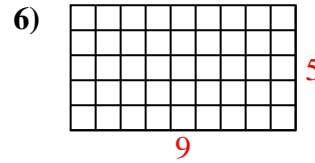
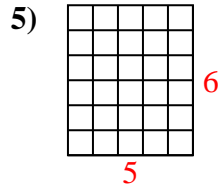
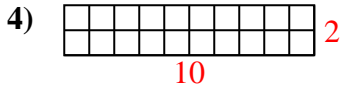
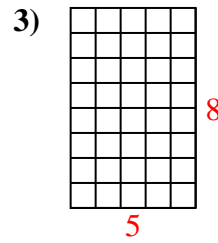
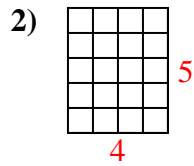
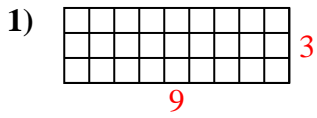


Risposte

1. _____
2. _____
3. _____
4. _____
5. _____
6. _____
7. _____
8. _____
9. _____
10. _____
11. _____
12. _____
13. _____
14. _____
15. _____



Calcola l'area. Ogni quadratino corrisponde ad 1 unità.



Risposte

1. 27 u²

2. 20 u²

3. 40 u²

4. 20 u²

5. 30 u²

6. 45 u²

7. 16 u²

8. 56 u²

9. 8 u²

10. 40 u²

11. 12 u²

12. 32 u²

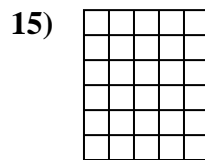
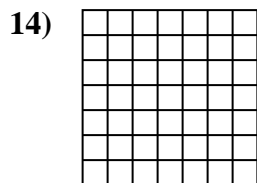
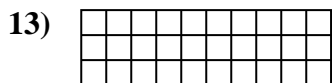

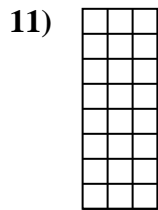
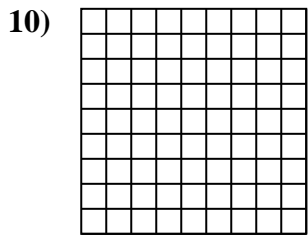
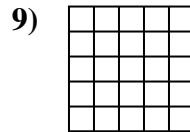
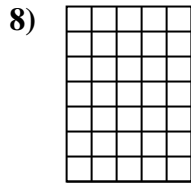
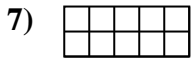
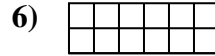
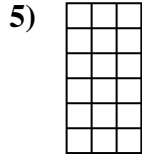
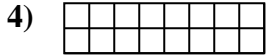
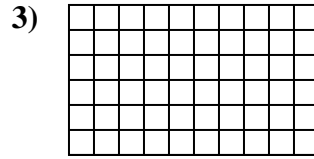
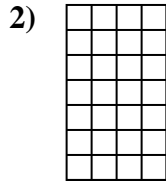
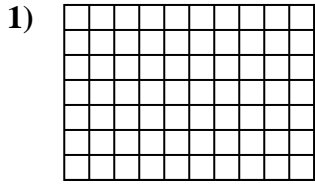
13. 90 u²

14. 49 u²

15. 32 u²



Calcola l'area. Ogni quadratino corrisponde ad 1 unità.



Risposte

1. _____

2. _____

3. _____

4. _____

5. _____

6. _____

7. _____

8. _____

9. _____

10. _____

11. _____

12. _____

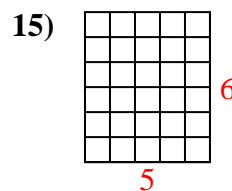
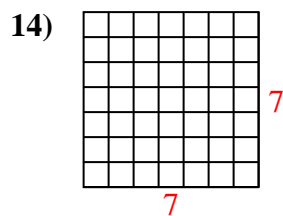
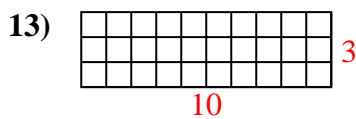
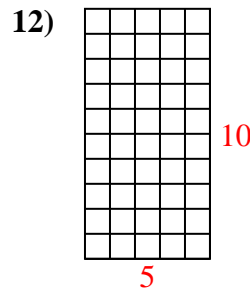
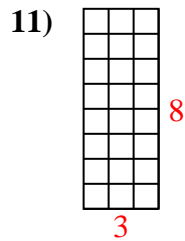
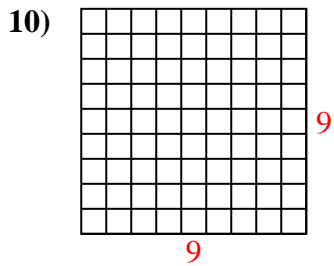
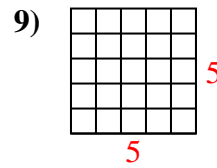
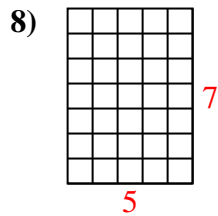
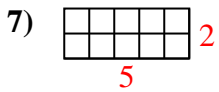
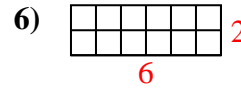
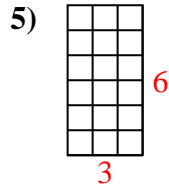
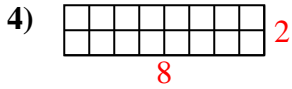
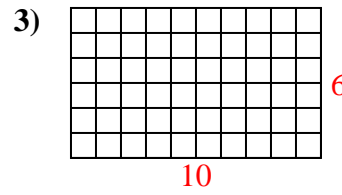
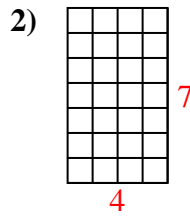
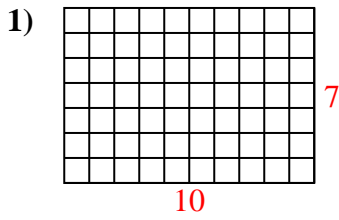
13. _____

14. _____

15. _____



Calcola l'area. Ogni quadratino corrisponde ad 1 unità.



Risposte

1. 70 u²

2. 28 u²

3. 60 u²

4. 16 u²

5. 18 u²

6. 12 u²

7. 10 u²

8. 35 u²

9. 25 u²

10. 81 u²

11. 24 u²

12. 50 u²

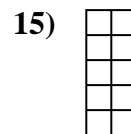
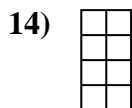
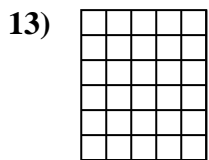
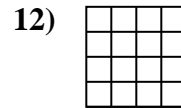
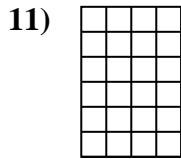
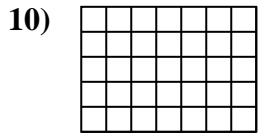
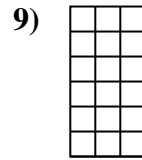
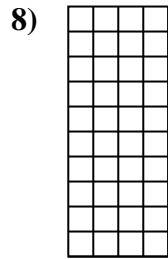
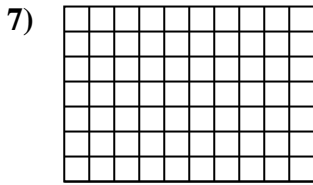
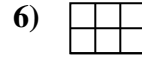
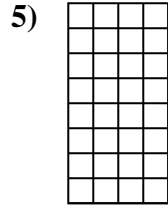
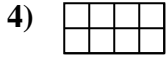
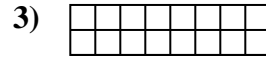
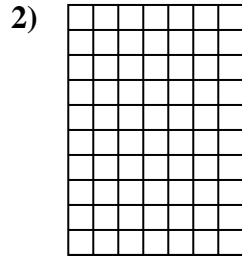
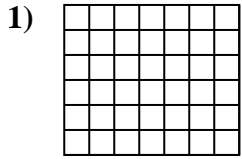
13. 30 u²

14. 49 u²

15. 30 u²



Calcola l'area. Ogni quadratino corrisponde ad 1 unità.



Risposte

1. _____

2. _____

3. _____

4. _____

5. _____

6. _____

7. _____

8. _____

9. _____

10. _____

11. _____

12. _____

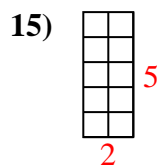
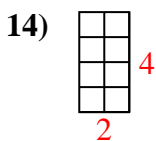
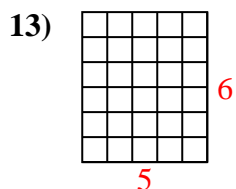
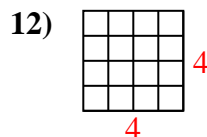
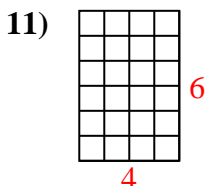
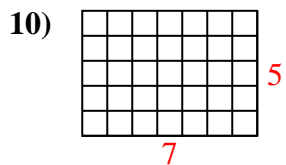
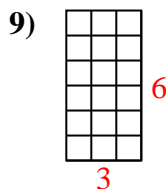
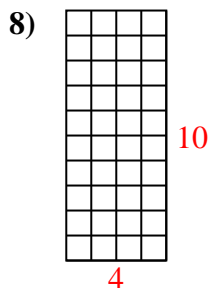
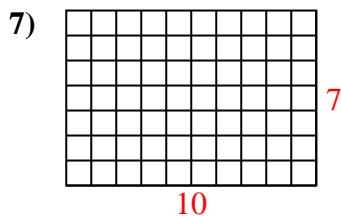
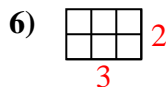
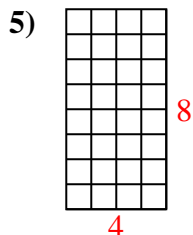
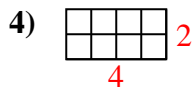
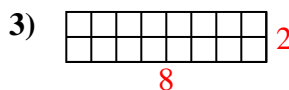
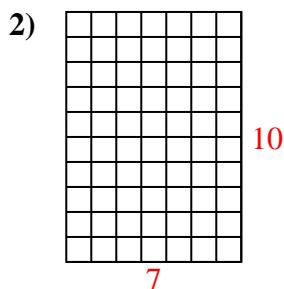
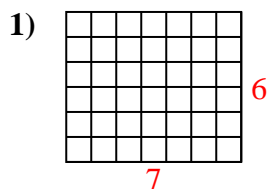
13. _____

14. _____

15. _____



Calcola l'area. Ogni quadratino corrisponde ad 1 unità.



Risposte

1. 42 u²

2. 70 u²

3. 16 u²

4. 8 u²

5. 32 u²

6. 6 u²

7. 70 u²

8. 40 u²

9. 18 u²

10. 35 u²

11. 24 u²

12. 16 u²


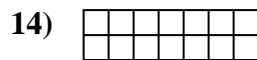
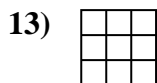
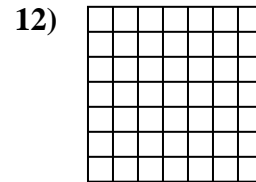
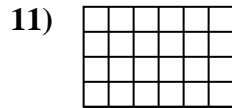
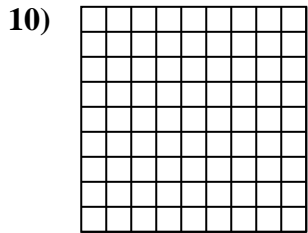
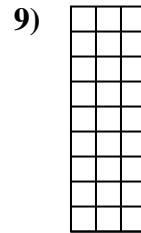
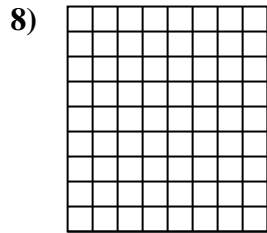
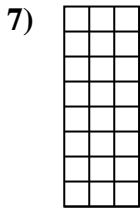

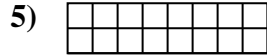
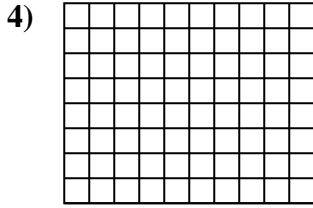
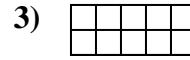
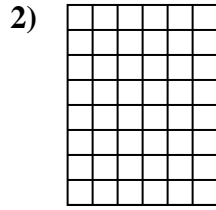
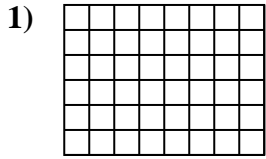
13. 30 u²

14. 8 u²

15. 10 u²



Calcola l'area. Ogni quadratino corrisponde ad 1 unità.

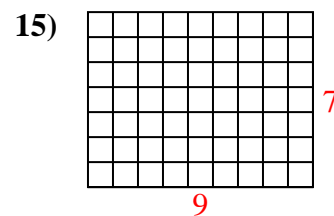
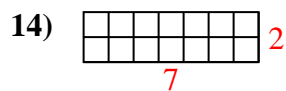
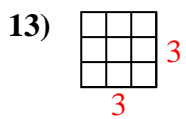
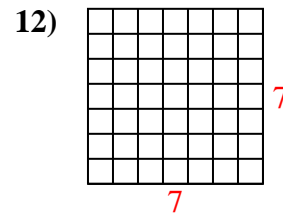
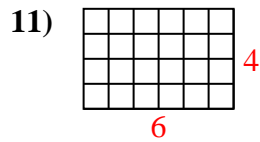
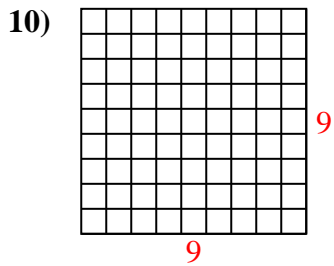
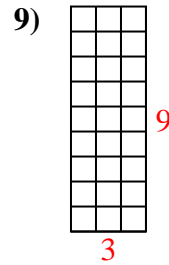
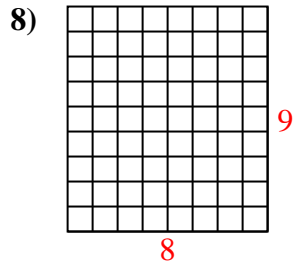
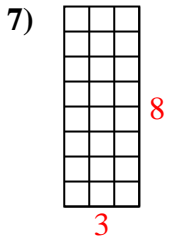
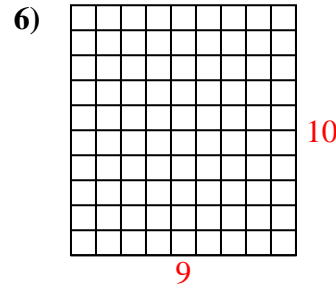
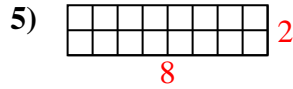
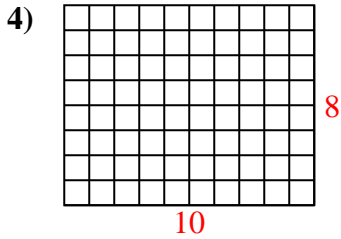
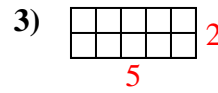
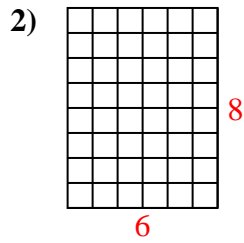
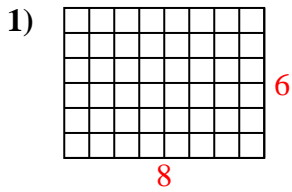


Risposte

1. _____
2. _____
3. _____
4. _____
5. _____
6. _____
7. _____
8. _____
9. _____
10. _____
11. _____
12. _____
13. _____
14. _____
15. _____



Calcola l'area. Ogni quadratino corrisponde ad 1 unità.



Risposte

1. 48 u²

2. 48 u²

3. 10 u²

4. 80 u²

5. 16 u²

6. 90 u²

7. 24 u²

8. 72 u²

9. 27 u²

10. 81 u²

11. 24 u²

12. 49 u²

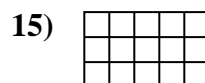
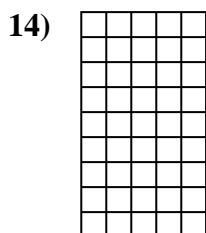
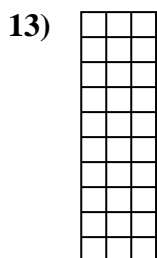
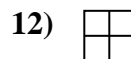
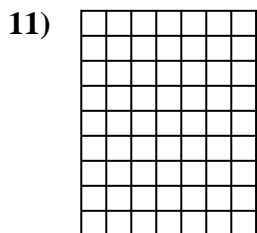
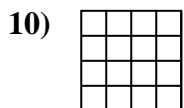
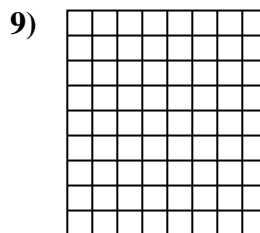
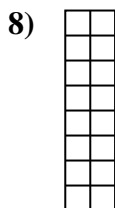
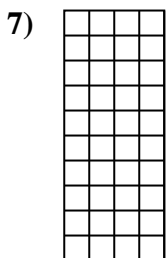

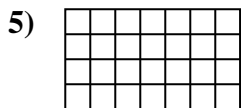
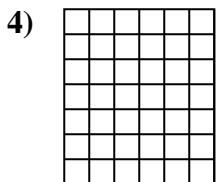
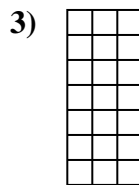
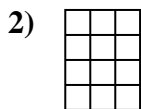
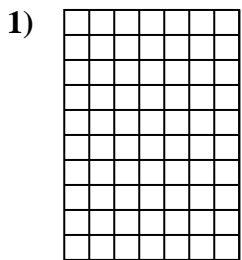
13. 9 u²

14. 14 u²

15. 63 u²



Calcola l'area. Ogni quadratino corrisponde ad 1 unità.



Risposte

1. _____

2. _____

3. _____

4. _____

5. _____

6. _____

7. _____

8. _____

9. _____

10. _____

11. _____

12. _____

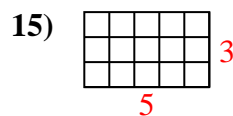
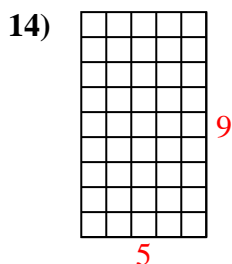
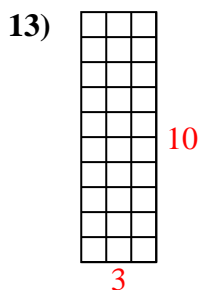
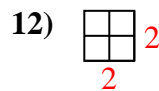
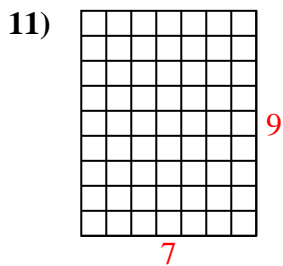
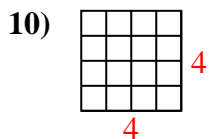
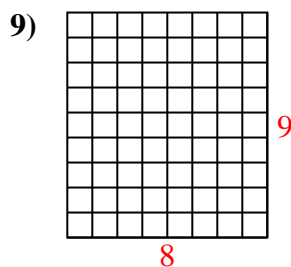
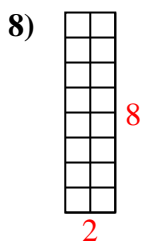
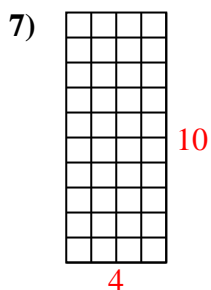
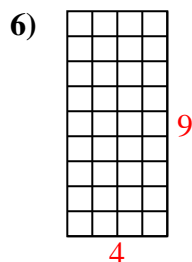
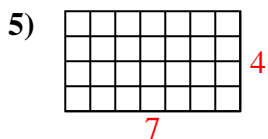
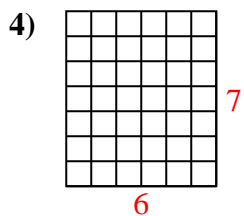
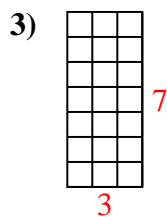
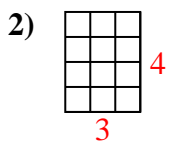
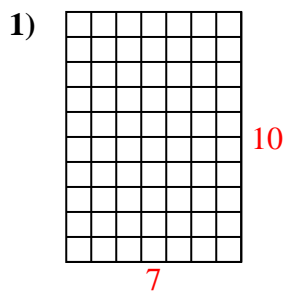
13. _____

14. _____

15. _____



Calcola l'area. Ogni quadratino corrisponde ad 1 unità.



Risposte

1. 70 u²

2. 12 u²

3. 21 u²

4. 42 u²

5. 28 u²

6. 36 u²

7. 40 u²

8. 16 u²

9. 72 u²

10. 16 u²

11. 63 u²

12. 4 u²

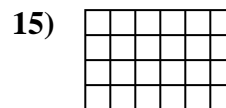
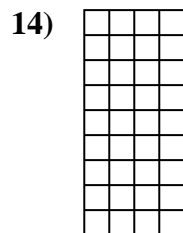
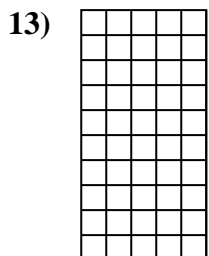
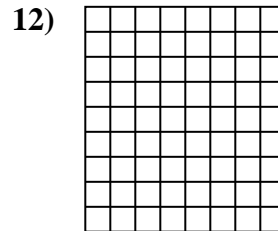

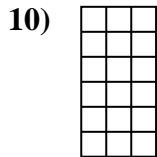
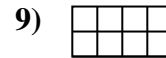


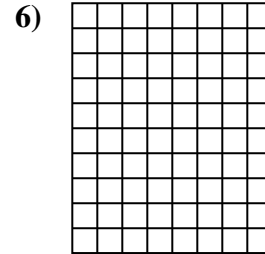
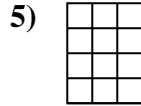
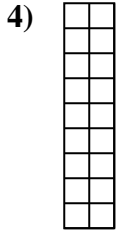
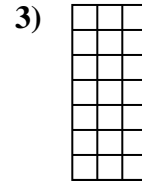
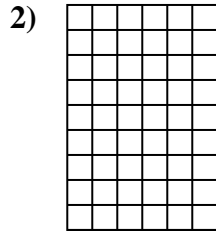
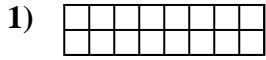
13. 30 u²

14. 45 u²

15. 15 u²



Calcola l'area. Ogni quadratino corrisponde ad 1 unità.



Risposte

1. _____

2. _____

3. _____

4. _____

5. _____

6. _____

7. _____

8. _____

9. _____

10. _____

11. _____

12. _____

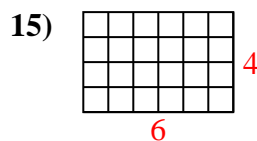
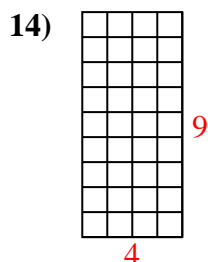
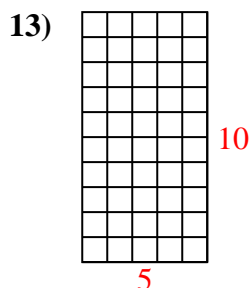
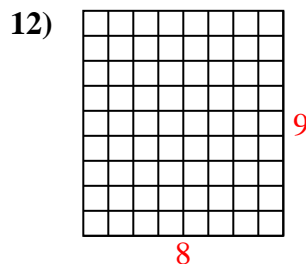
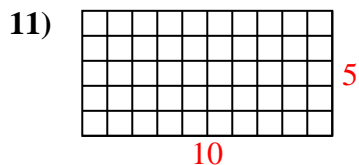
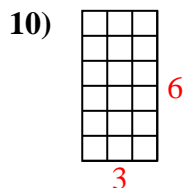
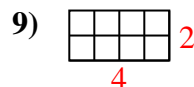
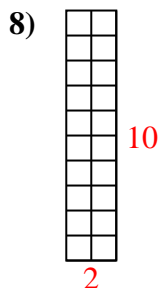
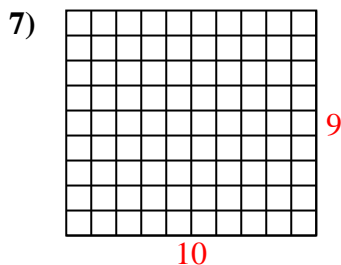
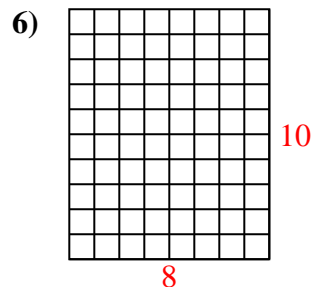
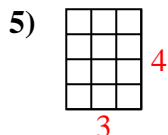
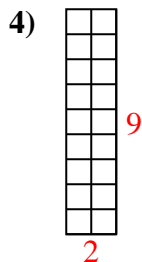
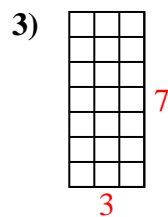
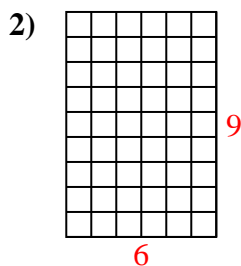
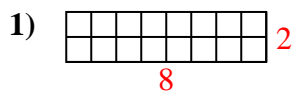
13. _____

14. _____

15. _____



Calcola l'area. Ogni quadratino corrisponde ad 1 unità.



Risposte

1. 16 u²

2. 54 u²

3. 21 u²

4. 18 u²

5. 12 u²

6. 80 u²

7. 90 u²

8. 20 u²

9. 8 u²

10. 18 u²

11. 50 u²

12. 72 u²

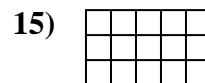

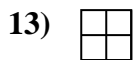
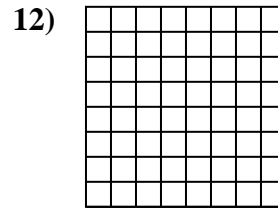
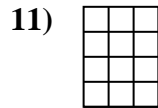
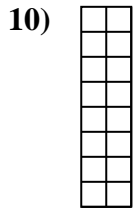

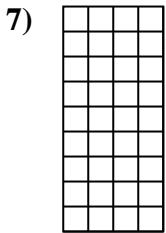
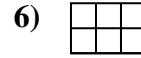
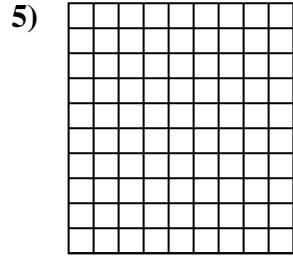
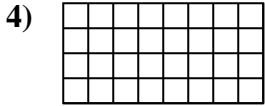
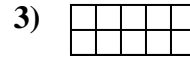
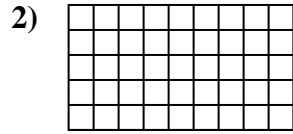
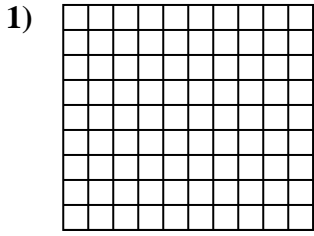
13. 50 u²

14. 36 u²

15. 24 u²



Calcola l'area. Ogni quadratino corrisponde ad 1 unità.



Risposte

1. _____

2. _____

3. _____

4. _____

5. _____

6. _____

7. _____

8. _____

9. _____

10. _____

11. _____

12. _____

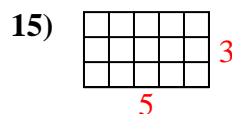
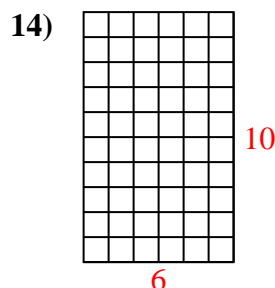
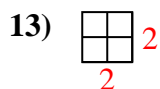
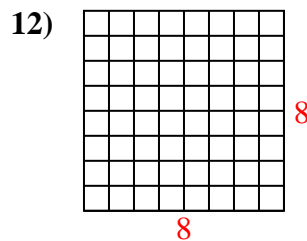
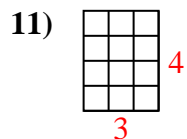
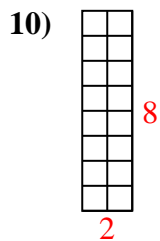
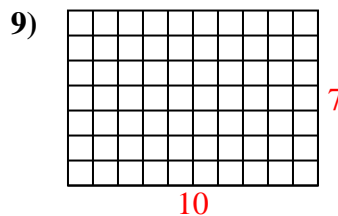
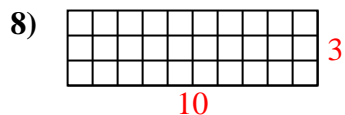
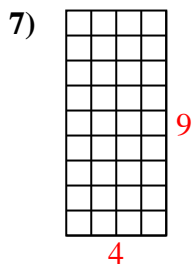
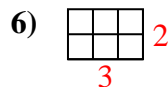
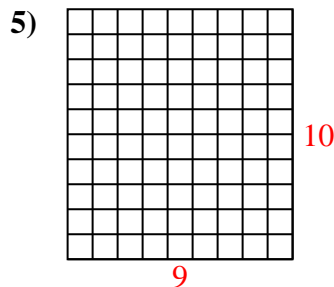
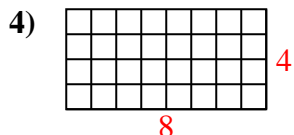
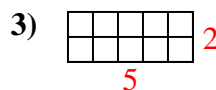
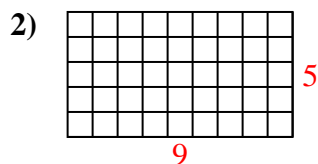
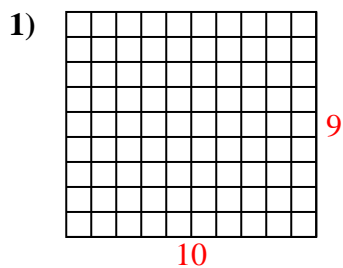
13. _____

14. _____

15. _____



Calcola l'area. Ogni quadratino corrisponde ad 1 unità.



Risposte

1. 90 u²

2. 45 u²

3. 10 u²

4. 32 u²

5. 90 u²

6. 6 u²

7. 36 u²

8. 30 u²

9. 70 u²

10. 16 u²

11. 12 u²

12. 64 u²

13. 4 u²

14. 60 u²

15. 15 u²