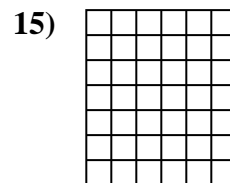
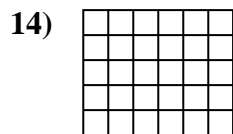
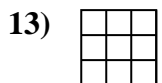
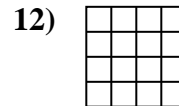
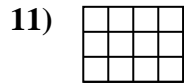
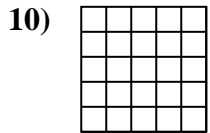
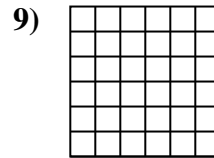
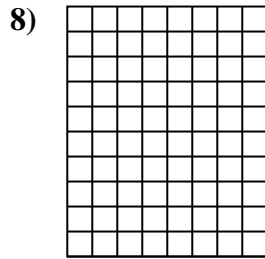
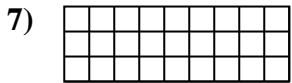
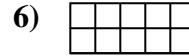
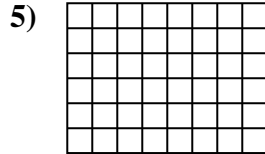
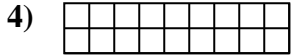
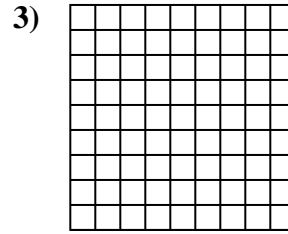
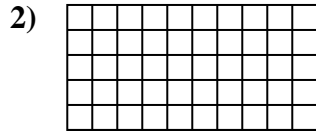
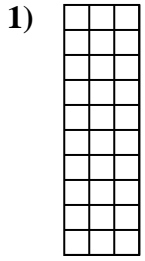




Calcola l'area. Ogni quadratino corrisponde ad 1 unità.

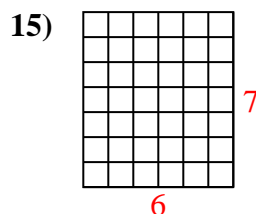
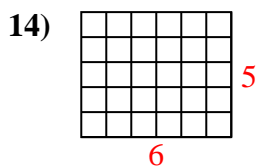
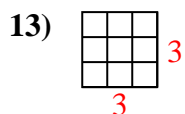
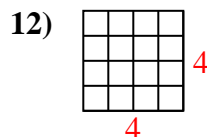
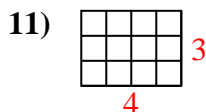
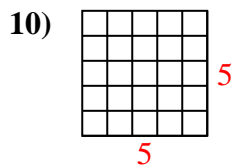
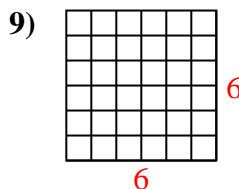
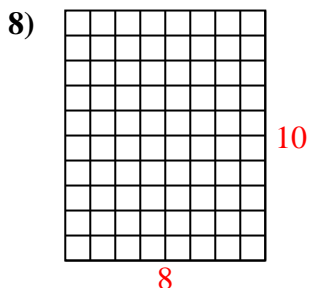
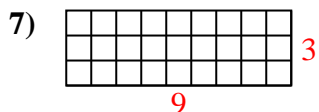
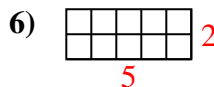
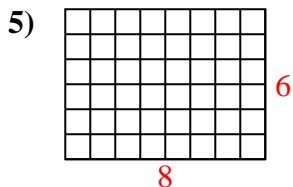
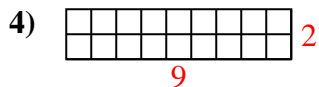
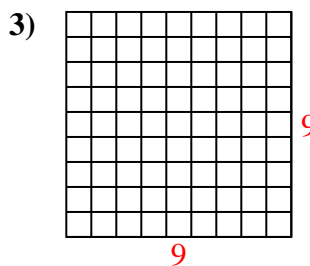
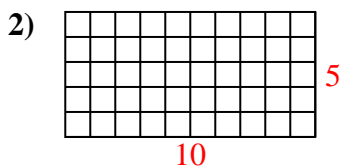
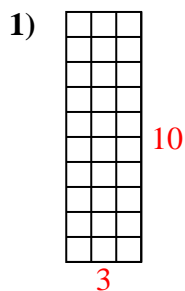


Risposte

- 1. _____
- 2. _____
- 3. _____
- 4. _____
- 5. _____
- 6. _____
- 7. _____
- 8. _____
- 9. _____
- 10. _____
- 11. _____
- 12. _____
- 13. _____
- 14. _____
- 15. _____



Calcola l'area. Ogni quadratino corrisponde ad 1 unità.



Risposte

1. 30 u²

2. 50 u²

3. 81 u²

4. 18 u²

5. 48 u²

6. 10 u²

7. 27 u²

8. 80 u²

9. 36 u²

10. 25 u²

11. 12 u²

12. 16 u²

13. 9 u²

14. 30 u²

15. 42 u²