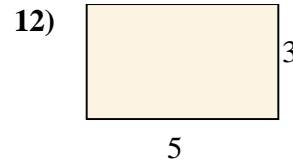
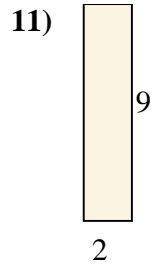
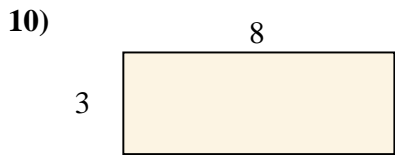
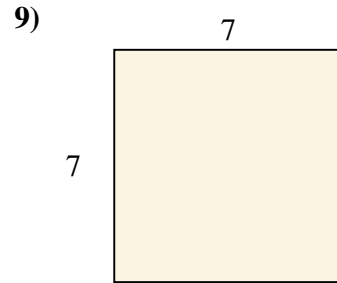
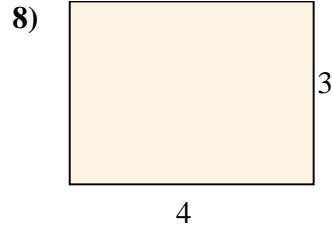
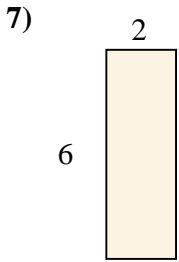
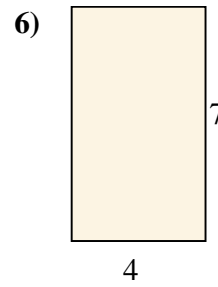
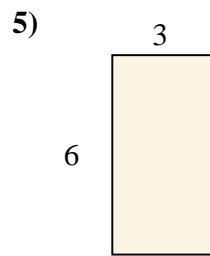
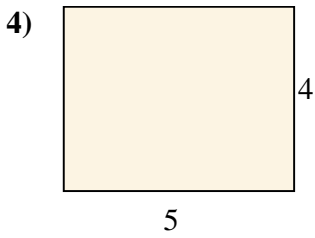
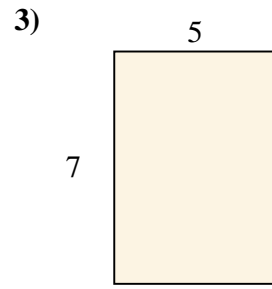
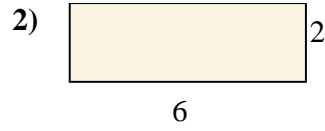
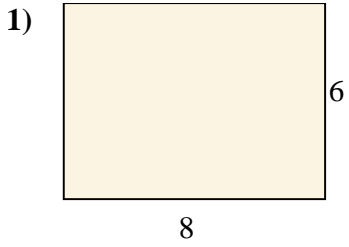




Trova l'area dei seguenti rettangoli.

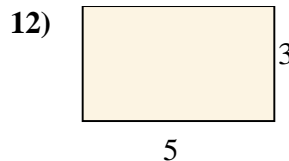
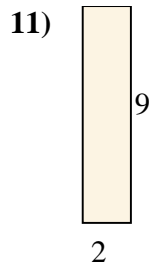
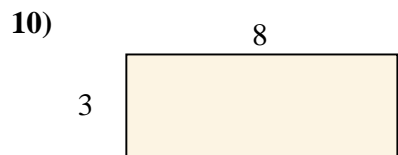
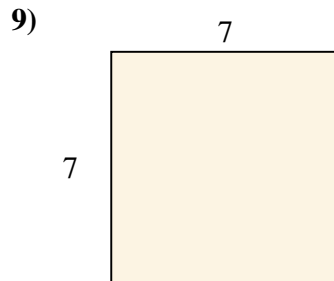
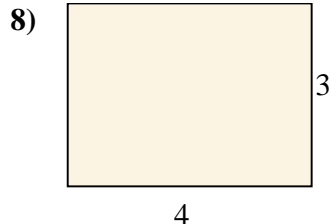
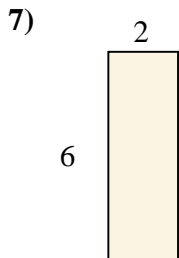
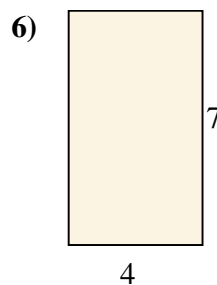
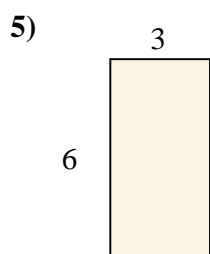
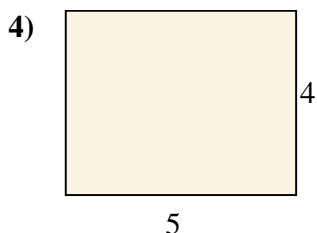
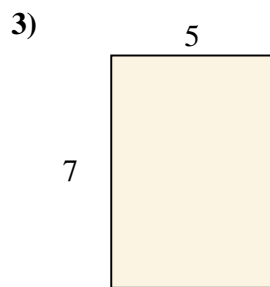
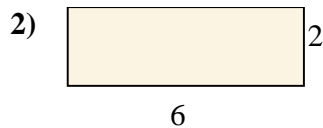
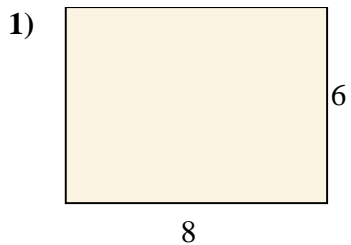


**Risposte**

- 1. \_\_\_\_\_
- 2. \_\_\_\_\_
- 3. \_\_\_\_\_
- 4. \_\_\_\_\_
- 5. \_\_\_\_\_
- 6. \_\_\_\_\_
- 7. \_\_\_\_\_
- 8. \_\_\_\_\_
- 9. \_\_\_\_\_
- 10. \_\_\_\_\_
- 11. \_\_\_\_\_
- 12. \_\_\_\_\_



Trova l'area dei seguenti rettangoli.



**Risposte**

1. 48

2. 12

3. 35

4. 20

5. 18

6. 28

7. 12

8. 12

9. 49

10. 24

11. 18

12. 15