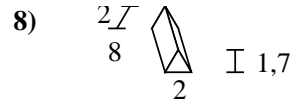
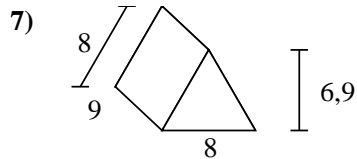
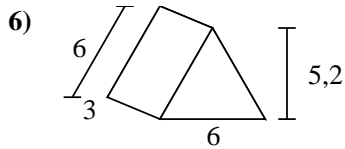
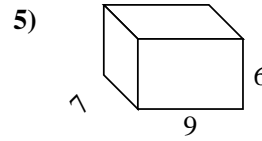
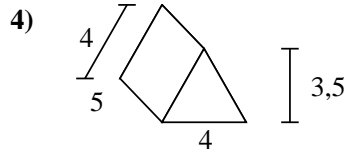
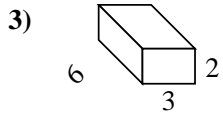
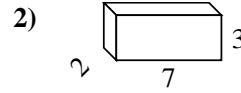
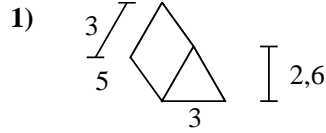
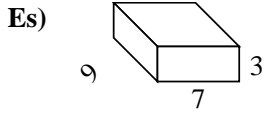




Calcola la superficie di ogni figura.



**Risposte**

Es. 222 cm<sup>2</sup>

1. \_\_\_\_\_

2. \_\_\_\_\_

3. \_\_\_\_\_

4. \_\_\_\_\_

5. \_\_\_\_\_


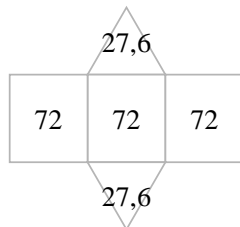
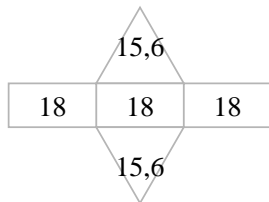
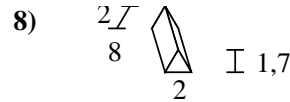
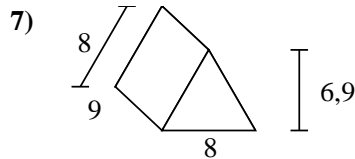
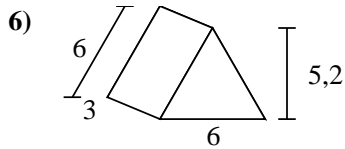
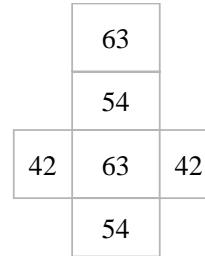
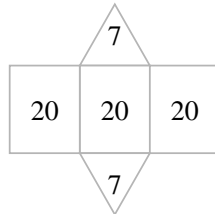
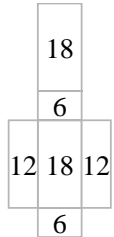
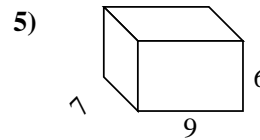
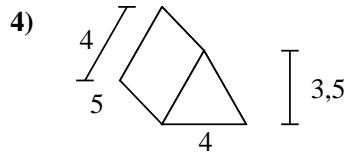
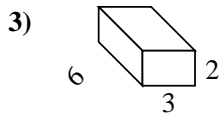
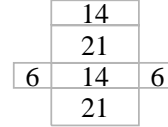
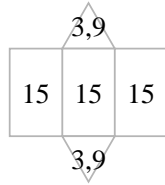
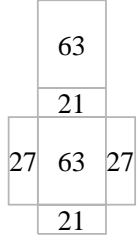
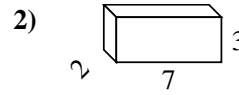
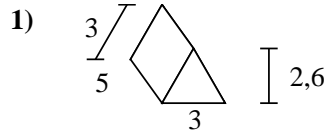
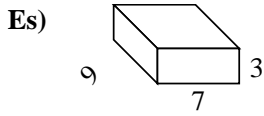
6. \_\_\_\_\_

7. \_\_\_\_\_

8. \_\_\_\_\_



Calcola la superficie di ogni figura.

**Risposte**Es. 222 cm<sup>2</sup>1. 52,8 cm<sup>2</sup>2. 82 cm<sup>2</sup>3. 72 cm<sup>2</sup>4. 74 cm<sup>2</sup>5. 318 cm<sup>2</sup>6. 85,2 cm<sup>2</sup>7. 271,2 cm<sup>2</sup>8. 51,4 cm<sup>2</sup>