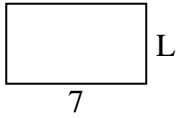


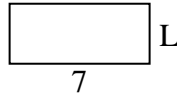


Calcola il valore di 'L'.

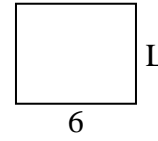
1) Area = $28u^2$



2) Area = $21u^2$



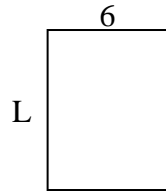
3) Area = $30u^2$



4) Area = $12u^2$




5) Area = $48u^2$



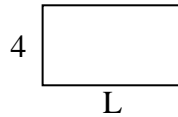
6) Area = $6u^2$



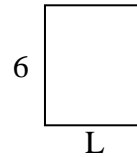
7) Area = $18u^2$



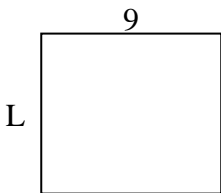
8) Area = $28u^2$



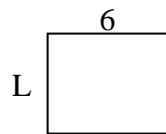
9) Area = $30u^2$



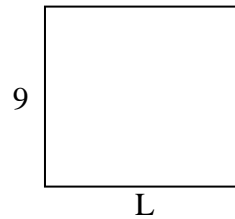
10) Area = $72u^2$



11) Area = $30u^2$



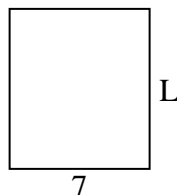
12) Area = $90u^2$




13) Area = $30u^2$



14) Area = $56u^2$



15) Area = $54u^2$

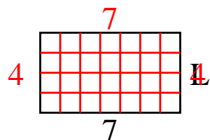
**Risposte**

1. _____
2. _____
3. _____
4. _____
5. _____
6. _____
7. _____
8. _____
9. _____
10. _____
11. _____
12. _____
13. _____
14. _____
15. _____

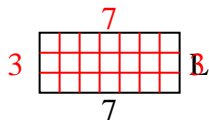


Calcola il valore di 'L'.

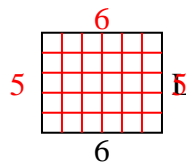
1) Area = $28u^2$



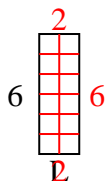
2) Area = $21u^2$



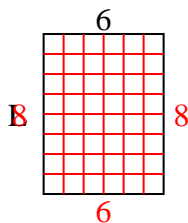
3) Area = $30u^2$



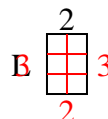
4) Area = $12u^2$



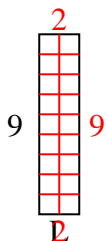
5) Area = $48u^2$



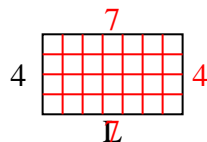
6) Area = $6u^2$



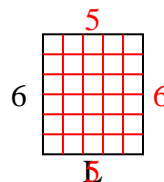
7) Area = $18u^2$



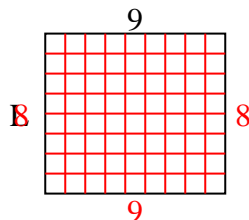
8) Area = $28u^2$



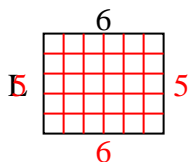
9) Area = $30u^2$



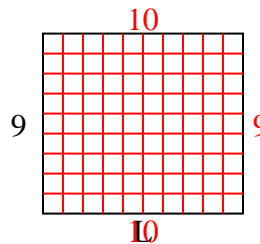
10) Area = $72u^2$



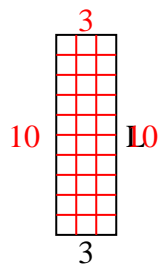
11) Area = $30u^2$



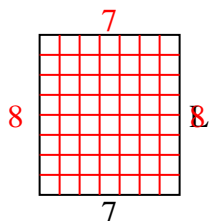
12) Area = $90u^2$



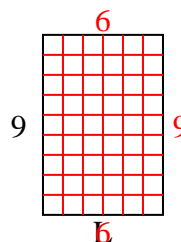
13) Area = $30u^2$



14) Area = $56u^2$



15) Area = $54u^2$

**Risposte**1. **4**2. **3**3. **5**4. **2**5. **8**6. **3**7. **2**8. **7**9. **5**10. **8**11. **5**12. **10**13. **10**14. **8**15. **6**