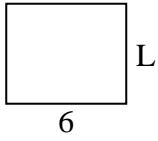




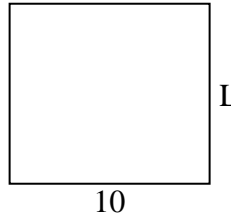
Calcola il valore di 'L'.

**Risposte**

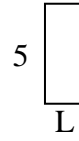
1) Area =  $30u^2$



2) Area =  $90u^2$



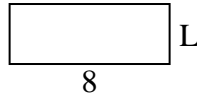
3) Area =  $10u^2$



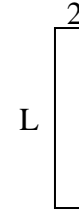
4) Area =  $14u^2$



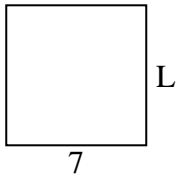
5) Area =  $24u^2$



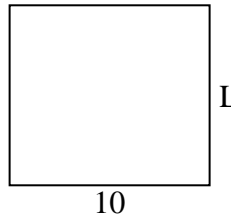
6) Area =  $18u^2$



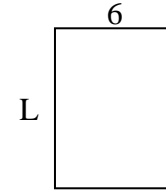
7) Area =  $49u^2$



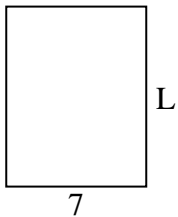
8) Area =  $90u^2$



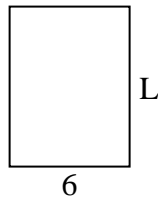
9) Area =  $48u^2$



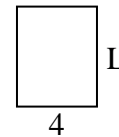
10) Area =  $63u^2$



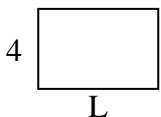
11) Area =  $48u^2$



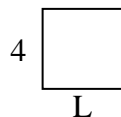
12) Area =  $20u^2$



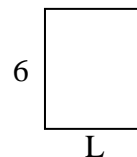
13) Area =  $24u^2$



14) Area =  $16u^2$



15) Area =  $30u^2$

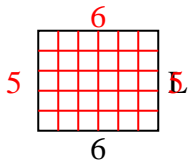


1. \_\_\_\_\_
2. \_\_\_\_\_
3. \_\_\_\_\_
4. \_\_\_\_\_
5. \_\_\_\_\_
6. \_\_\_\_\_
7. \_\_\_\_\_
8. \_\_\_\_\_
9. \_\_\_\_\_
10. \_\_\_\_\_
11. \_\_\_\_\_
12. \_\_\_\_\_
13. \_\_\_\_\_
14. \_\_\_\_\_
15. \_\_\_\_\_

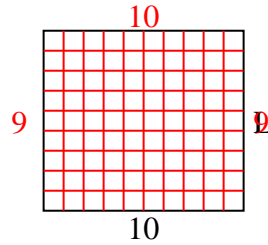


Calcola il valore di 'L'.

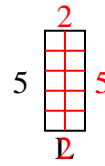
1) Area =  $30u^2$



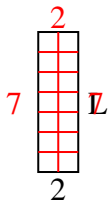
2) Area =  $90u^2$



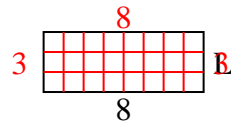
3) Area =  $10u^2$



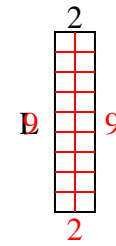
4) Area =  $14u^2$



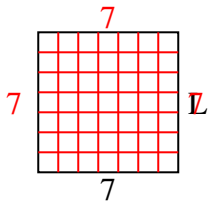
5) Area =  $24u^2$



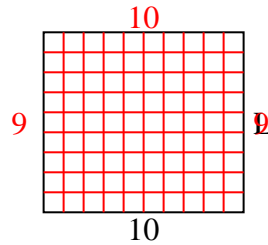
6) Area =  $18u^2$



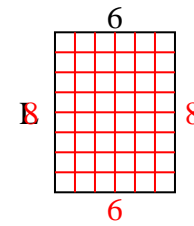
7) Area =  $49u^2$



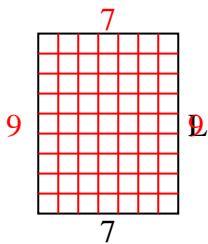
8) Area =  $90u^2$



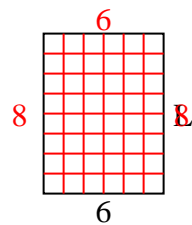
9) Area =  $48u^2$



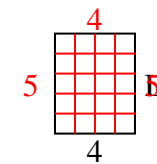
10) Area =  $63u^2$



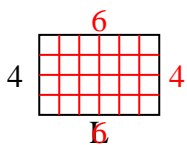
11) Area =  $48u^2$



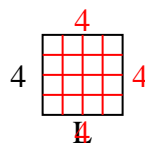
12) Area =  $20u^2$



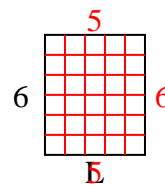
13) Area =  $24u^2$



14) Area =  $16u^2$



15) Area =  $30u^2$

**Risposte**1. 52. 93. 24. 75. 36. 97. 78. 99. 810. 911. 812. 513. 614. 415. 5