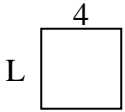




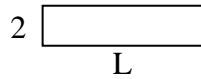
Calcola il valore di 'L'.

Risposte

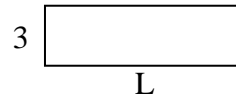
1) Area = $16u^2$



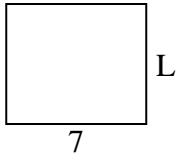
2) Area = $16u^2$



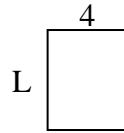
3) Area = $30u^2$



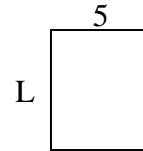
4) Area = $42u^2$



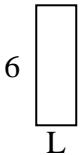
5) Area = $20u^2$



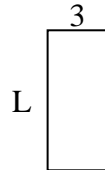
6) Area = $30u^2$



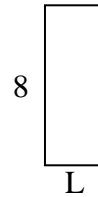
7) Area = $12u^2$




8) Area = $21u^2$



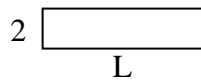
9) Area = $24u^2$



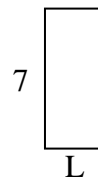
10) Area = $50u^2$



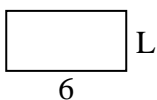
11) Area = $16u^2$



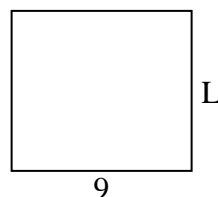
12) Area = $21u^2$




13) Area = $18u^2$



14) Area = $72u^2$



15) Area = $60u^2$

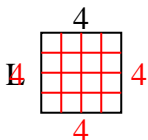


1. _____
2. _____
3. _____
4. _____
5. _____
6. _____
7. _____
8. _____
9. _____
10. _____
11. _____
12. _____
13. _____
14. _____
15. _____

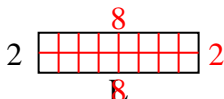


Calcola il valore di 'L'.

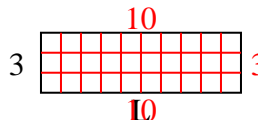
1) Area = $16u^2$



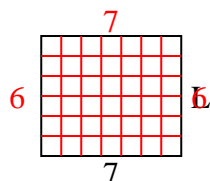
2) Area = $16u^2$



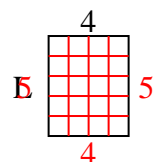
3) Area = $30u^2$



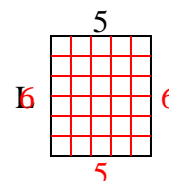
4) Area = $42u^2$



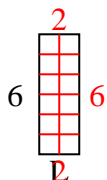
5) Area = $20u^2$



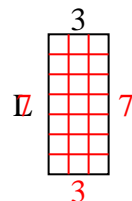
6) Area = $30u^2$



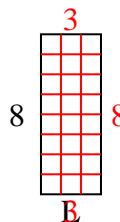
7) Area = $12u^2$



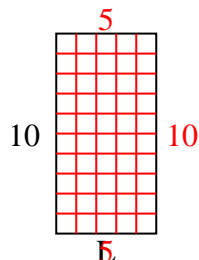
8) Area = $21u^2$



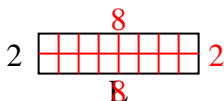
9) Area = $24u^2$



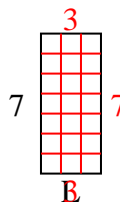
10) Area = $50u^2$



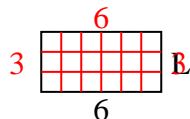
11) Area = $16u^2$



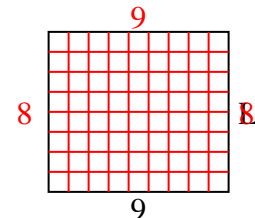
12) Area = $21u^2$



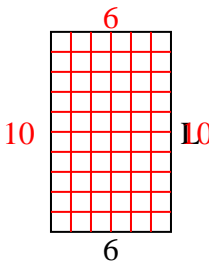
13) Area = $18u^2$



14) Area = $72u^2$



15) Area = $60u^2$

**Risposte**1. 42. 83. 104. 65. 56. 67. 28. 79. 310. 511. 812. 313. 314. 815. 10