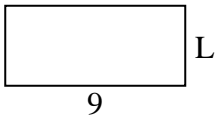




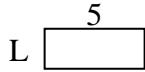
Determina il valore di 'P'.

Risposte

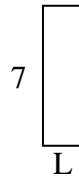
1) Perimetro = 26



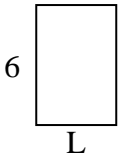
2) Perimetro = 14



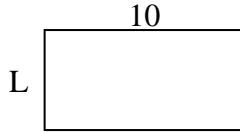
3) Perimetro = 18



4) Perimetro = 20



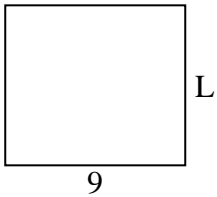
5) Perimetro = 30



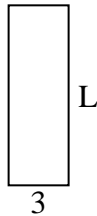
6) Perimetro = 10



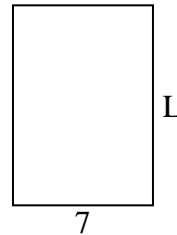
7) Perimetro = 34



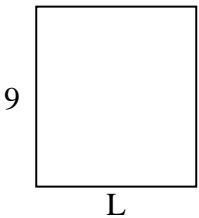
8) Perimetro = 24



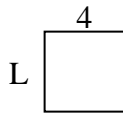
9) Perimetro = 34



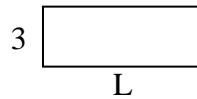
10) Perimetro = 34




11) Perimetro = 16



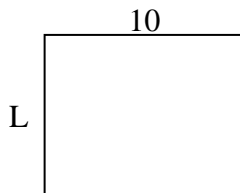
12) Perimetro = 22



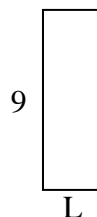
13) Perimetro = 18



14) Perimetro = 36



15) Perimetro = 24

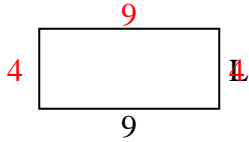


1. _____
2. _____
3. _____
4. _____
5. _____
6. _____
7. _____
8. _____
9. _____
10. _____
11. _____
12. _____
13. _____
14. _____
15. _____

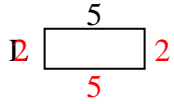


Determina il valore di 'P'.

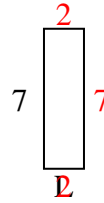
1) Perimetro = 26



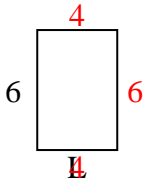
2) Perimetro = 14



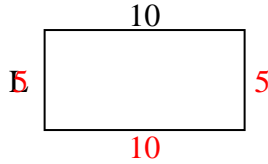
3) Perimetro = 18



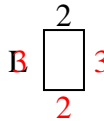
4) Perimetro = 20



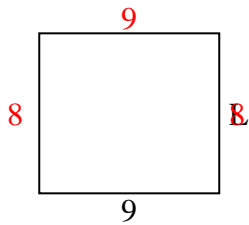
5) Perimetro = 30



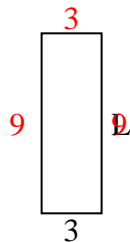
6) Perimetro = 10



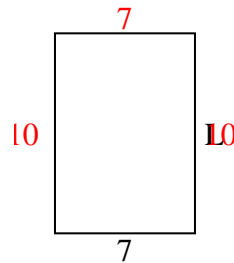
7) Perimetro = 34



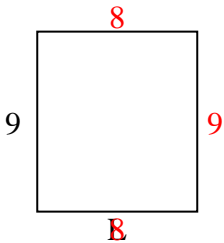
8) Perimetro = 24



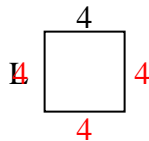
9) Perimetro = 34



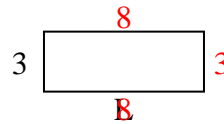
10) Perimetro = 34



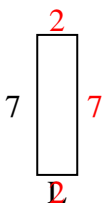
11) Perimetro = 16



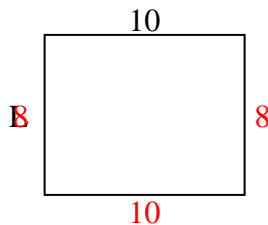
12) Perimetro = 22



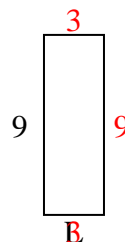
13) Perimetro = 18



14) Perimetro = 36



15) Perimetro = 24



Risposte

1. 4 cm

2. 2 cm

3. 2 cm

4. 4 cm

5. 5 cm

6. 3 cm

7. 8 cm

8. 9 cm

9. 10 cm

10. 8 cm

11. 4 cm

12. 8 cm

13. 2 cm

14. 8 cm

15. 3 cm