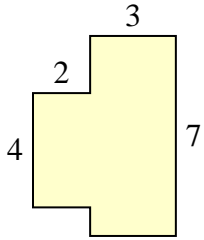




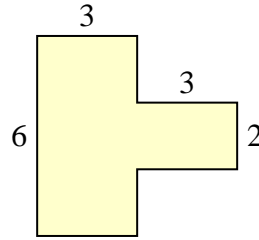
Trova l'area di ciascuna forma, Le misure sono in millimetri (mm). Non fare l'equivalenza.

Risposte

1)



2)



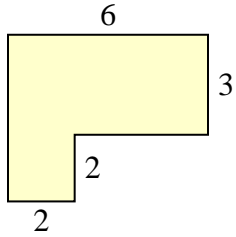
1. _____

2. _____

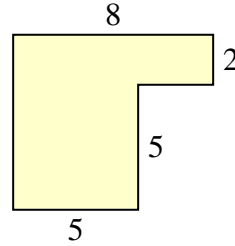
3. _____

4. _____

3)



4)



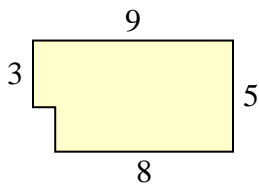
5. _____

6. _____

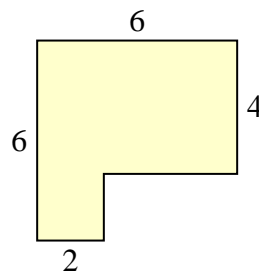
7. _____

8. _____

5)



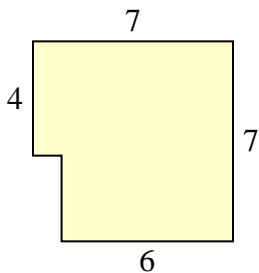
6)



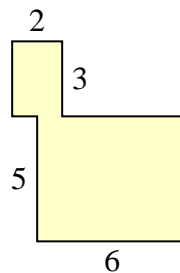
9. _____

10. _____

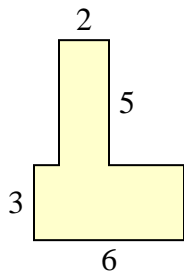
7)



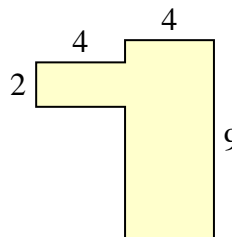
8)



9)



10)

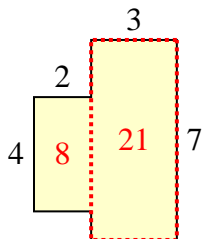




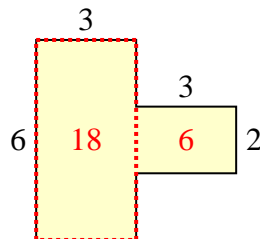
Trova l'area di ciascuna forma, Le misure sono in millimetri (mm). Non fare l'equivalenza.

Risposte

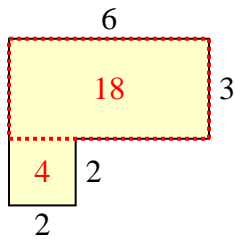
1)



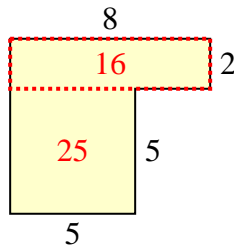
2)

1. 29 mm²

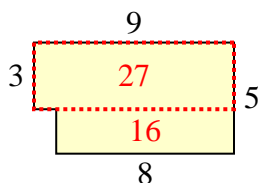
3)



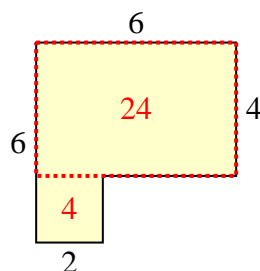
4)

2. 24 mm²3. 22 mm²4. 41 mm²5. 43 mm²6. 28 mm²7. 46 mm²8. 36 mm²

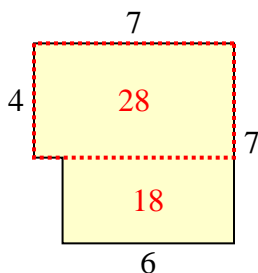
5)



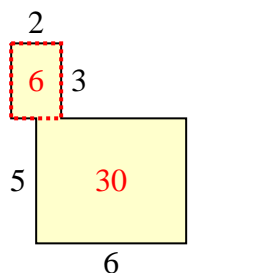
6)

9. 28 mm²10. 44 mm²

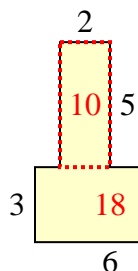
7)



8)



9)



10)

