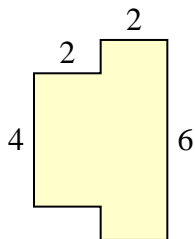




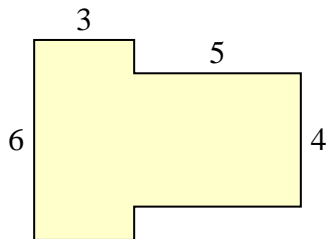
Trova l'area di ciascuna forma, Le misure sono in millimetri (mm). Non fare l'equivalenza.

Risposte

1)



2)



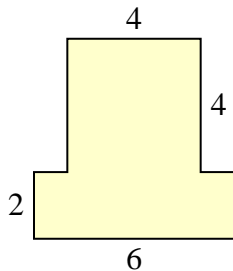
1. _____

2. _____

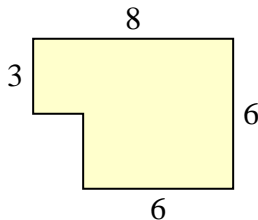
3. _____

4. _____

3)



4)



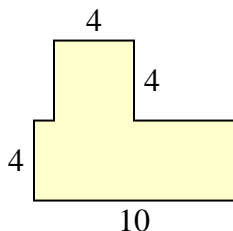
5. _____

6. _____

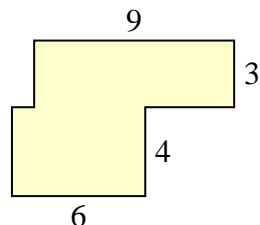
7. _____

8. _____

5)



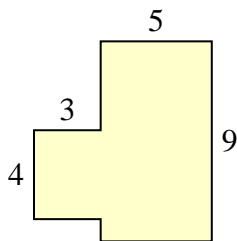
6)



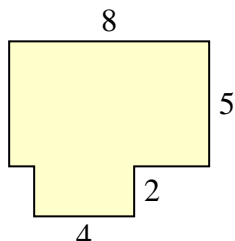
9. _____

10. _____

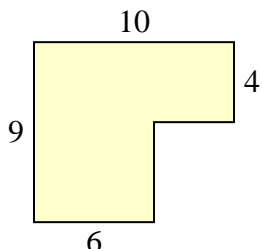
7)



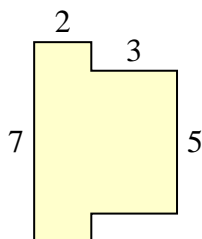
8)



9)

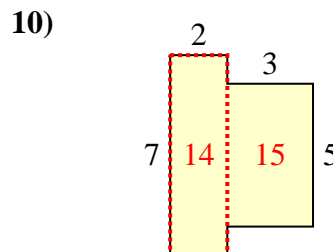
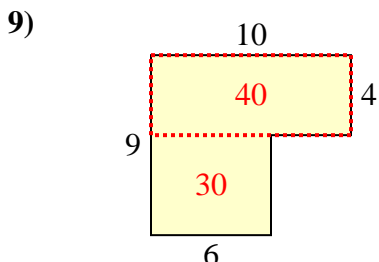
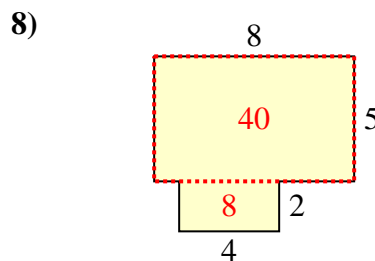
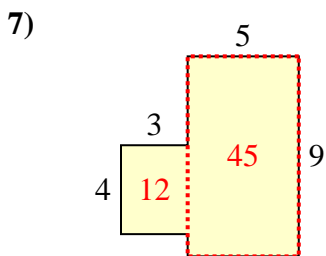
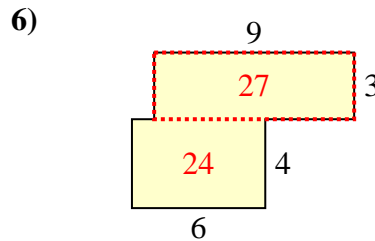
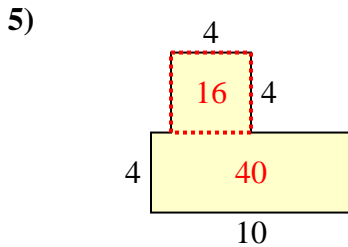
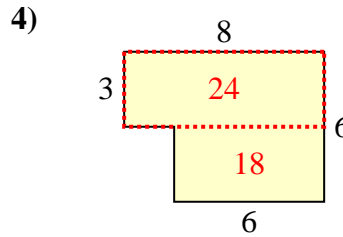
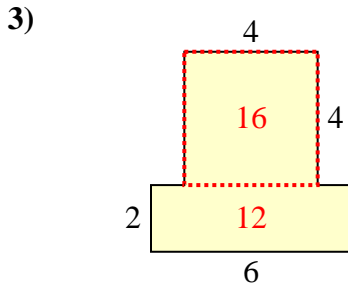
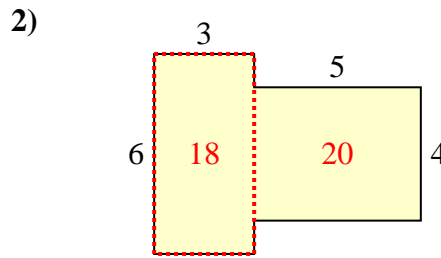
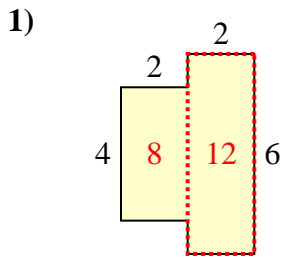


10)





Trova l'area di ciascuna forma, Le misure sono in millimetri (mm). Non fare l'equivalenza.

Risposte

1. 20 mm²
2. 38 mm²
3. 28 mm²
4. 42 mm²
5. 56 mm²
6. 51 mm²
7. 57 mm²
8. 48 mm²
9. 70 mm²
10. 29 mm²