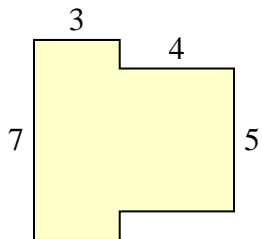




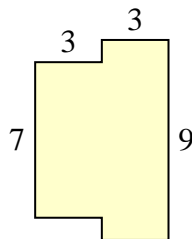
Trova l'area di ciascuna forma, Le misure sono in millimetri (mm). Non fare l'equivalenza.

Risposte

1)



2)



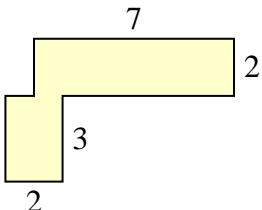
1. _____

2. _____

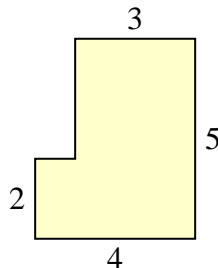
3. _____

4. _____

3)



4)



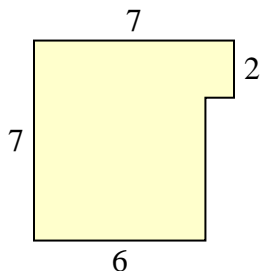
5. _____

6. _____

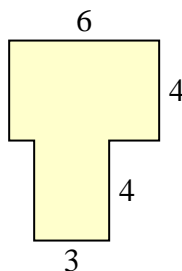
7. _____

8. _____

5)



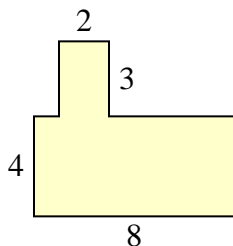
6)



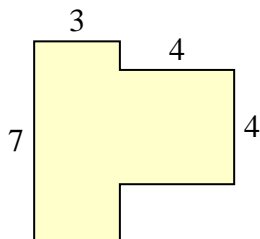
9. _____

10. _____

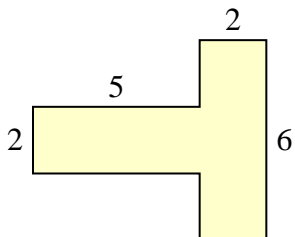
7)



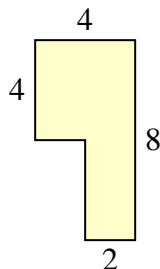
8)



9)



10)

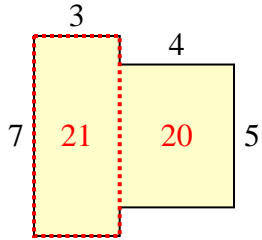




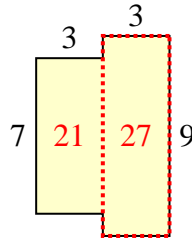
Trova l'area di ciascuna forma, Le misure sono in millimetri (mm). Non fare l'equivalenza.

Risposte

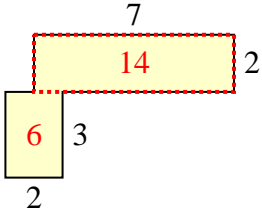
1)



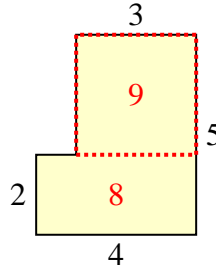
2)



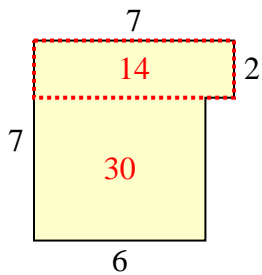
3)



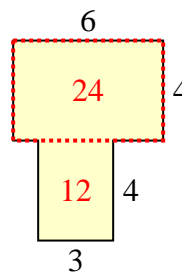
4)



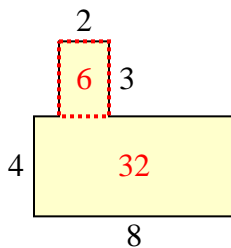
5)



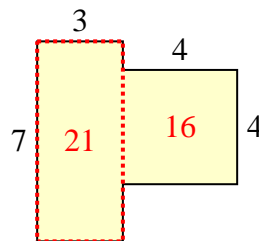
6)



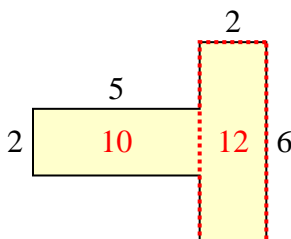
7)



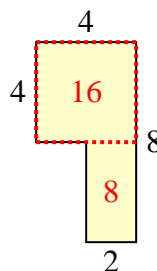
8)



9)



10)

1. 41 mm²2. 48 mm²3. 20 mm²4. 17 mm²5. 44 mm²6. 36 mm²7. 38 mm²8. 37 mm²9. 22 mm²10. 24 mm²