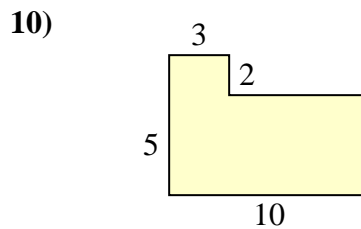
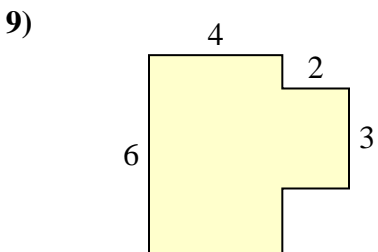
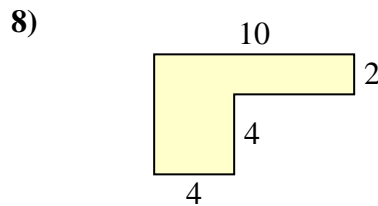
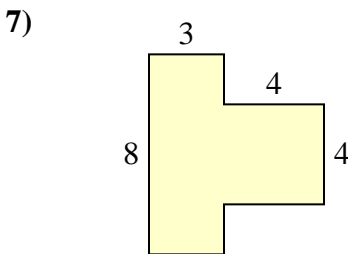
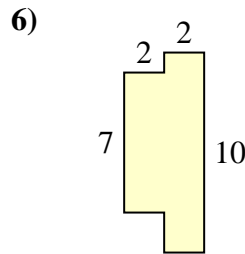
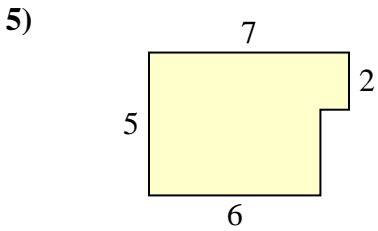
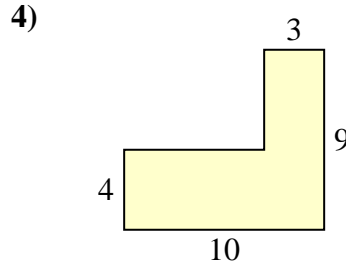
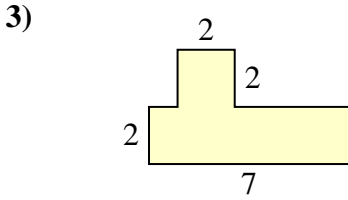
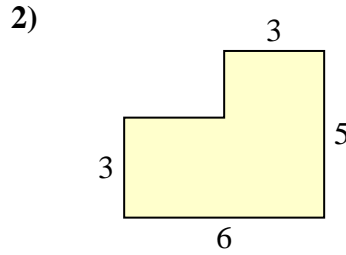
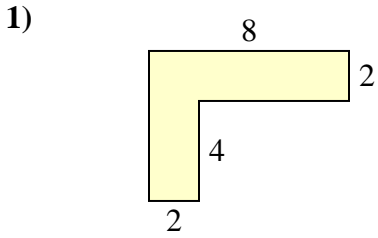




Trova l'area di ciascuna forma, Le misure sono in millimetri (mm). Non fare l'equivalenza.

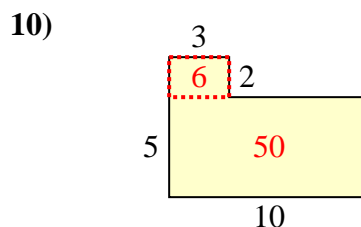
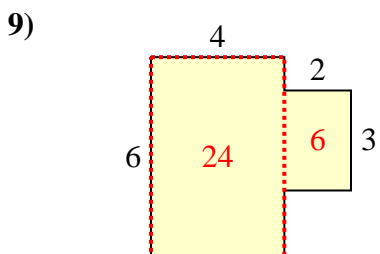
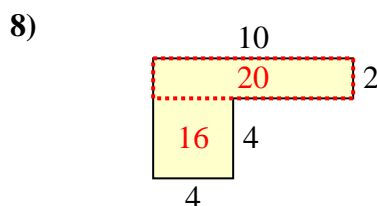
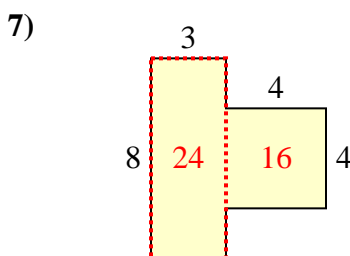
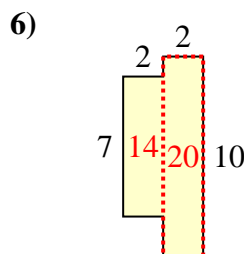
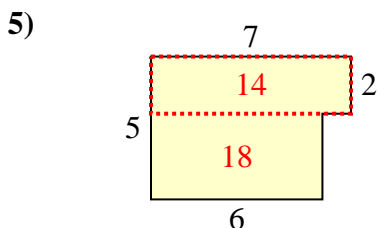
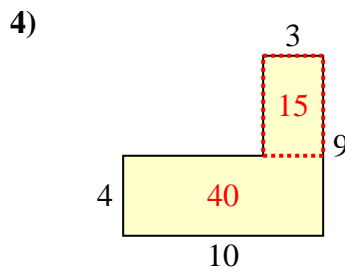
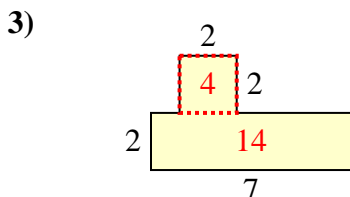
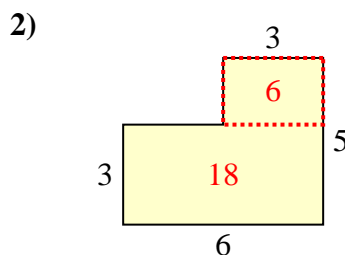
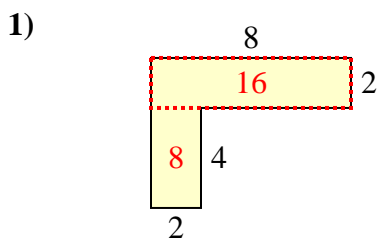
**Risposte**



1. \_\_\_\_\_
2. \_\_\_\_\_
3. \_\_\_\_\_
4. \_\_\_\_\_
5. \_\_\_\_\_
6. \_\_\_\_\_
7. \_\_\_\_\_
8. \_\_\_\_\_
9. \_\_\_\_\_
10. \_\_\_\_\_



Trova l'area di ciascuna forma, Le misure sono in millimetri (mm). Non fare l'equivalenza.

**Risposte**

1. 24 mm<sup>2</sup>

2. 24 mm<sup>2</sup>

3. 18 mm<sup>2</sup>

4. 55 mm<sup>2</sup>

5. 32 mm<sup>2</sup>

6. 34 mm<sup>2</sup>

7. 40 mm<sup>2</sup>

8. 36 mm<sup>2</sup>

9. 30 mm<sup>2</sup>

10. 56 mm<sup>2</sup>