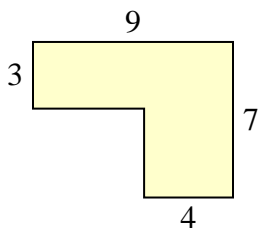




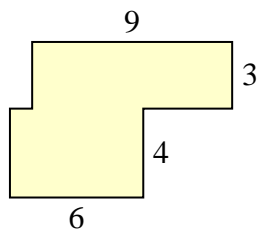
Trova l'area di ciascuna forma, Le misure sono in millimetri (mm). Non fare l'equivalenza.

Risposte

1)



2)



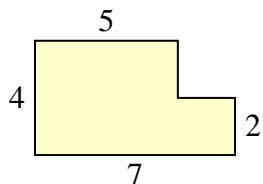
1. _____

2. _____

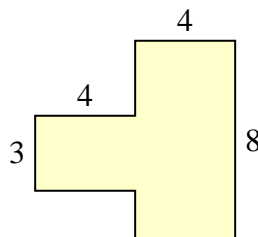
3. _____

4. _____

3)



4)



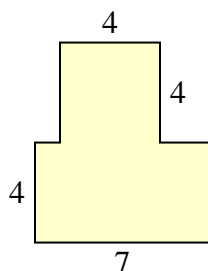
5. _____

6. _____

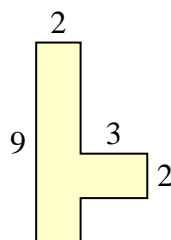
7. _____

8. _____

5)



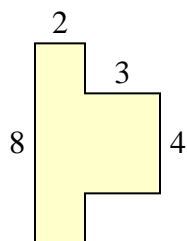
6)



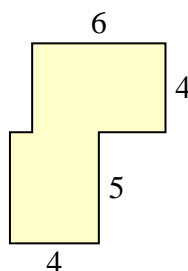
9. _____

10. _____

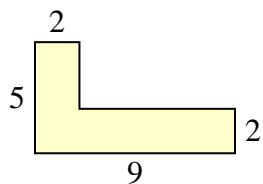
7)



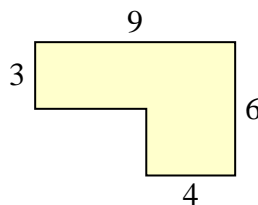
8)



9)

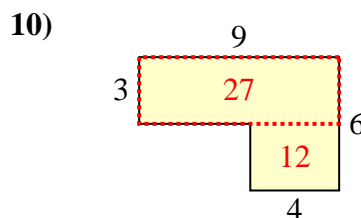
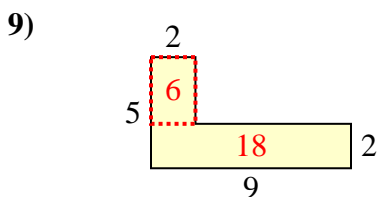
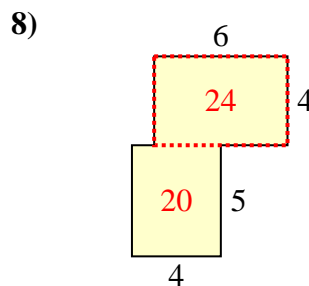
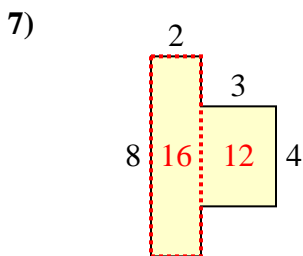
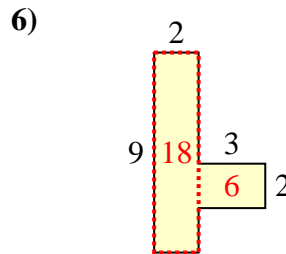
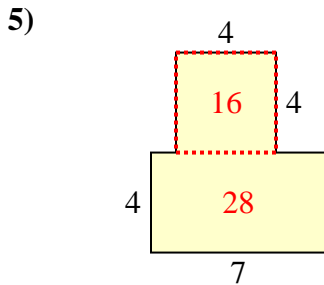
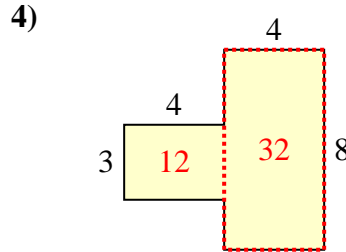
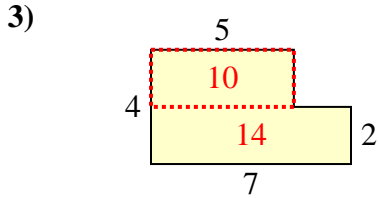
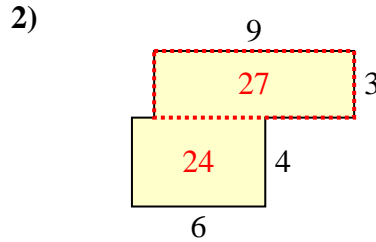
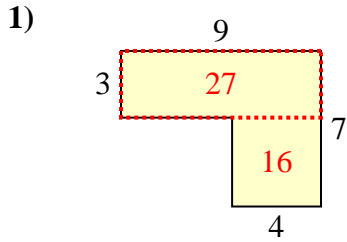


10)





Trova l'area di ciascuna forma, Le misure sono in millimetri (mm). Non fare l'equivalenza.

Risposte

1. 43 mm²
2. 51 mm²
3. 24 mm²
4. 44 mm²
5. 44 mm²
6. 24 mm²
7. 28 mm²
8. 44 mm²
9. 24 mm²
10. 39 mm²