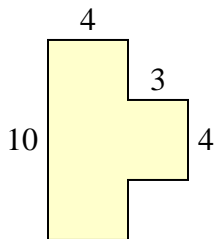




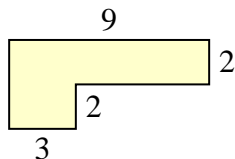
Trova l'area di ciascuna forma, Le misure sono in millimetri (mm). Non fare l'equivalenza.

Risposte

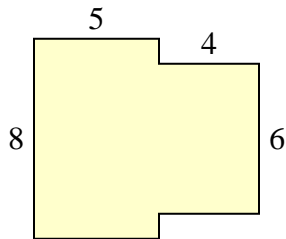
1)



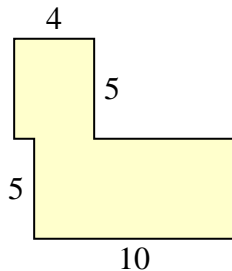
2)



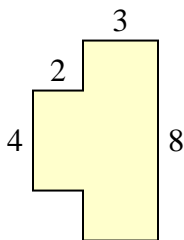
3)



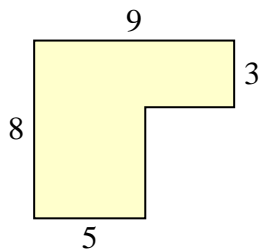
4)



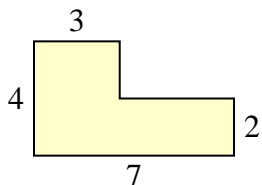
5)



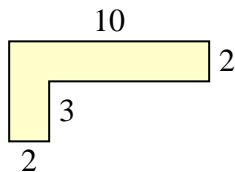
6)



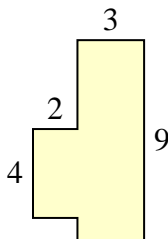
7)



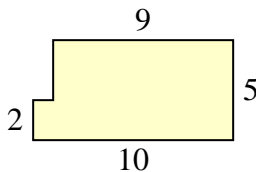
8)



9)



10)



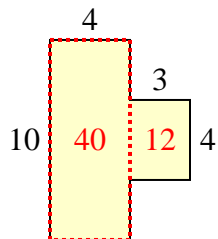
- 1. _____
- 2. _____
- 3. _____
- 4. _____
- 5. _____
- 6. _____
- 7. _____
- 8. _____
- 9. _____
- 10. _____



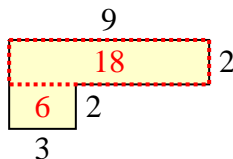
Trova l'area di ciascuna forma, Le misure sono in millimetri (mm). Non fare l'equivalenza.

Risposte

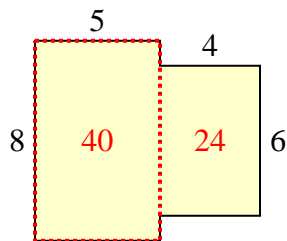
1)



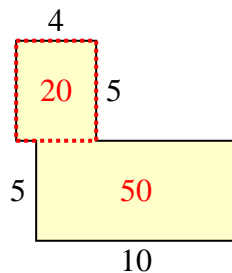
2)

1. **52 mm²**2. **24 mm²**

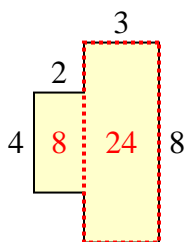
3)



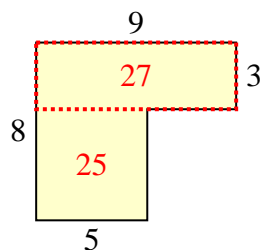
4)

3. **64 mm²**4. **70 mm²**5. **32 mm²**6. **52 mm²**

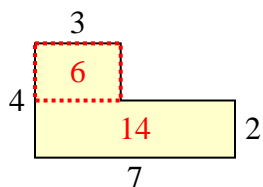
5)



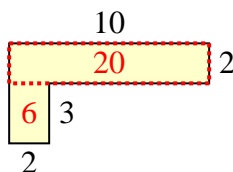
6)

7. **20 mm²**8. **26 mm²**9. **35 mm²**

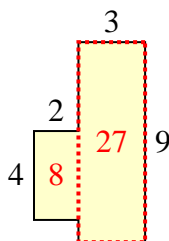
7)



8)

10. **47 mm²**

9)



10)

