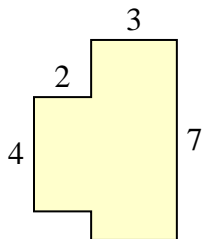




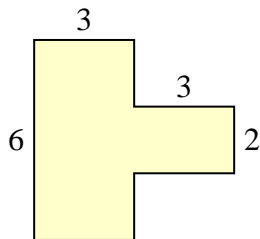
Trova l'area di ciascuna forma, Le misure sono in millimetri (mm). Non fare l'equivalenza.

Risposte

1)



2)



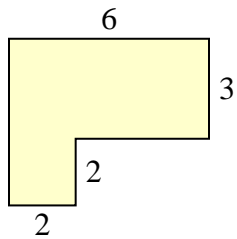
1. _____

2. _____

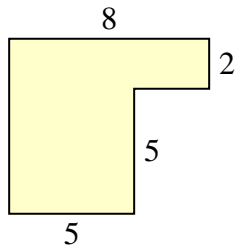
3. _____

4. _____

3)



4)



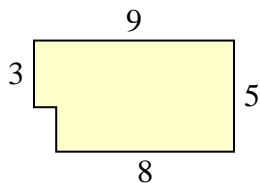
5. _____

6. _____

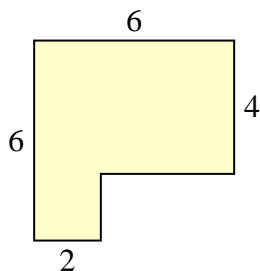
7. _____

8. _____

5)



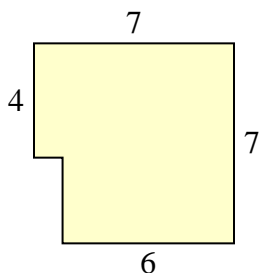
6)



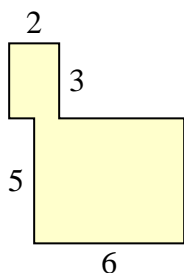
9. _____

10. _____

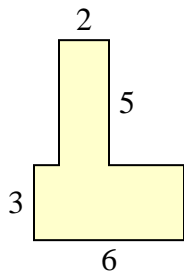
7)



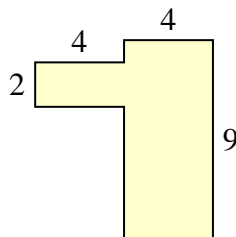
8)



9)



10)

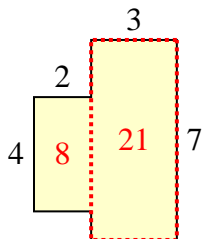




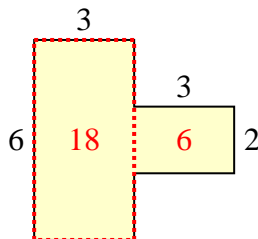
Trova l'area di ciascuna forma, Le misure sono in millimetri (mm). Non fare l'equivalenza.

Risposte

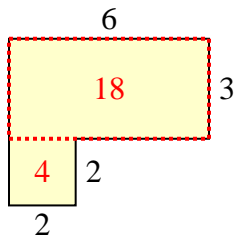
1)



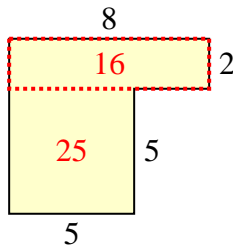
2)

1. 29 mm²2. 24 mm²3. 22 mm²4. 41 mm²

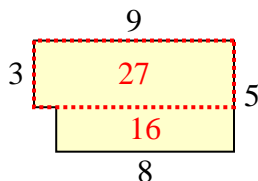
3)



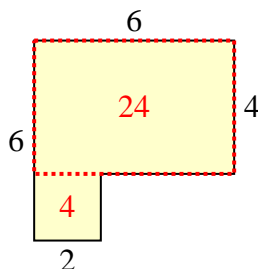
4)

5. 43 mm²6. 28 mm²7. 46 mm²8. 36 mm²

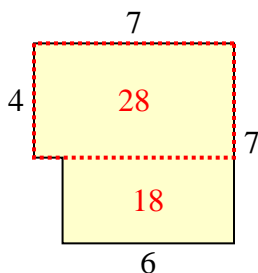
5)



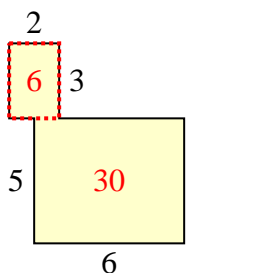
6)

9. 28 mm²10. 44 mm²

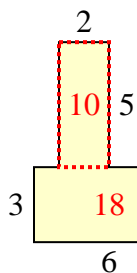
7)



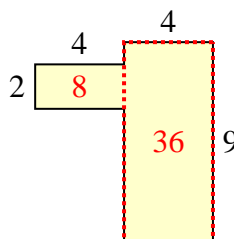
8)



9)



10)

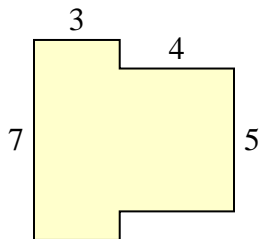




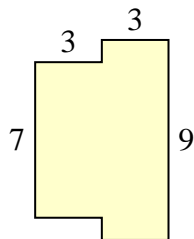
Trova l'area di ciascuna forma, Le misure sono in millimetri (mm). Non fare l'equivalenza.

Risposte

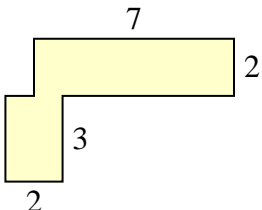
1)



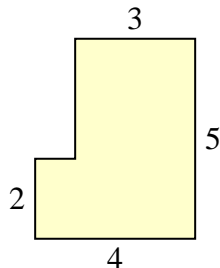
2)



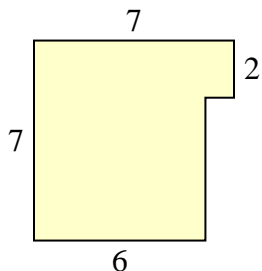
3)



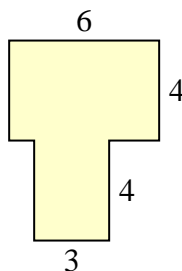
4)



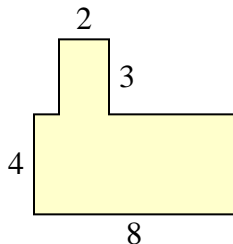
5)



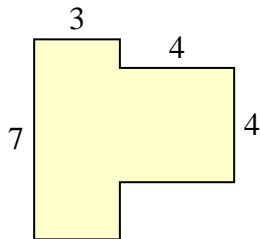
6)



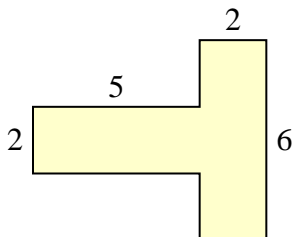
7)



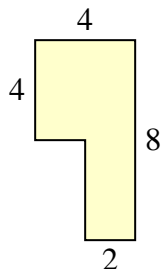
8)



9)



10)



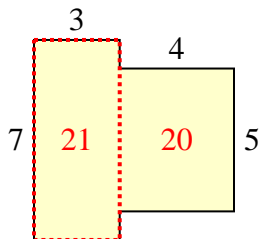
- 1. _____
- 2. _____
- 3. _____
- 4. _____
- 5. _____
- 6. _____
- 7. _____
- 8. _____
- 9. _____
- 10. _____



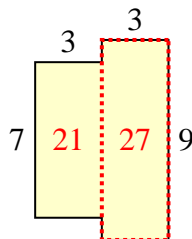
Trova l'area di ciascuna forma, Le misure sono in millimetri (mm). Non fare l'equivalenza.

Risposte

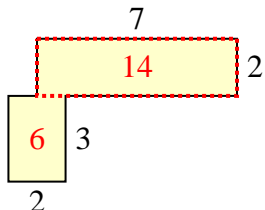
1)



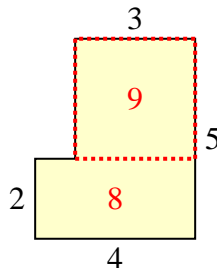
2)



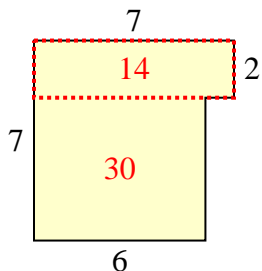
3)



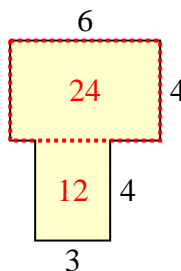
4)



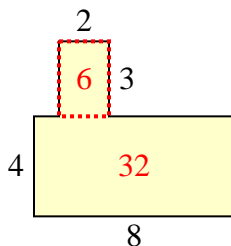
5)



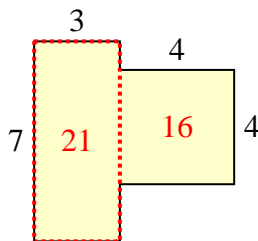
6)



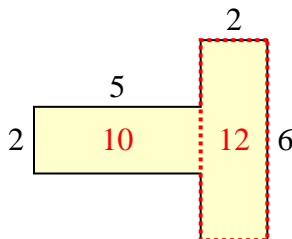
7)



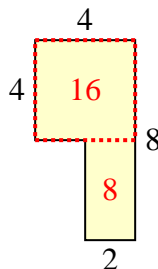
8)



9)



10)



1. 41 mm²

2. 48 mm²

3. 20 mm²

4. 17 mm²

5. 44 mm²

6. 36 mm²

7. 38 mm²

8. 37 mm²

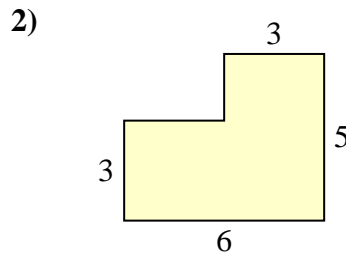
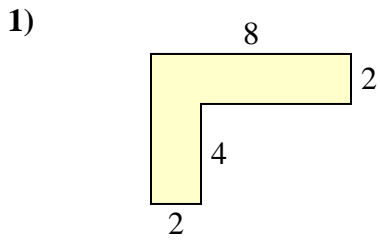
9. 22 mm²

10. 24 mm²

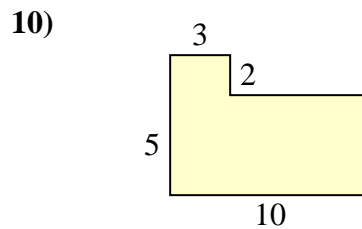
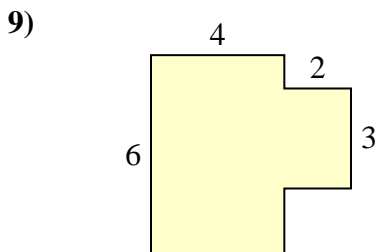
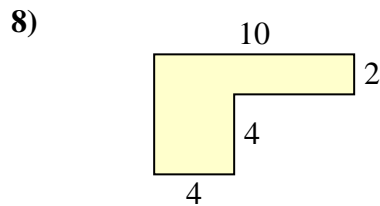
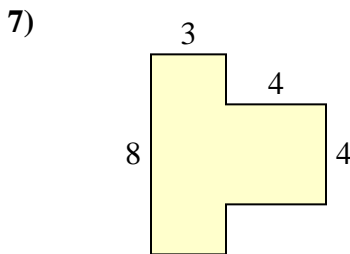
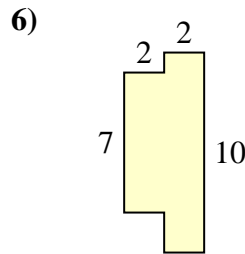
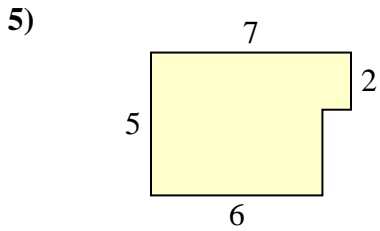
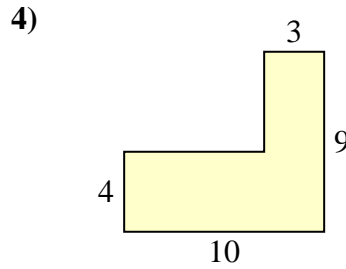
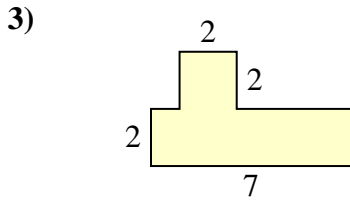


Trova l'area di ciascuna forma, Le misure sono in millimetri (mm). Non fare l'equivalenza.

Risposte

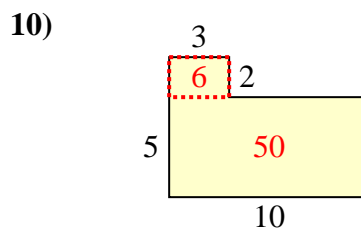
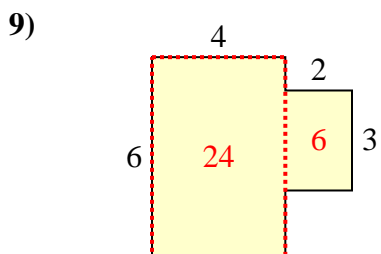
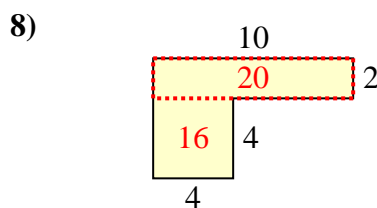
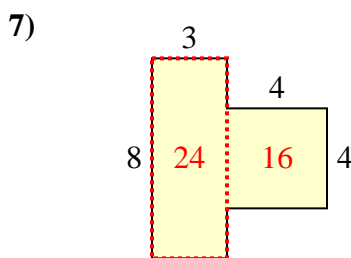
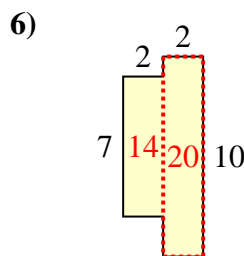
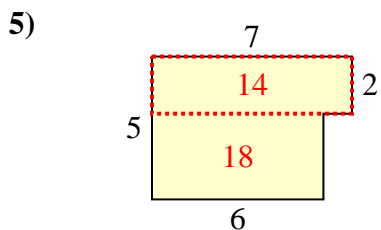
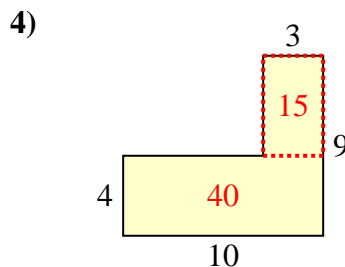
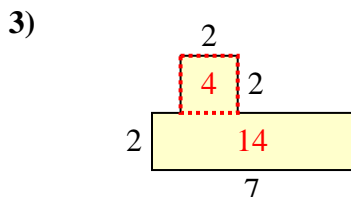
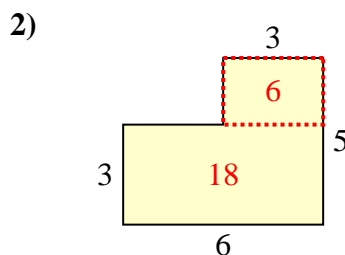
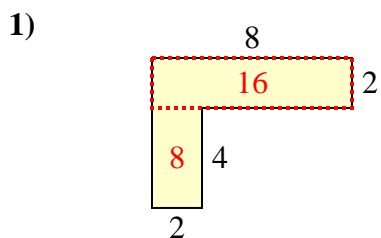


- 1. _____
- 2. _____
- 3. _____
- 4. _____
- 5. _____
- 6. _____
- 7. _____
- 8. _____
- 9. _____
- 10. _____





Trova l'area di ciascuna forma, Le misure sono in millimetri (mm). Non fare l'equivalenza.

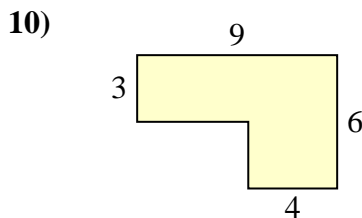
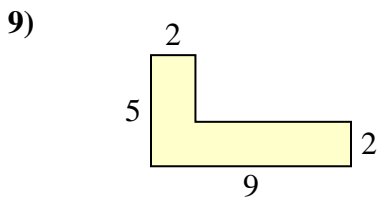
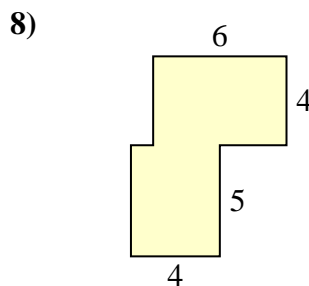
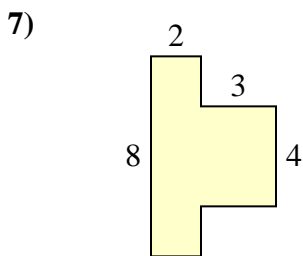
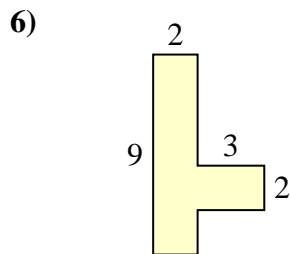
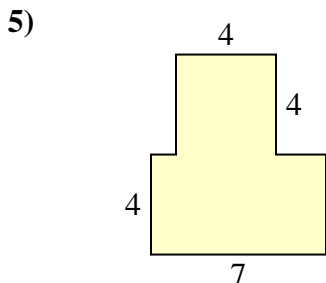
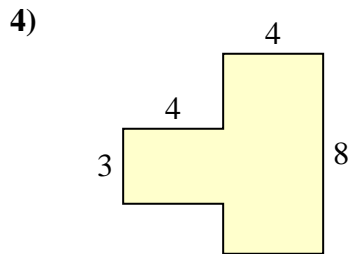
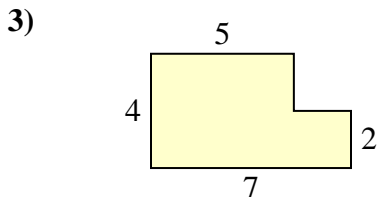
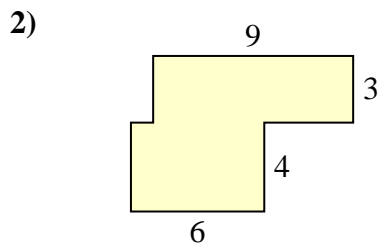
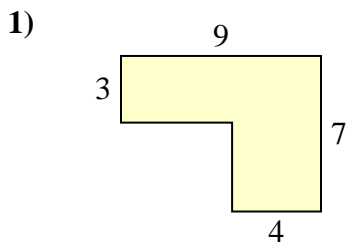
Risposte

1. 24 mm²
2. 24 mm²
3. 18 mm²
4. 55 mm²
5. 32 mm²
6. 34 mm²
7. 40 mm²
8. 36 mm²
9. 30 mm²
10. 56 mm²



Trova l'area di ciascuna forma, Le misure sono in millimetri (mm). Non fare l'equivalenza.

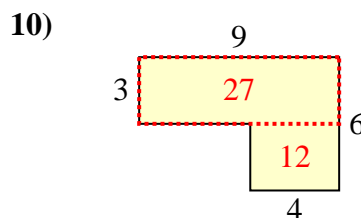
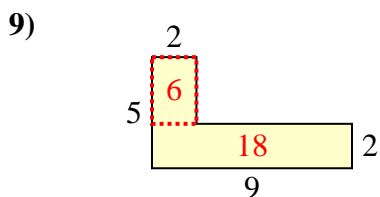
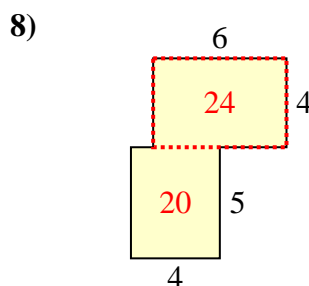
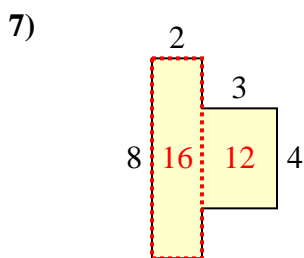
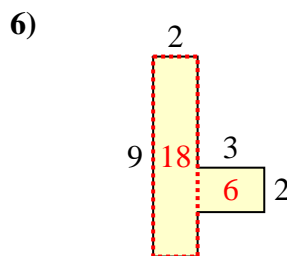
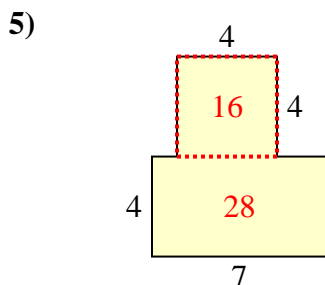
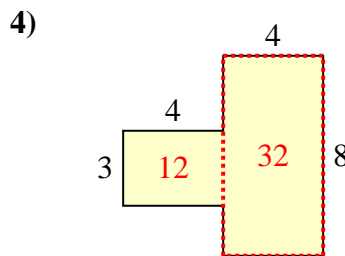
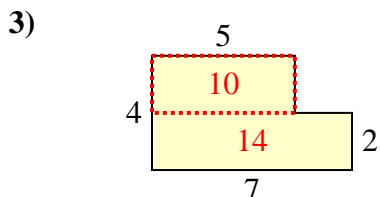
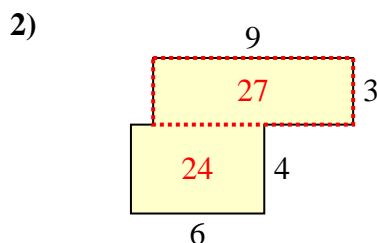
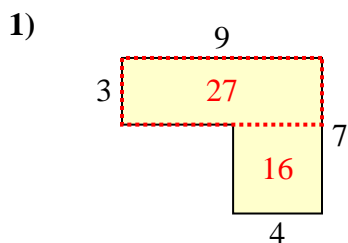
Risposte



1. _____
2. _____
3. _____
4. _____
5. _____
6. _____
7. _____
8. _____
9. _____
10. _____



Trova l'area di ciascuna forma, Le misure sono in millimetri (mm). Non fare l'equivalenza.

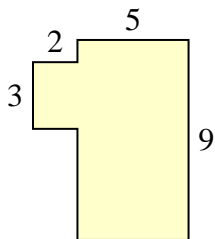
Risposte1. **43 mm²**2. **51 mm²**3. **24 mm²**4. **44 mm²**5. **44 mm²**6. **24 mm²**7. **28 mm²**8. **44 mm²**9. **24 mm²**10. **39 mm²**



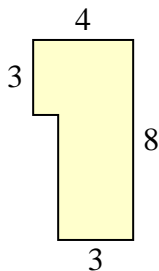
Trova l'area di ciascuna forma, Le misure sono in millimetri (mm). Non fare l'equivalenza.

Risposte

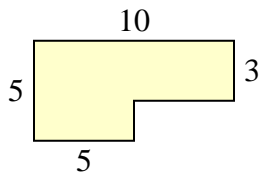
1)



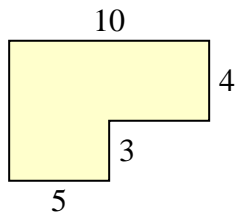
2)



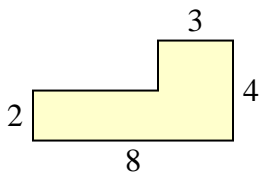
3)



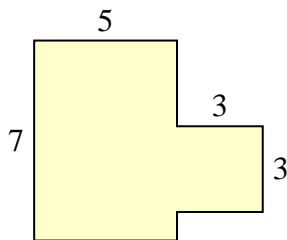
4)



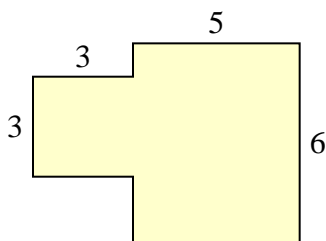
5)



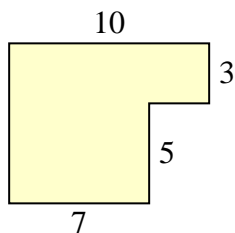
6)



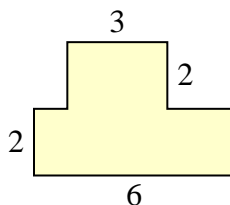
7)



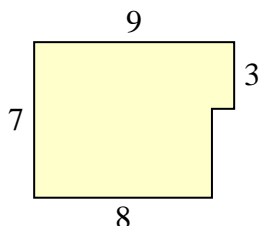
8)



9)



10)



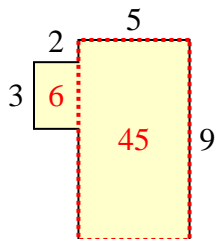
- 1. _____
- 2. _____
- 3. _____
- 4. _____
- 5. _____
- 6. _____
- 7. _____
- 8. _____
- 9. _____
- 10. _____



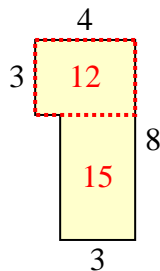
Trova l'area di ciascuna forma, Le misure sono in millimetri (mm). Non fare l'equivalenza.

Risposte

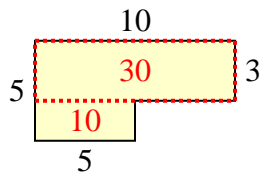
1)



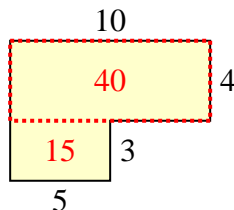
2)



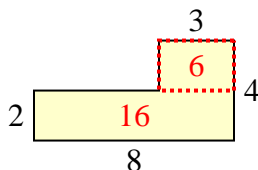
3)



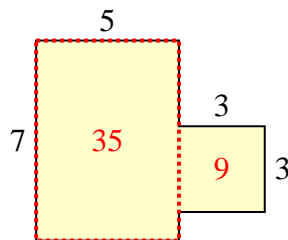
4)



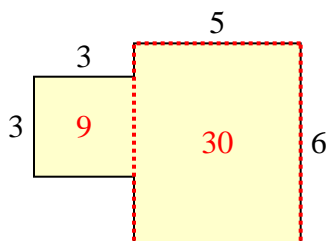
5)



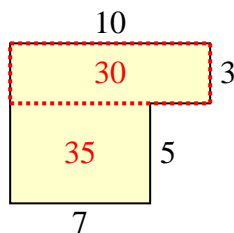
6)



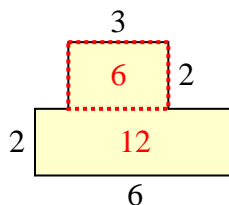
7)



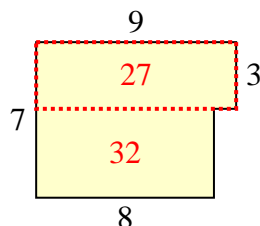
8)



9)



10)



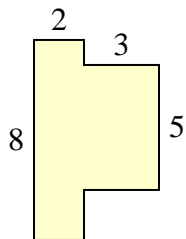
1. 51 mm²
2. 27 mm²
3. 40 mm²
4. 55 mm²
5. 22 mm²
6. 44 mm²
7. 39 mm²
8. 65 mm²
9. 18 mm²
10. 59 mm²



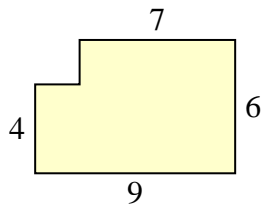
Trova l'area di ciascuna forma, Le misure sono in millimetri (mm). Non fare l'equivalenza.

Risposte

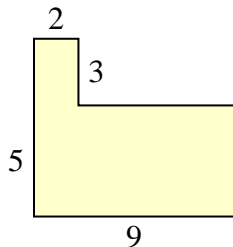
1)



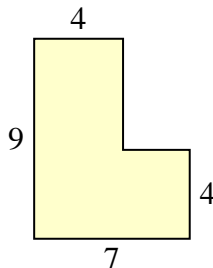
2)



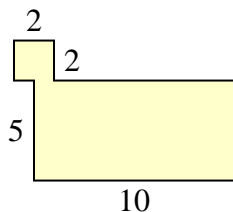
3)



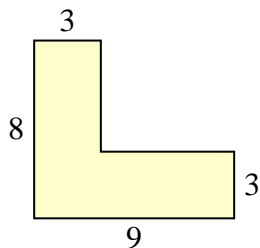
4)



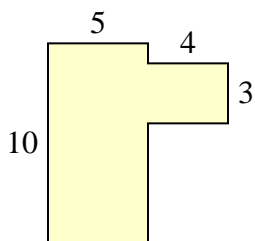
5)



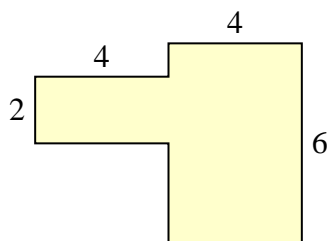
6)



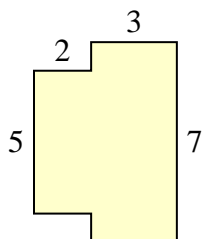
7)



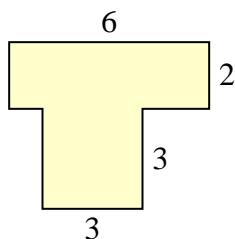
8)



9)



10)

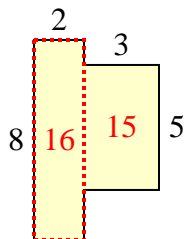


1. _____
2. _____
3. _____
4. _____
5. _____
6. _____
7. _____
8. _____
9. _____
10. _____

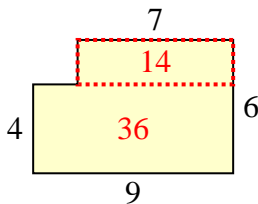


Trova l'area di ciascuna forma, Le misure sono in millimetri (mm). Non fare l'equivalenza.

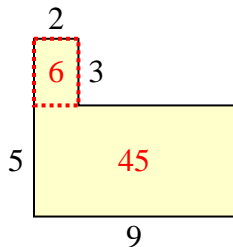
1)



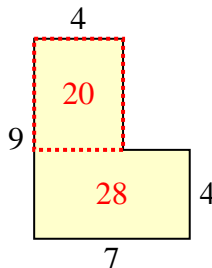
2)



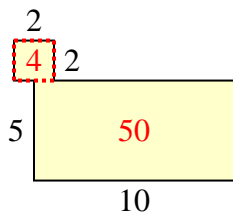
3)



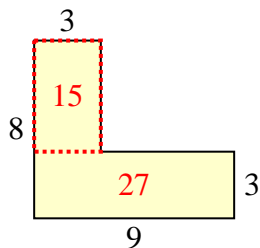
4)



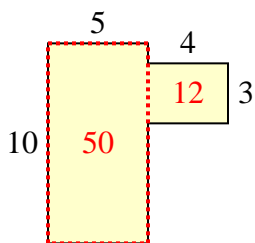
5)



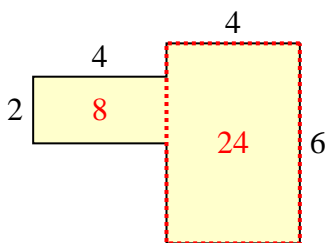
6)



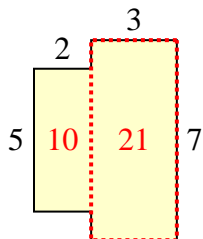
7)



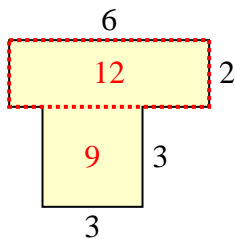
8)



9)



10)



Risposte

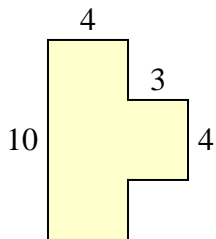
1. 31 mm²
2. 50 mm²
3. 51 mm²
4. 48 mm²
5. 54 mm²
6. 42 mm²
7. 62 mm²
8. 32 mm²
9. 31 mm²
10. 21 mm²



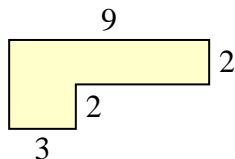
Trova l'area di ciascuna forma, Le misure sono in millimetri (mm). Non fare l'equivalenza.

Risposte

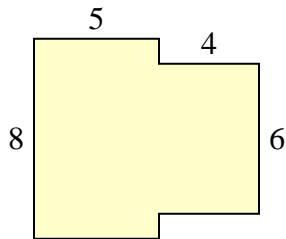
1)



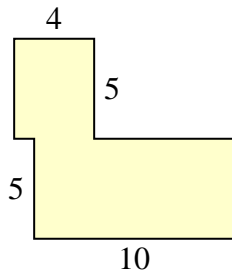
2)



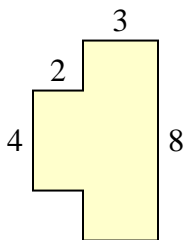
3)



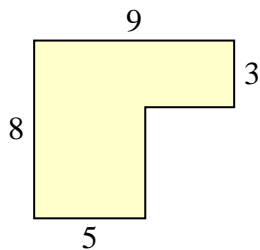
4)



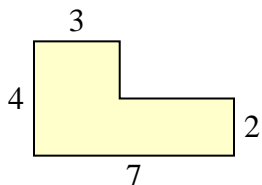
5)



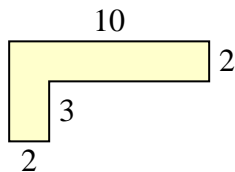
6)



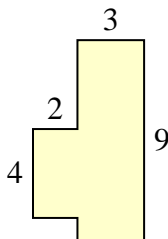
7)



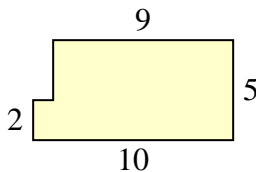
8)



9)



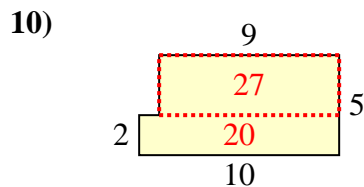
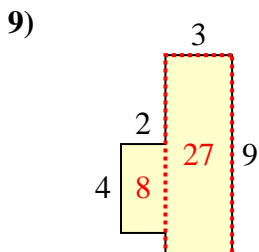
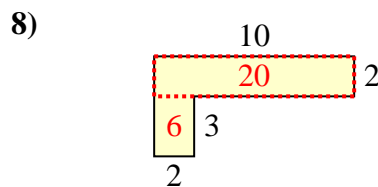
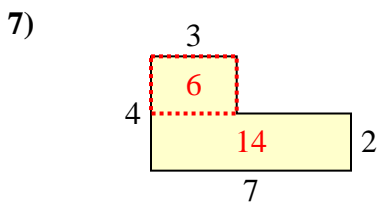
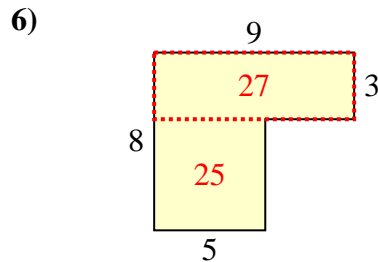
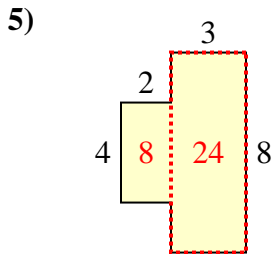
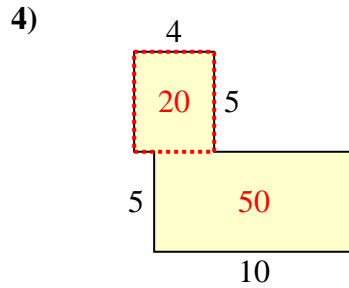
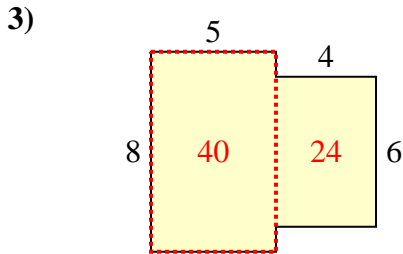
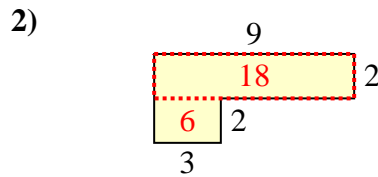
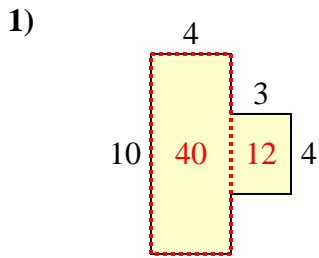
10)



- 1. _____
- 2. _____
- 3. _____
- 4. _____
- 5. _____
- 6. _____
- 7. _____
- 8. _____
- 9. _____
- 10. _____



Trova l'area di ciascuna forma, Le misure sono in millimetri (mm). Non fare l'equivalenza.

Risposte

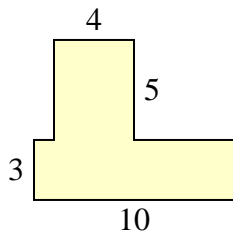
1. 52 mm²
2. 24 mm²
3. 64 mm²
4. 70 mm²
5. 32 mm²
6. 52 mm²
7. 20 mm²
8. 26 mm²
9. 35 mm²
10. 47 mm²



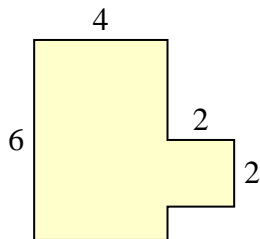
Trova l'area di ciascuna forma, Le misure sono in millimetri (mm). Non fare l'equivalenza.

Risposte

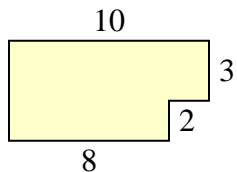
1)



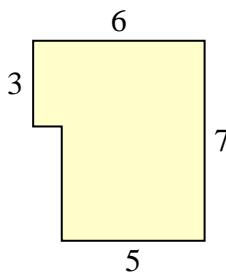
2)



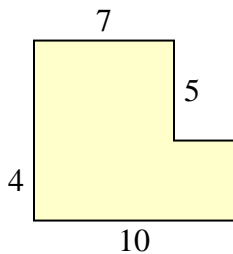
3)



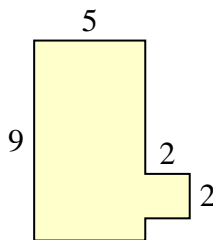
4)



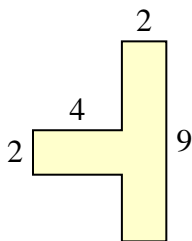
5)



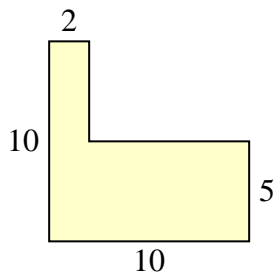
6)



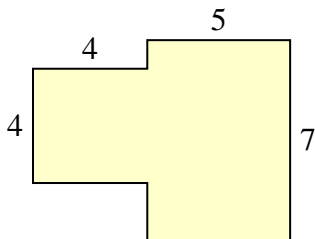
7)



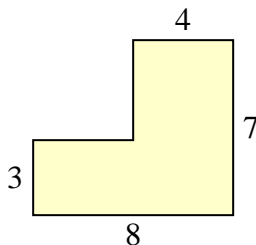
8)



9)



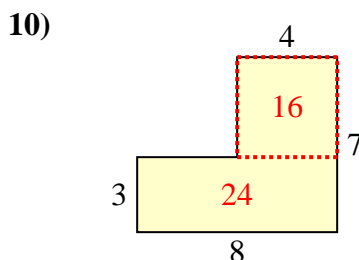
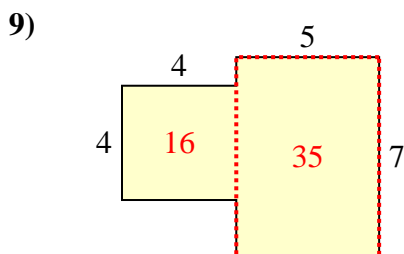
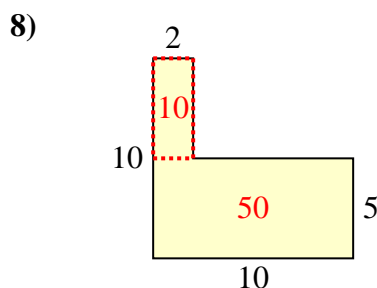
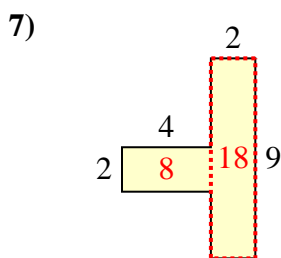
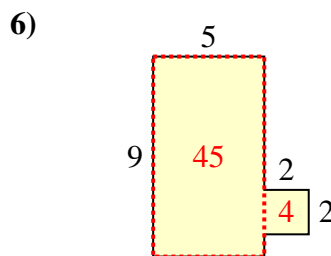
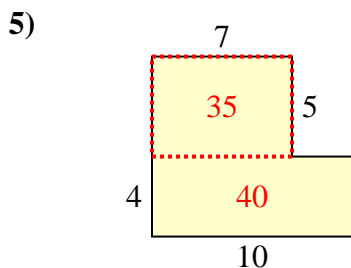
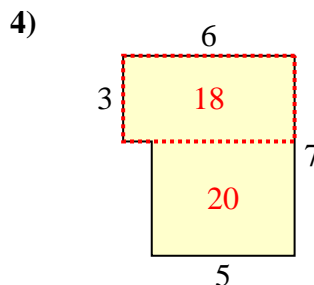
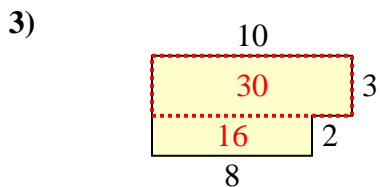
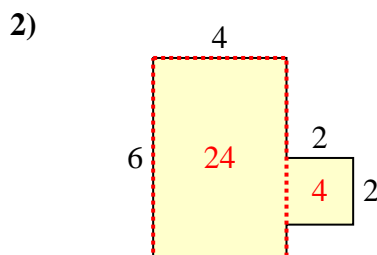
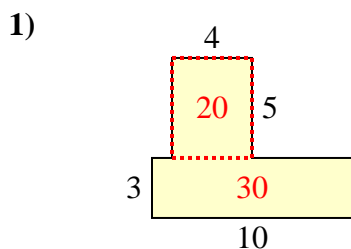
10)



- 1. _____
- 2. _____
- 3. _____
- 4. _____
- 5. _____
- 6. _____
- 7. _____
- 8. _____
- 9. _____
- 10. _____



Trova l'area di ciascuna forma, Le misure sono in millimetri (mm). Non fare l'equivalenza.

Risposte

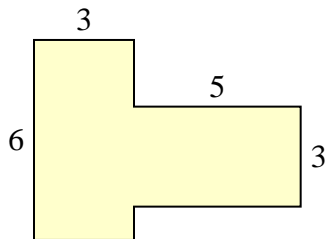
1. 50 mm²
2. 28 mm²
3. 46 mm²
4. 38 mm²
5. 75 mm²
6. 49 mm²
7. 26 mm²
8. 60 mm²
9. 51 mm²
10. 40 mm²



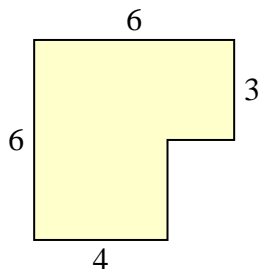
Trova l'area di ciascuna forma, Le misure sono in millimetri (mm). Non fare l'equivalenza.

Risposte

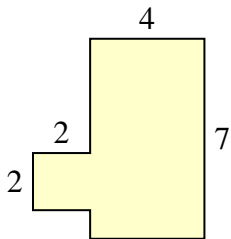
1)



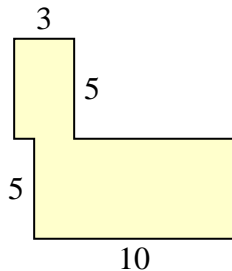
2)



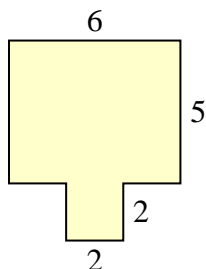
3)



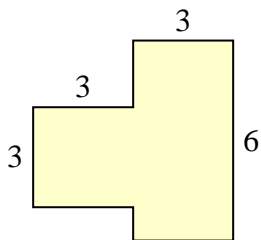
4)



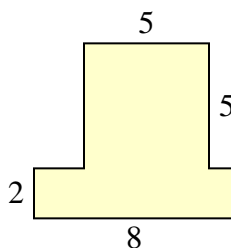
5)



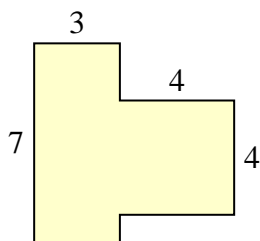
6)



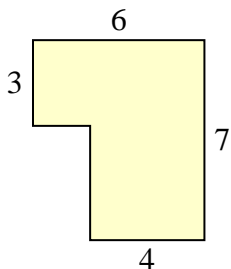
7)



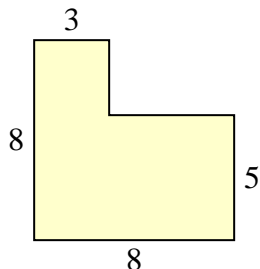
8)



9)



10)

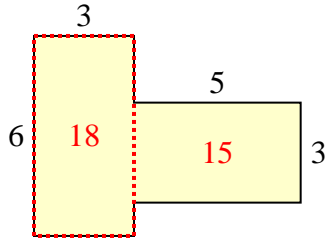


- 1. _____
- 2. _____
- 3. _____
- 4. _____
- 5. _____
- 6. _____
- 7. _____
- 8. _____
- 9. _____
- 10. _____

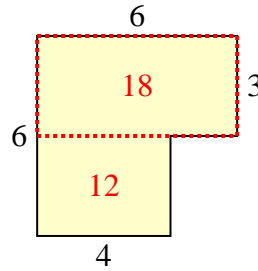


Trova l'area di ciascuna forma, Le misure sono in millimetri (mm). Non fare l'equivalenza.

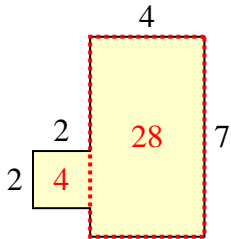
1)



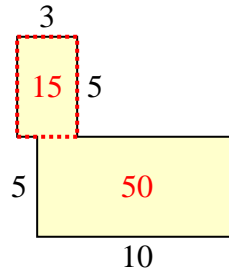
2)



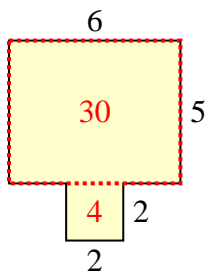
3)



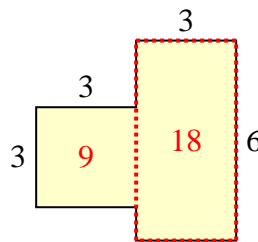
4)



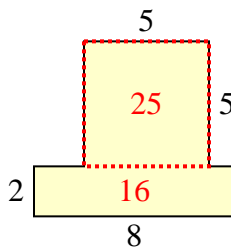
5)



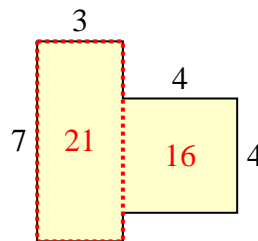
6)



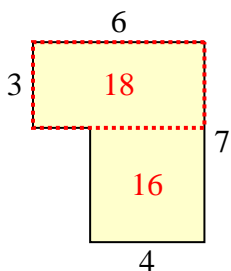
7)



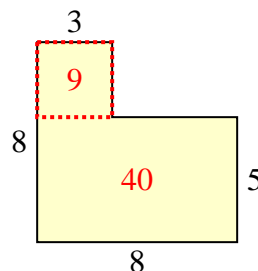
8)



9)



10)



Risposte

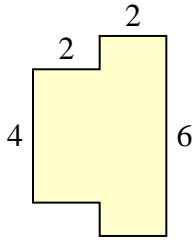
1. 33 mm²
2. 30 mm²
3. 32 mm²
4. 65 mm²
5. 34 mm²
6. 27 mm²
7. 41 mm²
8. 37 mm²
9. 34 mm²
10. 49 mm²



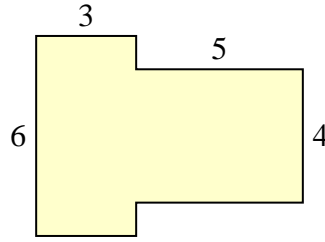
Trova l'area di ciascuna forma, Le misure sono in millimetri (mm). Non fare l'equivalenza.

Risposte

1)



2)



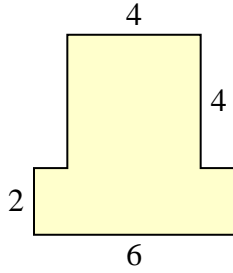
1. _____

2. _____

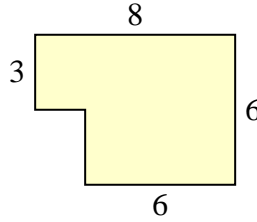
3. _____

4. _____

3)



4)



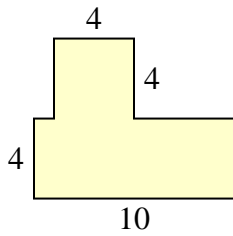
5. _____

6. _____

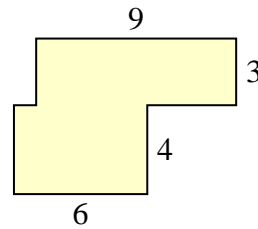
7. _____

8. _____

5)



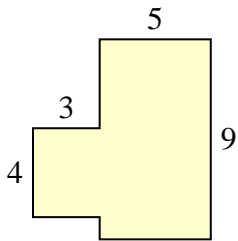
6)



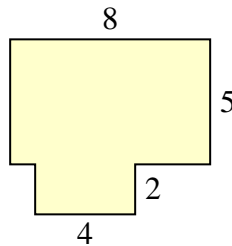
9. _____

10. _____

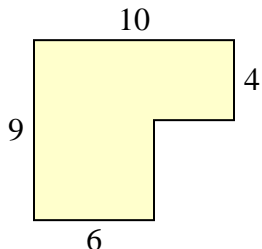
7)



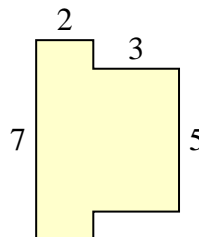
8)



9)



10)

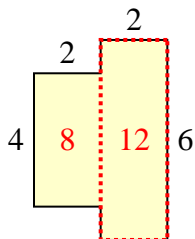




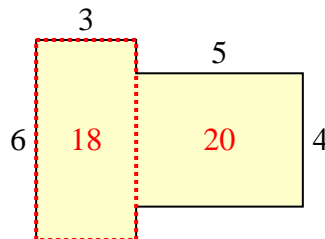
Trova l'area di ciascuna forma, Le misure sono in millimetri (mm). Non fare l'equivalenza.

Risposte

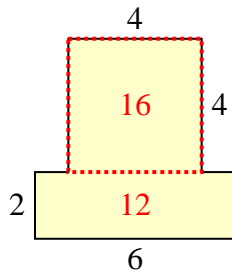
1)



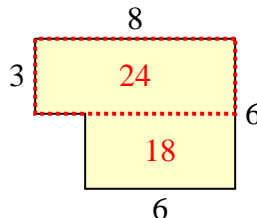
2)



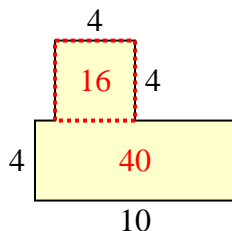
3)



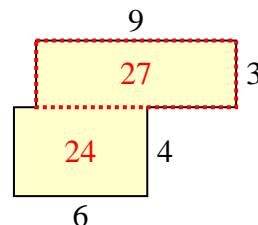
4)



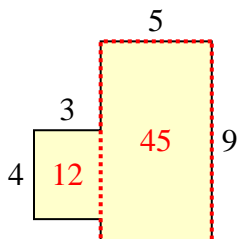
5)



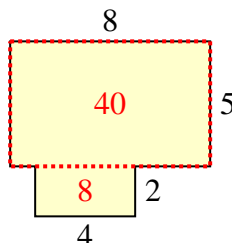
6)



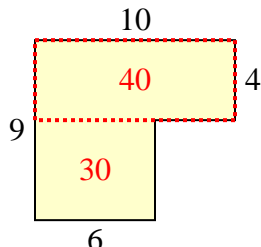
7)



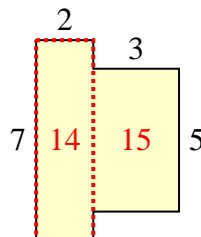
8)



9)



10)



1. 20 mm²
2. 38 mm²
3. 28 mm²
4. 42 mm²
5. 56 mm²
6. 51 mm²
7. 57 mm²
8. 48 mm²
9. 70 mm²
10. 29 mm²