

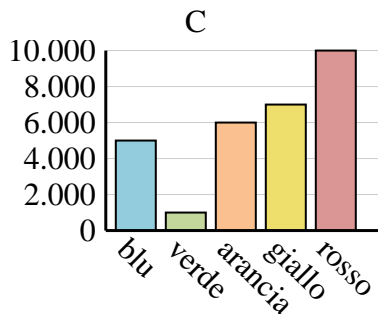
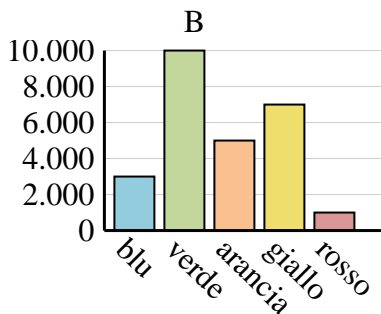
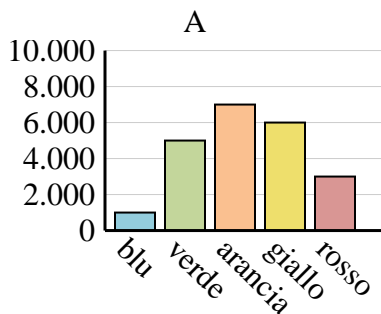


Determina quale grafico (A, B o C) rappresenta meglio le informazioni date nella tabella

Risposte

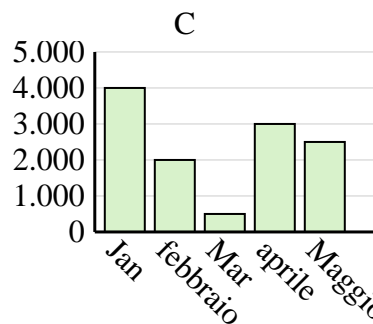
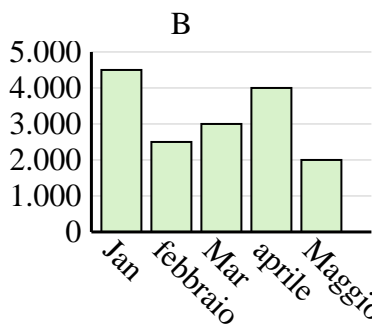
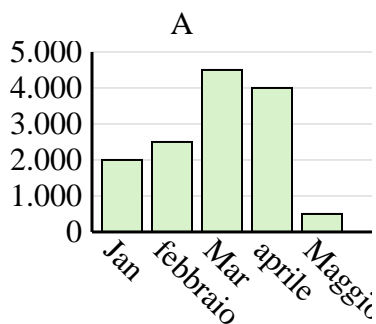
1)

Colore preferito	blu	verde	arancia	giallo	rosso
Le persone	1.000	5.000	7.000	6.000	3.000



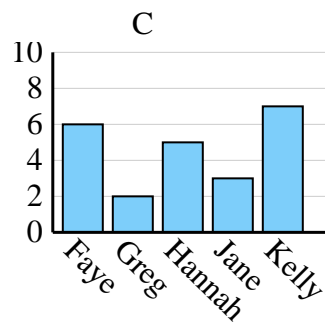
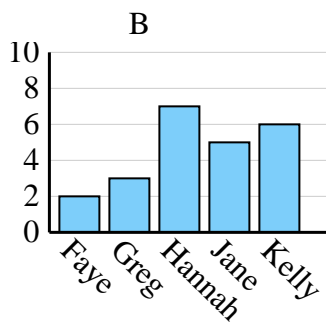
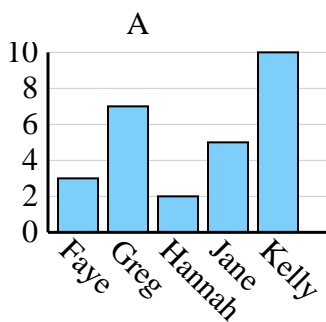
2)

Saldi	Jan	febbraio	Mar	aprile	Maggio
Mese	2.000	2.500	4.500	4.000	500



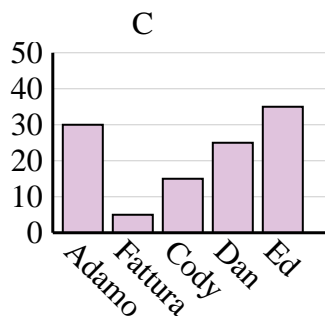
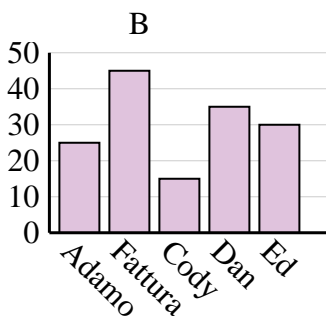
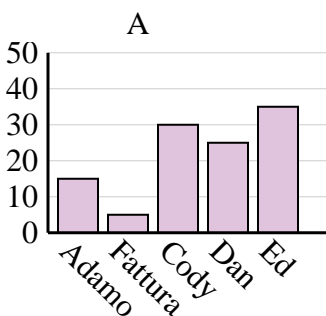
3)

Nome	Faye	Greg	Hannah	Jane	Kelly
Stati in cui vivevano	3	7	2	5	10



4)

Nome	Adamo	Fattura	Cody	Dan	Ed
Punti	25	45	15	35	30



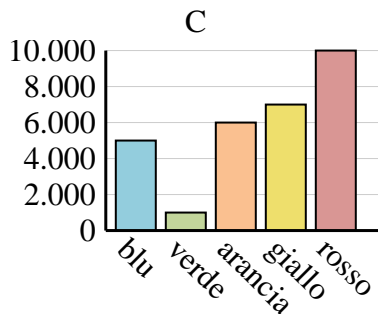
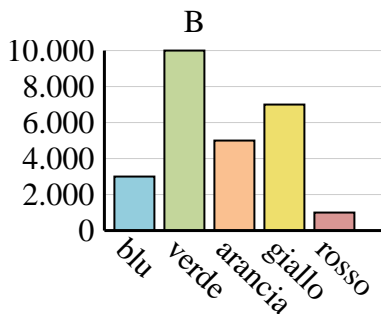
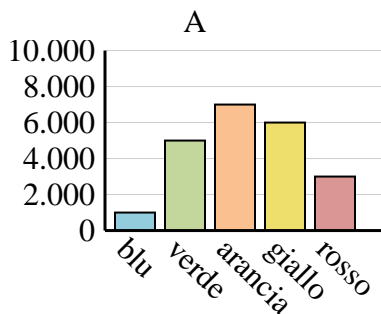
1. \_\_\_\_\_
2. \_\_\_\_\_
3. \_\_\_\_\_
4. \_\_\_\_\_



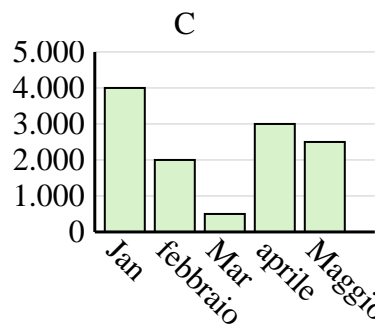
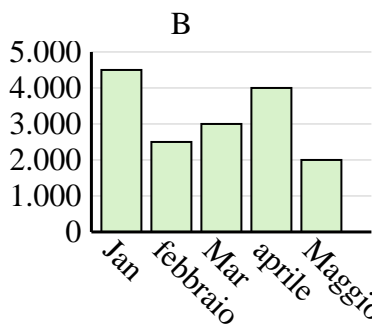
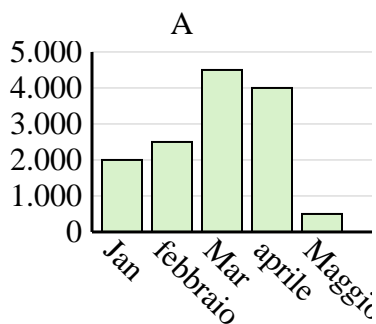
Determina quale grafico (A, B o C) rappresenta meglio le informazioni date nella tabella

Risposte

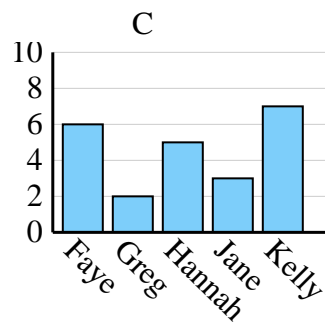
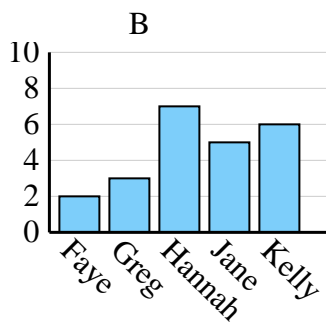
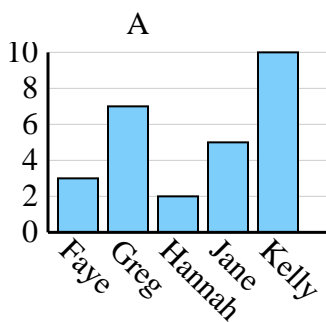
Colore preferito	blu	verde	arancia	giallo	rosso
Le persone	1.000	5.000	7.000	6.000	3.000



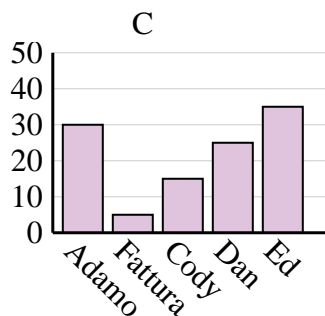
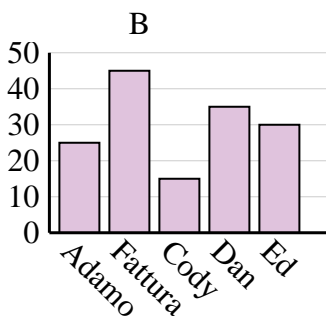
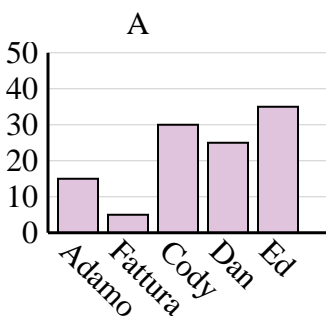
Saldi	Jan	febbraio	Mar	aprile	Maggio
Mese	2.000	2.500	4.500	4.000	500



Nome	Faye	Greg	Hannah	Jane	Kelly
Stati in cui vivevano	3	7	2	5	10



Nome	Adamo	Fattura	Cody	Dan	Ed
Punti	25	45	15	35	30



1. **A**
2. **A**
3. **A**
4. **B**