

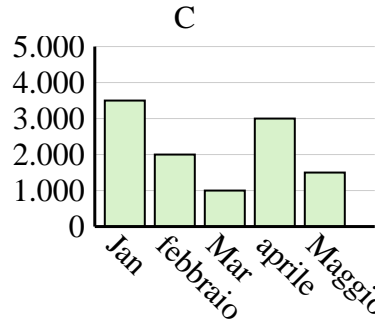
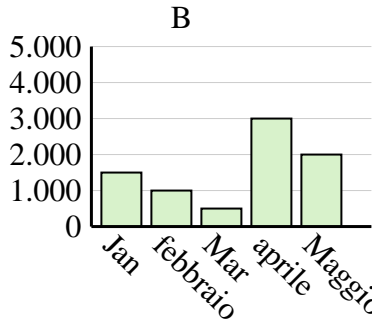
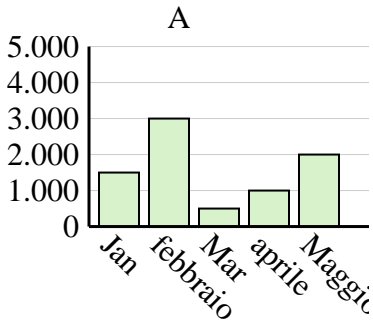


Determina quale grafico (A, B o C) rappresenta meglio le informazioni date nella tabella

Risposte

1)

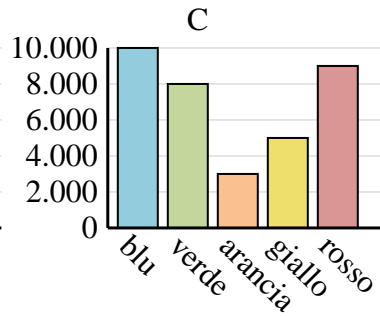
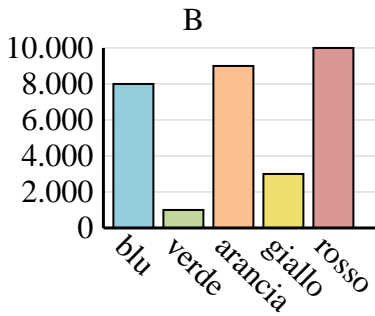
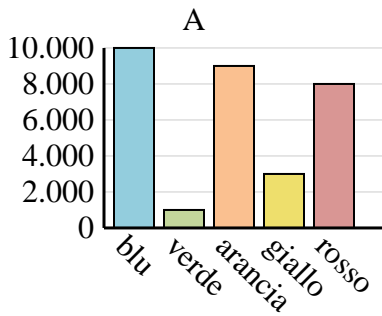
| Saldi | Jan | febbraio | Mar | aprile | Maggio |
|-------|-------|----------|-------|--------|--------|
| Mese | 3.500 | 2.000 | 1.000 | 3.000 | 1.500 |



1. _____
2. _____
3. _____
4. _____

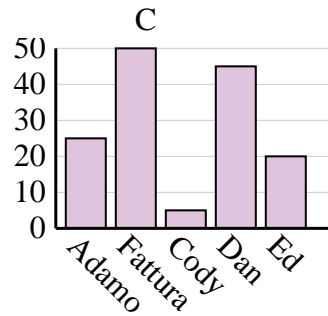
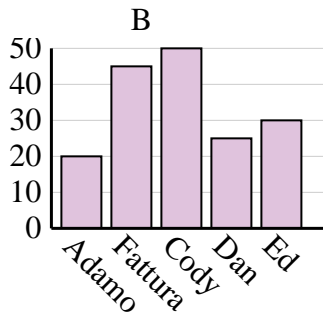
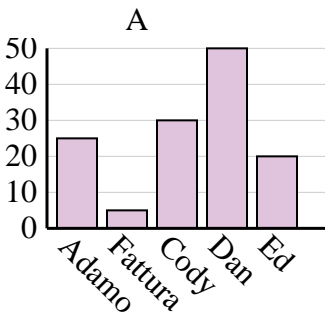
2)

| Colore preferito | blu | verde | arancia | giallo | rosso |
|------------------|--------|-------|---------|--------|-------|
| Le persone | 10.000 | 1.000 | 9.000 | 3.000 | 8.000 |



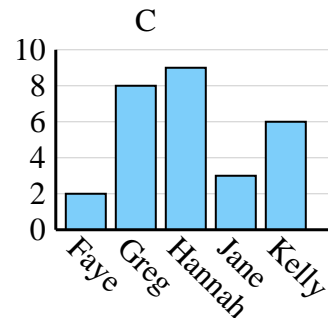
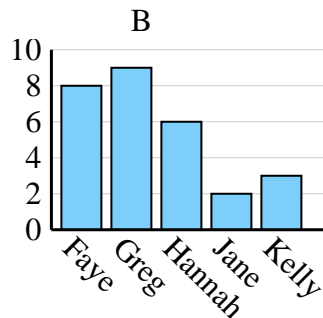
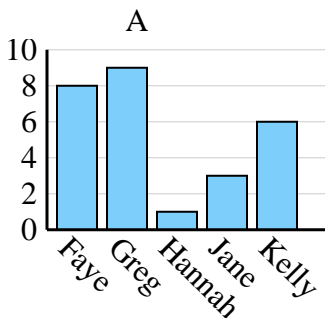
3)

| Nome | Adamo | Fattura | Cody | Dan | Ed |
|-------|-------|---------|------|-----|----|
| Punti | 25 | 5 | 30 | 50 | 20 |



4)

| Nome | Faye | Greg | Hannah | Jane | Kelly |
|-----------------------|------|------|--------|------|-------|
| Stati in cui vivevano | 8 | 9 | 1 | 3 | 6 |



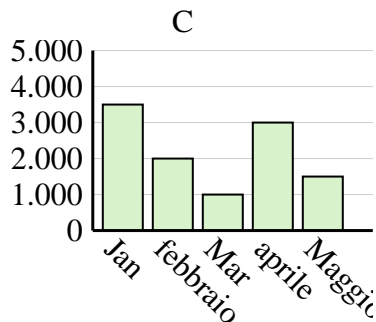
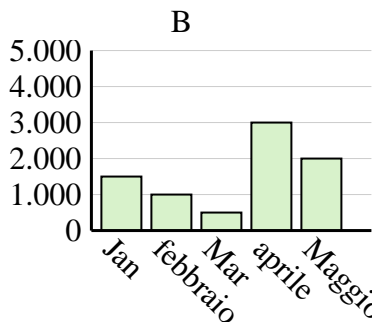
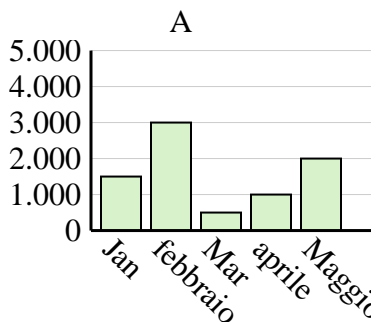


Determina quale grafico (A, B o C) rappresenta meglio le informazioni date nella tabella

Risposte

1)

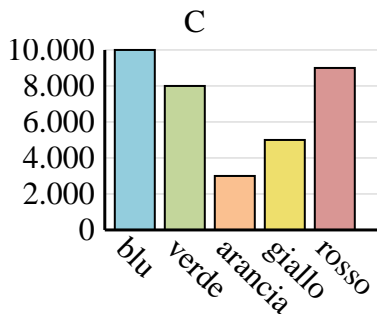
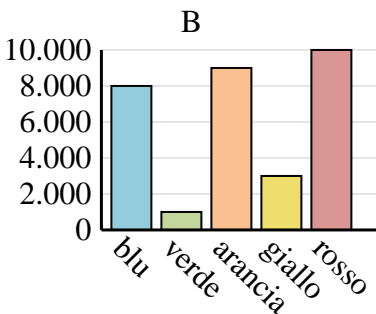
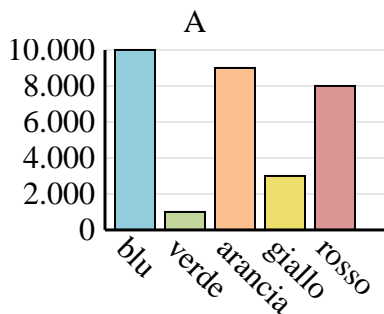
| Saldi | Jan | febbraio | Mar | aprile | Maggio |
|-------|-------|----------|-------|--------|--------|
| Mese | 3.500 | 2.000 | 1.000 | 3.000 | 1.500 |



1. **C**
2. **A**
3. **A**
4. **A**

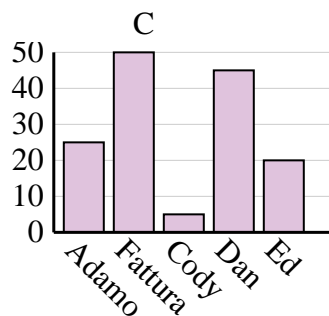
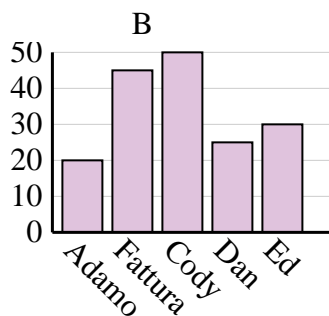
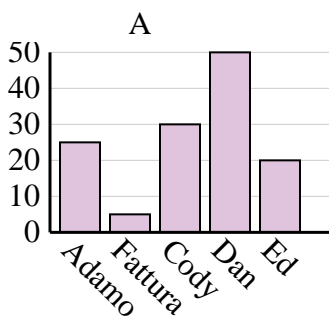
2)

| Colore preferito | blu | verde | arancia | giallo | rosso |
|------------------|--------|-------|---------|--------|-------|
| Le persone | 10.000 | 1.000 | 9.000 | 3.000 | 8.000 |



3)

| Nome | Adamo | Fattura | Cody | Dan | Ed |
|-------|-------|---------|------|-----|----|
| Punti | 25 | 5 | 30 | 50 | 20 |



4)

| Nome | Faye | Greg | Hannah | Jane | Kelly |
|-----------------------|------|------|--------|------|-------|
| Stati in cui vivevano | 8 | 9 | 1 | 3 | 6 |

