

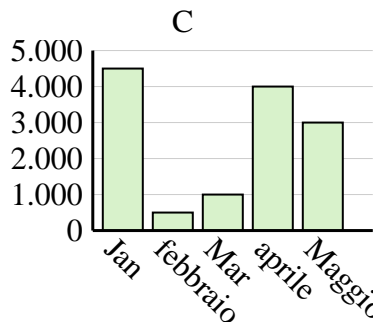
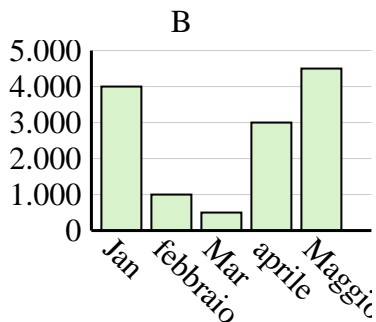
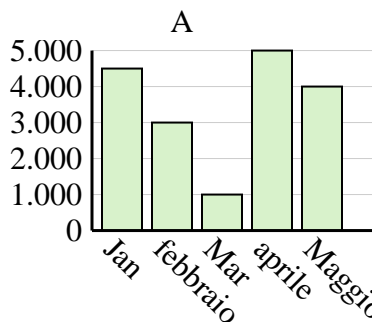


Determina quale grafico (A, B o C) rappresenta meglio le informazioni date nella tabella

**Risposte**

1)

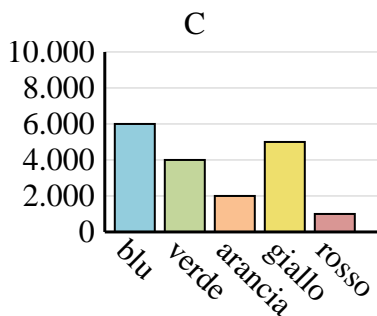
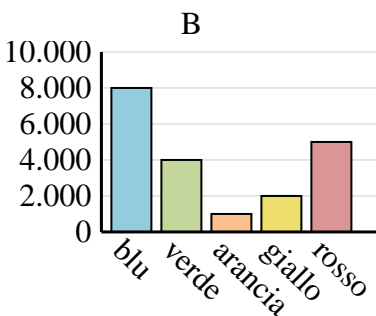
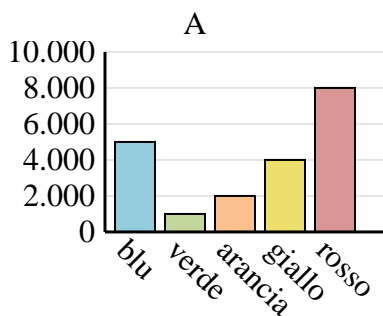
Saldi	Jan	febbraio	Mar	aprile	Maggio
Mese	4.000	1.000	500	3.000	4.500



1. \_\_\_\_\_
2. \_\_\_\_\_
3. \_\_\_\_\_
4. \_\_\_\_\_

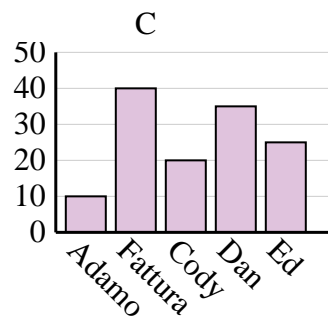
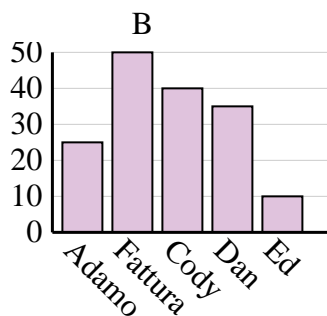
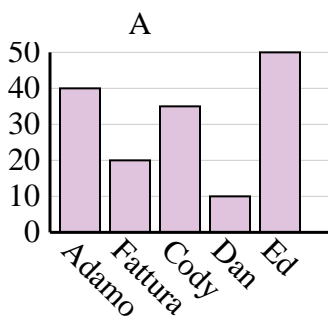
2)

Colore preferito	blu	verde	arancia	giallo	rosso
Le persone	5.000	1.000	2.000	4.000	8.000



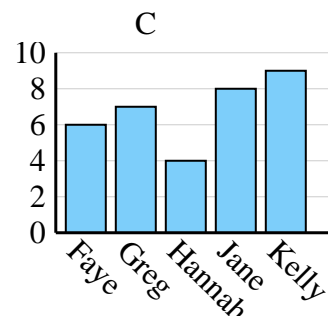
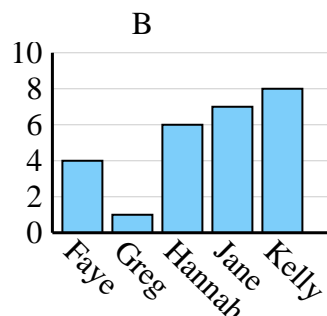
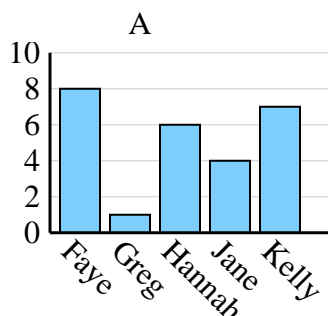
3)

Nome	Adamo	Fattura	Cody	Dan	Ed
Punti	25	50	40	35	10



4)

Nome	Faye	Greg	Hannah	Jane	Kelly
Stati in cui vivevano	8	1	6	4	7



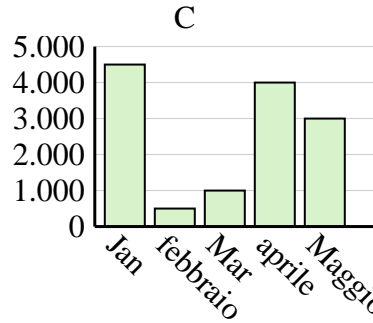
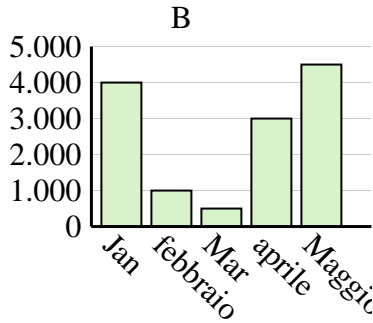
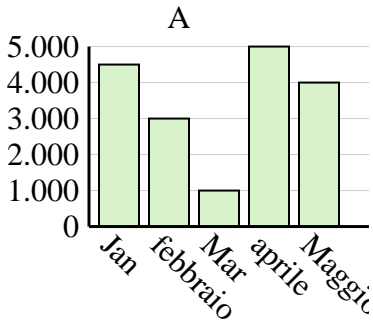


Determina quale grafico (A, B o C) rappresenta meglio le informazioni date nella tabella

Risposte

1)

Saldi	Jan	febbraio	Mar	aprile	Maggio
Mese	4.000	1.000	500	3.000	4.500



1. **B**

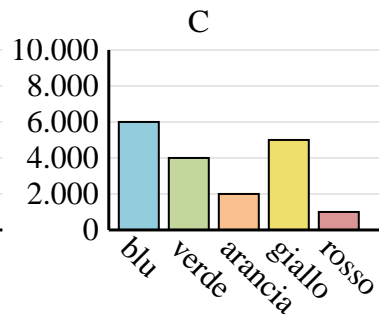
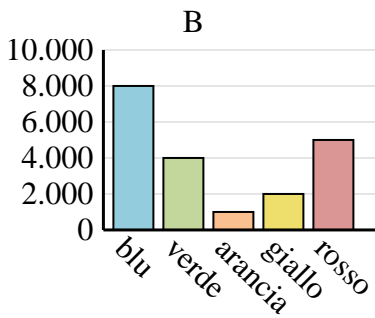
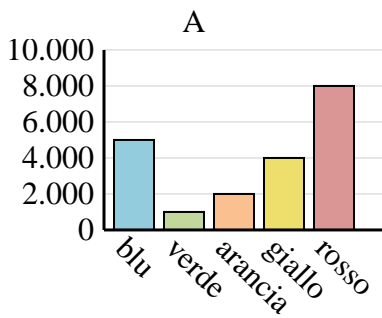
2. **A**

3. **B**

4. **A**

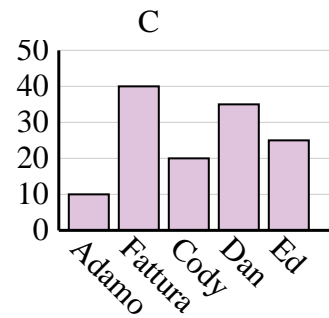
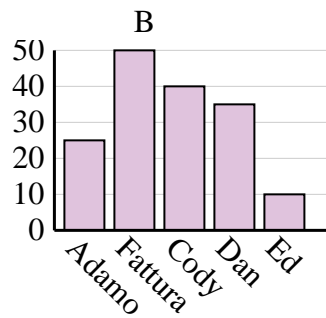
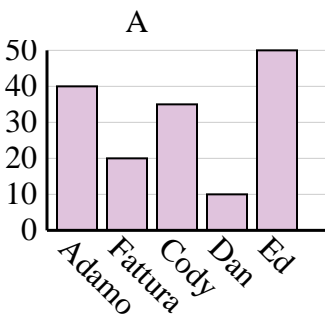
2)

Colore preferito	blu	verde	arancia	giallo	rosso
Le persone	5.000	1.000	2.000	4.000	8.000



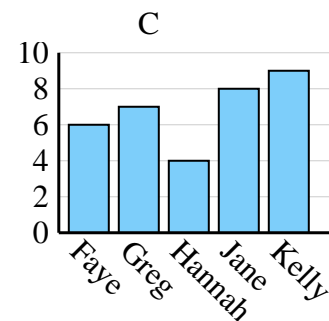
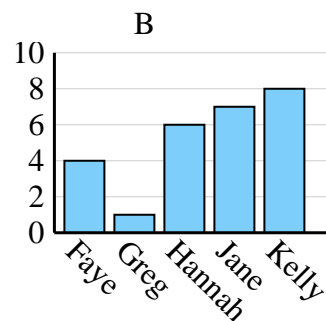
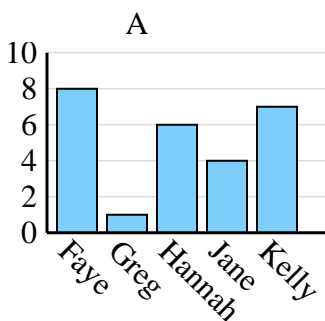
3)

Nome	Adamo	Fattura	Cody	Dan	Ed
Punti	25	50	40	35	10



4)

Nome	Faye	Greg	Hannah	Jane	Kelly
Stati in cui vivevano	8	1	6	4	7



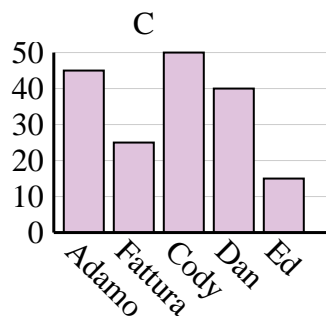
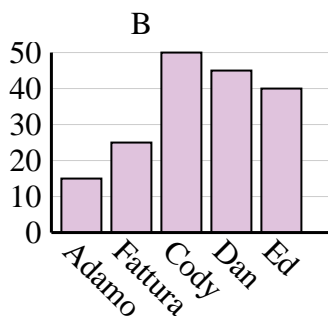
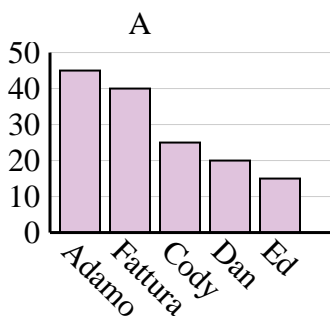


Determina quale grafico (A, B o C) rappresenta meglio le informazioni date nella tabella

**Risposte**

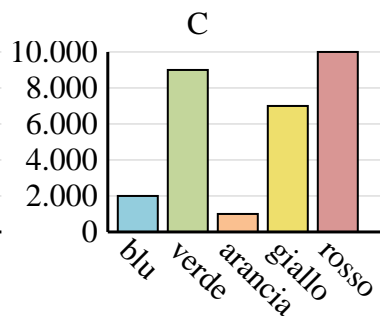
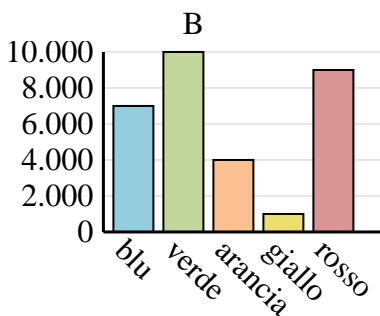
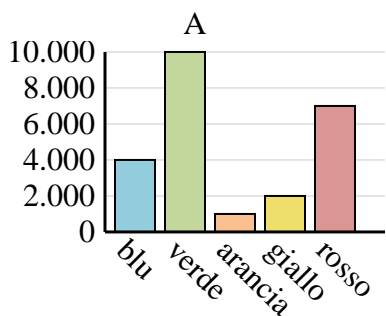
1)

Nome	Adamo	Fattura	Cody	Dan	Ed
Punti	45	40	25	20	15



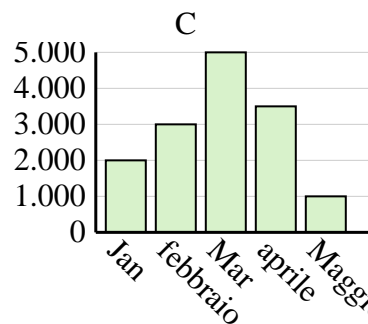
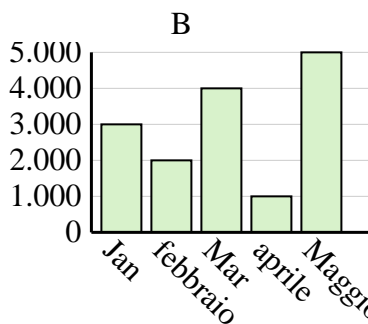
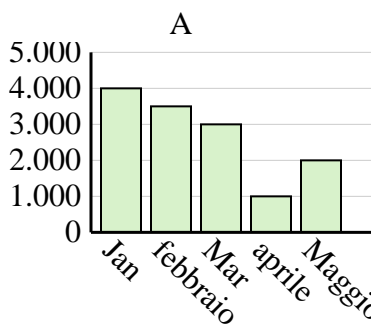
2)

Colore preferito	blu	verde	arancia	giallo	rosso
Le persone	4.000	10.000	1.000	2.000	7.000



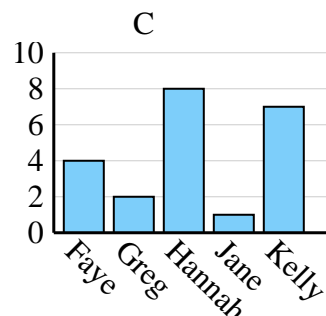
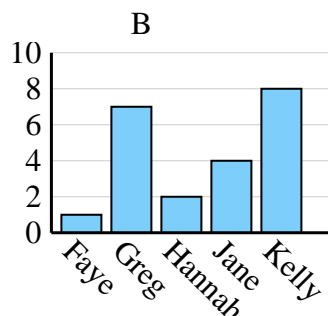
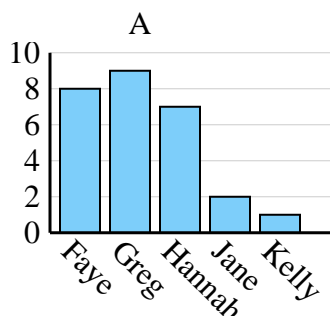
3)

Saldi	Jan	febbraio	Mar	aprile	Maggio
Mese	3.000	2.000	4.000	1.000	5.000



4)

Nome	Faye	Greg	Hannah	Jane	Kelly
Stati in cui vivevano	4	2	8	1	7



1. \_\_\_\_\_
2. \_\_\_\_\_
3. \_\_\_\_\_
4. \_\_\_\_\_

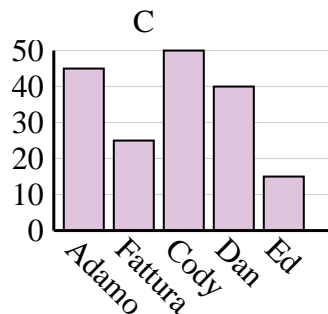
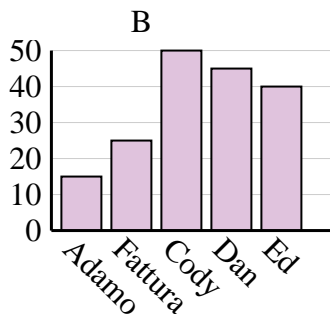
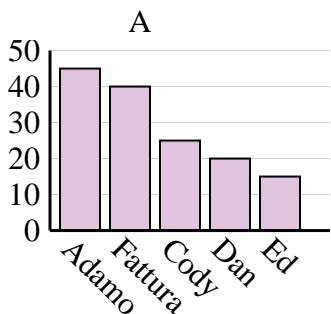


Determina quale grafico (A, B o C) rappresenta meglio le informazioni date nella tabella

Risposte

1)

Nome	Adamo	Fattura	Cody	Dan	Ed
Punti	45	40	25	20	15



1. **A**

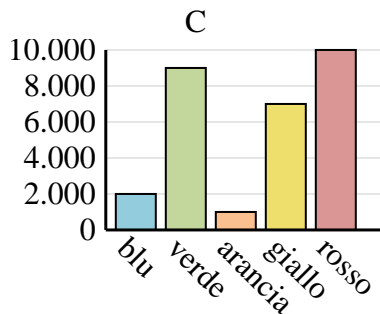
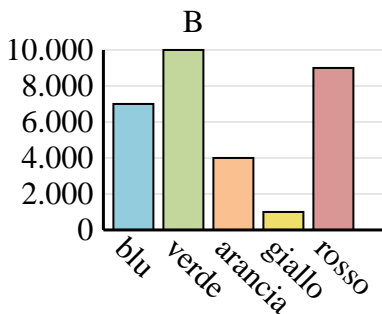
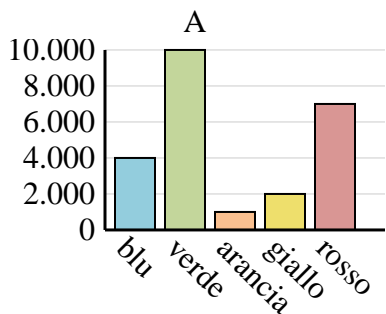
2. **A**

3. **B**

4. **C**

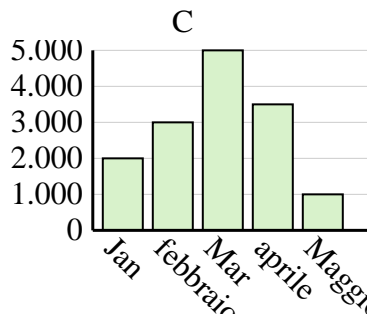
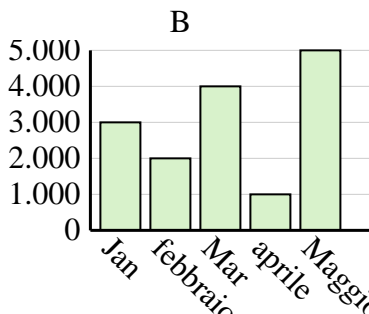
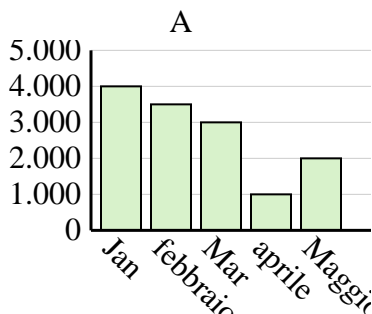
2)

Colore preferito	blu	verde	arancia	giallo	rosso
Le persone	4.000	10.000	1.000	2.000	7.000



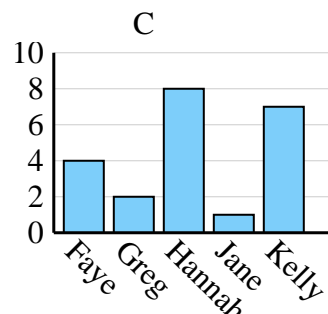
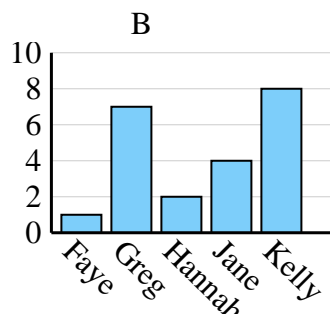
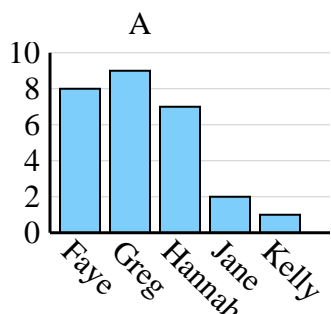
3)

Saldi	Jan	febbraio	Mar	aprile	Maggio
Mese	3.000	2.000	4.000	1.000	5.000



4)

Nome	Faye	Greg	Hannah	Jane	Kelly
Stati in cui vivevano	4	2	8	1	7



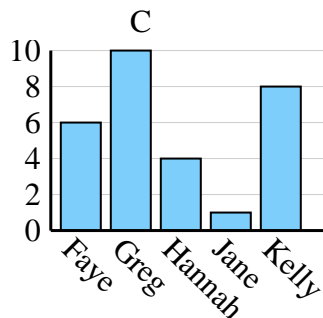
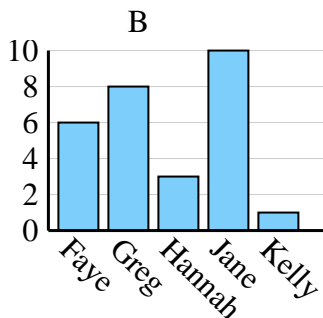
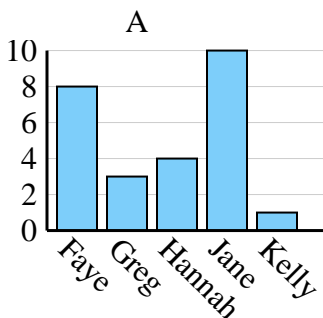


Determina quale grafico (A, B o C) rappresenta meglio le informazioni date nella tabella

**Risposte**

1)

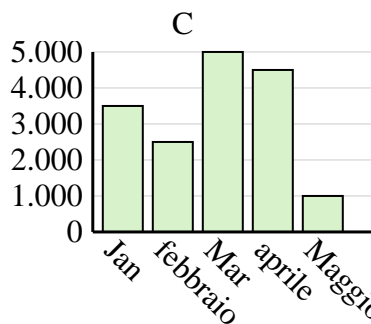
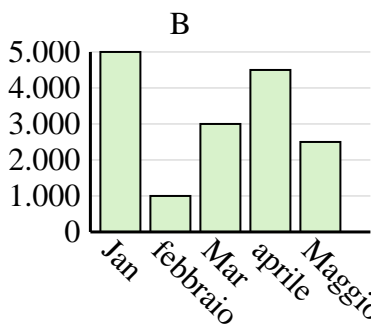
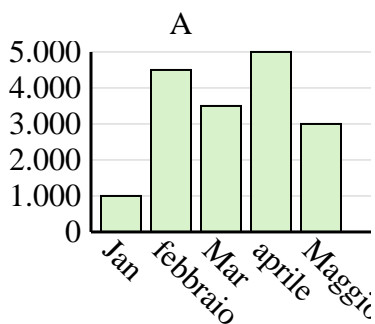
Nome	Faye	Greg	Hannah	Jane	Kelly
Stati in cui vivevano	6	10	4	1	8



1. \_\_\_\_\_
2. \_\_\_\_\_
3. \_\_\_\_\_
4. \_\_\_\_\_

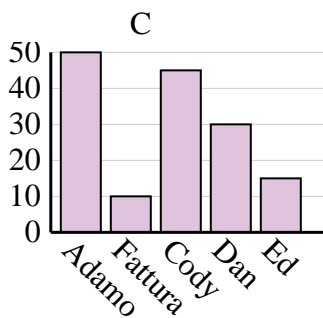
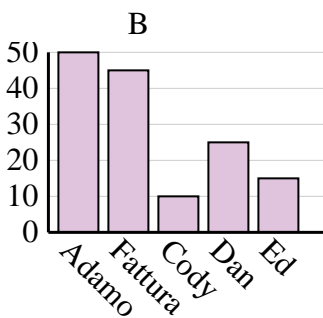
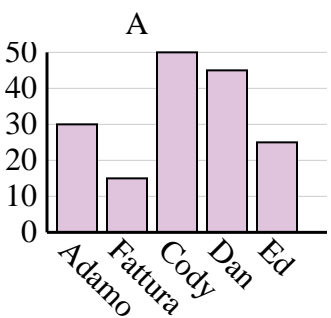
2)

Saldi	Jan	febbraio	Mar	aprile	Maggio
Mese	3.500	2.500	5.000	4.500	1.000



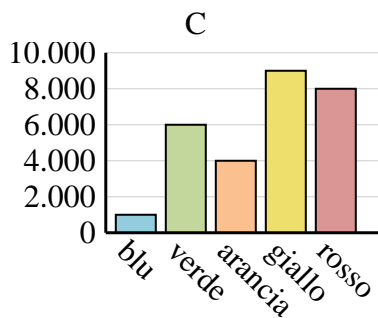
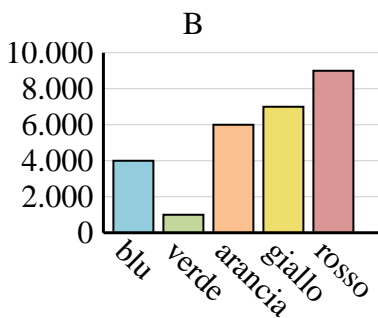
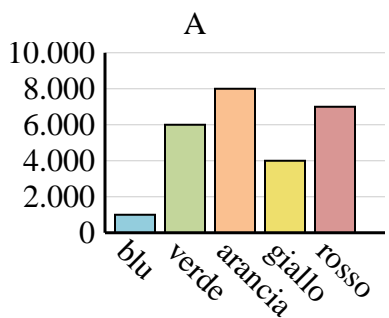
3)

Nome	Adamo	Fattura	Cody	Dan	Ed
Punti	30	15	50	45	25



4)

Colore preferito	blu	verde	arancia	giallo	rosso
Le persone	4.000	1.000	6.000	7.000	9.000

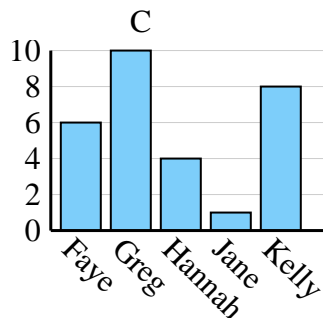
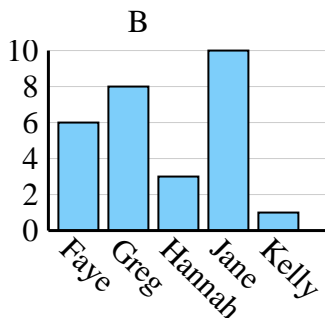
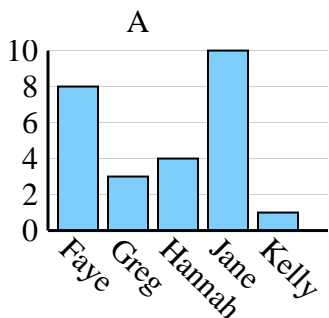




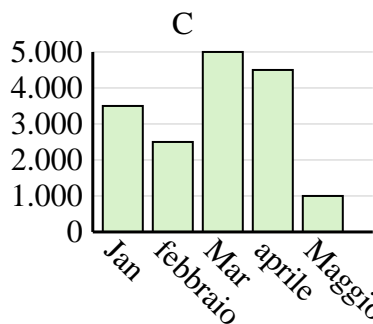
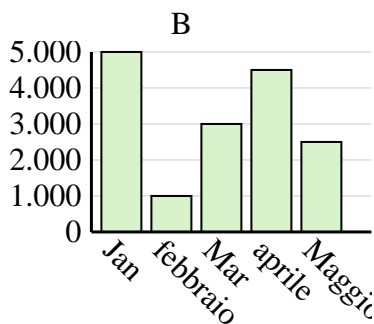
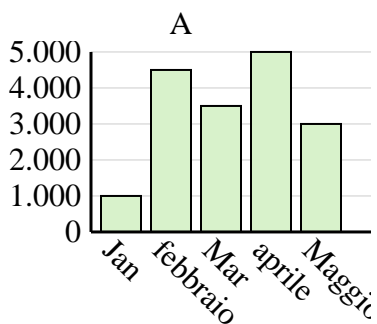
Determina quale grafico (A, B o C) rappresenta meglio le informazioni date nella tabella

Risposte

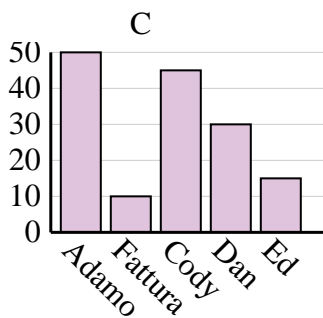
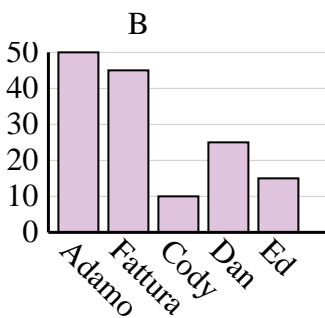
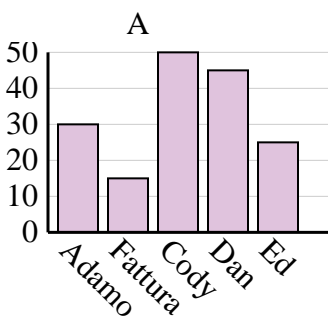
Nome	Faye	Greg	Hannah	Jane	Kelly
Stati in cui vivevano	6	10	4	1	8



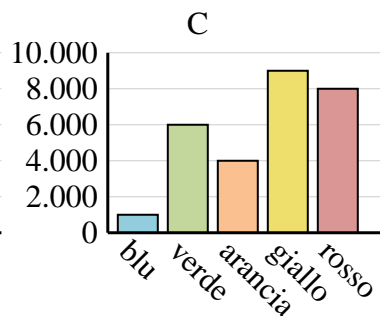
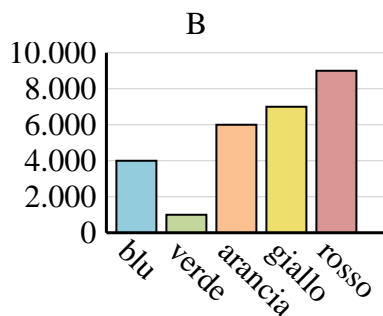
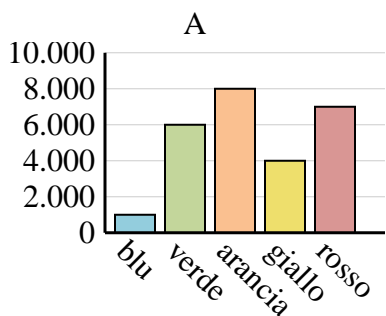
Saldi	Jan	febbraio	Mar	aprile	Maggio
Mese	3.500	2.500	5.000	4.500	1.000



Nome	Adamo	Fattura	Cody	Dan	Ed
Punti	30	15	50	45	25



Colore preferito	blu	verde	arancia	giallo	rosso
Le persone	4.000	1.000	6.000	7.000	9.000



1. **C**
2. **C**
3. **A**
4. **B**

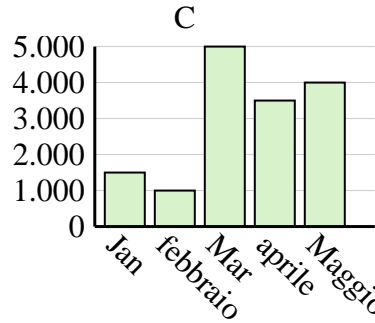
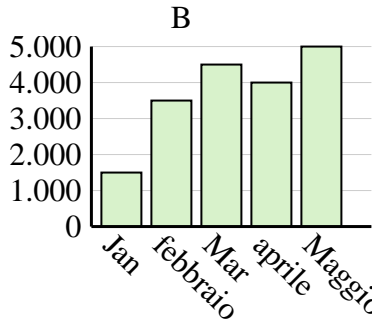
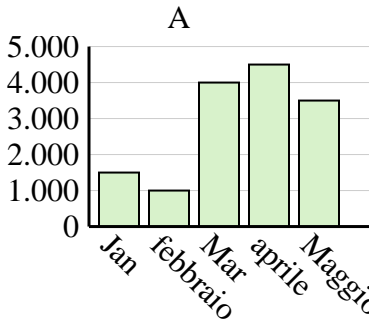


Determina quale grafico (A, B o C) rappresenta meglio le informazioni date nella tabella

**Risposte**

1)

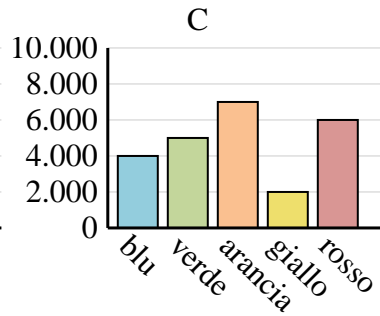
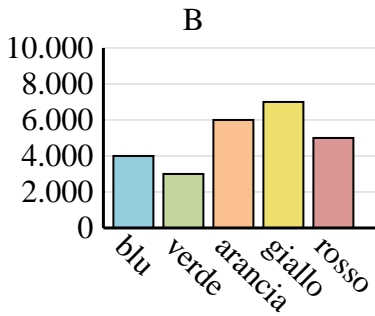
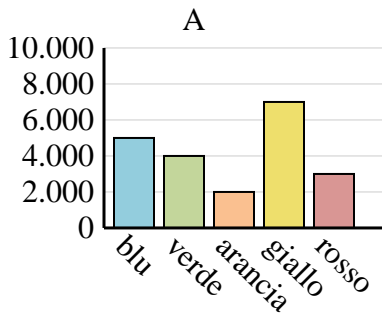
Saldi	Jan	febbraio	Mar	aprile	Maggio
Mese	1.500	1.000	4.000	4.500	3.500



1. \_\_\_\_\_
2. \_\_\_\_\_
3. \_\_\_\_\_
4. \_\_\_\_\_

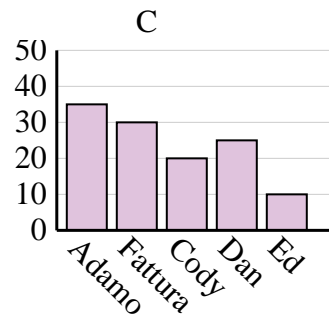
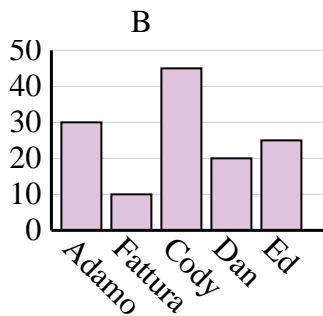
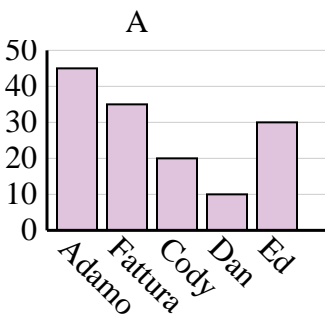
2)

Colore preferito	blu	verde	arancia	giallo	rosso
Le persone	4.000	3.000	6.000	7.000	5.000



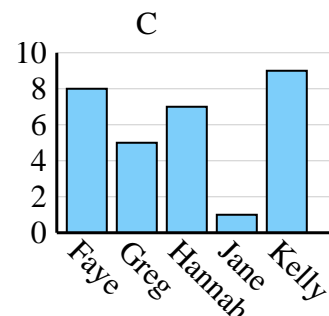
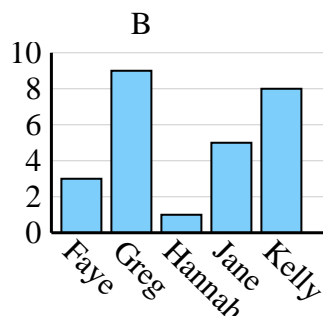
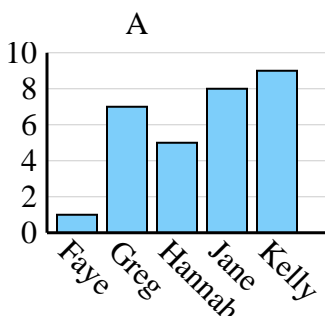
3)

Nome	Adamo	Fattura	Cody	Dan	Ed
Punti	35	30	20	25	10



4)

Nome	Faye	Greg	Hannah	Jane	Kelly
Stati in cui vivevano	1	7	5	8	9



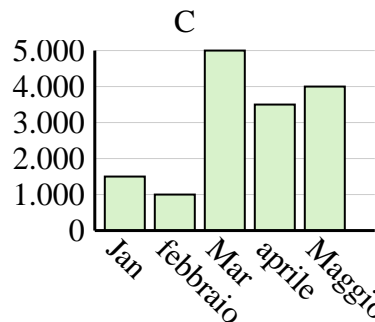
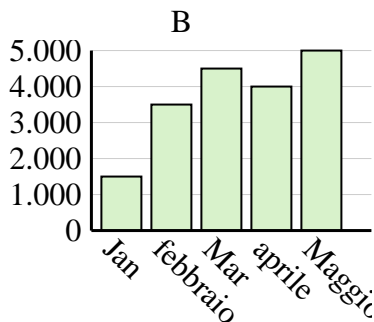
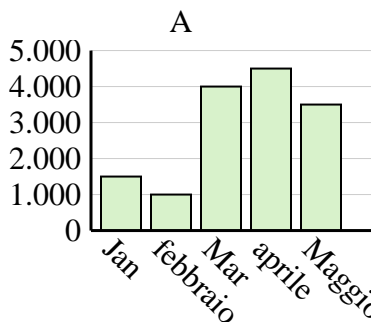


Determina quale grafico (A, B o C) rappresenta meglio le informazioni date nella tabella

Risposte

1)

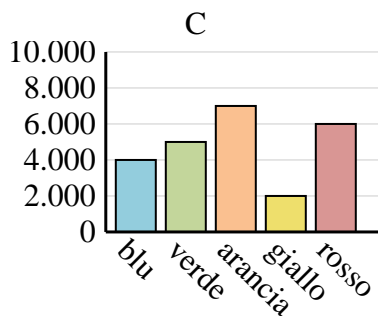
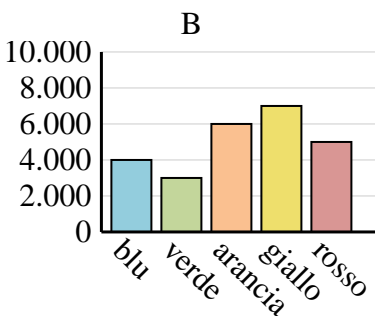
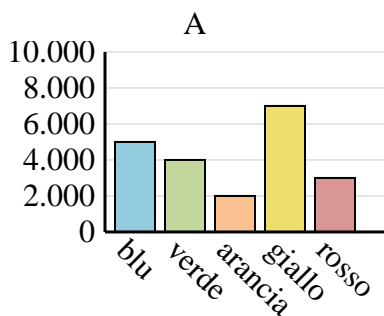
Saldi	Jan	febbraio	Mar	aprile	Maggio
Mese	1.500	1.000	4.000	4.500	3.500



1.     **A**
2.     **B**
3.     **C**
4.     **A**

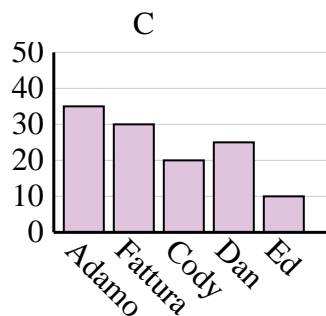
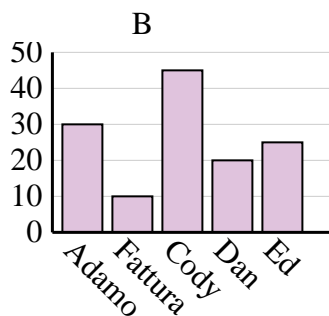
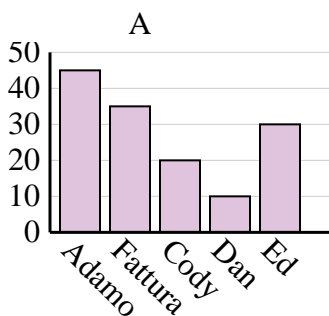
2)

Colore preferito	blu	verde	arancia	giallo	rosso
Le persone	4.000	3.000	6.000	7.000	5.000



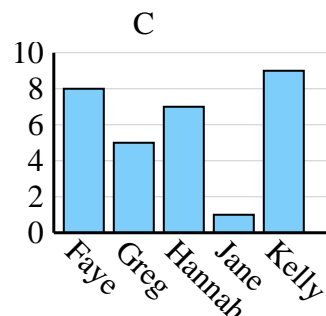
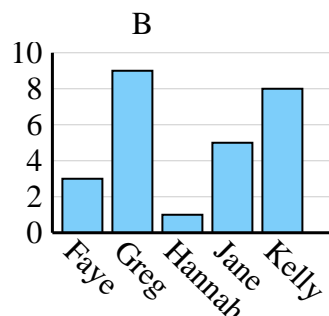
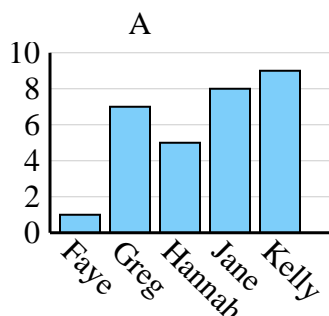
3)

Nome	Adamo	Fattura	Cody	Dan	Ed
Punti	35	30	20	25	10



4)

Nome	Faye	Greg	Hannah	Jane	Kelly
Stati in cui vivevano	1	7	5	8	9





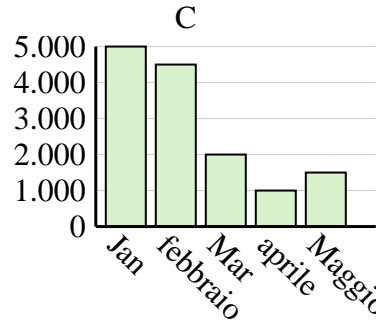
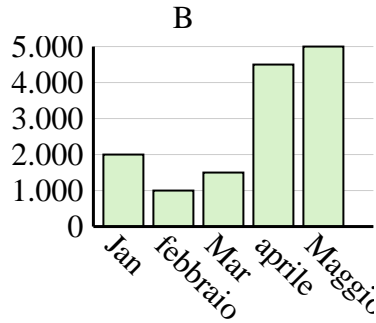
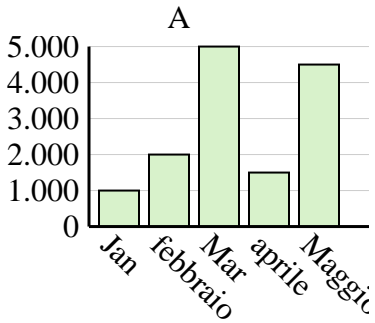


Determina quale grafico (A, B o C) rappresenta meglio le informazioni date nella tabella

**Risposte**

1)

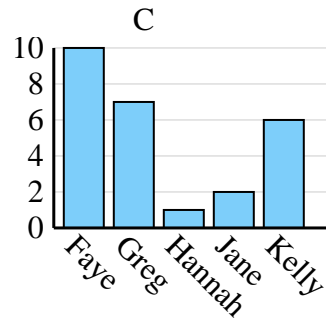
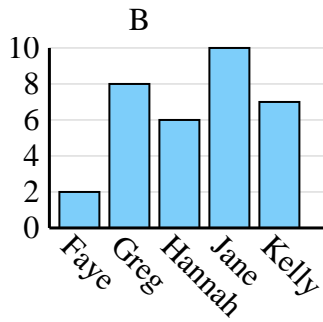
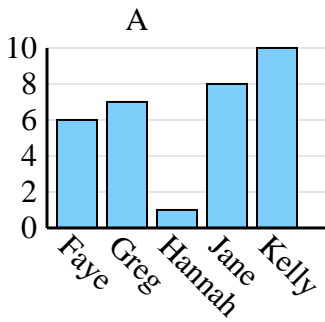
Saldi	Jan	febbraio	Mar	aprile	Maggio
Mese	5.000	4.500	2.000	1.000	1.500



1. \_\_\_\_\_
2. \_\_\_\_\_
3. \_\_\_\_\_
4. \_\_\_\_\_

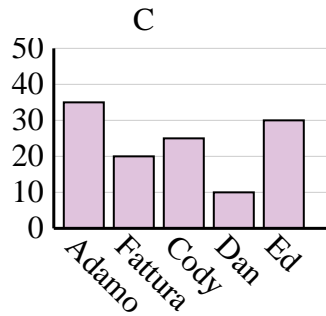
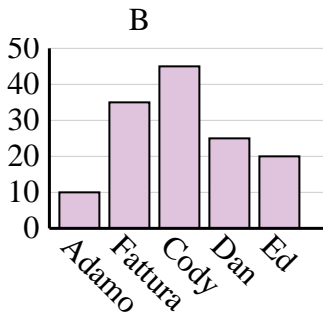
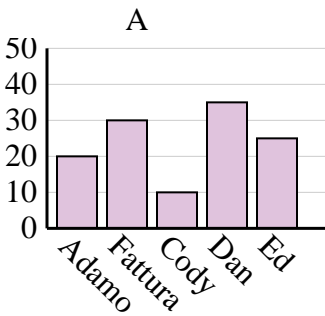
2)

Nome	Faye	Greg	Hannah	Jane	Kelly
Stati in cui vivevano	6	7	1	8	10



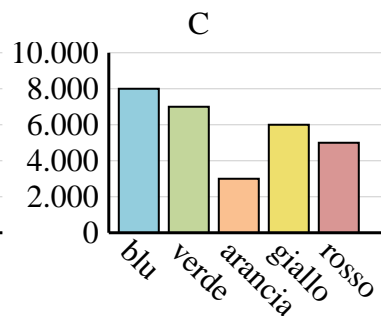
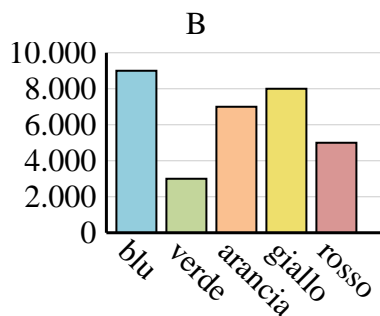
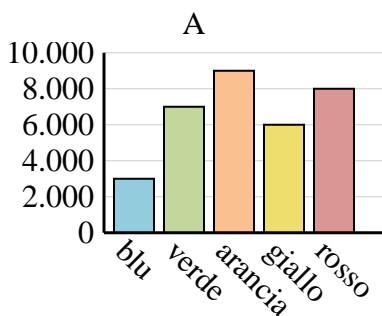
3)

Nome	Adamo	Fattura	Cody	Dan	Ed
Punti	10	35	45	25	20



4)

Colore preferito	blu	verde	arancia	giallo	rosso
Le persone	8.000	7.000	3.000	6.000	5.000



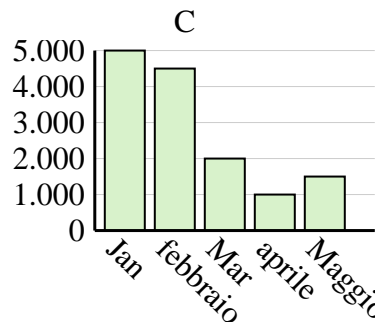
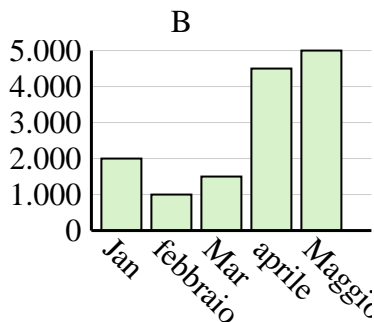
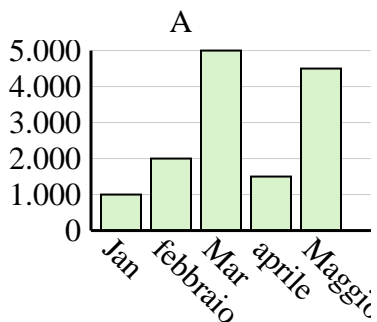


Determina quale grafico (A, B o C) rappresenta meglio le informazioni date nella tabella

**Risposte**

1)

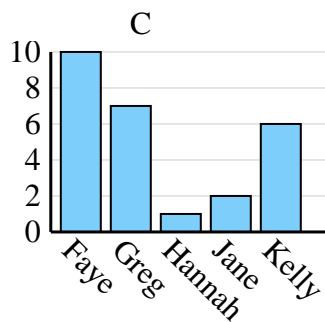
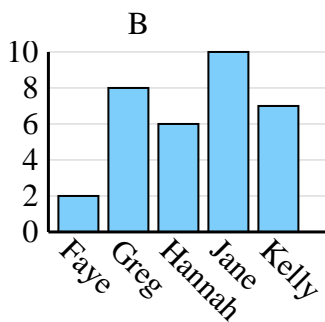
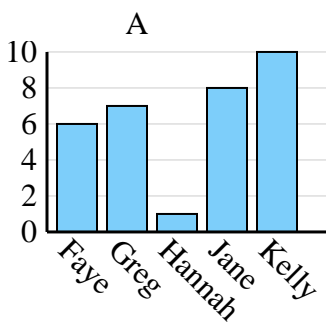
Saldi	Jan	febbraio	Mar	aprile	Maggio
Mese	5.000	4.500	2.000	1.000	1.500



1.            **C**
2.            **A**
3.            **B**
4.            **C**

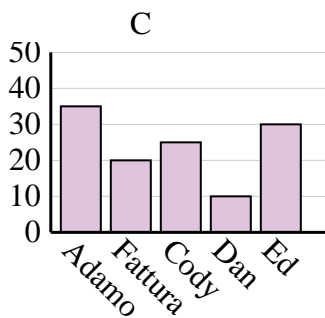
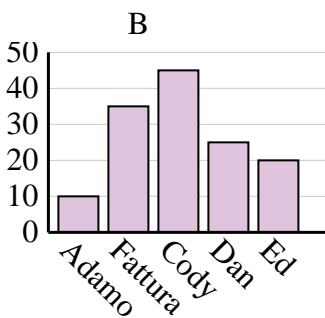
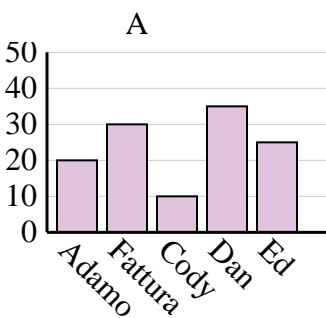
2)

Nome	Faye	Greg	Hannah	Jane	Kelly
Stati in cui vivevano	6	7	1	8	10



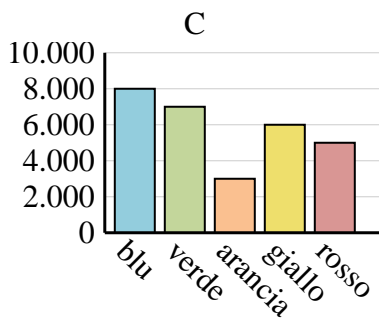
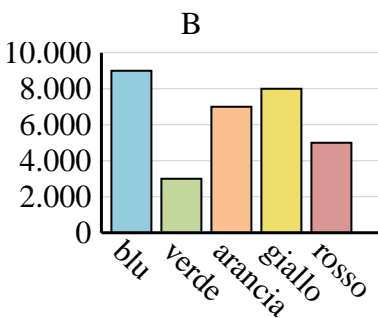
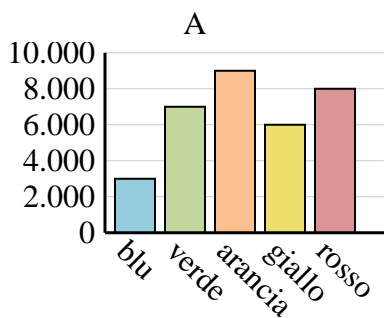
3)

Nome	Adamo	Fattura	Cody	Dan	Ed
Punti	10	35	45	25	20



4)

Colore preferito	blu	verde	arancia	giallo	rosso
Le persone	8.000	7.000	3.000	6.000	5.000



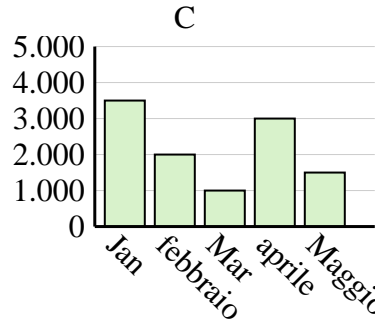
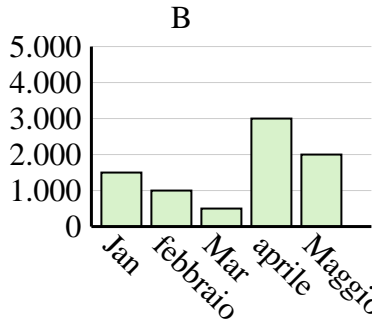
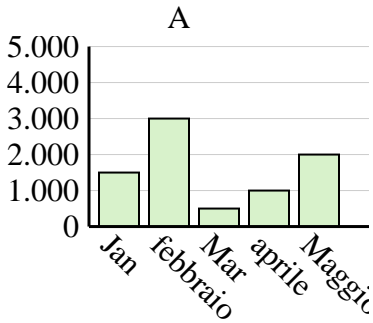


Determina quale grafico (A, B o C) rappresenta meglio le informazioni date nella tabella

**Risposte**

1)

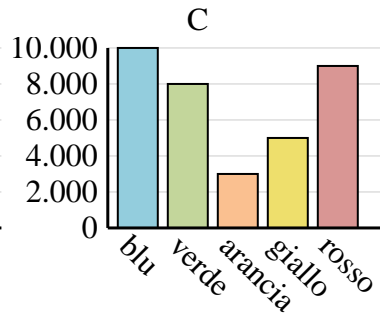
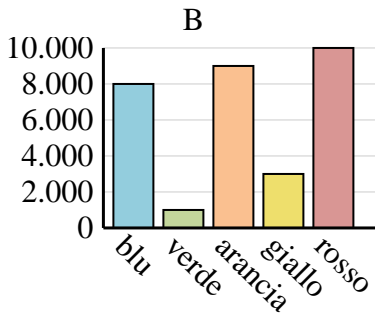
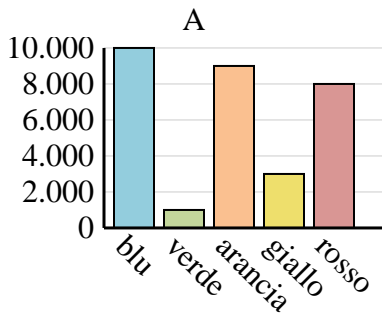
Saldi	Jan	febbraio	Mar	aprile	Maggio
Mese	3.500	2.000	1.000	3.000	1.500



1. \_\_\_\_\_
2. \_\_\_\_\_
3. \_\_\_\_\_
4. \_\_\_\_\_

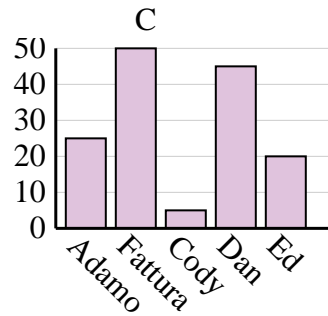
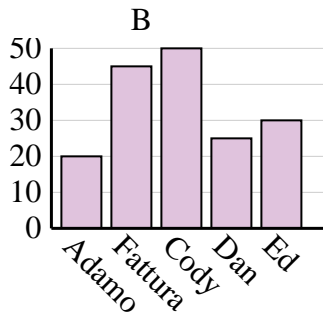
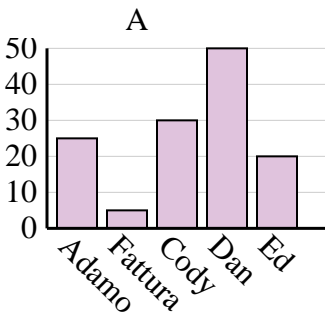
2)

Colore preferito	blu	verde	arancia	giallo	rosso
Le persone	10.000	1.000	9.000	3.000	8.000



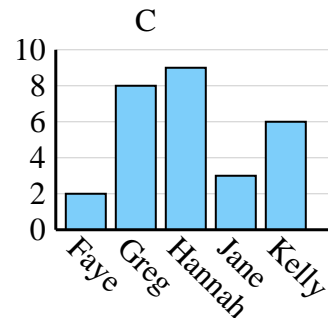
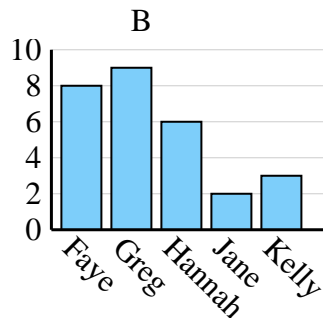
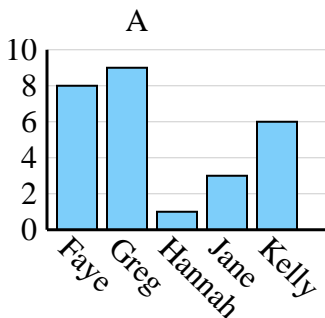
3)

Nome	Adamo	Fattura	Cody	Dan	Ed
Punti	25	5	30	50	20



4)

Nome	Faye	Greg	Hannah	Jane	Kelly
Stati in cui vivevano	8	9	1	3	6



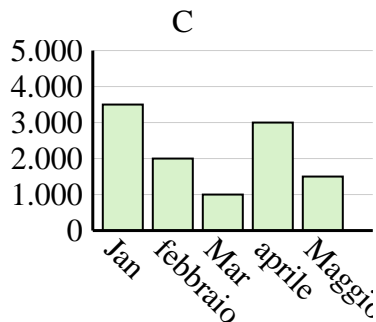
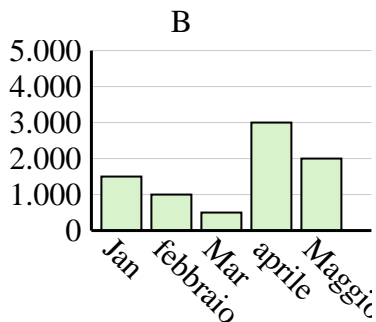
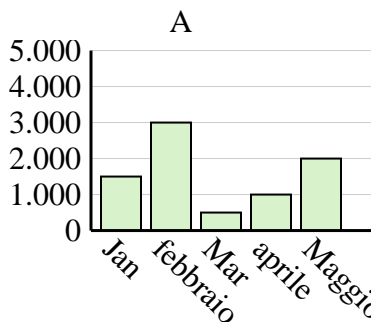


Determina quale grafico (A, B o C) rappresenta meglio le informazioni date nella tabella

Risposte

1)

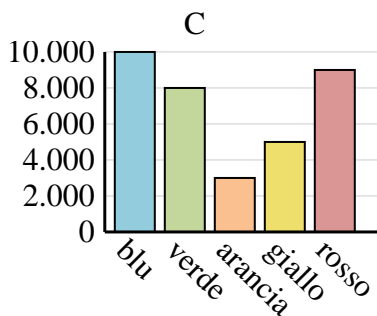
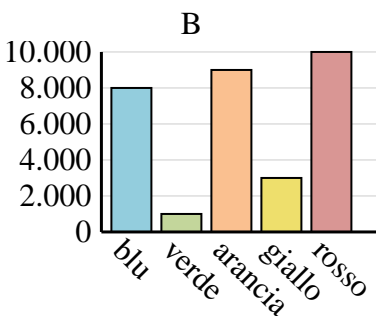
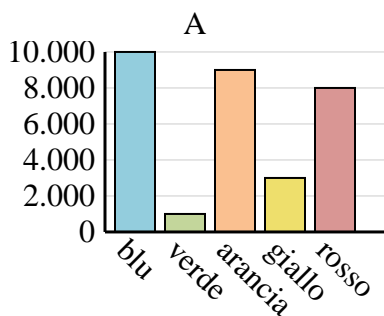
Saldi	Jan	febbraio	Mar	aprile	Maggio
Mese	3.500	2.000	1.000	3.000	1.500



1.            **C**
2.            **A**
3.            **A**
4.            **A**

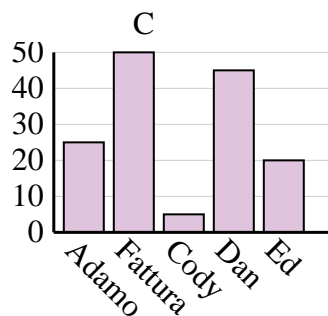
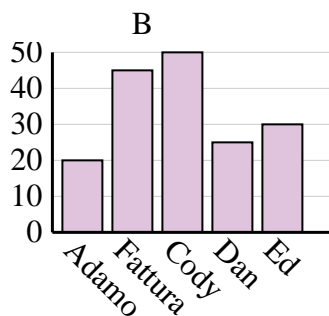
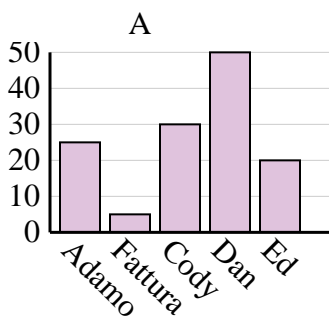
2)

Colore preferito	blu	verde	arancia	giallo	rosso
Le persone	10.000	1.000	9.000	3.000	8.000



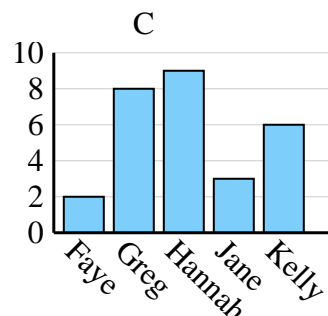
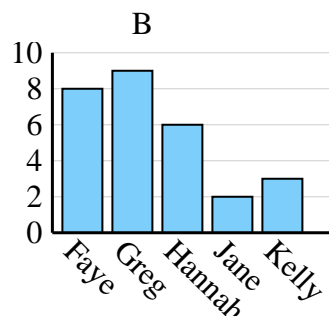
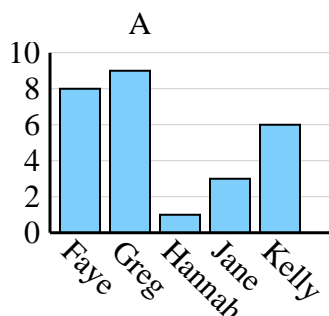
3)

Nome	Adamo	Fattura	Cody	Dan	Ed
Punti	25	5	30	50	20



4)

Nome	Faye	Greg	Hannah	Jane	Kelly
Stati in cui vivevano	8	9	1	3	6



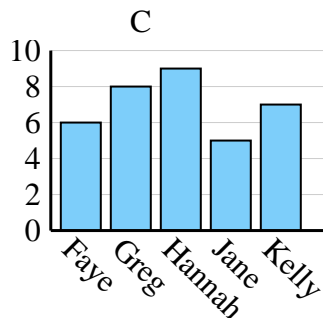
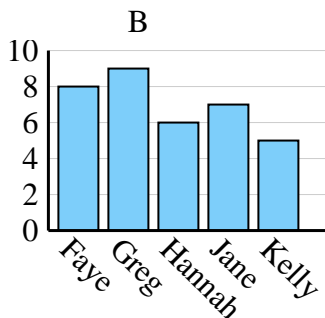
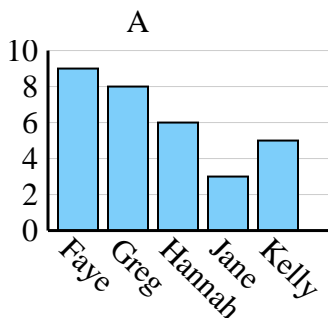


Determina quale grafico (A, B o C) rappresenta meglio le informazioni date nella tabella

Risposte

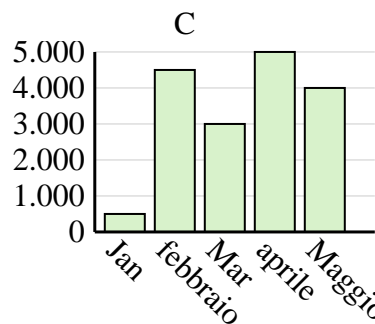
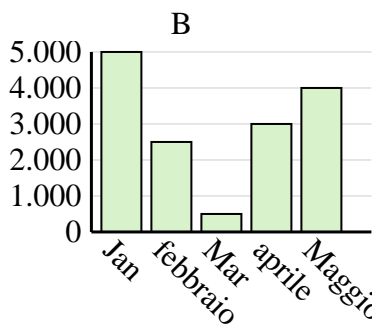
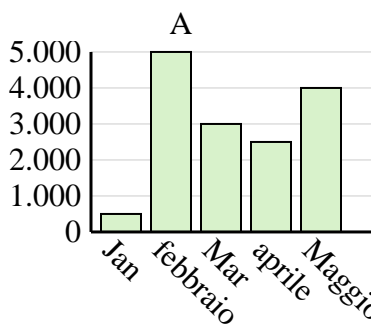
1)

Nome	Faye	Greg	Hannah	Jane	Kelly
Stati in cui vivevano	6	8	9	5	7



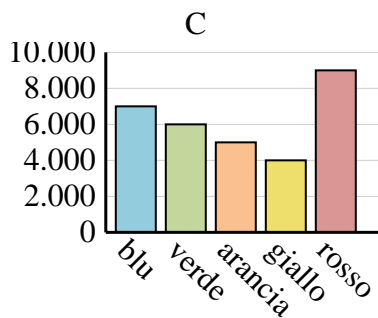
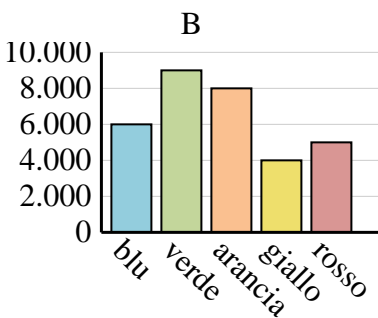
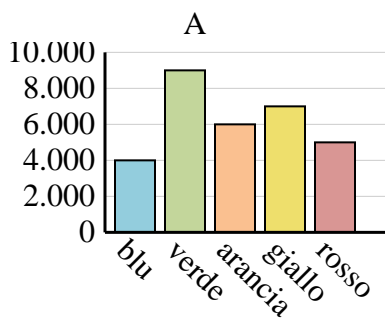
2)

Saldi	Jan	febbraio	Mar	aprile	Maggio
Mese	500	4.500	3.000	5.000	4.000



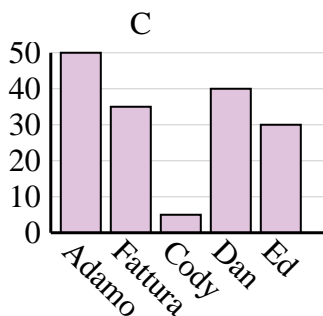
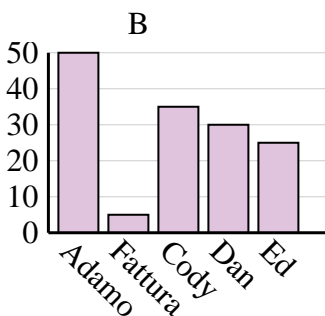
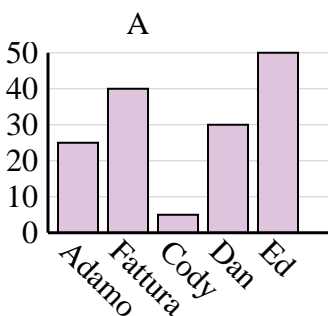
3)

Colore preferito	blu	verde	arancia	giallo	rosso
Le persone	4.000	9.000	6.000	7.000	5.000



4)

Nome	Adamo	Fattura	Cody	Dan	Ed
Punti	50	35	5	40	30



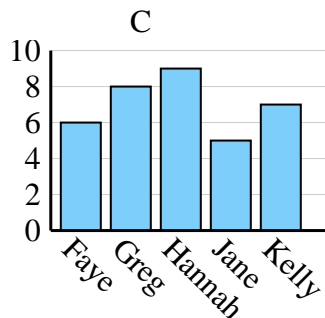
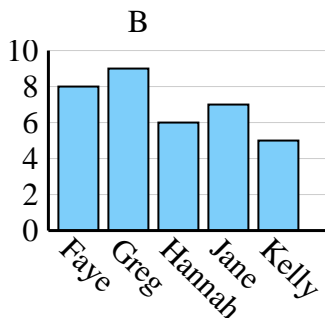
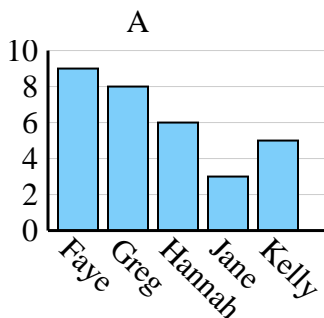
1. \_\_\_\_\_
2. \_\_\_\_\_
3. \_\_\_\_\_
4. \_\_\_\_\_



Determina quale grafico (A, B o C) rappresenta meglio le informazioni date nella tabella

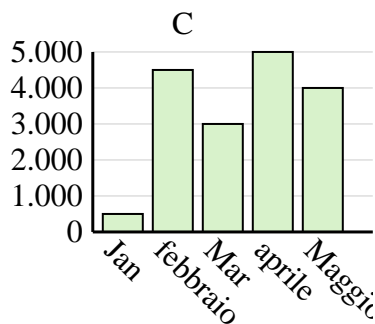
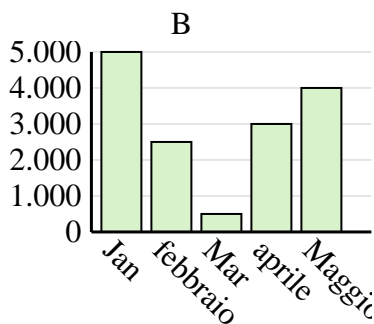
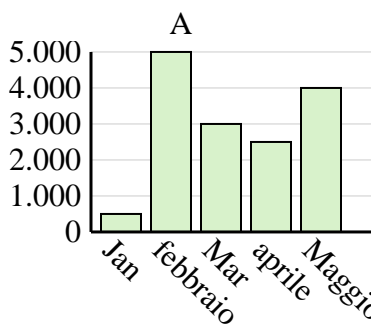
Risposte

Nome	Faye	Greg	Hannah	Jane	Kelly
Stati in cui vivevano	6	8	9	5	7

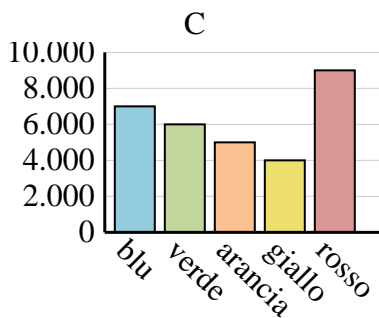
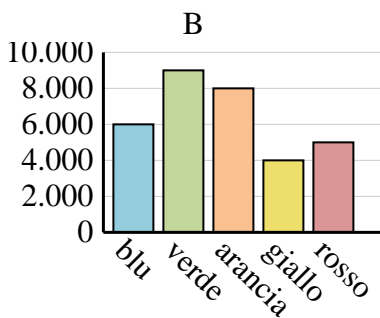
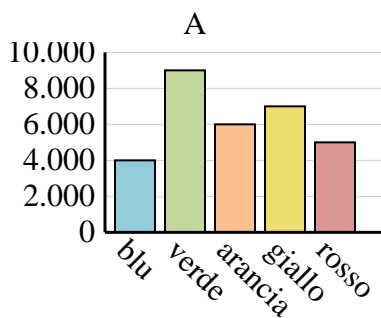


1.            **C**
2.            **C**
3.            **A**
4.            **C**

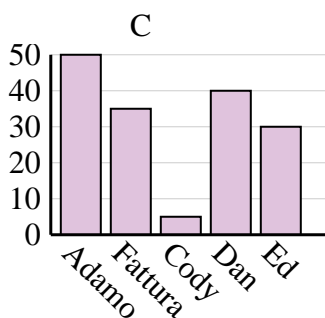
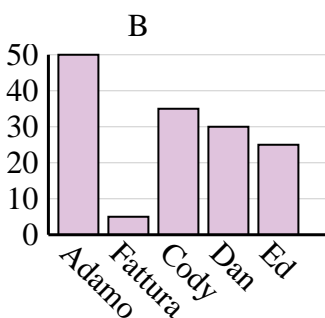
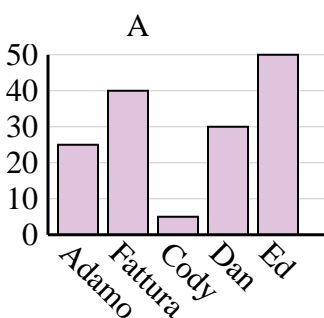
Saldi	Jan	febbraio	Mar	aprile	Maggio
Mese	500	4.500	3.000	5.000	4.000



Colore preferito	blu	verde	arancia	giallo	rosso
Le persone	4.000	9.000	6.000	7.000	5.000



Nome	Adamo	Fattura	Cody	Dan	Ed
Punti	50	35	5	40	30



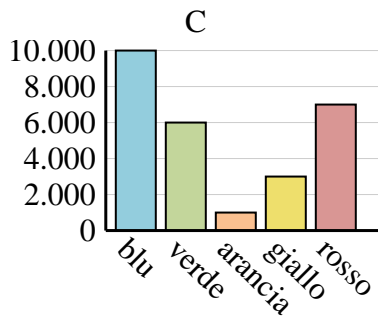
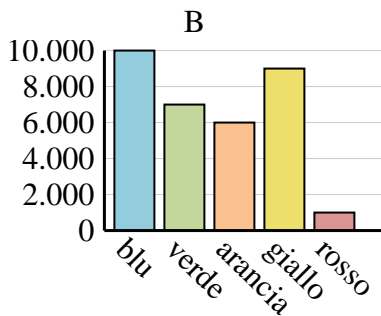
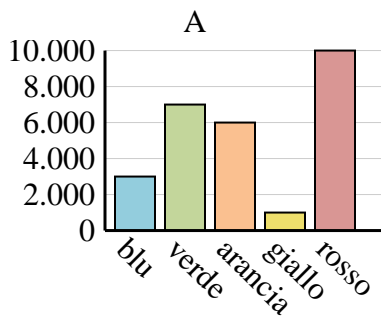


Determina quale grafico (A, B o C) rappresenta meglio le informazioni date nella tabella

**Risposte**

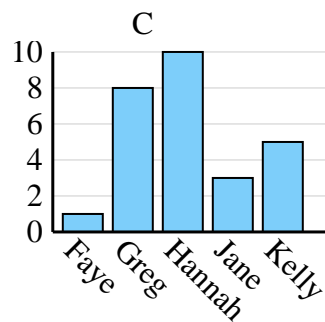
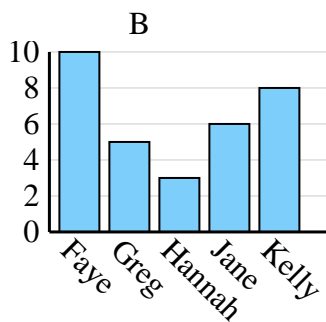
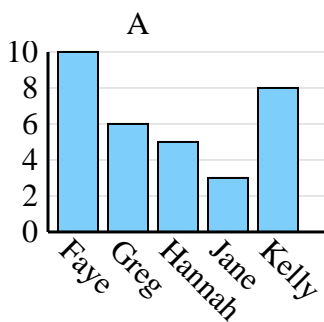
1)

Colore preferito	blu	verde	arancia	giallo	rosso
Le persone	10.000	6.000	1.000	3.000	7.000



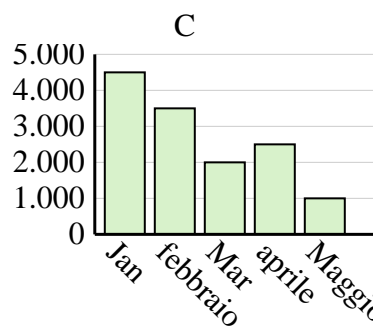
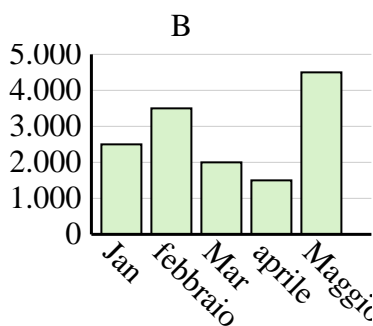
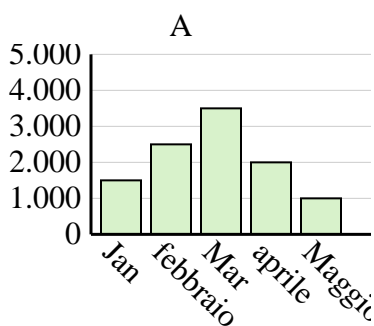
2)

Nome	Faye	Greg	Hannah	Jane	Kelly
Stati in cui vivevano	1	8	10	3	5



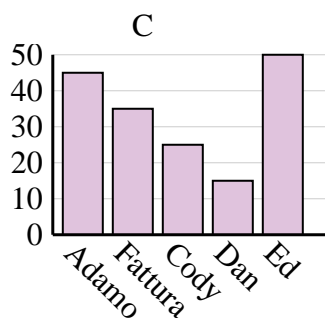
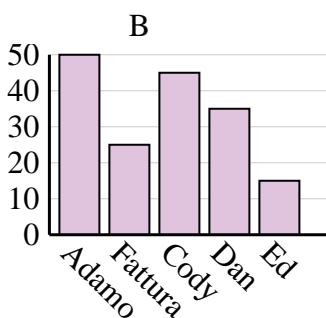
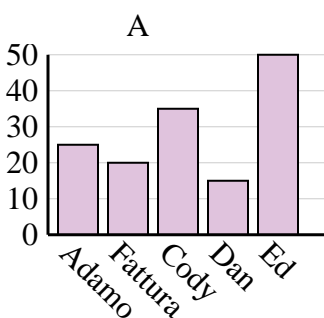
3)

Saldi	Jan	febbraio	Mar	aprile	Maggio
Mese	4.500	3.500	2.000	2.500	1.000



4)

Nome	Adamo	Fattura	Cody	Dan	Ed
Punti	45	35	25	15	50



1. \_\_\_\_\_
2. \_\_\_\_\_
3. \_\_\_\_\_
4. \_\_\_\_\_

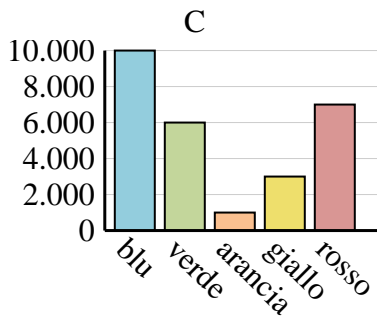
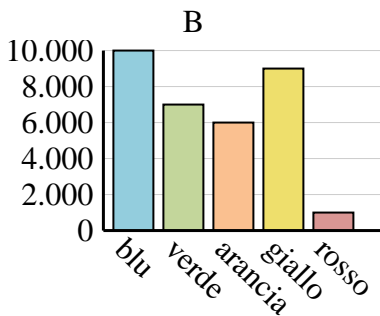
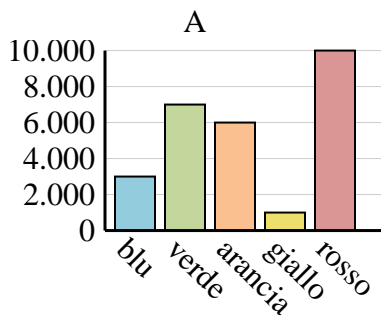


Determina quale grafico (A, B o C) rappresenta meglio le informazioni date nella tabella

Risposte

1)

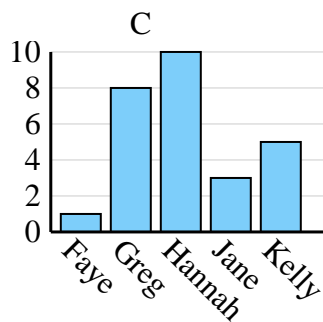
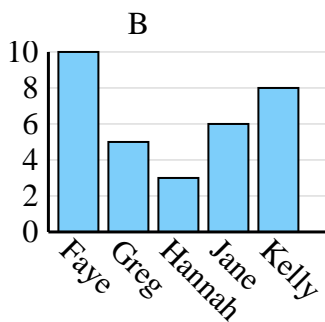
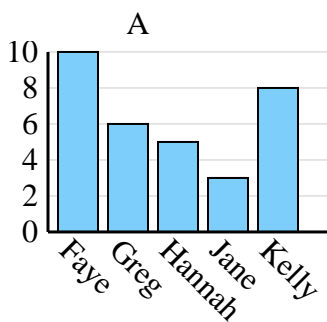
Colore preferito	blu	verde	arancia	giallo	rosso
Le persone	10.000	6.000	1.000	3.000	7.000



1.            **C**
2.            **C**
3.            **C**
4.            **C**

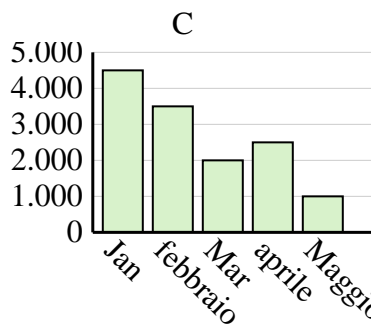
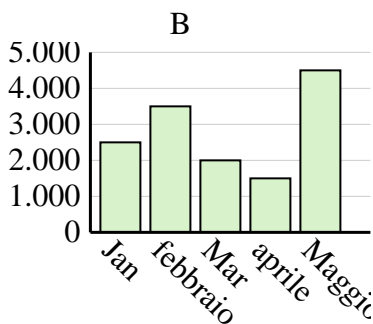
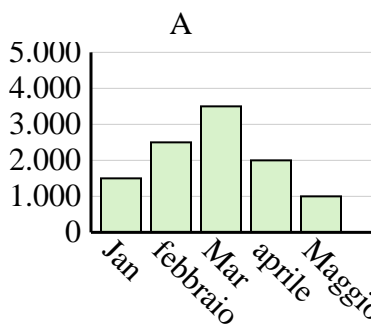
2)

Nome	Faye	Greg	Hannah	Jane	Kelly
Stati in cui vivevano	1	8	10	3	5



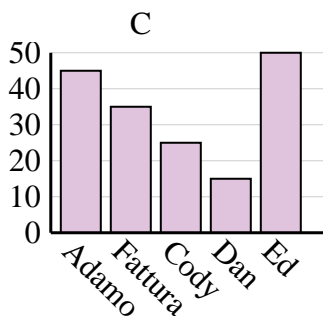
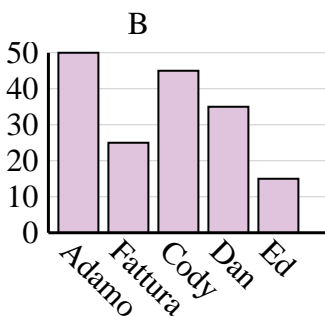
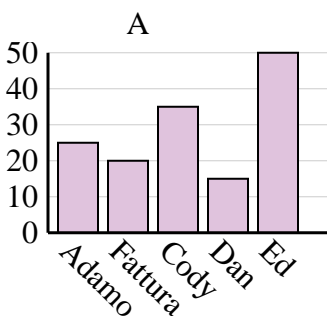
3)

Saldi	Jan	febbraio	Mar	aprile	Maggio
Mese	4.500	3.500	2.000	2.500	1.000



4)

Nome	Adamo	Fattura	Cody	Dan	Ed
Punti	45	35	25	15	50





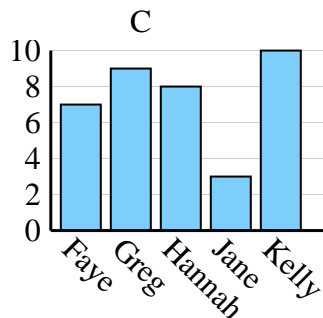
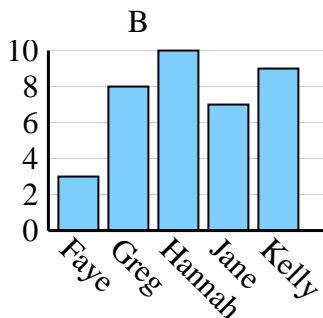
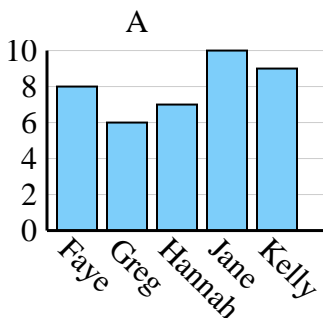


Determina quale grafico (A, B o C) rappresenta meglio le informazioni date nella tabella

**Risposte**

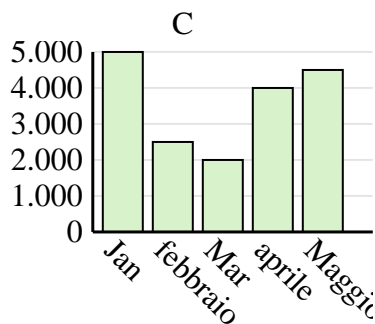
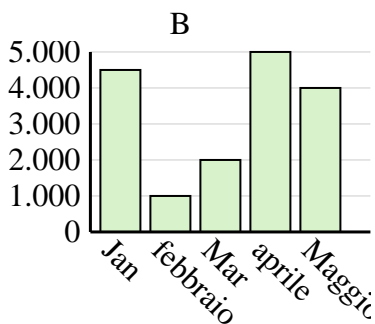
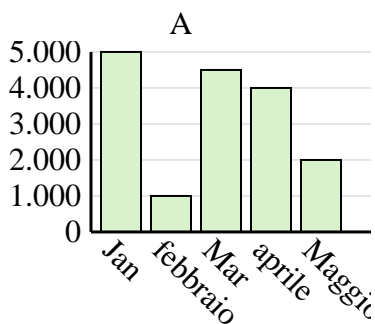
1)

Nome	Faye	Greg	Hannah	Jane	Kelly
Stati in cui vivevano	7	9	8	3	10



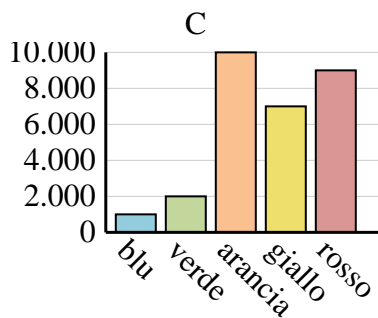
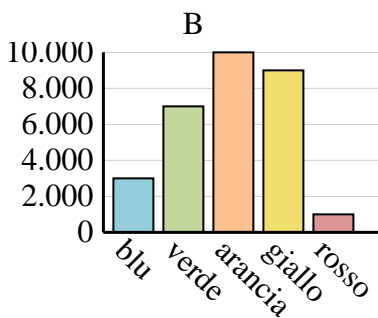
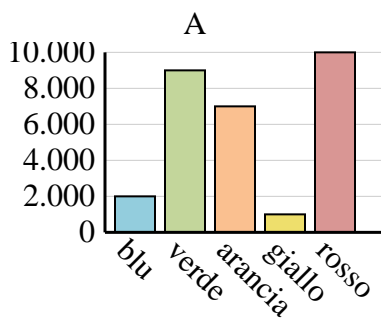
2)

Saldi	Jan	febbraio	Mar	aprile	Maggio
Mese	4.500	1.000	2.000	5.000	4.000



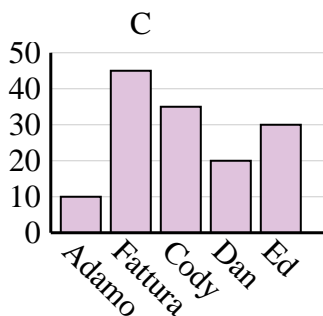
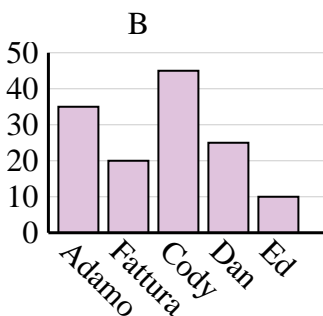
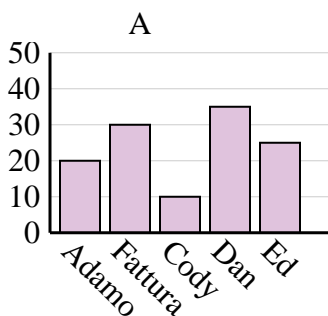
3)

Colore preferito	blu	verde	arancia	giallo	rosso
Le persone	3.000	7.000	10.000	9.000	1.000



4)

Nome	Adamo	Fattura	Cody	Dan	Ed
Punti	10	45	35	20	30



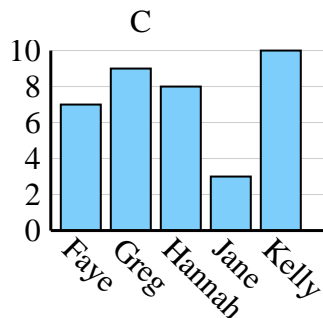
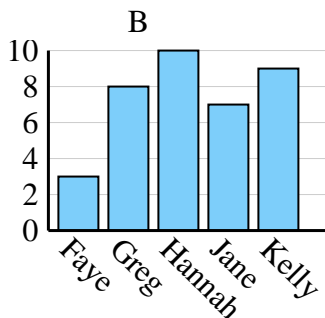
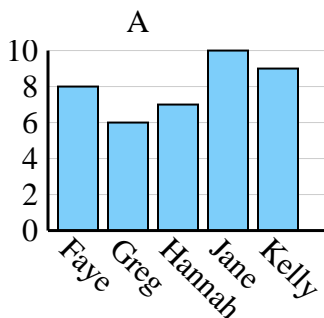
1. \_\_\_\_\_
2. \_\_\_\_\_
3. \_\_\_\_\_
4. \_\_\_\_\_



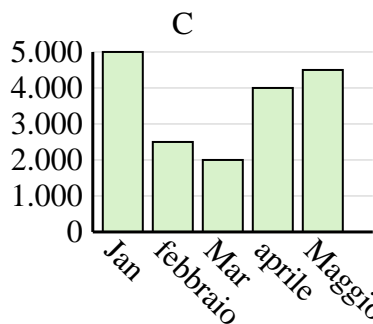
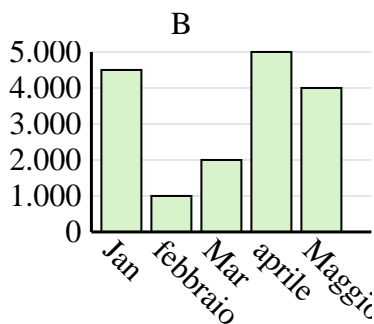
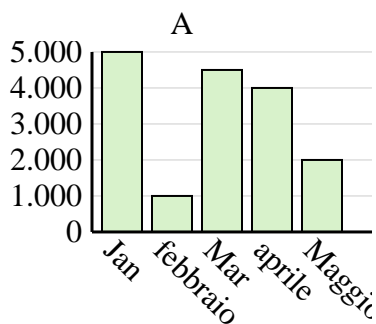
Determina quale grafico (A, B o C) rappresenta meglio le informazioni date nella tabella

Risposte

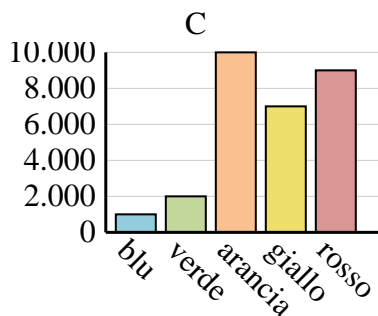
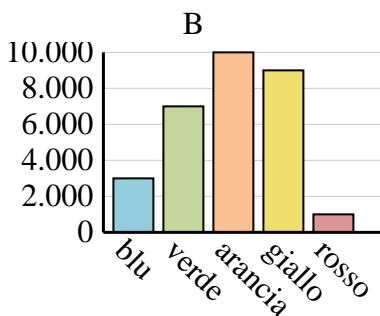
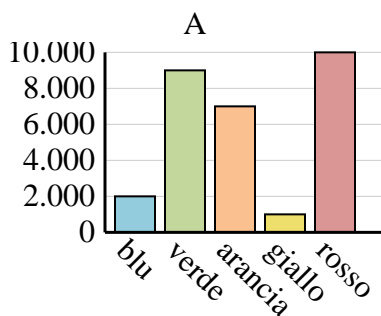
Nome	Faye	Greg	Hannah	Jane	Kelly
Stati in cui vivevano	7	9	8	3	10



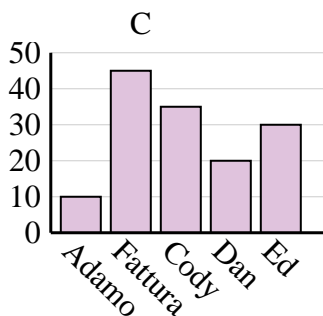
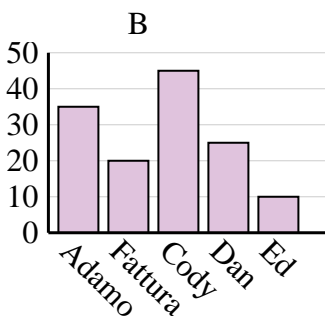
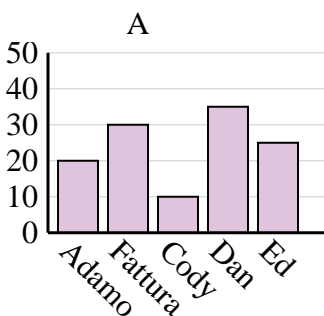
Saldi	Jan	febbraio	Mar	aprile	Maggio
Mese	4.500	1.000	2.000	5.000	4.000



Colore preferito	blu	verde	arancia	giallo	rosso
Le persone	3.000	7.000	10.000	9.000	1.000



Nome	Adamo	Fattura	Cody	Dan	Ed
Punti	10	45	35	20	30



1. **C**
2. **B**
3. **B**
4. **C**

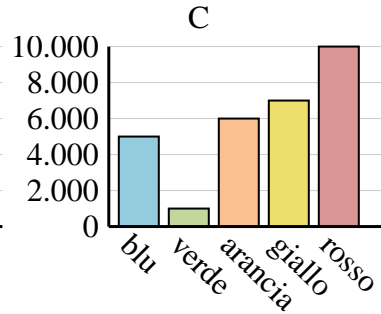
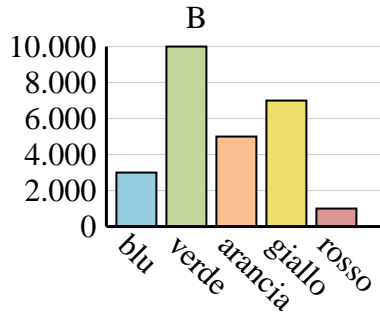
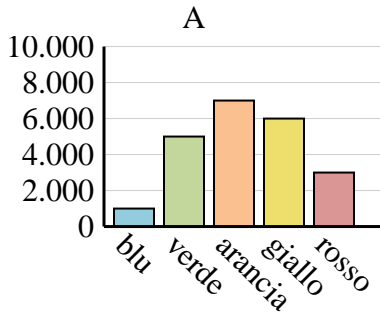


Determina quale grafico (A, B o C) rappresenta meglio le informazioni date nella tabella

**Risposte**

1)

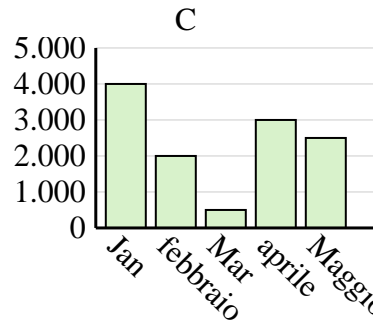
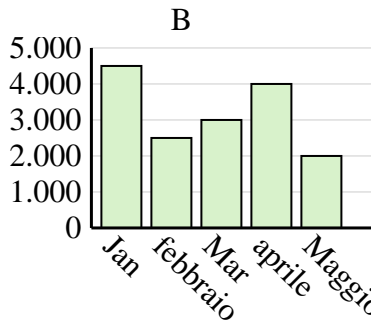
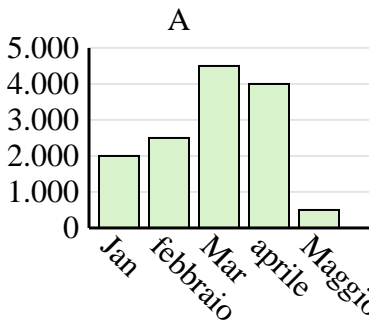
Colore preferito	blu	verde	arancia	giallo	rosso
Le persone	1.000	5.000	7.000	6.000	3.000



1. \_\_\_\_\_
2. \_\_\_\_\_
3. \_\_\_\_\_
4. \_\_\_\_\_

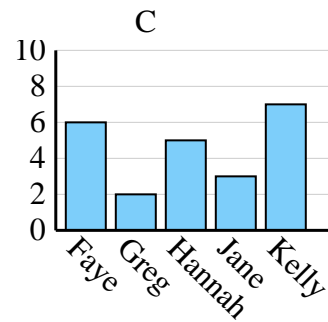
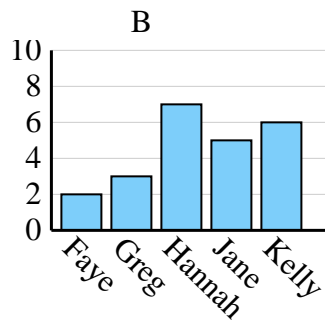
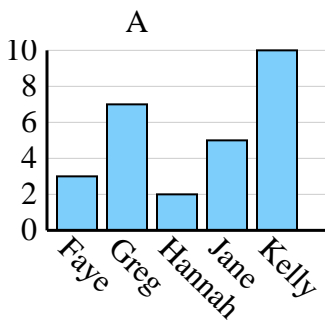
2)

Saldi	Jan	febbraio	Mar	aprile	Maggio
Mese	2.000	2.500	4.500	4.000	500



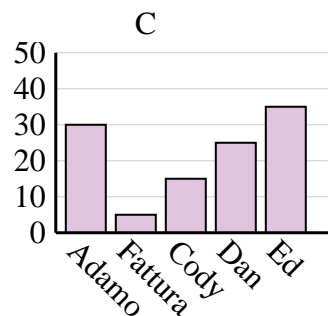
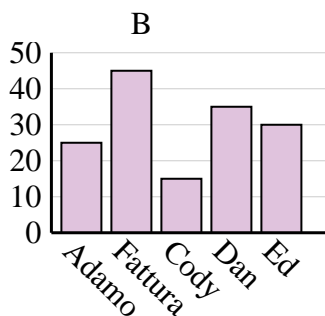
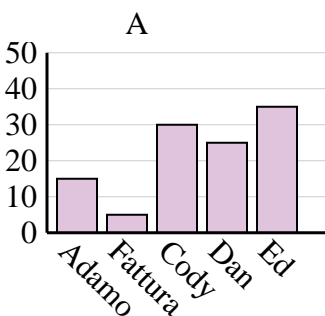
3)

Nome	Faye	Greg	Hannah	Jane	Kelly
Stati in cui vivevano	3	7	2	5	10



4)

Nome	Adamo	Fattura	Cody	Dan	Ed
Punti	25	45	15	35	30

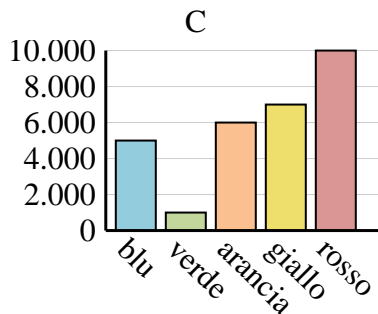
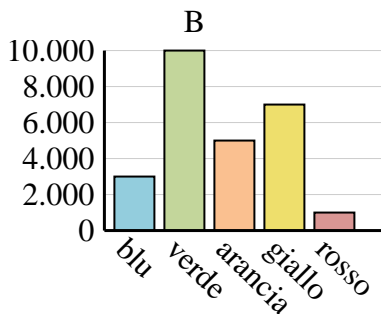
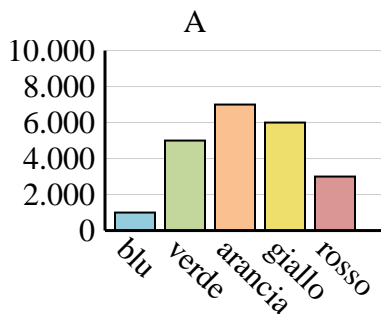




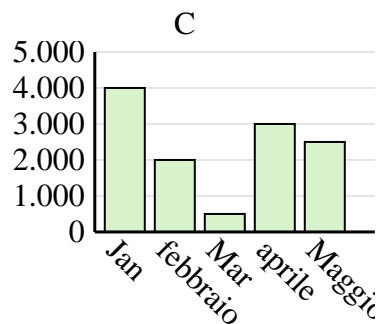
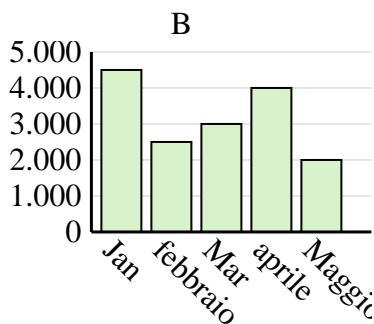
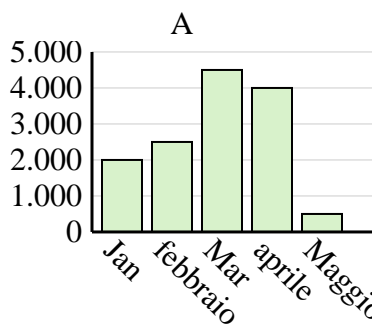
Determina quale grafico (A, B o C) rappresenta meglio le informazioni date nella tabella

Risposte

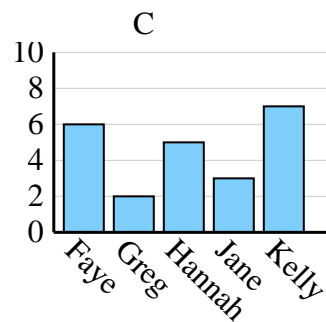
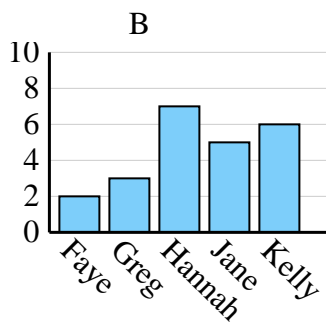
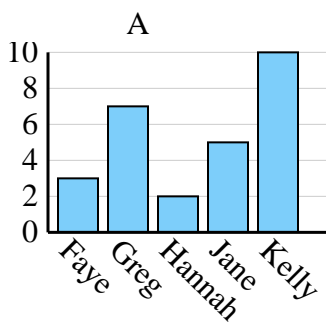
Colore preferito	blu	verde	arancia	giallo	rosso
Le persone	1.000	5.000	7.000	6.000	3.000



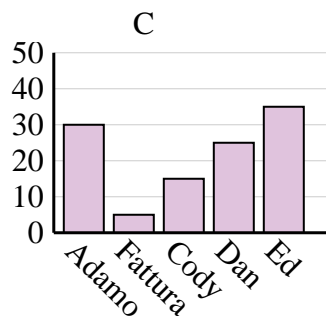
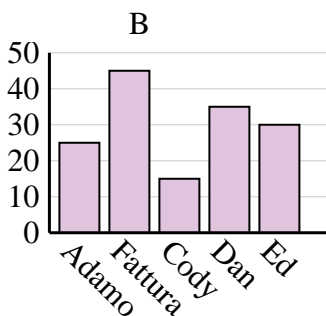
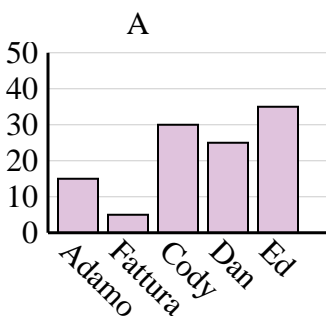
Saldi	Jan	febbraio	Mar	aprile	Maggio
Mese	2.000	2.500	4.500	4.000	500



Nome	Faye	Greg	Hannah	Jane	Kelly
Stati in cui vivevano	3	7	2	5	10



Nome	Adamo	Fattura	Cody	Dan	Ed
Punti	25	45	15	35	30



1. **A**
2. **A**
3. **A**
4. **B**