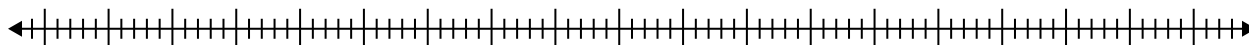


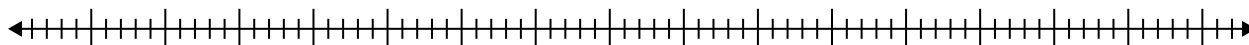


Crea un box plot dalle serie di numeri.

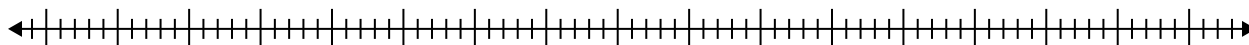
1) 52 , 70 , 21 , 22 , 47 , 25 , 70 , 32 , 89 , 90 , 96 , 29 , 39



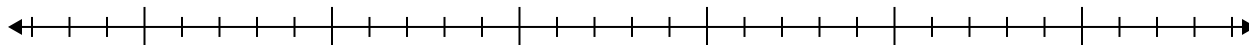
2) 65 , 37 , 30 , 30 , 75 , 79 , 87 , 61



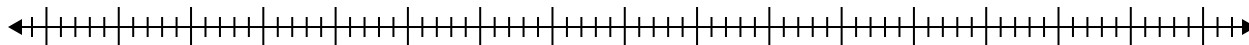
3) 79 , 91 , 61 , 29 , 60 , 88 , 32 , 97



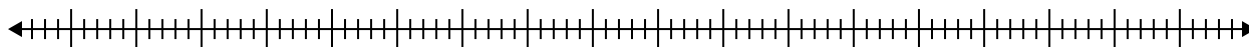
4) 8 , 5 , 12 , 13 , 14 , 5 , 10 , 12 , 17 , 8



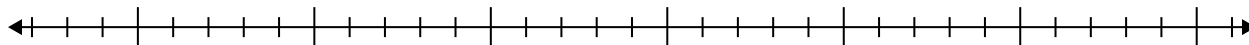
5) 92 , 30 , 23 , 45 , 62 , 90 , 90



6) 69 , 23 , 61 , 38 , 84 , 71 , 94 , 91 , 69

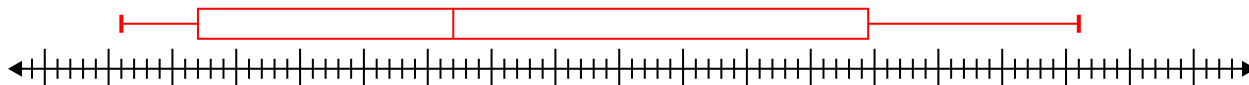
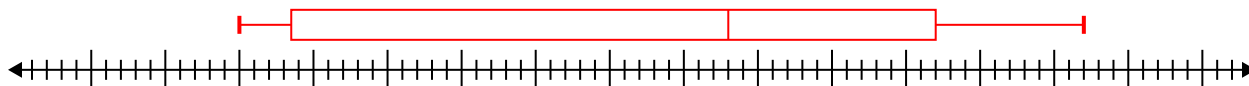
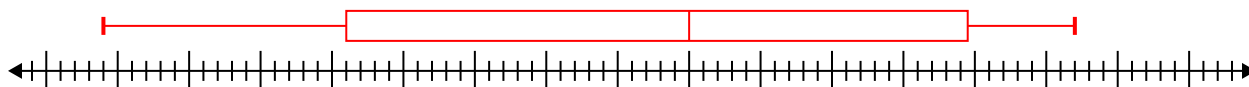
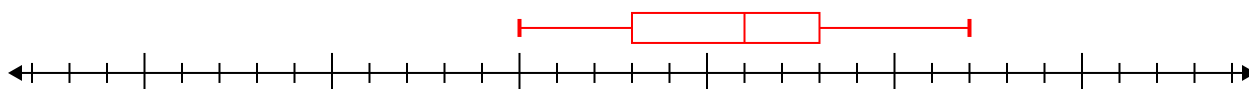
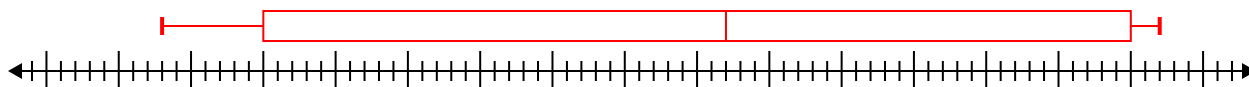
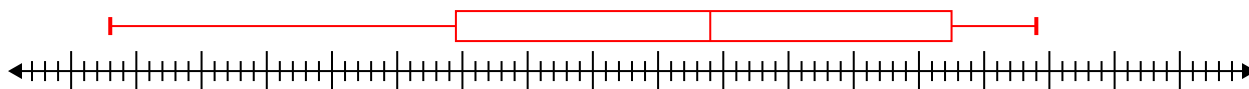


7) 18 , 7 , 13 , 11 , 6 , 13 , 19





Crea un box plot dalle serie di numeri.

1) 52, 70, 21, 22, 47, 25, 70, 32, 89, 90, 96, 29, 39 $\text{Min}=21$ $\text{Max}=96$ $q_1=27$ $Q_2=47$ $q_3=79.5$ 2) 65, 37, 30, 30, 75, 79, 87, 61 $\text{Min}=30$ $\text{Max}=87$ $q_1=33.5$ $Q_2=63$ $q_3=77$ 3) 79, 91, 61, 29, 60, 88, 32, 97 $\text{Min}=29$ $\text{Max}=97$ $q_1=46$ $Q_2=70$ $q_3=89.5$ 4) 8, 5, 12, 13, 14, 5, 10, 12, 17, 8 $\text{Min}=5$ $\text{Max}=17$ $q_1=8$ $Q_2=11$ $q_3=13$ 5) 92, 30, 23, 45, 62, 90, 90 $\text{Min}=23$ $\text{Max}=92$ $q_1=30$ $Q_2=62$ $q_3=90$ 6) 69, 23, 61, 38, 84, 71, 94, 91, 69 $\text{Min}=23$ $\text{Max}=94$ $q_1=49.5$ $Q_2=69$ $q_3=87.5$ 7) 18, 7, 13, 11, 6, 13, 19 $\text{Min}=6$ $\text{Max}=19$ $q_1=7$ $Q_2=13$ $q_3=18$ 