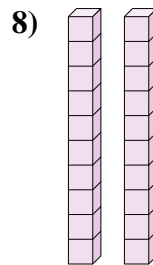
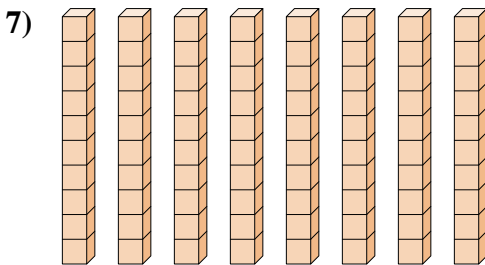
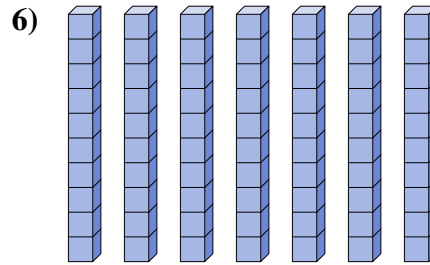
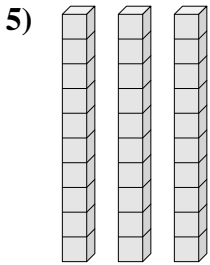
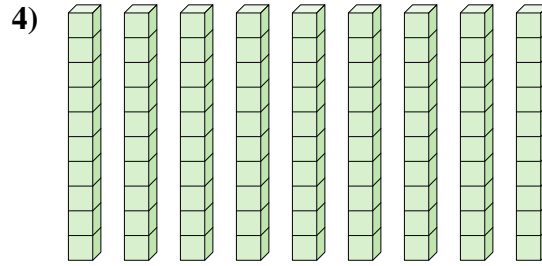
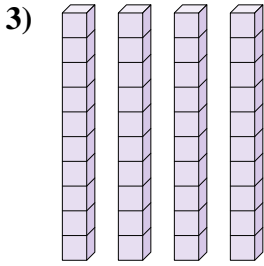
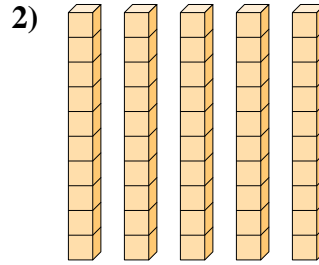
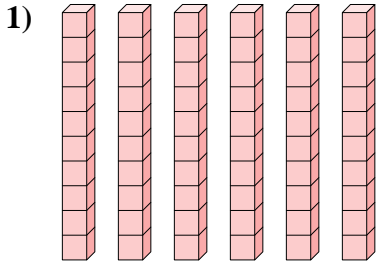




Determina la quantità dei gruppi di dieci. Poi trova la quantità dei quadrati più piccoli

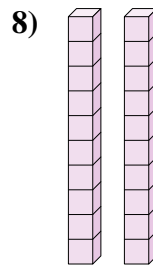
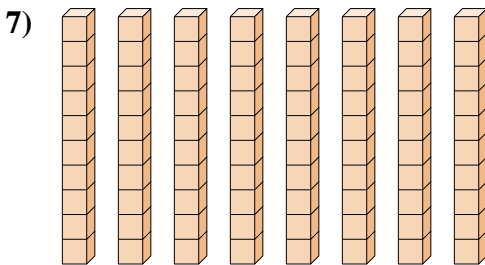
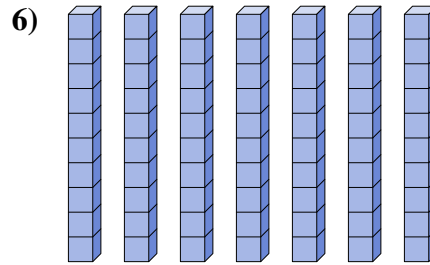
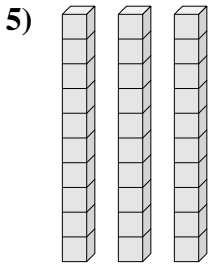
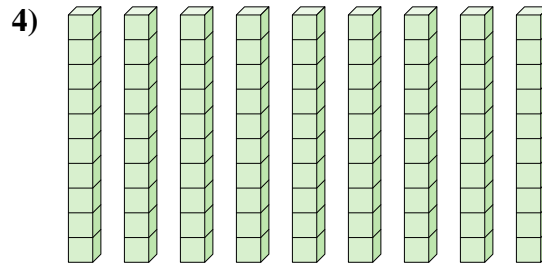
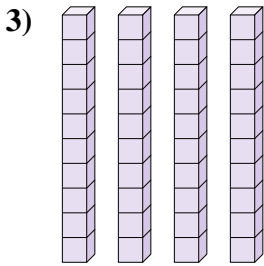
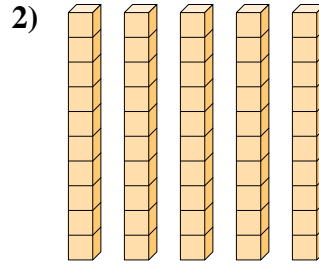
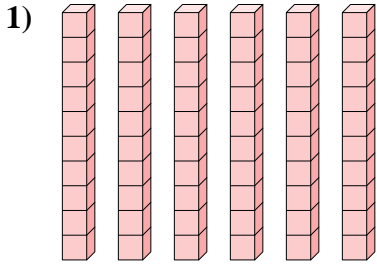
**Risposte**



- 1. \_\_\_\_\_
- 2. \_\_\_\_\_
- 3. \_\_\_\_\_
- 4. \_\_\_\_\_
- 5. \_\_\_\_\_
- 6. \_\_\_\_\_
- 7. \_\_\_\_\_
- 8. \_\_\_\_\_



Determina la quantità dei gruppi di dieci. Poi trova la quantità dei quadrati più piccoli



Risposte

- 1. 6     60
- 2. 5     50
- 3. 4     40
- 4. 9     90
- 5. 3     30
- 6. 7     70
- 7. 8     80
- 8. 2     20