



Usa il modello visivo per risolvere ogni problema.


1) $0,4 \times 0,9 =$




2) $0,4 \times 0,3 =$




3) $0,7 \times 0,1 =$




4) $0,8 \times 0,2 =$




5) $0,1 \times 0,6 =$




6) $0,3 \times 0,3 =$




7) $0,1 \times 0,1 =$




8) $0,1 \times 0,7 =$




9) $0,2 \times 0,6 =$




10) $0,1 \times 0,3 =$




11) $0,1 \times 0,9 =$




12) $0,6 \times 0,2 =$




13) $0,5 \times 0,1 =$



14) $0,9 \times 0,5 =$



15) $0,1 \times 0,5 =$



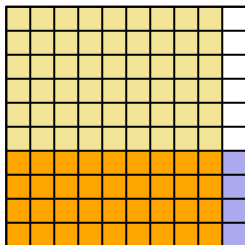
Risposte

1. _____
2. _____
3. _____
4. _____
5. _____
6. _____
7. _____
8. _____
9. _____
10. _____
11. _____
12. _____
13. _____
14. _____
15. _____

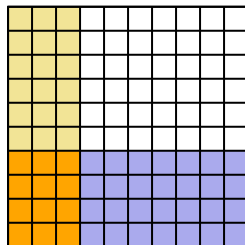


Usa il modello visivo per risolvere ogni problema.

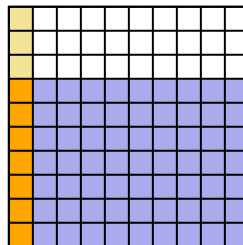
1) $0,4 \times 0,9 =$



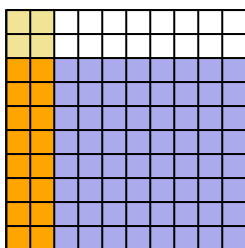
2) $0,4 \times 0,3 =$



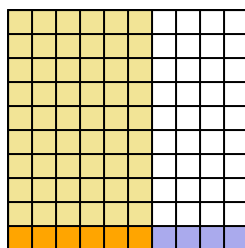
3) $0,7 \times 0,1 =$



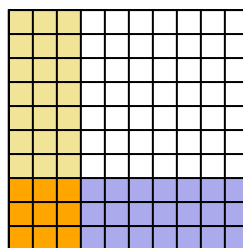
4) $0,8 \times 0,2 =$



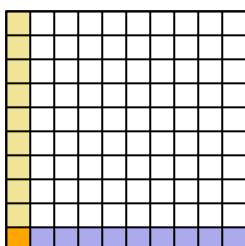
5) $0,1 \times 0,6 =$



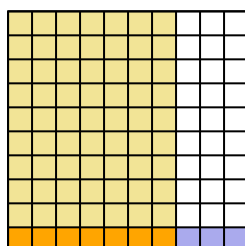
6) $0,3 \times 0,3 =$



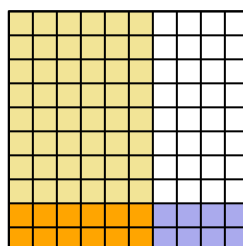
7) $0,1 \times 0,1 =$



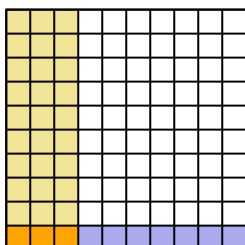
8) $0,1 \times 0,7 =$



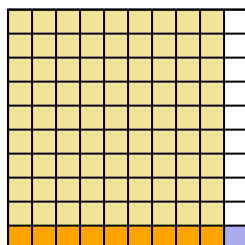
9) $0,2 \times 0,6 =$



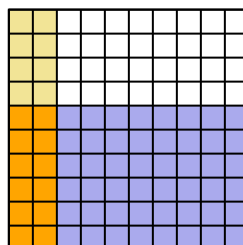
10) $0,1 \times 0,3 =$



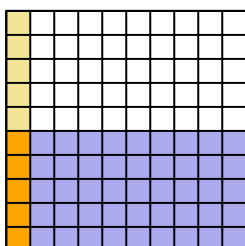
11) $0,1 \times 0,9 =$



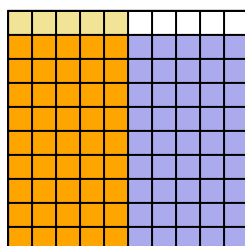
12) $0,6 \times 0,2 =$



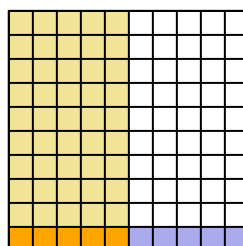
13) $0,5 \times 0,1 =$



14) $0,9 \times 0,5 =$



15) $0,1 \times 0,5 =$



Risposte

1. $\frac{36}{100} = 0,36$

2. $\frac{12}{100} = 0,12$

3. $\frac{7}{100} = 0,07$

4. $\frac{16}{100} = 0,16$

5. $\frac{6}{100} = 0,06$

6. $\frac{9}{100} = 0,09$

7. $\frac{1}{100} = 0,01$

8. $\frac{7}{100} = 0,07$

9. $\frac{12}{100} = 0,12$

10. $\frac{3}{100} = 0,03$

11. $\frac{9}{100} = 0,09$

12. $\frac{12}{100} = 0,12$

13. $\frac{5}{100} = 0,05$

14. $\frac{45}{100} = 0,45$

15. $\frac{5}{100} = 0,05$