





Usa il modello visivo per risolvere ogni problema.


1)  $0,5 \times 0,6 =$




2)  $0,9 \times 0,6 =$




3)  $0,1 \times 0,7 =$




4)  $0,1 \times 0,3 =$




5)  $0,7 \times 0,3 =$




6)  $0,1 \times 0,2 =$




7)  $0,6 \times 0,9 =$




8)  $0,9 \times 0,3 =$




9)  $0,5 \times 0,2 =$




10)  $0,4 \times 0,6 =$




11)  $0,5 \times 0,3 =$




12)  $0,3 \times 0,3 =$




13)  $0,5 \times 0,4 =$



14)  $0,3 \times 0,1 =$



15)  $0,4 \times 0,1 =$



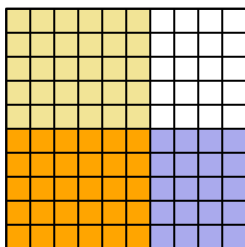
**Risposte**

1. \_\_\_\_\_
2. \_\_\_\_\_
3. \_\_\_\_\_
4. \_\_\_\_\_
5. \_\_\_\_\_
6. \_\_\_\_\_
7. \_\_\_\_\_
8. \_\_\_\_\_
9. \_\_\_\_\_
10. \_\_\_\_\_
11. \_\_\_\_\_
12. \_\_\_\_\_
13. \_\_\_\_\_
14. \_\_\_\_\_
15. \_\_\_\_\_

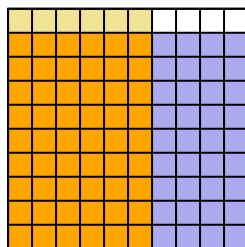


Usa il modello visivo per risolvere ogni problema.

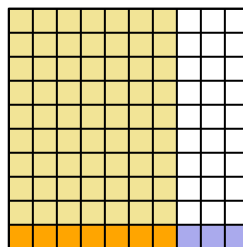
1)  $0,5 \times 0,6 =$



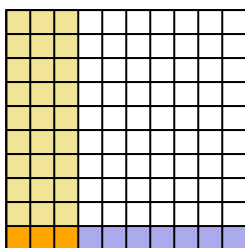
2)  $0,9 \times 0,6 =$



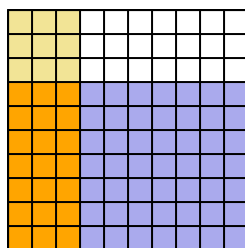
3)  $0,1 \times 0,7 =$



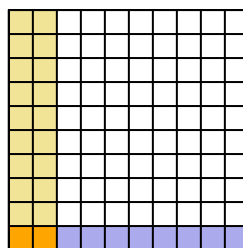
4)  $0,1 \times 0,3 =$



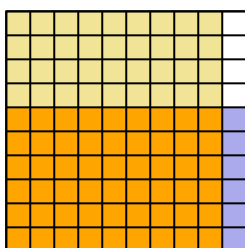
5)  $0,7 \times 0,3 =$



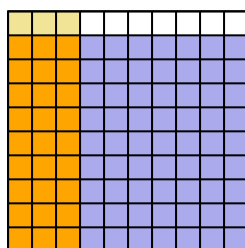
6)  $0,1 \times 0,2 =$



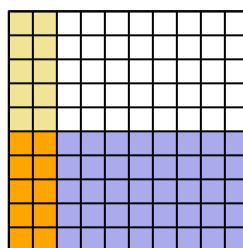
7)  $0,6 \times 0,9 =$



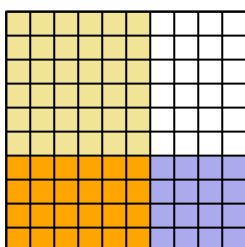
8)  $0,9 \times 0,3 =$



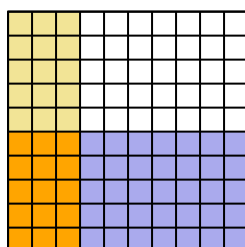
9)  $0,5 \times 0,2 =$



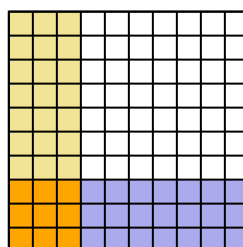
10)  $0,4 \times 0,6 =$



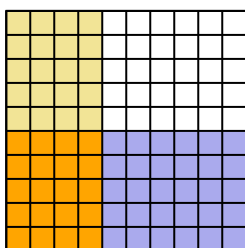
11)  $0,5 \times 0,3 =$



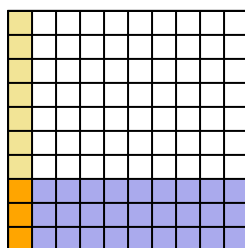
12)  $0,3 \times 0,3 =$



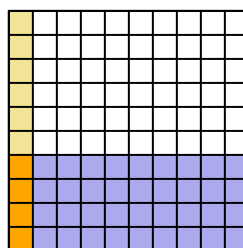
13)  $0,5 \times 0,4 =$



14)  $0,3 \times 0,1 =$



15)  $0,4 \times 0,1 =$



**Risposte**

1.  $\frac{30}{100} = 0,3$
2.  $\frac{54}{100} = 0,54$
3.  $\frac{7}{100} = 0,07$
4.  $\frac{3}{100} = 0,03$
5.  $\frac{21}{100} = 0,21$
6.  $\frac{2}{100} = 0,02$
7.  $\frac{54}{100} = 0,54$
8.  $\frac{27}{100} = 0,27$
9.  $\frac{10}{100} = 0,1$
10.  $\frac{24}{100} = 0,24$
11.  $\frac{15}{100} = 0,15$
12.  $\frac{9}{100} = 0,09$
13.  $\frac{20}{100} = 0,2$
14.  $\frac{3}{100} = 0,03$
15.  $\frac{4}{100} = 0,04$