





Usa il modello visivo per risolvere ogni problema.


1) $0,2 \times 0,8 =$




2) $0,1 \times 0,5 =$




3) $0,3 \times 0,8 =$




4) $0,4 \times 0,5 =$




5) $0,6 \times 0,8 =$




6) $0,9 \times 0,5 =$




7) $0,5 \times 0,6 =$




8) $0,9 \times 0,3 =$




9) $0,5 \times 0,4 =$




10) $0,2 \times 0,1 =$




11) $0,5 \times 0,5 =$




12) $0,8 \times 0,9 =$




13) $0,1 \times 0,7 =$



14) $0,2 \times 0,4 =$



15) $0,9 \times 0,9 =$



Risposte

1. _____
2. _____
3. _____
4. _____
5. _____
6. _____
7. _____
8. _____
9. _____
10. _____
11. _____
12. _____
13. _____
14. _____
15. _____

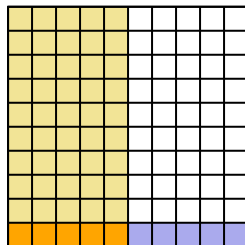


Usa il modello visivo per risolvere ogni problema.

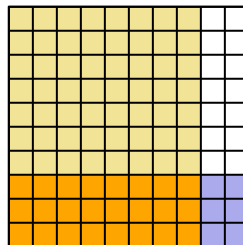
1) $0,2 \times 0,8 =$



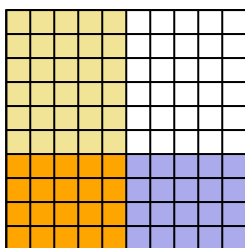
2) $0,1 \times 0,5 =$



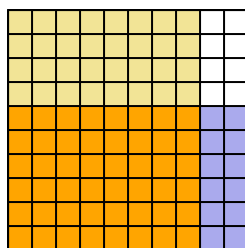
3) $0,3 \times 0,8 =$



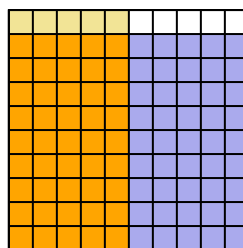
4) $0,4 \times 0,5 =$



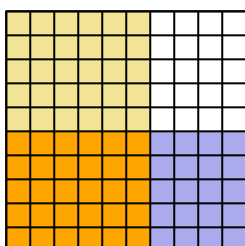
5) $0,6 \times 0,8 =$



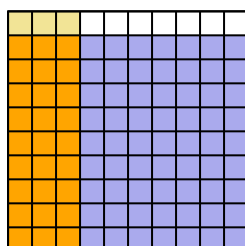
6) $0,9 \times 0,5 =$



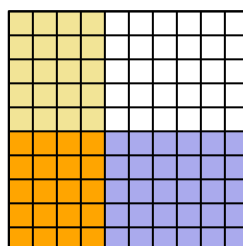
7) $0,5 \times 0,6 =$



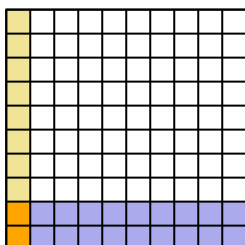
8) $0,9 \times 0,3 =$



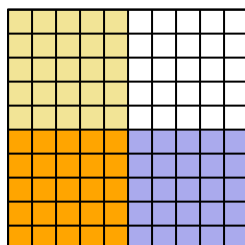
9) $0,5 \times 0,4 =$



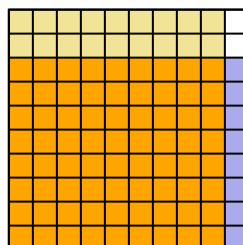
10) $0,2 \times 0,1 =$



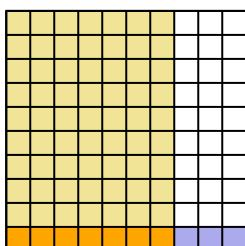
11) $0,5 \times 0,5 =$



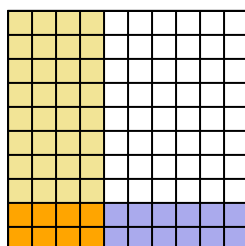
12) $0,8 \times 0,9 =$



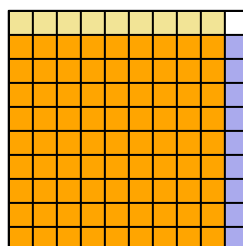
13) $0,1 \times 0,7 =$



14) $0,2 \times 0,4 =$



15) $0,9 \times 0,9 =$




Risposte

1. $\frac{16}{100} = 0,16$
2. $\frac{5}{100} = 0,05$
3. $\frac{24}{100} = 0,24$
4. $\frac{20}{100} = 0,2$
5. $\frac{48}{100} = 0,48$
6. $\frac{45}{100} = 0,45$
7. $\frac{30}{100} = 0,3$
8. $\frac{27}{100} = 0,27$
9. $\frac{20}{100} = 0,2$
10. $\frac{2}{100} = 0,02$
11. $\frac{25}{100} = 0,25$
12. $\frac{72}{100} = 0,72$
13. $\frac{7}{100} = 0,07$
14. $\frac{8}{100} = 0,08$
15. $\frac{81}{100} = 0,81$




Usa il modello visivo per risolvere ogni problema.


1) $0,4 \times 0,9 =$




2) $0,4 \times 0,3 =$




3) $0,7 \times 0,1 =$




4) $0,8 \times 0,2 =$




5) $0,1 \times 0,6 =$




6) $0,3 \times 0,3 =$




7) $0,1 \times 0,1 =$




8) $0,1 \times 0,7 =$




9) $0,2 \times 0,6 =$




10) $0,1 \times 0,3 =$




11) $0,1 \times 0,9 =$




12) $0,6 \times 0,2 =$




13) $0,5 \times 0,1 =$



14) $0,9 \times 0,5 =$



15) $0,1 \times 0,5 =$



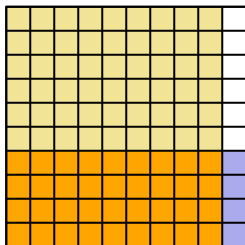
Risposte

1. _____
2. _____
3. _____
4. _____
5. _____
6. _____
7. _____
8. _____
9. _____
10. _____
11. _____
12. _____
13. _____
14. _____
15. _____

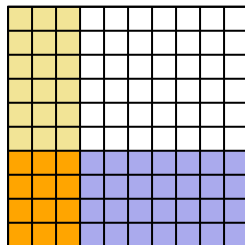


Usa il modello visivo per risolvere ogni problema.

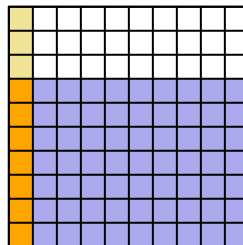
1) $0,4 \times 0,9 =$



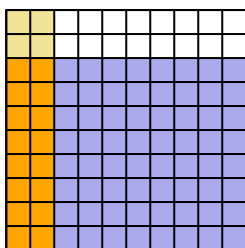
2) $0,4 \times 0,3 =$



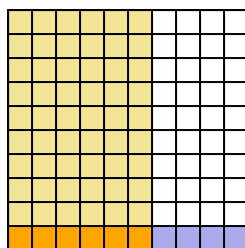
3) $0,7 \times 0,1 =$



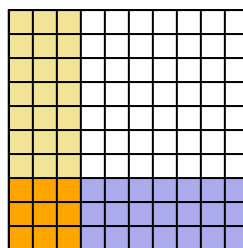
4) $0,8 \times 0,2 =$



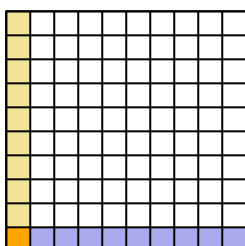
5) $0,1 \times 0,6 =$



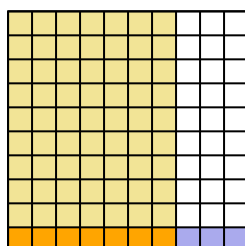
6) $0,3 \times 0,3 =$



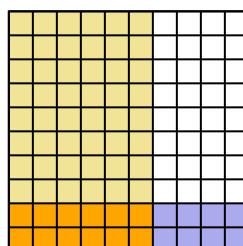
7) $0,1 \times 0,1 =$



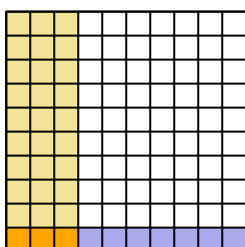
8) $0,1 \times 0,7 =$



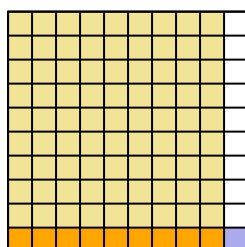
9) $0,2 \times 0,6 =$



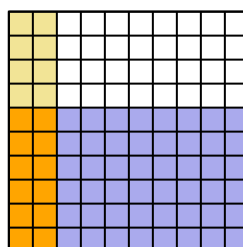
10) $0,1 \times 0,3 =$



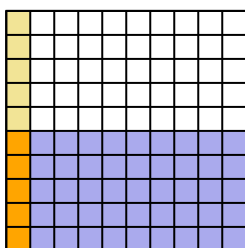
11) $0,1 \times 0,9 =$



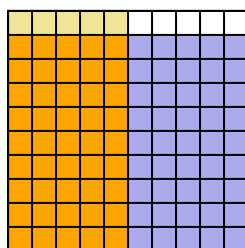
12) $0,6 \times 0,2 =$



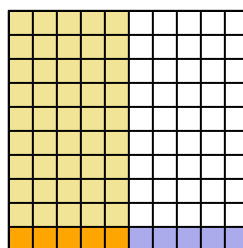
13) $0,5 \times 0,1 =$



14) $0,9 \times 0,5 =$



15) $0,1 \times 0,5 =$



Risposte

1. $\frac{36}{100} = 0,36$

2. $\frac{12}{100} = 0,12$

3. $\frac{7}{100} = 0,07$

4. $\frac{16}{100} = 0,16$

5. $\frac{6}{100} = 0,06$

6. $\frac{9}{100} = 0,09$

7. $\frac{1}{100} = 0,01$

8. $\frac{7}{100} = 0,07$

9. $\frac{12}{100} = 0,12$

10. $\frac{3}{100} = 0,03$

11. $\frac{9}{100} = 0,09$

12. $\frac{12}{100} = 0,12$

13. $\frac{5}{100} = 0,05$


14. $\frac{45}{100} = 0,45$

15. $\frac{5}{100} = 0,05$




Usa il modello visivo per risolvere ogni problema.


1) $0,9 \times 0,5 =$




2) $0,6 \times 0,2 =$




3) $0,2 \times 0,9 =$




4) $0,7 \times 0,2 =$




5) $0,2 \times 0,6 =$




6) $0,4 \times 0,8 =$




7) $0,5 \times 0,8 =$




8) $0,9 \times 0,3 =$




9) $0,8 \times 0,5 =$




10) $0,4 \times 0,5 =$




11) $0,2 \times 0,1 =$




12) $0,5 \times 0,2 =$




13) $0,8 \times 0,4 =$



14) $0,7 \times 0,9 =$



15) $0,7 \times 0,1 =$



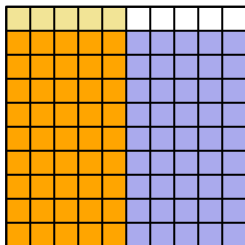
Risposte

1. _____
2. _____
3. _____
4. _____
5. _____
6. _____
7. _____
8. _____
9. _____
10. _____
11. _____
12. _____
13. _____
14. _____
15. _____

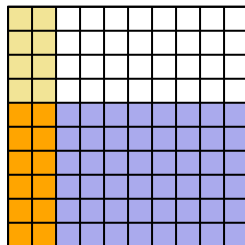


Usa il modello visivo per risolvere ogni problema.

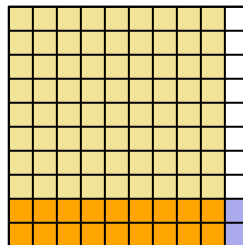
1) $0,9 \times 0,5 =$



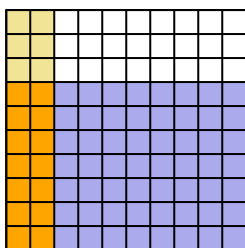
2) $0,6 \times 0,2 =$



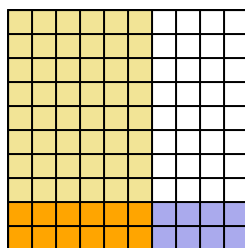
3) $0,2 \times 0,9 =$



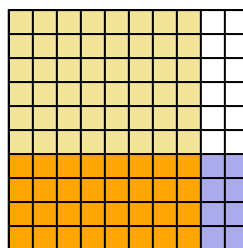
4) $0,7 \times 0,2 =$



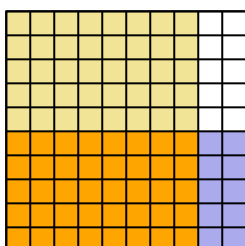
5) $0,2 \times 0,6 =$



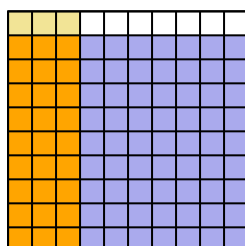
6) $0,4 \times 0,8 =$



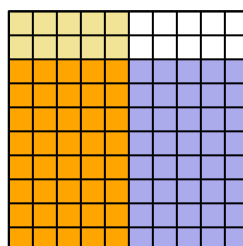
7) $0,5 \times 0,8 =$



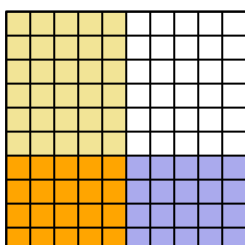
8) $0,9 \times 0,3 =$



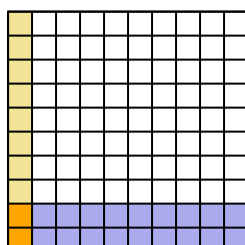
9) $0,8 \times 0,5 =$



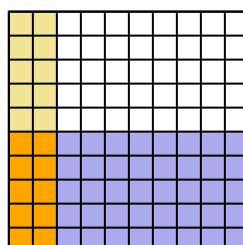
10) $0,4 \times 0,5 =$



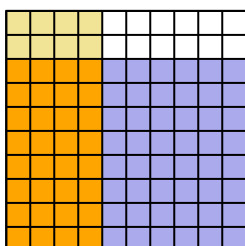
11) $0,2 \times 0,1 =$



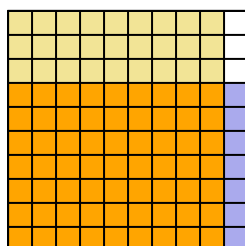
12) $0,5 \times 0,2 =$



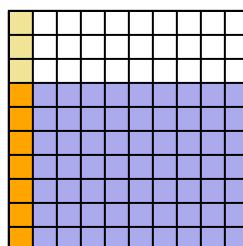
13) $0,8 \times 0,4 =$



14) $0,7 \times 0,9 =$



15) $0,7 \times 0,1 =$




Risposte

1. $\frac{45}{100} = 0,45$
2. $\frac{12}{100} = 0,12$
3. $\frac{18}{100} = 0,18$
4. $\frac{14}{100} = 0,14$
5. $\frac{12}{100} = 0,12$
6. $\frac{32}{100} = 0,32$
7. $\frac{40}{100} = 0,4$
8. $\frac{27}{100} = 0,27$
9. $\frac{40}{100} = 0,4$
10. $\frac{20}{100} = 0,2$
11. $\frac{2}{100} = 0,02$
12. $\frac{10}{100} = 0,1$
13. $\frac{32}{100} = 0,32$
14. $\frac{63}{100} = 0,63$
15. $\frac{7}{100} = 0,07$




Usa il modello visivo per risolvere ogni problema.


1) $0,2 \times 0,8 =$




2) $0,4 \times 0,3 =$




3) $0,7 \times 0,4 =$




4) $0,1 \times 0,9 =$




5) $0,5 \times 0,4 =$




6) $0,4 \times 0,8 =$




7) $0,1 \times 0,7 =$




8) $0,7 \times 0,6 =$




9) $0,3 \times 0,1 =$




10) $0,3 \times 0,9 =$




11) $0,3 \times 0,2 =$




12) $0,3 \times 0,7 =$




13) $0,8 \times 0,9 =$



14) $0,6 \times 0,6 =$



15) $0,7 \times 0,3 =$



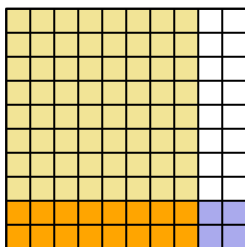
Risposte

1. _____
2. _____
3. _____
4. _____
5. _____
6. _____
7. _____
8. _____
9. _____
10. _____
11. _____
12. _____
13. _____
14. _____
15. _____

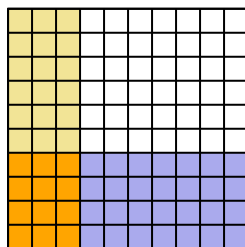


Usa il modello visivo per risolvere ogni problema.

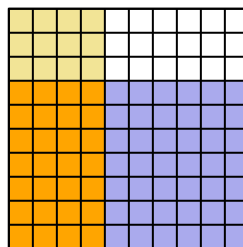
1) $0,2 \times 0,8 =$



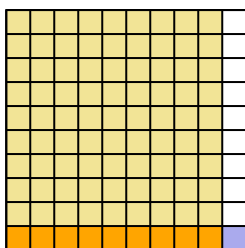
2) $0,4 \times 0,3 =$



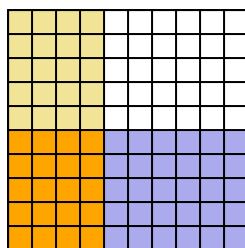
3) $0,7 \times 0,4 =$



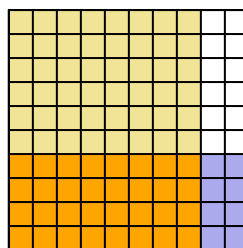
4) $0,1 \times 0,9 =$



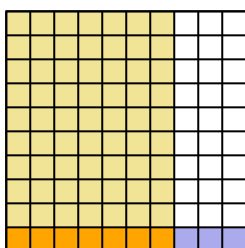
5) $0,5 \times 0,4 =$



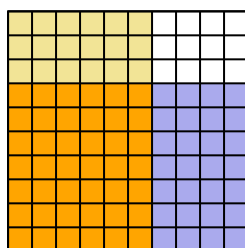
6) $0,4 \times 0,8 =$



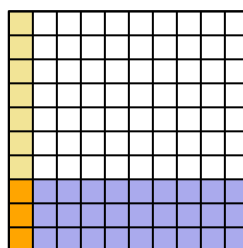
7) $0,1 \times 0,7 =$



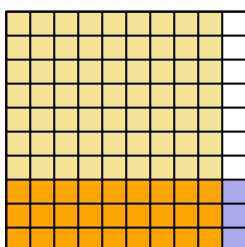
8) $0,7 \times 0,6 =$



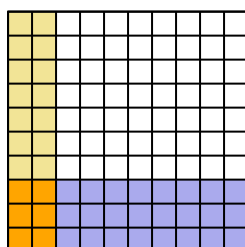
9) $0,3 \times 0,1 =$



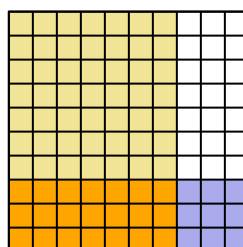
10) $0,3 \times 0,9 =$



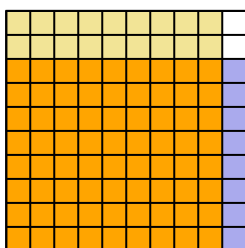
11) $0,3 \times 0,2 =$



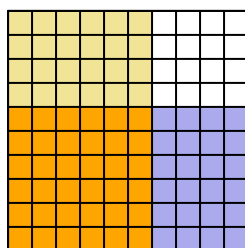
12) $0,3 \times 0,7 =$



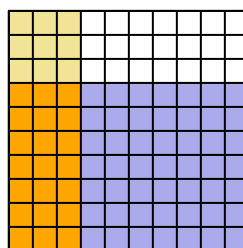
13) $0,8 \times 0,9 =$



14) $0,6 \times 0,6 =$



15) $0,7 \times 0,3 =$



Risposte

1. $\frac{16}{100} = 0,16$
2. $\frac{12}{100} = 0,12$
3. $\frac{28}{100} = 0,28$
4. $\frac{9}{100} = 0,09$
5. $\frac{20}{100} = 0,2$
6. $\frac{32}{100} = 0,32$
7. $\frac{7}{100} = 0,07$
8. $\frac{42}{100} = 0,42$
9. $\frac{3}{100} = 0,03$
10. $\frac{27}{100} = 0,27$
11. $\frac{6}{100} = 0,06$
12. $\frac{21}{100} = 0,21$
13. $\frac{72}{100} = 0,72$
14. $\frac{36}{100} = 0,36$
15. $\frac{21}{100} = 0,21$



Usa il modello visivo per risolvere ogni problema.


1) $0,6 \times 0,9 =$




2) $0,6 \times 0,3 =$




3) $0,5 \times 0,9 =$




4) $0,1 \times 0,7 =$




5) $0,5 \times 0,2 =$




6) $0,1 \times 0,5 =$




7) $0,1 \times 0,4 =$




8) $0,6 \times 0,4 =$




9) $0,4 \times 0,4 =$




10) $0,8 \times 0,8 =$




11) $0,7 \times 0,2 =$




12) $0,9 \times 0,4 =$




13) $0,2 \times 0,9 =$



14) $0,6 \times 0,6 =$



15) $0,5 \times 0,4 =$



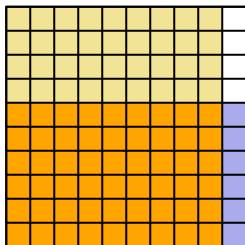
Risposte

1. _____
2. _____
3. _____
4. _____
5. _____
6. _____
7. _____
8. _____
9. _____
10. _____
11. _____
12. _____
13. _____
14. _____
15. _____

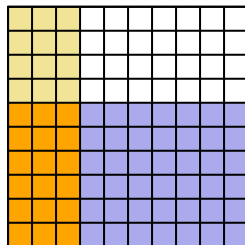


Usa il modello visivo per risolvere ogni problema.

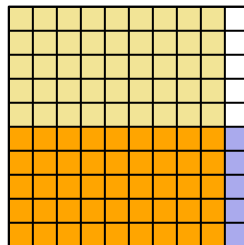
1) $0,6 \times 0,9 =$



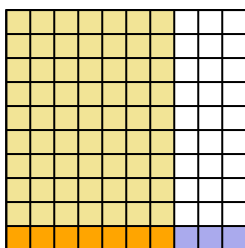
2) $0,6 \times 0,3 =$



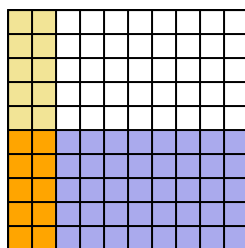
3) $0,5 \times 0,9 =$



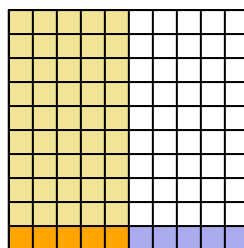
4) $0,1 \times 0,7 =$



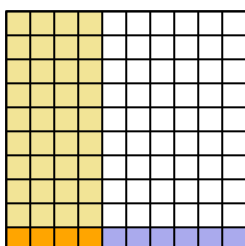
5) $0,5 \times 0,2 =$



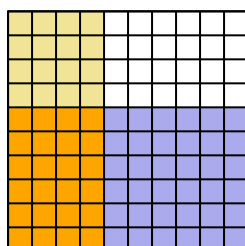
6) $0,1 \times 0,5 =$



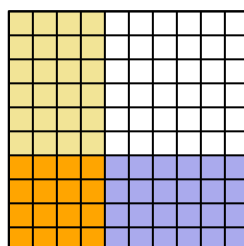
7) $0,1 \times 0,4 =$



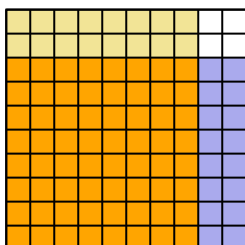
8) $0,6 \times 0,4 =$



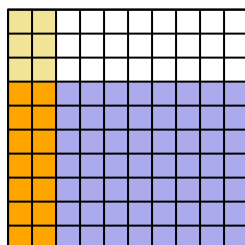
9) $0,4 \times 0,4 =$



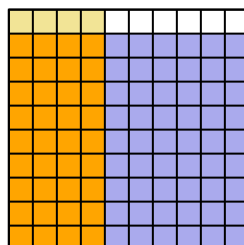
10) $0,8 \times 0,8 =$



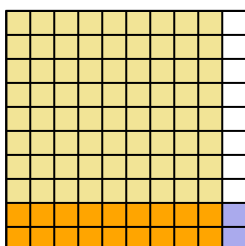
11) $0,7 \times 0,2 =$



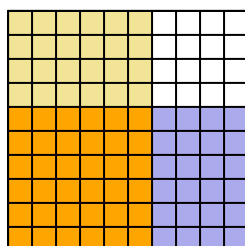
12) $0,9 \times 0,4 =$



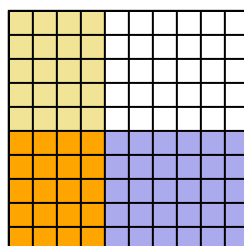
13) $0,2 \times 0,9 =$



14) $0,6 \times 0,6 =$



15) $0,5 \times 0,4 =$




Risposte

1. $\frac{54}{100} = 0,54$
2. $\frac{18}{100} = 0,18$
3. $\frac{45}{100} = 0,45$
4. $\frac{7}{100} = 0,07$
5. $\frac{10}{100} = 0,1$
6. $\frac{5}{100} = 0,05$
7. $\frac{4}{100} = 0,04$
8. $\frac{24}{100} = 0,24$
9. $\frac{16}{100} = 0,16$
10. $\frac{64}{100} = 0,64$
11. $\frac{14}{100} = 0,14$
12. $\frac{36}{100} = 0,36$
13. $\frac{18}{100} = 0,18$
14. $\frac{36}{100} = 0,36$
15. $\frac{20}{100} = 0,2$




Usa il modello visivo per risolvere ogni problema.


1) $0,5 \times 0,6 =$




2) $0,9 \times 0,6 =$




3) $0,1 \times 0,7 =$




4) $0,1 \times 0,3 =$




5) $0,7 \times 0,3 =$




6) $0,1 \times 0,2 =$




7) $0,6 \times 0,9 =$




8) $0,9 \times 0,3 =$




9) $0,5 \times 0,2 =$




10) $0,4 \times 0,6 =$




11) $0,5 \times 0,3 =$




12) $0,3 \times 0,3 =$




13) $0,5 \times 0,4 =$



14) $0,3 \times 0,1 =$



15) $0,4 \times 0,1 =$



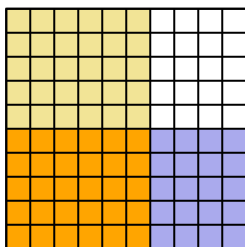
Risposte

1. _____
2. _____
3. _____
4. _____
5. _____
6. _____
7. _____
8. _____
9. _____
10. _____
11. _____
12. _____
13. _____
14. _____
15. _____

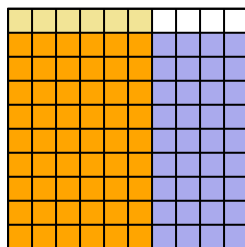


Usa il modello visivo per risolvere ogni problema.

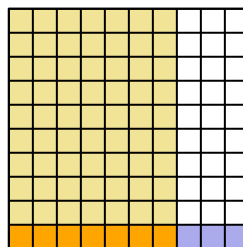
1) $0,5 \times 0,6 =$



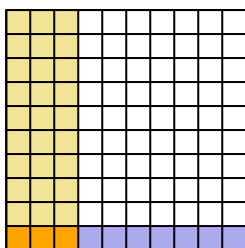
2) $0,9 \times 0,6 =$



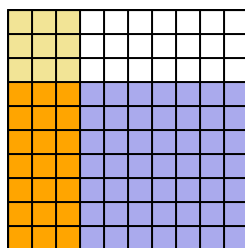
3) $0,1 \times 0,7 =$



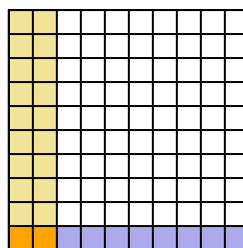
4) $0,1 \times 0,3 =$



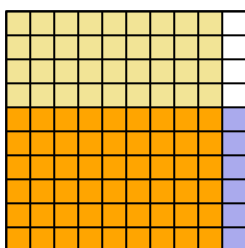
5) $0,7 \times 0,3 =$



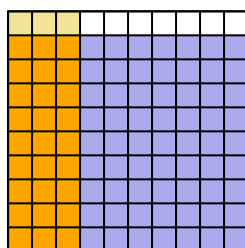
6) $0,1 \times 0,2 =$



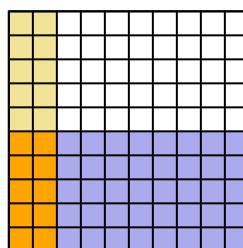
7) $0,6 \times 0,9 =$



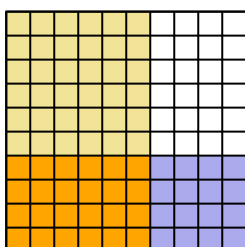
8) $0,9 \times 0,3 =$



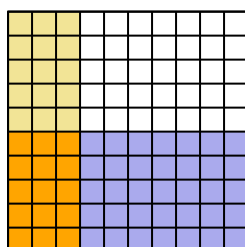
9) $0,5 \times 0,2 =$



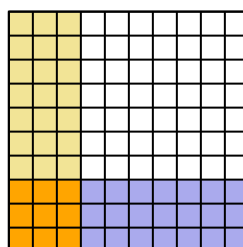
10) $0,4 \times 0,6 =$



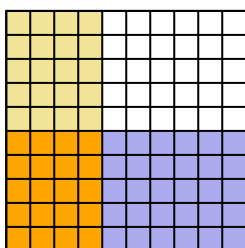
11) $0,5 \times 0,3 =$



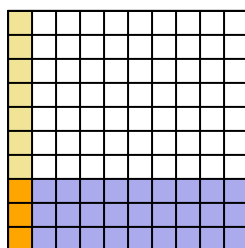
12) $0,3 \times 0,3 =$



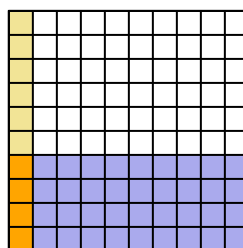
13) $0,5 \times 0,4 =$



14) $0,3 \times 0,1 =$



15) $0,4 \times 0,1 =$



Risposte

1. $\frac{30}{100} = 0,3$

2. $\frac{54}{100} = 0,54$

3. $\frac{7}{100} = 0,07$

4. $\frac{3}{100} = 0,03$

5. $\frac{21}{100} = 0,21$

6. $\frac{2}{100} = 0,02$

7. $\frac{54}{100} = 0,54$

8. $\frac{27}{100} = 0,27$

9. $\frac{10}{100} = 0,1$

10. $\frac{24}{100} = 0,24$

11. $\frac{15}{100} = 0,15$

12. $\frac{9}{100} = 0,09$

13. $\frac{20}{100} = 0,2$


14. $\frac{3}{100} = 0,03$

15. $\frac{4}{100} = 0,04$




Usa il modello visivo per risolvere ogni problema.

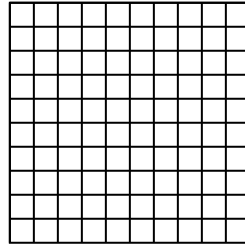
1) $0,5 \times 0,7 =$




2) $0,7 \times 0,5 =$




3) $0,1 \times 0,4 =$



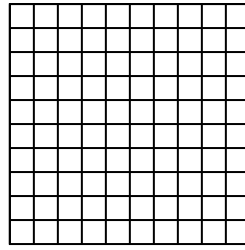
4) $0,7 \times 0,9 =$




5) $0,1 \times 0,7 =$




6) $0,9 \times 0,8 =$



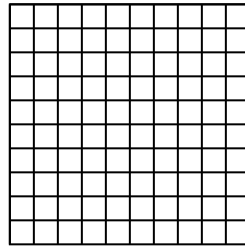
7) $0,7 \times 0,2 =$




8) $0,8 \times 0,7 =$




9) $0,8 \times 0,2 =$



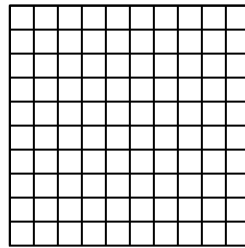
10) $0,8 \times 0,8 =$




11) $0,3 \times 0,5 =$




12) $0,6 \times 0,6 =$




13) $0,2 \times 0,2 =$



14) $0,1 \times 0,6 =$



15) $0,6 \times 0,8 =$



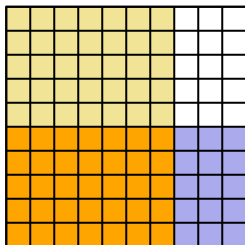
Risposte

1. _____
2. _____
3. _____
4. _____
5. _____
6. _____
7. _____
8. _____
9. _____
10. _____
11. _____
12. _____
13. _____
14. _____
15. _____

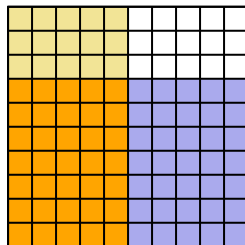


Usa il modello visivo per risolvere ogni problema.

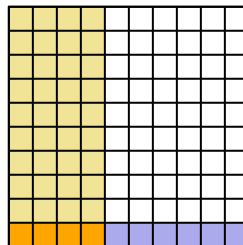
1) $0,5 \times 0,7 =$



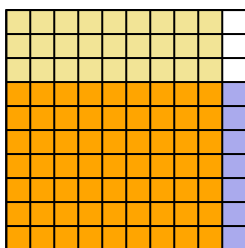
2) $0,7 \times 0,5 =$



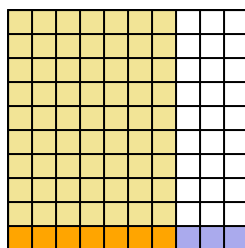
3) $0,1 \times 0,4 =$



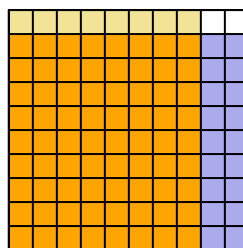
4) $0,7 \times 0,9 =$



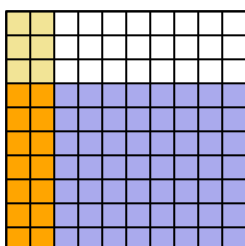
5) $0,1 \times 0,7 =$



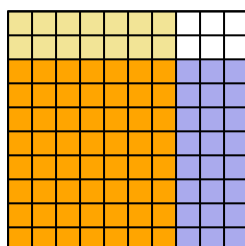
6) $0,9 \times 0,8 =$



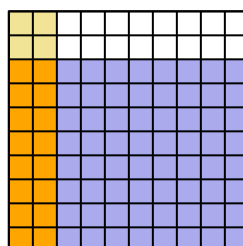
7) $0,7 \times 0,2 =$



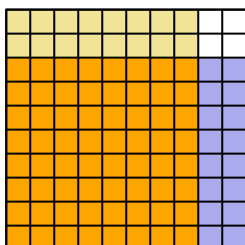
8) $0,8 \times 0,7 =$



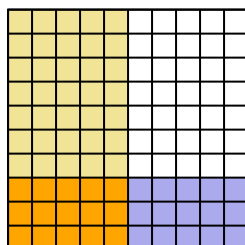
9) $0,8 \times 0,2 =$



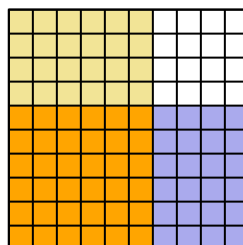
10) $0,8 \times 0,8 =$



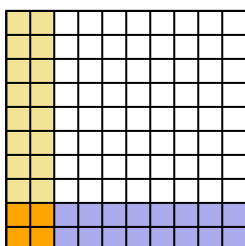
11) $0,3 \times 0,5 =$



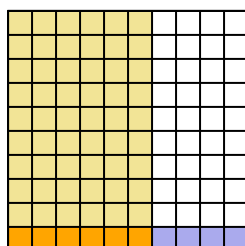
12) $0,6 \times 0,6 =$



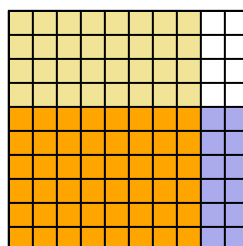
13) $0,2 \times 0,2 =$



14) $0,1 \times 0,6 =$



15) $0,6 \times 0,8 =$



Risposte

1. $\frac{35}{100} = 0,35$

2. $\frac{35}{100} = 0,35$

3. $\frac{4}{100} = 0,04$

4. $\frac{63}{100} = 0,63$

5. $\frac{7}{100} = 0,07$

6. $\frac{72}{100} = 0,72$

7. $\frac{14}{100} = 0,14$

8. $\frac{56}{100} = 0,56$

9. $\frac{16}{100} = 0,16$

10. $\frac{64}{100} = 0,64$

11. $\frac{15}{100} = 0,15$

12. $\frac{36}{100} = 0,36$

13. $\frac{4}{100} = 0,04$


14. $\frac{6}{100} = 0,06$

15. $\frac{48}{100} = 0,48$




Usa il modello visivo per risolvere ogni problema.


1) $0,9 \times 0,6 =$




2) $0,3 \times 0,2 =$




3) $0,6 \times 0,2 =$



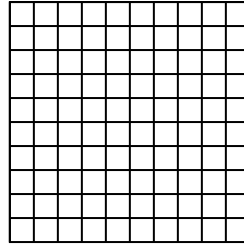
4) $0,6 \times 0,5 =$




5) $0,3 \times 0,6 =$




6) $0,8 \times 0,3 =$



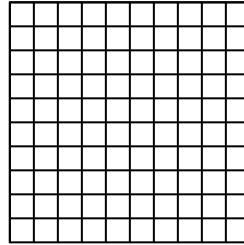
7) $0,9 \times 0,3 =$




8) $0,7 \times 0,1 =$




9) $0,8 \times 0,7 =$



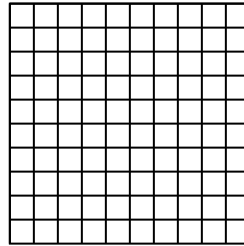
10) $0,3 \times 0,3 =$




11) $0,8 \times 0,6 =$




12) $0,1 \times 0,1 =$




13) $0,9 \times 0,2 =$



14) $0,8 \times 0,4 =$



15) $0,2 \times 0,4 =$



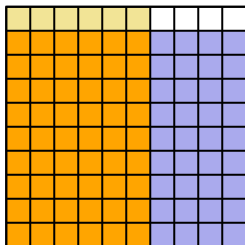
Risposte

1. _____
2. _____
3. _____
4. _____
5. _____
6. _____
7. _____
8. _____
9. _____
10. _____
11. _____
12. _____
13. _____
14. _____
15. _____

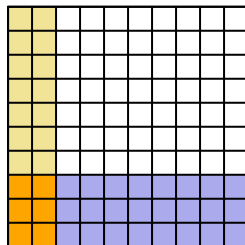


Usa il modello visivo per risolvere ogni problema.

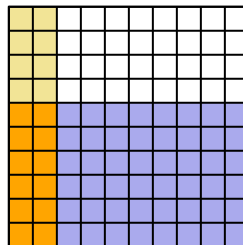
1) $0,9 \times 0,6 =$



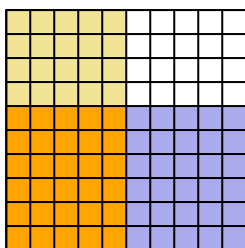
2) $0,3 \times 0,2 =$



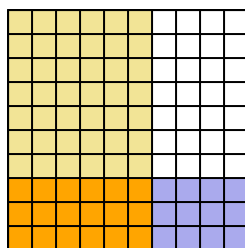
3) $0,6 \times 0,2 =$



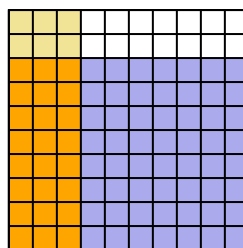
4) $0,6 \times 0,5 =$



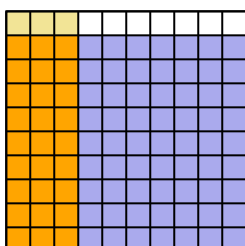
5) $0,3 \times 0,6 =$



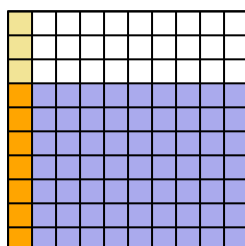
6) $0,8 \times 0,3 =$



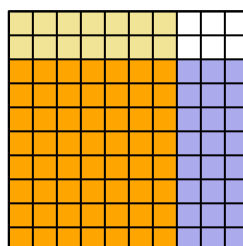
7) $0,9 \times 0,3 =$



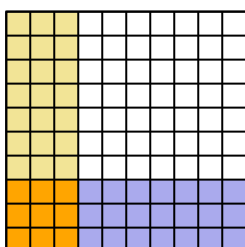
8) $0,7 \times 0,1 =$



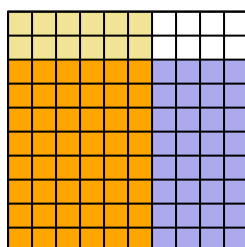
9) $0,8 \times 0,7 =$



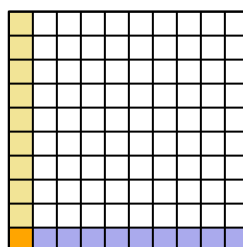
10) $0,3 \times 0,3 =$



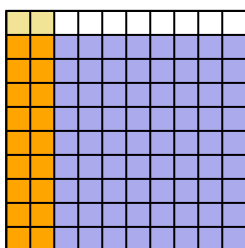
11) $0,8 \times 0,6 =$



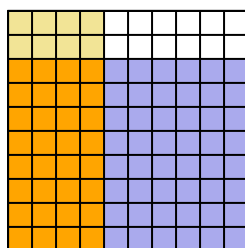
12) $0,1 \times 0,1 =$



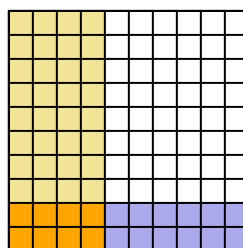
13) $0,9 \times 0,2 =$



14) $0,8 \times 0,4 =$



15) $0,2 \times 0,4 =$



Risposte

1. $\frac{54}{100} = 0,54$

2. $\frac{6}{100} = 0,06$

3. $\frac{12}{100} = 0,12$

4. $\frac{30}{100} = 0,3$

5. $\frac{18}{100} = 0,18$

6. $\frac{24}{100} = 0,24$

7. $\frac{27}{100} = 0,27$

8. $\frac{7}{100} = 0,07$

9. $\frac{56}{100} = 0,56$

10. $\frac{9}{100} = 0,09$

11. $\frac{48}{100} = 0,48$

12. $\frac{1}{100} = 0,01$

13. $\frac{18}{100} = 0,18$

14. $\frac{32}{100} = 0,32$

15. $\frac{8}{100} = 0,08$



Usa il modello visivo per risolvere ogni problema.


1) $0,1 \times 0,7 =$




2) $0,8 \times 0,5 =$




3) $0,6 \times 0,2 =$




4) $0,8 \times 0,1 =$




5) $0,3 \times 0,2 =$




6) $0,9 \times 0,7 =$




7) $0,8 \times 0,9 =$




8) $0,9 \times 0,1 =$




9) $0,1 \times 0,3 =$




10) $0,5 \times 0,2 =$




11) $0,4 \times 0,9 =$




12) $0,8 \times 0,7 =$




13) $0,9 \times 0,4 =$



14) $0,8 \times 0,3 =$



15) $0,3 \times 0,5 =$



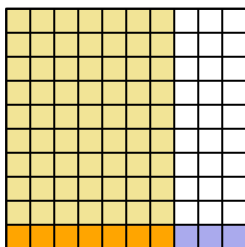
Risposte

1. _____
2. _____
3. _____
4. _____
5. _____
6. _____
7. _____
8. _____
9. _____
10. _____
11. _____
12. _____
13. _____
14. _____
15. _____

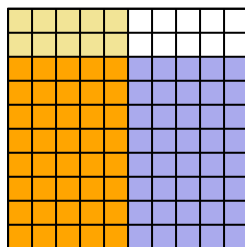


Usa il modello visivo per risolvere ogni problema.

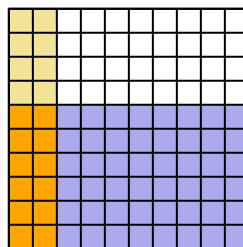
1) $0,1 \times 0,7 =$



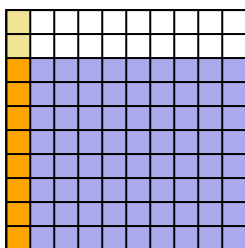
2) $0,8 \times 0,5 =$



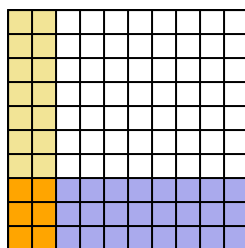
3) $0,6 \times 0,2 =$



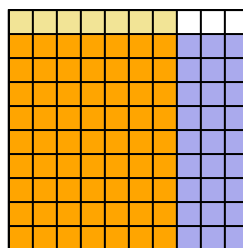
4) $0,8 \times 0,1 =$



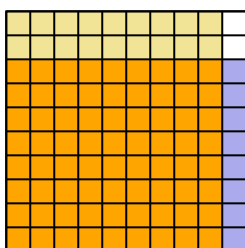
5) $0,3 \times 0,2 =$



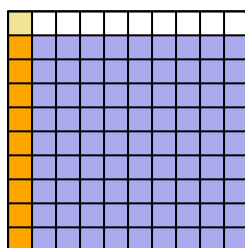
6) $0,9 \times 0,7 =$



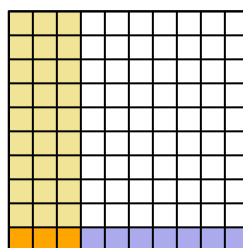
7) $0,8 \times 0,9 =$



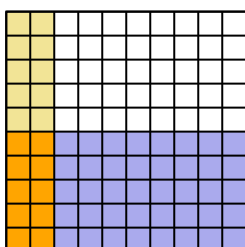
8) $0,9 \times 0,1 =$



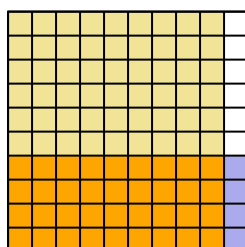
9) $0,1 \times 0,3 =$



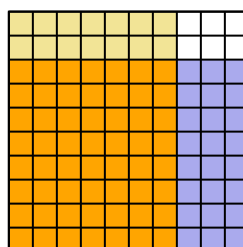
10) $0,5 \times 0,2 =$



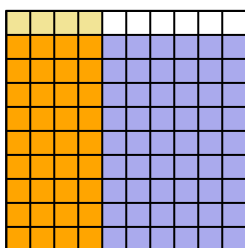
11) $0,4 \times 0,9 =$



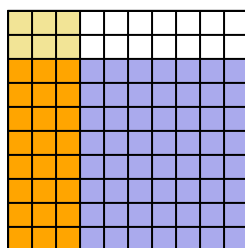
12) $0,8 \times 0,7 =$



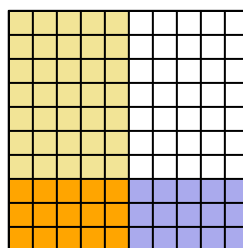
13) $0,9 \times 0,4 =$



14) $0,8 \times 0,3 =$



15) $0,3 \times 0,5 =$



Risposte

1. $\frac{7}{100} = 0,07$

2. $\frac{40}{100} = 0,4$

3. $\frac{12}{100} = 0,12$

4. $\frac{8}{100} = 0,08$

5. $\frac{6}{100} = 0,06$

6. $\frac{63}{100} = 0,63$

7. $\frac{72}{100} = 0,72$

8. $\frac{9}{100} = 0,09$

9. $\frac{3}{100} = 0,03$

10. $\frac{10}{100} = 0,1$

11. $\frac{36}{100} = 0,36$

12. $\frac{56}{100} = 0,56$

13. $\frac{36}{100} = 0,36$


14. $\frac{24}{100} = 0,24$

15. $\frac{15}{100} = 0,15$




Usa il modello visivo per risolvere ogni problema.


1) $0,8 \times 0,9 =$




2) $0,4 \times 0,8 =$




3) $0,1 \times 0,4 =$




4) $0,3 \times 0,7 =$




5) $0,9 \times 0,8 =$




6) $0,1 \times 0,2 =$




7) $0,8 \times 0,3 =$




8) $0,2 \times 0,9 =$




9) $0,6 \times 0,9 =$




10) $0,7 \times 0,1 =$




11) $0,3 \times 0,2 =$




12) $0,7 \times 0,7 =$




13) $0,1 \times 0,1 =$



14) $0,9 \times 0,5 =$



15) $0,2 \times 0,4 =$



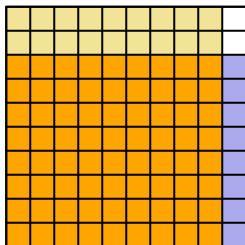
Risposte

1. _____
2. _____
3. _____
4. _____
5. _____
6. _____
7. _____
8. _____
9. _____
10. _____
11. _____
12. _____
13. _____
14. _____
15. _____

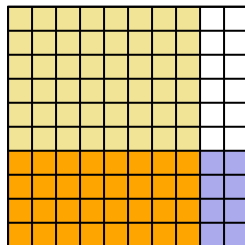


Usa il modello visivo per risolvere ogni problema.

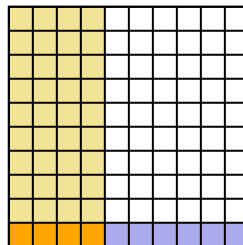
1) $0,8 \times 0,9 =$



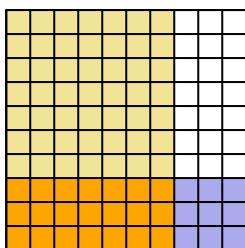
2) $0,4 \times 0,8 =$



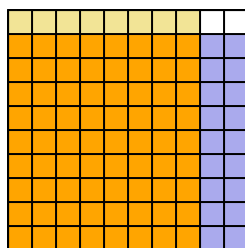
3) $0,1 \times 0,4 =$



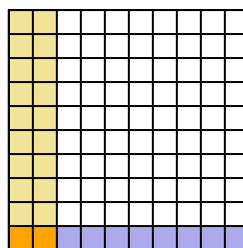
4) $0,3 \times 0,7 =$



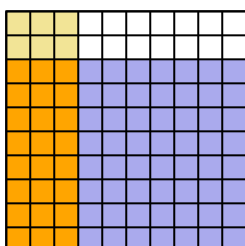
5) $0,9 \times 0,8 =$



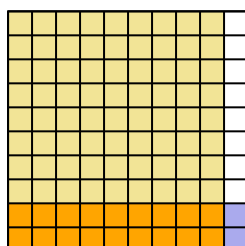
6) $0,1 \times 0,2 =$



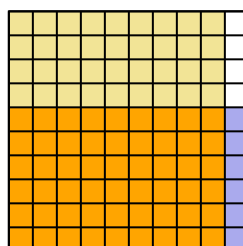
7) $0,8 \times 0,3 =$



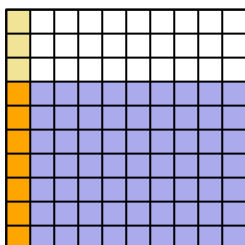
8) $0,2 \times 0,9 =$



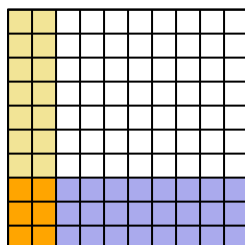
9) $0,6 \times 0,9 =$



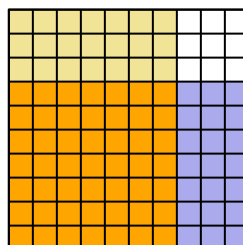
10) $0,7 \times 0,1 =$



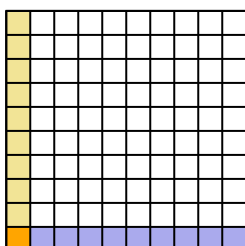
11) $0,3 \times 0,2 =$



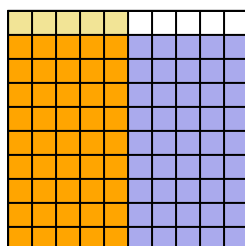
12) $0,7 \times 0,7 =$



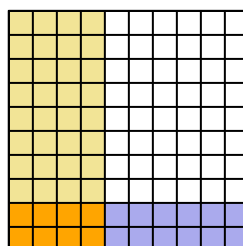
13) $0,1 \times 0,1 =$



14) $0,9 \times 0,5 =$



15) $0,2 \times 0,4 =$



Risposte

1. $\frac{72}{100} = 0,72$

2. $\frac{32}{100} = 0,32$

3. $\frac{4}{100} = 0,04$

4. $\frac{21}{100} = 0,21$

5. $\frac{72}{100} = 0,72$

6. $\frac{2}{100} = 0,02$

7. $\frac{24}{100} = 0,24$

8. $\frac{18}{100} = 0,18$

9. $\frac{54}{100} = 0,54$

10. $\frac{7}{100} = 0,07$

11. $\frac{6}{100} = 0,06$

12. $\frac{49}{100} = 0,49$

13. $\frac{1}{100} = 0,01$

14. $\frac{45}{100} = 0,45$

15. $\frac{8}{100} = 0,08$