


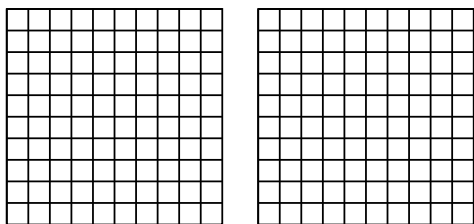


Usa il modello visivo per risolvere ogni problema.

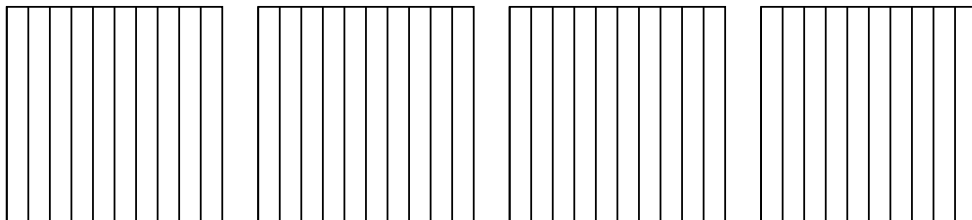
1) $3 \times 0,35 =$



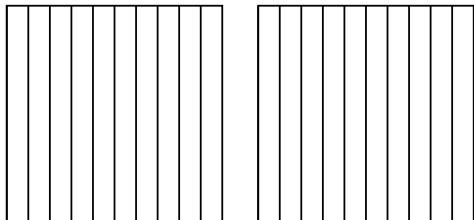
2) $2 \times 0,41 =$



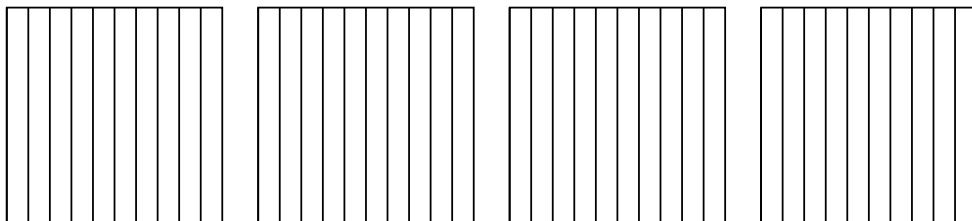
3) $4 \times 0,8 =$



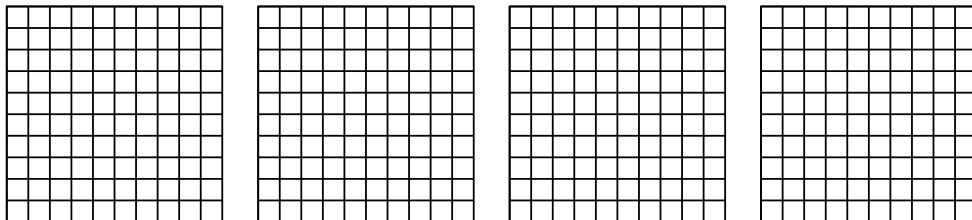
4) $2 \times 0,5 =$



5) $4 \times 0,8 =$



6) $4 \times 0,68 =$



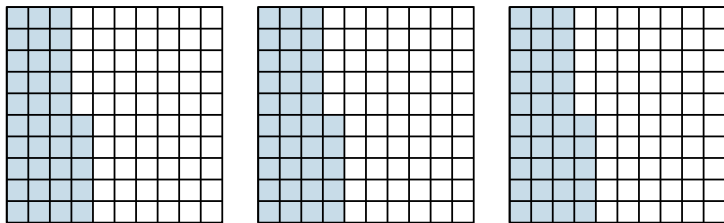
Risposte

- 1. _____
- 2. _____
- 3. _____
- 4. _____
- 5. _____
- 6. _____

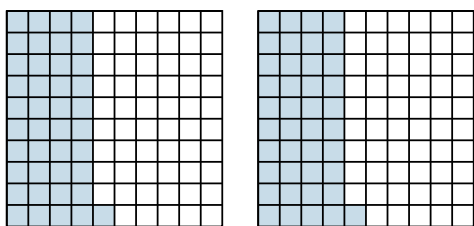


Usa il modello visivo per risolvere ogni problema.

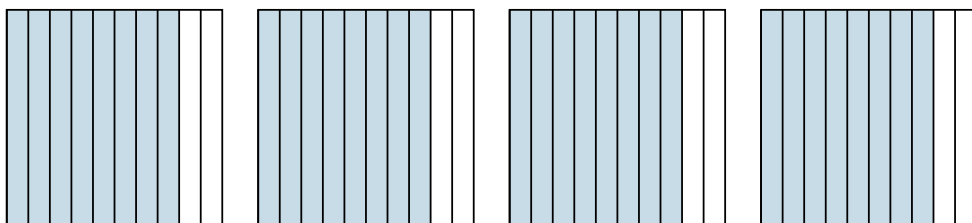
1) $3 \times 0,35 =$



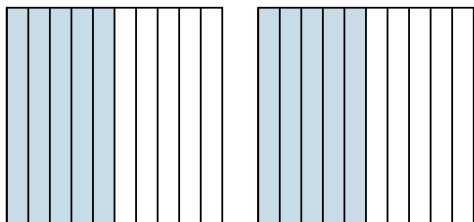
2) $2 \times 0,41 =$



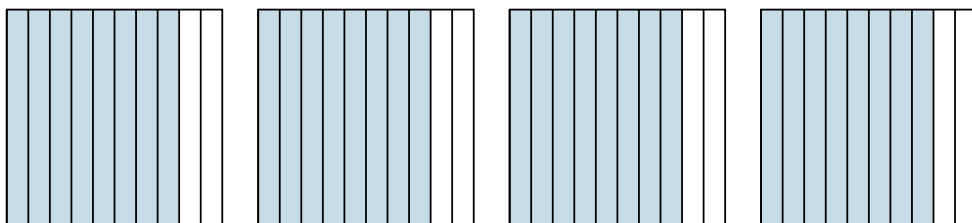
3) $4 \times 0,8 =$



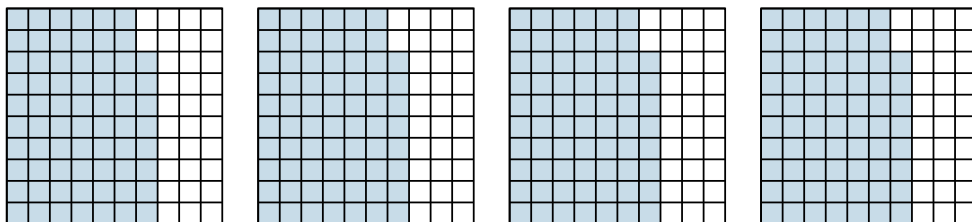
4) $2 \times 0,5 =$



5) $4 \times 0,8 =$



6) $4 \times 0,68 =$



Risposte

1. $\frac{105}{100} = 1,05$

2. $\frac{82}{100} = 0,82$

3. $\frac{32}{10} = 3,2$

4. $\frac{10}{10} = 1$

5. $\frac{32}{10} = 3,2$

6. $\frac{272}{100} = 2,72$