


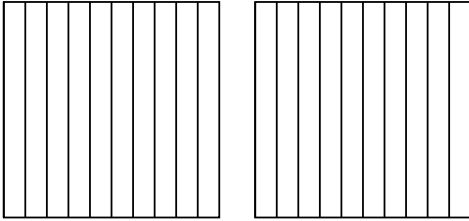


Usa il modello visivo per risolvere ogni problema.

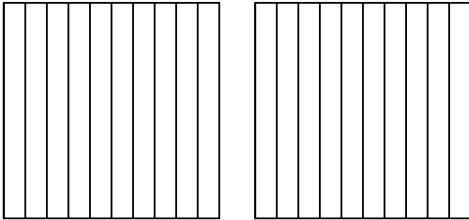
1)  $3 \times 0,71 =$



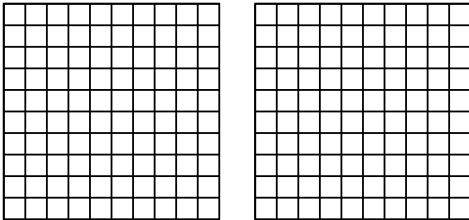
2)  $2 \times 0,3 =$




3)  $2 \times 0,4 =$



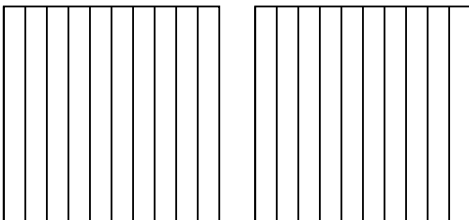
4)  $2 \times 0,36 =$



5)  $3 \times 0,40 =$



6)  $2 \times 0,8 =$



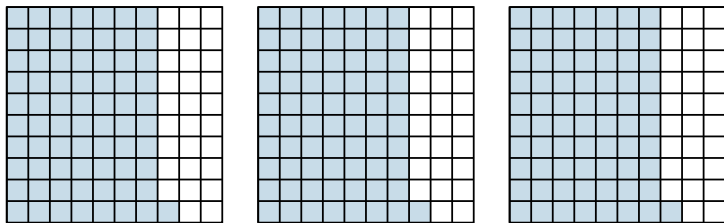
**Risposte**

- 1. \_\_\_\_\_
- 2. \_\_\_\_\_
- 3. \_\_\_\_\_
- 4. \_\_\_\_\_
- 5. \_\_\_\_\_
- 6. \_\_\_\_\_

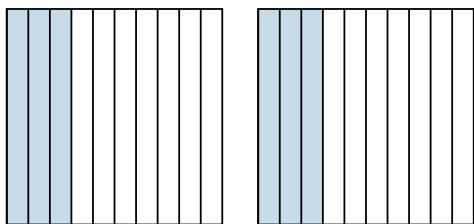


Usa il modello visivo per risolvere ogni problema.

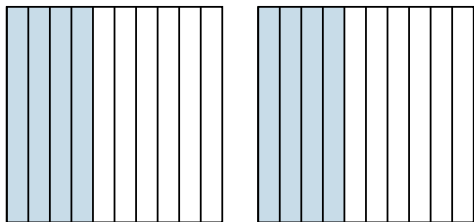
1)  $3 \times 0,71 =$



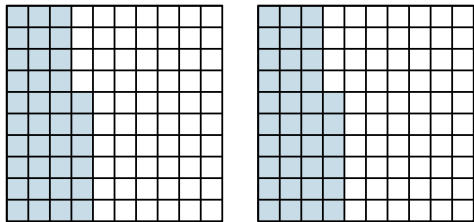
2)  $2 \times 0,3 =$



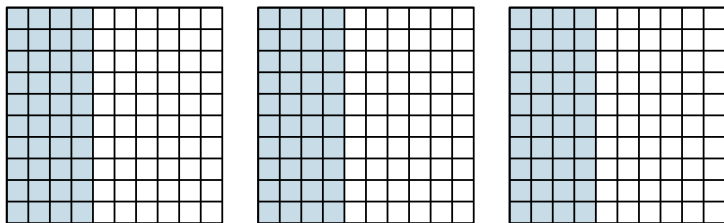
3)  $2 \times 0,4 =$



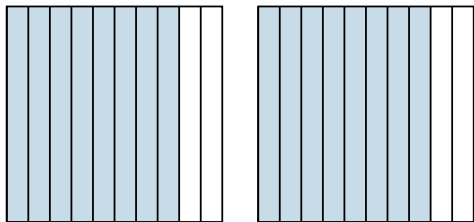
4)  $2 \times 0,36 =$



5)  $3 \times 0,40 =$



6)  $2 \times 0,8 =$



**Risposte**

1.  $\frac{213}{100} = 2,13$

2.  $\frac{6}{10} = 0,6$

3.  $\frac{8}{10} = 0,8$

4.  $\frac{72}{100} = 0,72$

5.  $\frac{120}{100} = 1,2$

6.  $\frac{16}{10} = 1,6$