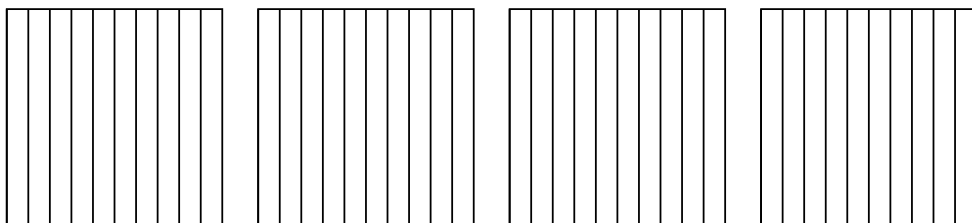


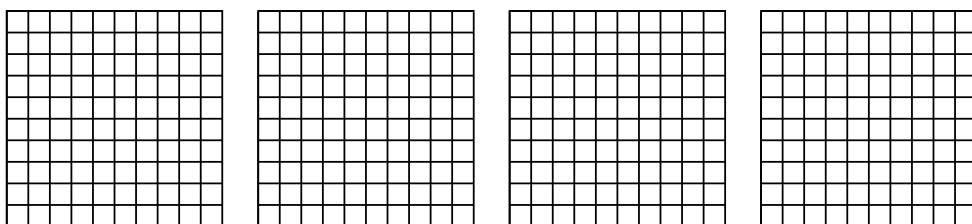


Usa il modello visivo per risolvere ogni problema.


1)  $4 \times 0,9 =$



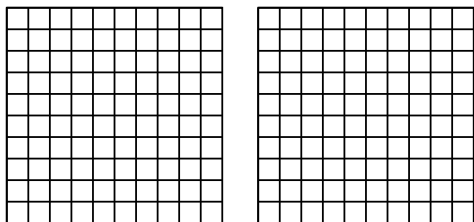
2)  $4 \times 0,39 =$



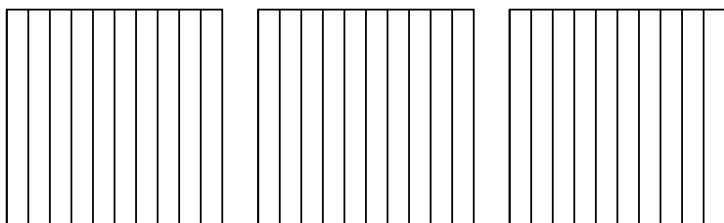
3)  $3 \times 0,54 =$



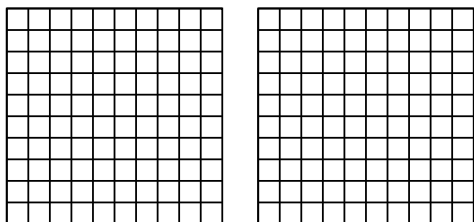
4)  $2 \times 0,79 =$



5)  $3 \times 0,2 =$



6)  $2 \times 0,23 =$



**Risposte**

1. \_\_\_\_\_

2. \_\_\_\_\_

3. \_\_\_\_\_

4. \_\_\_\_\_

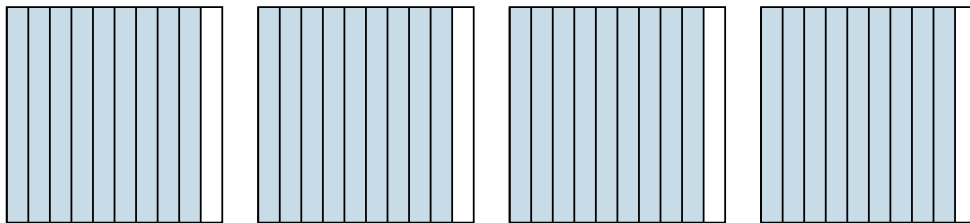
5. \_\_\_\_\_

6. \_\_\_\_\_

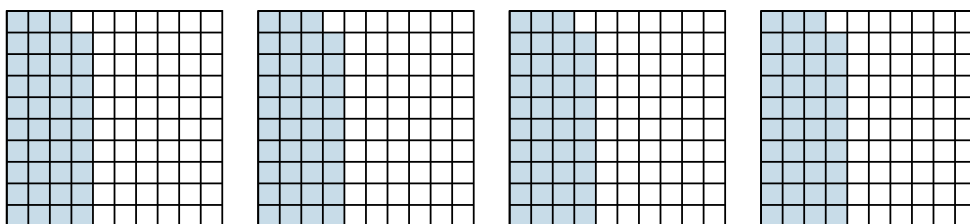


Usa il modello visivo per risolvere ogni problema.


1)  $4 \times 0,9 =$



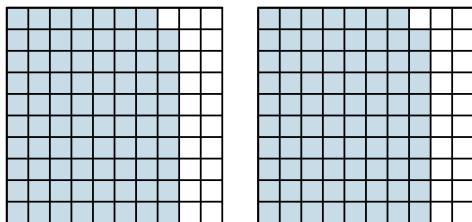
2)  $4 \times 0,39 =$



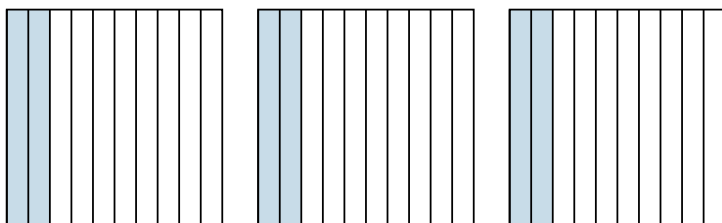
3)  $3 \times 0,54 =$



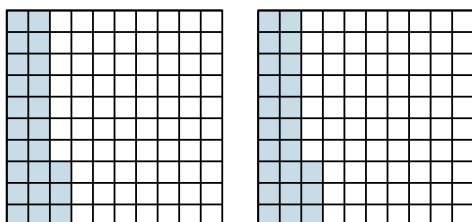
4)  $2 \times 0,79 =$



5)  $3 \times 0,2 =$



6)  $2 \times 0,23 =$



**Risposte**

1.  $\frac{36}{10} = 3,6$

2.  $\frac{156}{100} = 1,56$

3.  $\frac{162}{100} = 1,62$

4.  $\frac{158}{100} = 1,58$

5.  $\frac{6}{10} = 0,6$

6.  $\frac{46}{100} = 0,46$