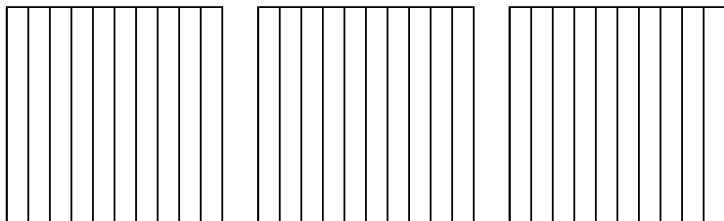


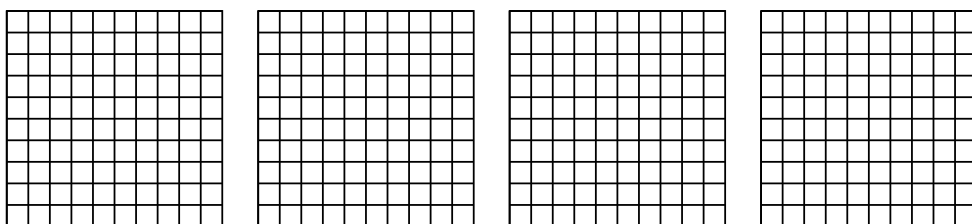


Usa il modello visivo per risolvere ogni problema.

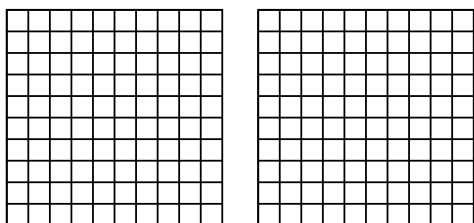
1) $3 \times 0,6 =$



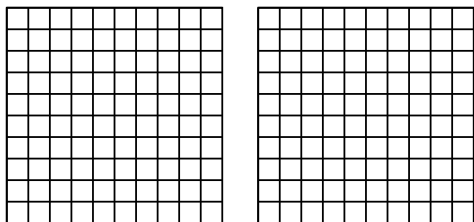
2) $4 \times 0,69 =$



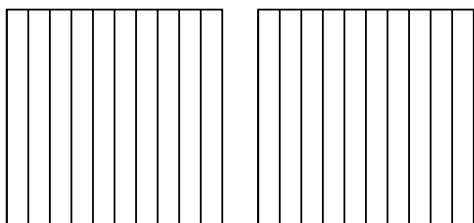
3) $2 \times 0,97 =$



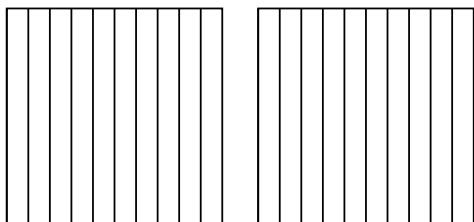
4) $2 \times 0,75 =$



5) $2 \times 0,3 =$



6) $2 \times 0,2 =$



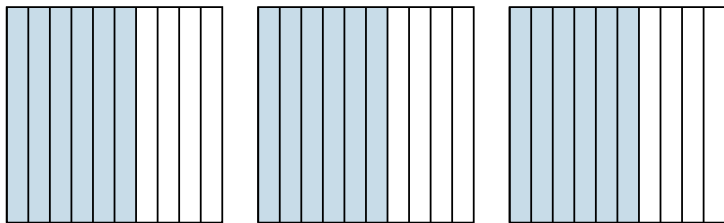
Risposte

- 1. _____
- 2. _____
- 3. _____
- 4. _____
- 5. _____
- 6. _____

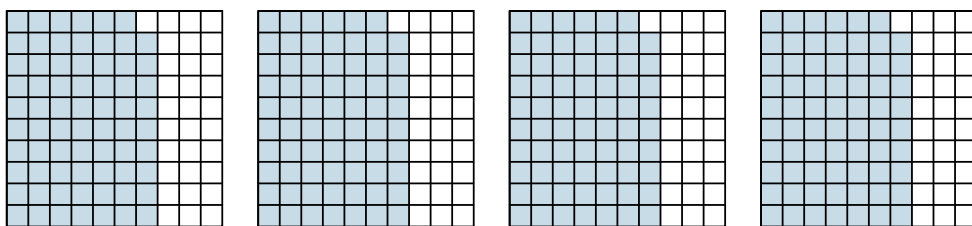


Usa il modello visivo per risolvere ogni problema.

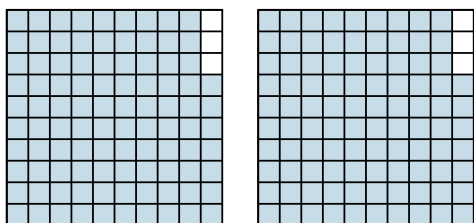
1) $3 \times 0,6 =$



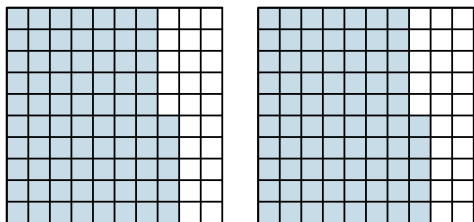
2) $4 \times 0,69 =$



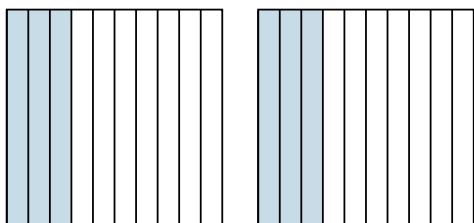
3) $2 \times 0,97 =$



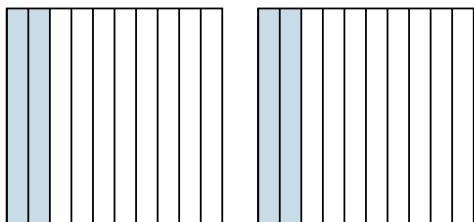
4) $2 \times 0,75 =$



5) $2 \times 0,3 =$



6) $2 \times 0,2 =$



Risposte

1. $\frac{18}{10} = 1,8$

2. $\frac{276}{100} = 2,76$

3. $\frac{194}{100} = 1,94$

4. $\frac{150}{100} = 1,5$

5. $\frac{6}{10} = 0,6$

6. $\frac{4}{10} = 0,4$