


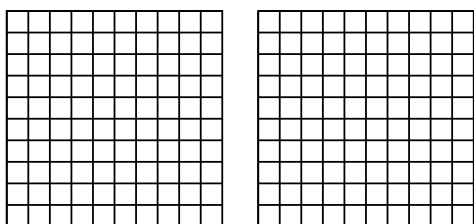


Usa il modello visivo per risolvere ogni problema.

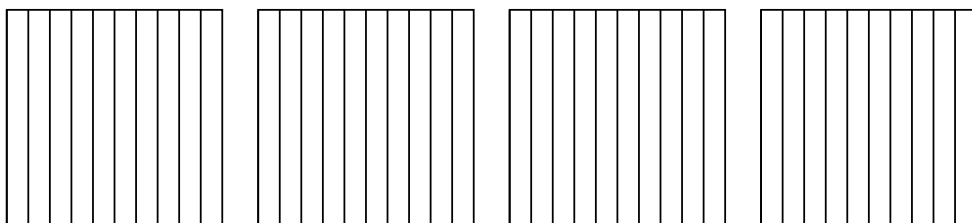
1) $3 \times 0,35 =$



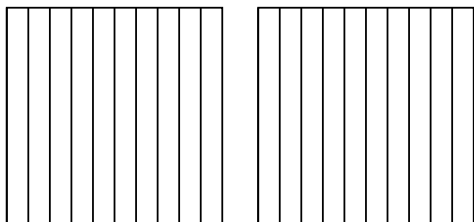
2) $2 \times 0,41 =$



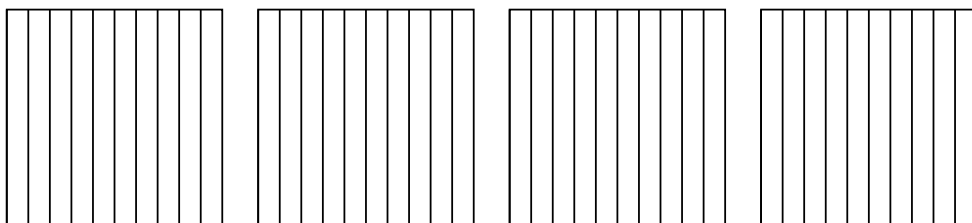
3) $4 \times 0,8 =$



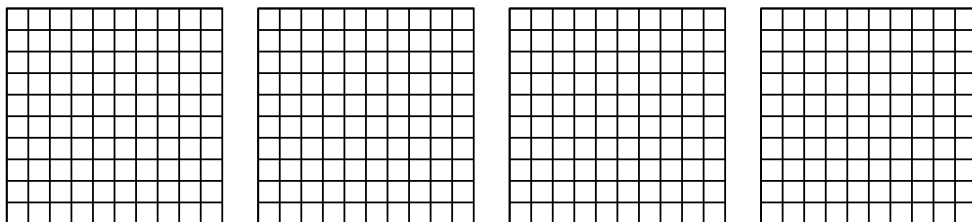
4) $2 \times 0,5 =$



5) $4 \times 0,8 =$



6) $4 \times 0,68 =$



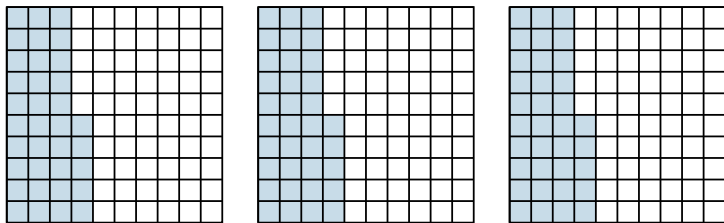
Risposte

- 1. _____
- 2. _____
- 3. _____
- 4. _____
- 5. _____
- 6. _____

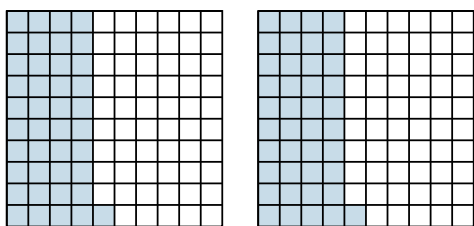


Usa il modello visivo per risolvere ogni problema.

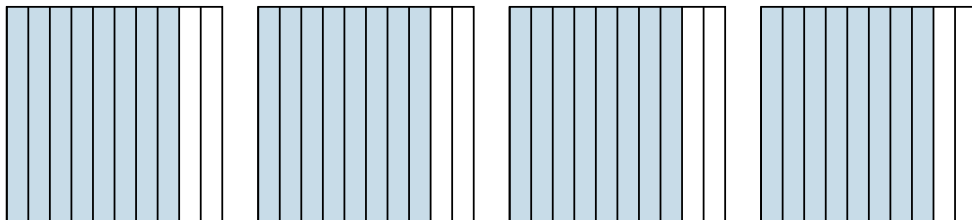
1) $3 \times 0,35 =$



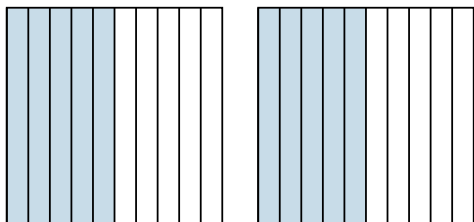
2) $2 \times 0,41 =$



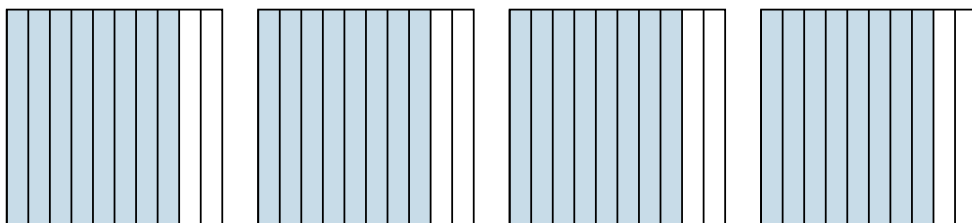
3) $4 \times 0,8 =$



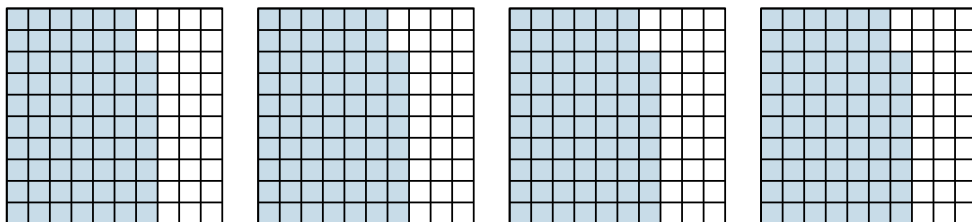
4) $2 \times 0,5 =$



5) $4 \times 0,8 =$



6) $4 \times 0,68 =$



Risposte

1. $\frac{105}{100} = 1,05$

2. $\frac{82}{100} = 0,82$

3. $\frac{32}{10} = 3,2$

4. $\frac{10}{10} = 1$

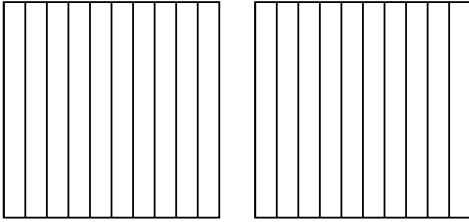
5. $\frac{32}{10} = 3,2$

6. $\frac{272}{100} = 2,72$

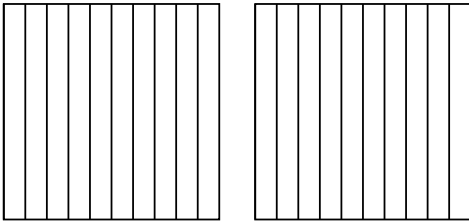


Usa il modello visivo per risolvere ogni problema.

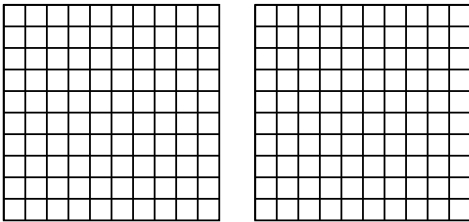
1) $2 \times 0,9 =$




2) $2 \times 0,3 =$




3) $2 \times 0,46 =$



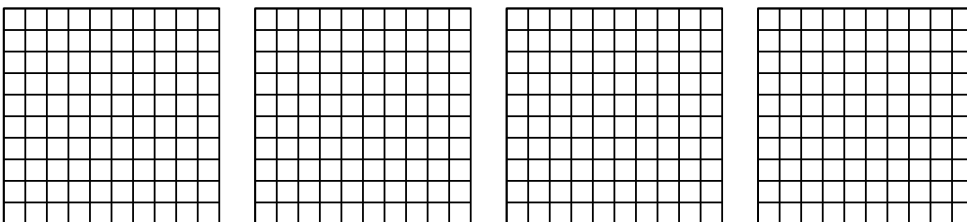
4) $3 \times 0,2 =$



5) $2 \times 0,96 =$



6) $4 \times 0,30 =$



Risposte

1. _____

2. _____

3. _____

4. _____

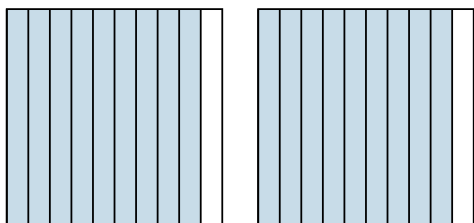
5. _____

6. _____

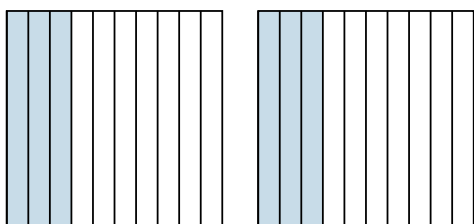


Usa il modello visivo per risolvere ogni problema.

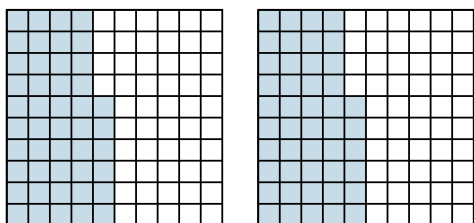
1) $2 \times 0,9 =$




2) $2 \times 0,3 =$



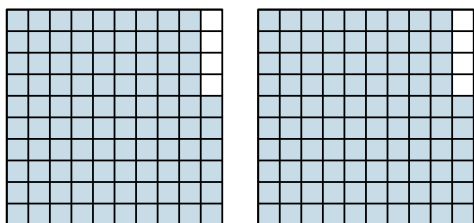
3) $2 \times 0,46 =$



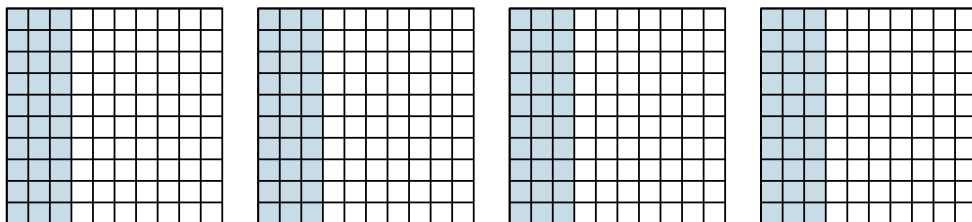
4) $3 \times 0,2 =$



5) $2 \times 0,96 =$



6) $4 \times 0,30 =$



Risposte

1. $\frac{18}{10} = 1,8$

2. $\frac{6}{10} = 0,6$

3. $\frac{92}{100} = 0,92$

4. $\frac{6}{10} = 0,6$

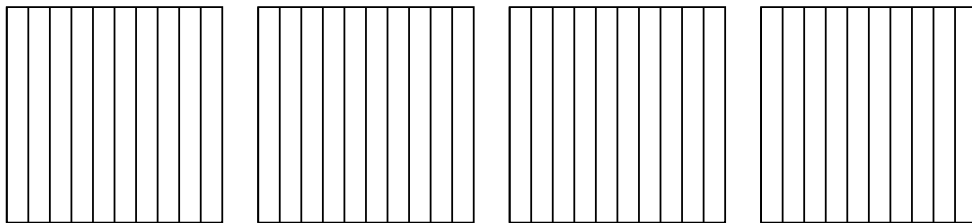
5. $\frac{192}{100} = 1,92$

6. $\frac{120}{100} = 1,2$

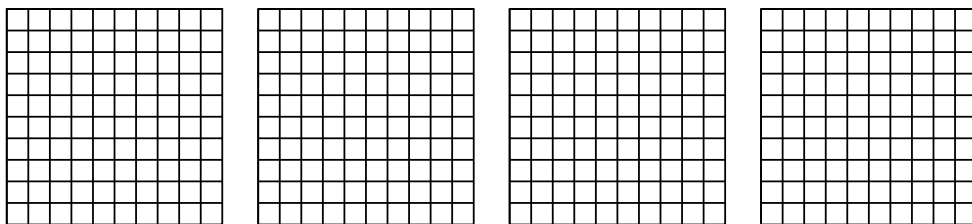


Usa il modello visivo per risolvere ogni problema.


1) $4 \times 0,5 =$



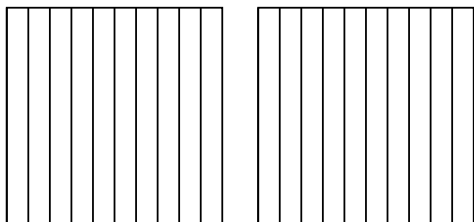
2) $4 \times 0,92 =$



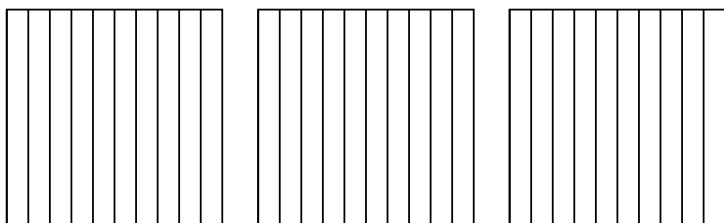
3) $3 \times 0,36 =$



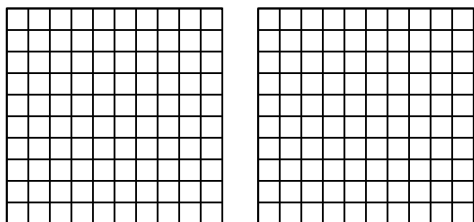
4) $2 \times 0,2 =$



5) $3 \times 0,6 =$



6) $2 \times 0,44 =$



Risposte

1. _____

2. _____

3. _____

4. _____

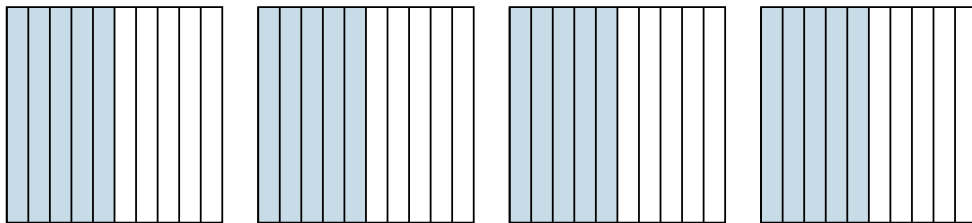
5. _____

6. _____

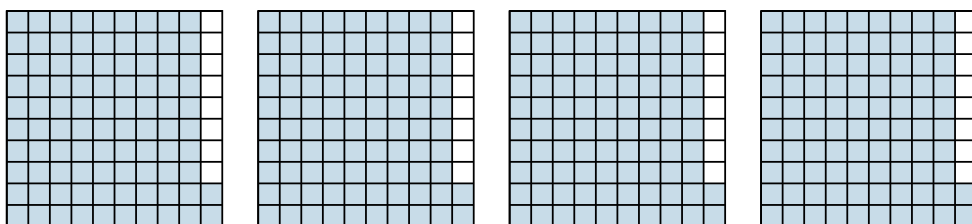


Usa il modello visivo per risolvere ogni problema.

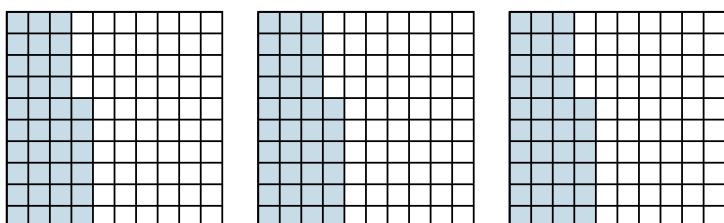
1) $4 \times 0,5 =$



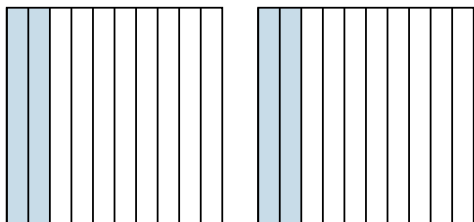
2) $4 \times 0,92 =$



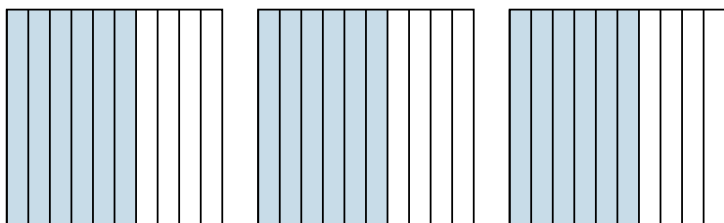
3) $3 \times 0,36 =$



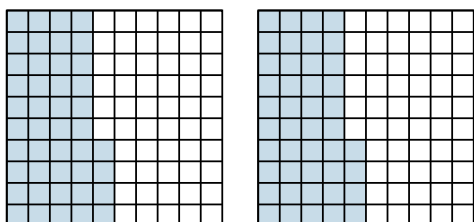
4) $2 \times 0,2 =$



5) $3 \times 0,6 =$



6) $2 \times 0,44 =$



Risposte

1. $\frac{20}{10} = 2$

2. $\frac{368}{100} = 3,68$

3. $\frac{108}{100} = 1,08$

4. $\frac{4}{10} = 0,4$


5. $\frac{18}{10} = 1,8$

6. $\frac{88}{100} = 0,88$

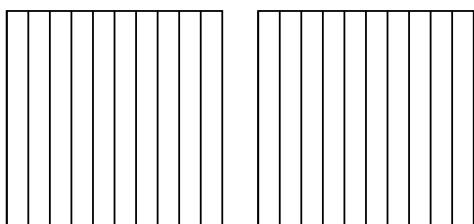


Usa il modello visivo per risolvere ogni problema.

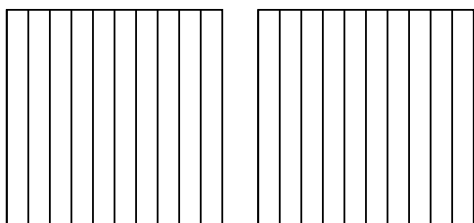
1) $3 \times 0,71 =$



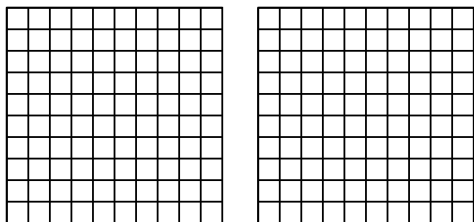
2) $2 \times 0,3 =$




3) $2 \times 0,4 =$



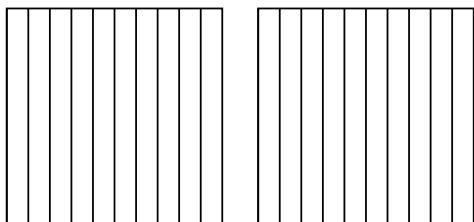
4) $2 \times 0,36 =$



5) $3 \times 0,40 =$



6) $2 \times 0,8 =$



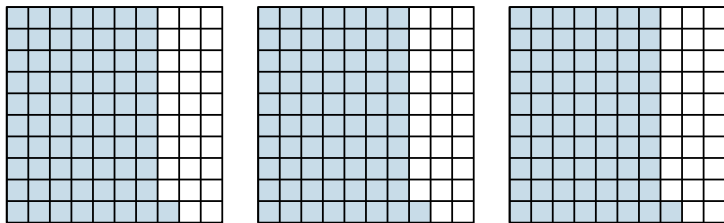
Risposte

- 1. _____
- 2. _____
- 3. _____
- 4. _____
- 5. _____
- 6. _____

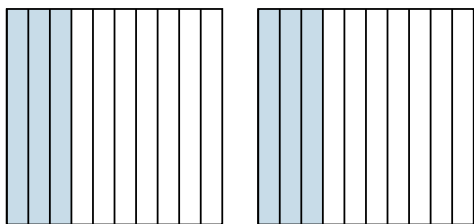


Usa il modello visivo per risolvere ogni problema.

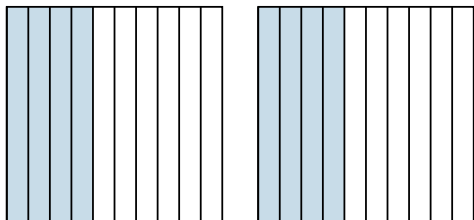
1) $3 \times 0,71 =$



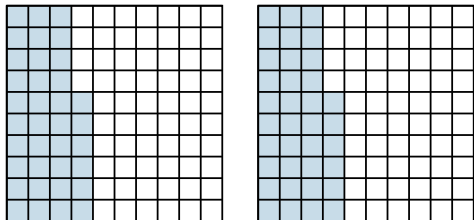
2) $2 \times 0,3 =$



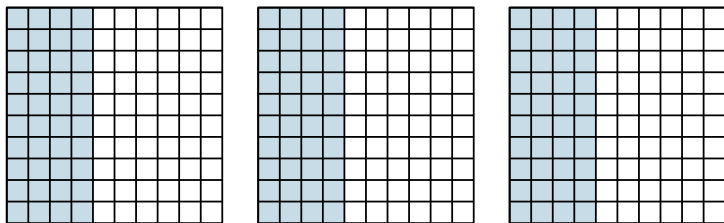
3) $2 \times 0,4 =$



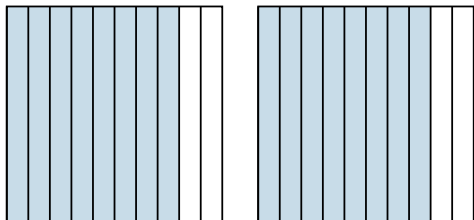
4) $2 \times 0,36 =$



5) $3 \times 0,40 =$



6) $2 \times 0,8 =$



Risposte

1. $\frac{213}{100} = 2,13$

2. $\frac{6}{10} = 0,6$

3. $\frac{8}{10} = 0,8$

4. $\frac{72}{100} = 0,72$

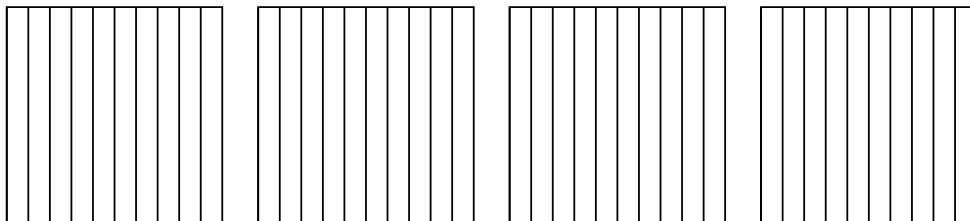
5. $\frac{120}{100} = 1,2$

6. $\frac{16}{10} = 1,6$

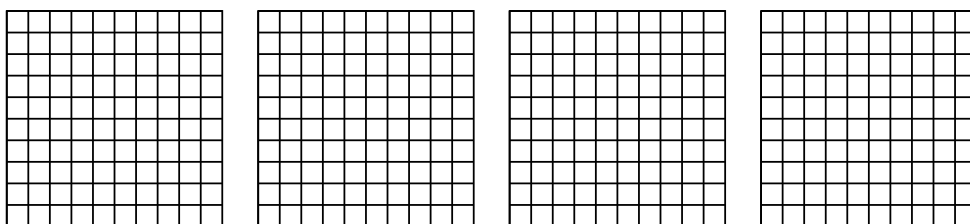


Usa il modello visivo per risolvere ogni problema.


1) $4 \times 0,9 =$



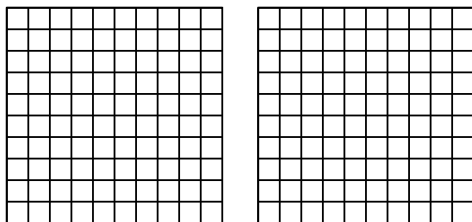
2) $4 \times 0,39 =$



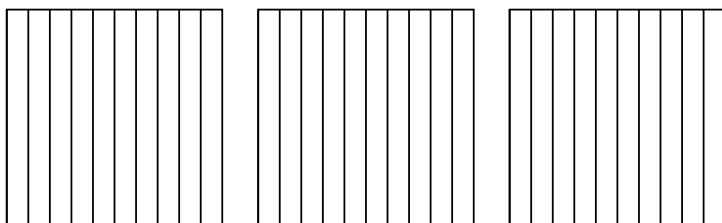
3) $3 \times 0,54 =$



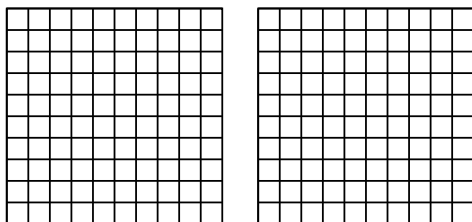
4) $2 \times 0,79 =$



5) $3 \times 0,2 =$



6) $2 \times 0,23 =$



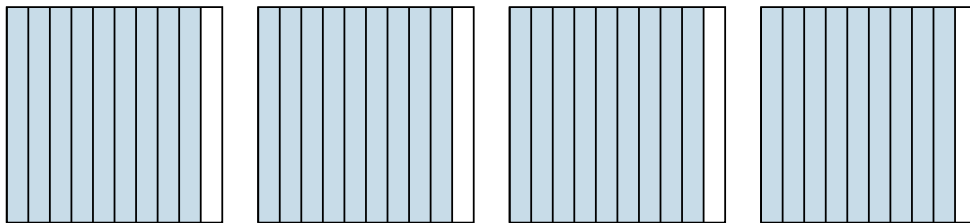
Risposte

- 1. _____
- 2. _____
- 3. _____
- 4. _____
- 5. _____
- 6. _____

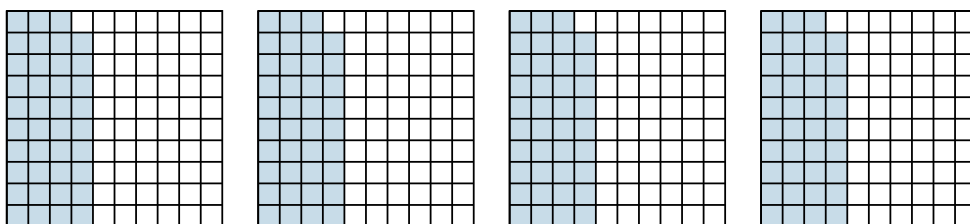


Usa il modello visivo per risolvere ogni problema.


1) $4 \times 0,9 =$



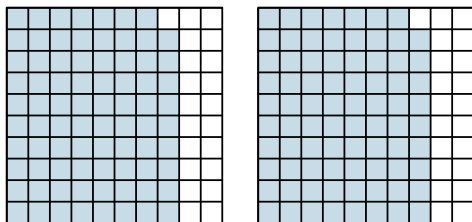
2) $4 \times 0,39 =$



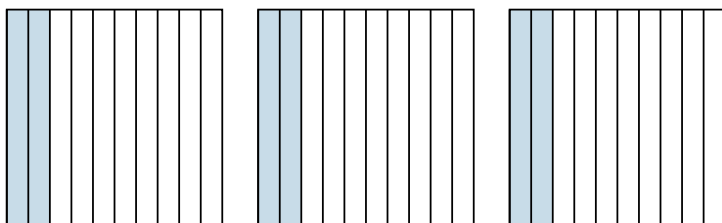
3) $3 \times 0,54 =$



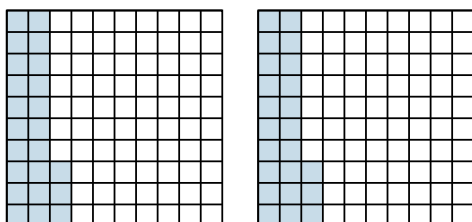
4) $2 \times 0,79 =$



5) $3 \times 0,2 =$



6) $2 \times 0,23 =$



Risposte

1. $\frac{36}{10} = 3,6$

2. $\frac{156}{100} = 1,56$

3. $\frac{162}{100} = 1,62$

4. $\frac{158}{100} = 1,58$

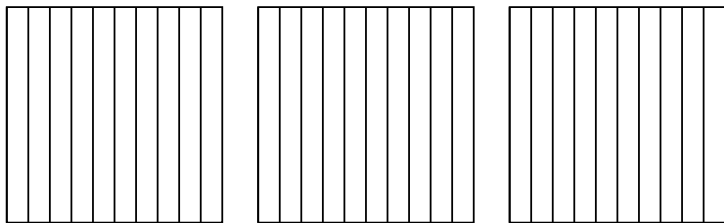
5. $\frac{6}{10} = 0,6$

6. $\frac{46}{100} = 0,46$

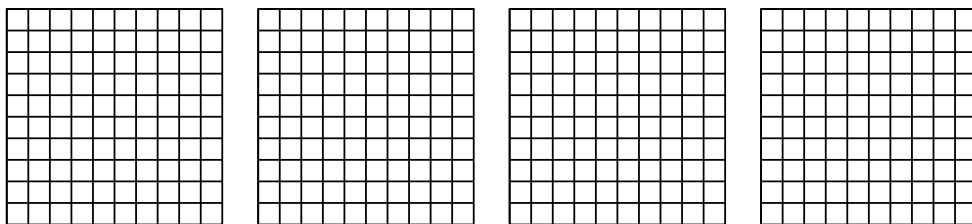


Usa il modello visivo per risolvere ogni problema.

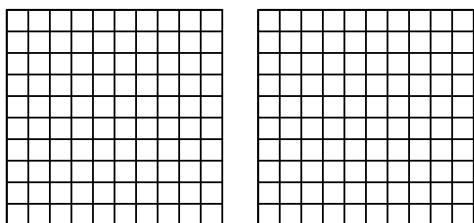
1) $3 \times 0,6 =$



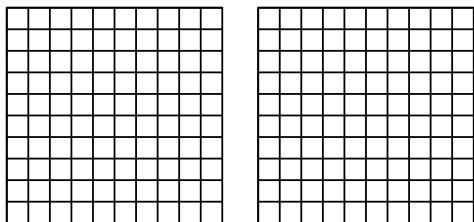
2) $4 \times 0,69 =$



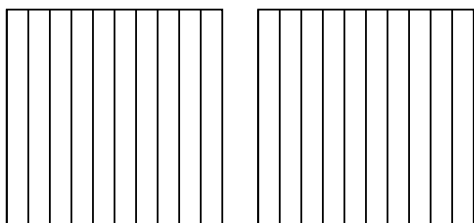
3) $2 \times 0,97 =$



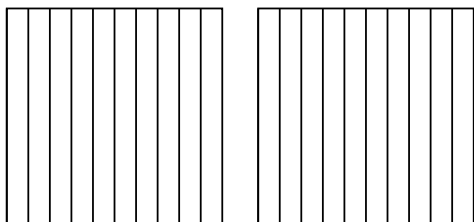
4) $2 \times 0,75 =$



5) $2 \times 0,3 =$



6) $2 \times 0,2 =$



Risposte

1. _____

2. _____

3. _____

4. _____

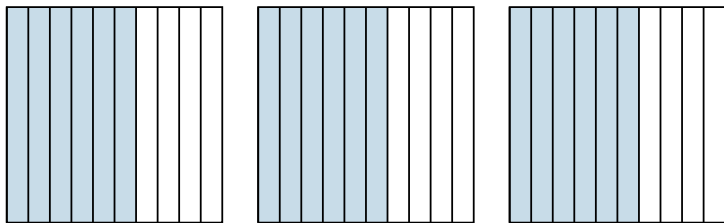
5. _____

6. _____

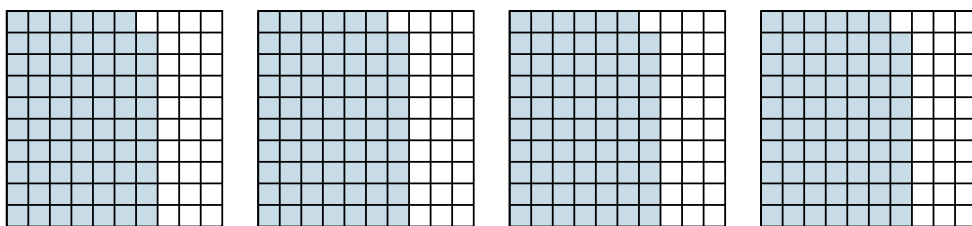


Usa il modello visivo per risolvere ogni problema.

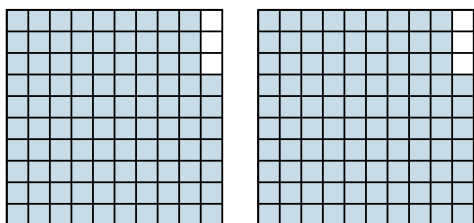
1) $3 \times 0,6 =$



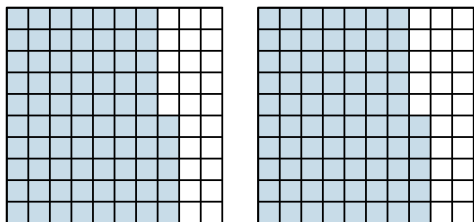
2) $4 \times 0,69 =$



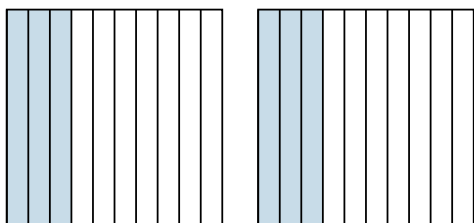
3) $2 \times 0,97 =$



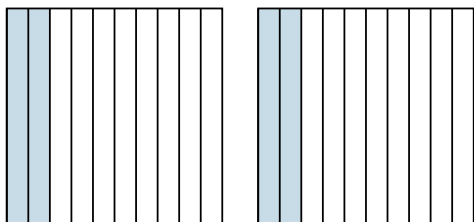
4) $2 \times 0,75 =$



5) $2 \times 0,3 =$



6) $2 \times 0,2 =$



Risposte

1. $\frac{18}{10} = 1,8$

2. $\frac{276}{100} = 2,76$

3. $\frac{194}{100} = 1,94$

4. $\frac{150}{100} = 1,5$

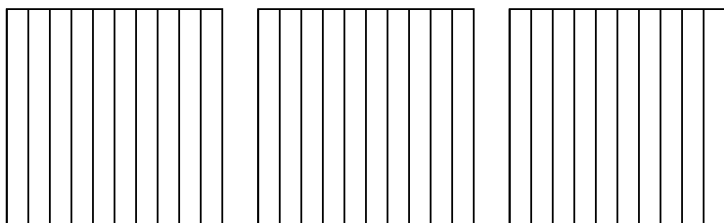
5. $\frac{6}{10} = 0,6$

6. $\frac{4}{10} = 0,4$

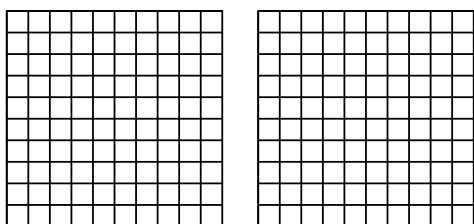


Usa il modello visivo per risolvere ogni problema.

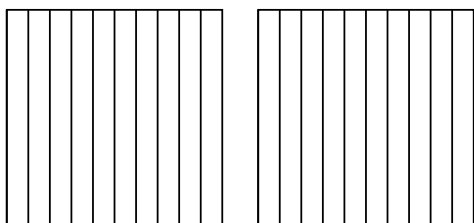
1) $3 \times 0,7 =$



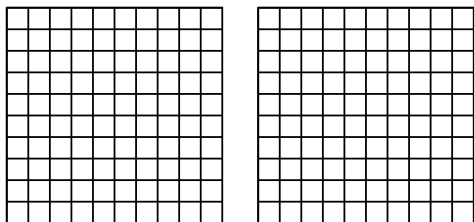
2) $2 \times 0,68 =$



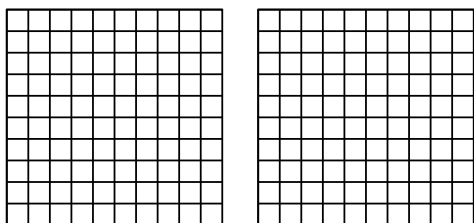
3) $2 \times 0,4 =$



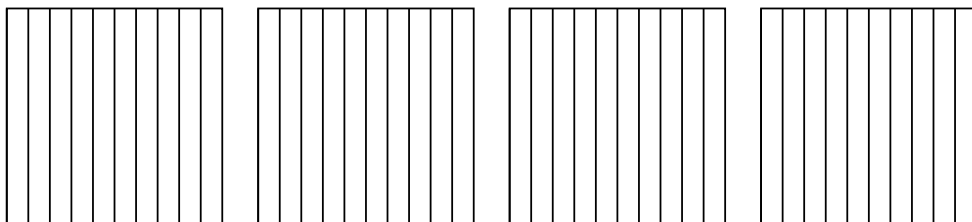
4) $2 \times 0,81 =$



5) $2 \times 0,25 =$



6) $4 \times 0,8 =$



Risposte

1. _____

2. _____

3. _____

4. _____

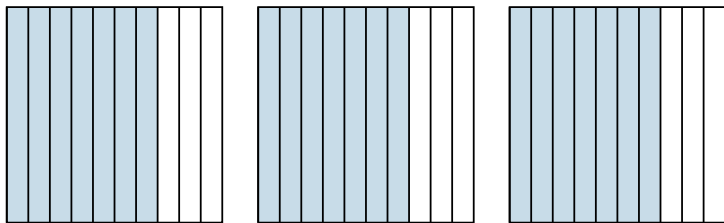
5. _____

6. _____

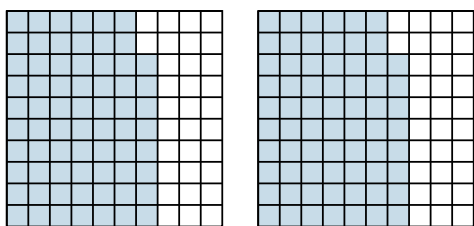


Usa il modello visivo per risolvere ogni problema.

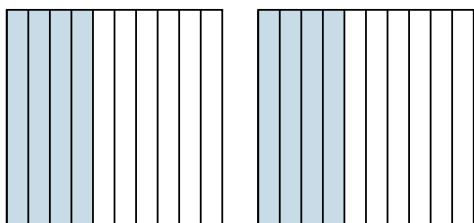
1) $3 \times 0,7 =$



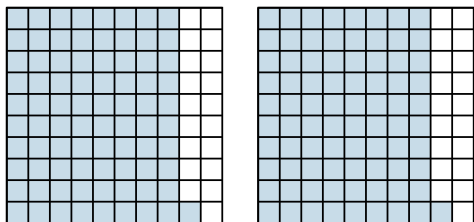
2) $2 \times 0,68 =$



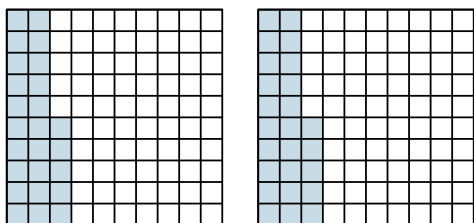
3) $2 \times 0,4 =$



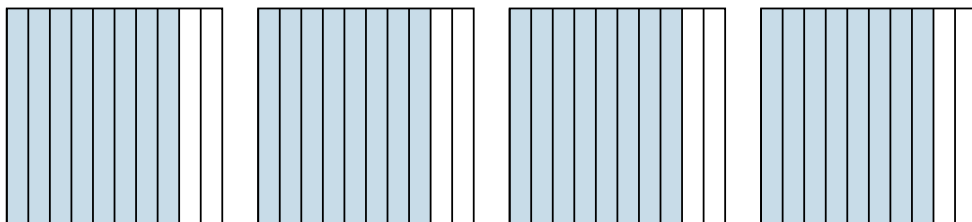
4) $2 \times 0,81 =$



5) $2 \times 0,25 =$



6) $4 \times 0,8 =$



Risposte

1. $\frac{21}{10} = 2,1$

2. $\frac{136}{100} = 1,36$

3. $\frac{8}{10} = 0,8$

4. $\frac{162}{100} = 1,62$

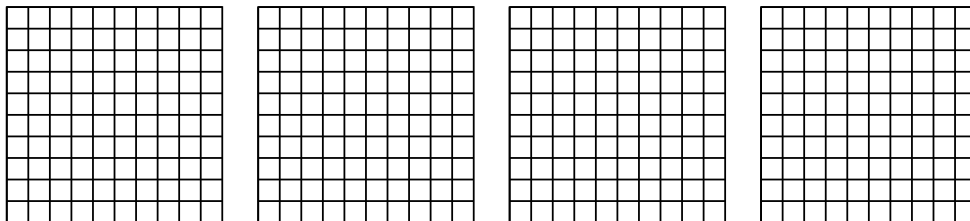
5. $\frac{50}{100} = 0,5$

6. $\frac{32}{10} = 3,2$

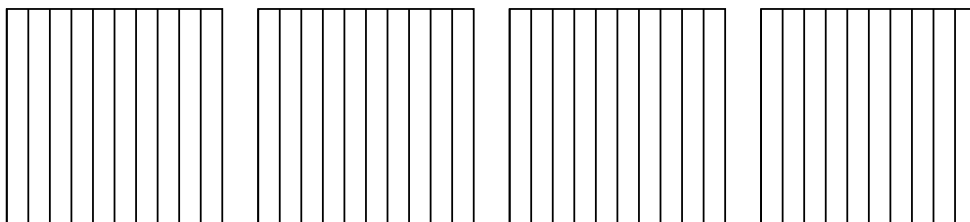


Usa il modello visivo per risolvere ogni problema.

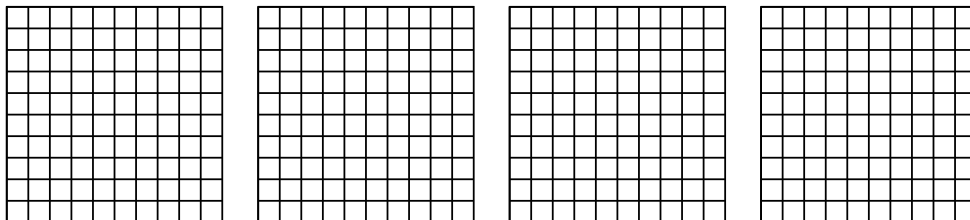
1) $4 \times 0,51 =$



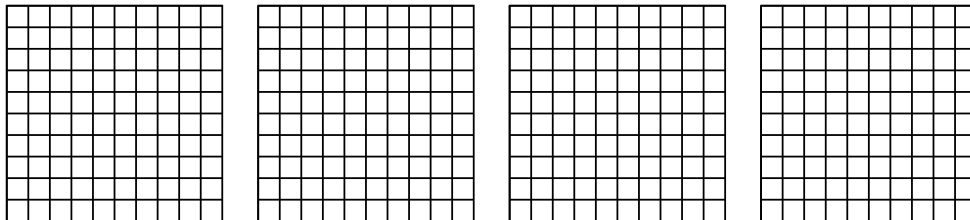
2) $4 \times 0,2 =$



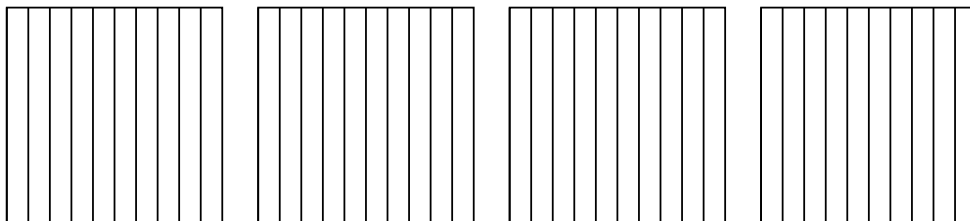
3) $4 \times 0,74 =$



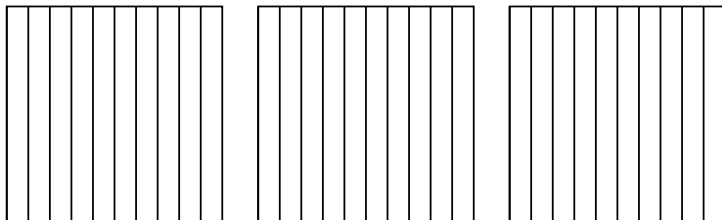
4) $4 \times 0,68 =$



5) $4 \times 0,6 =$



6) $3 \times 0,3 =$



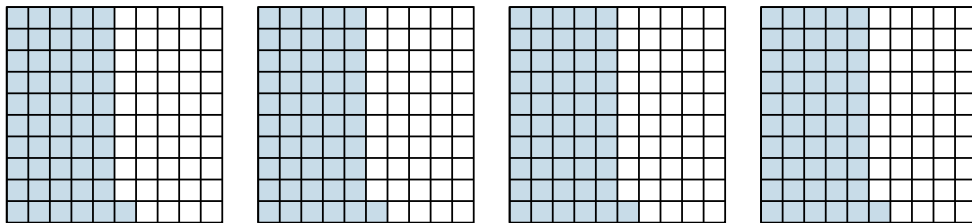
Risposte

- 1. _____
- 2. _____
- 3. _____
- 4. _____
- 5. _____
- 6. _____

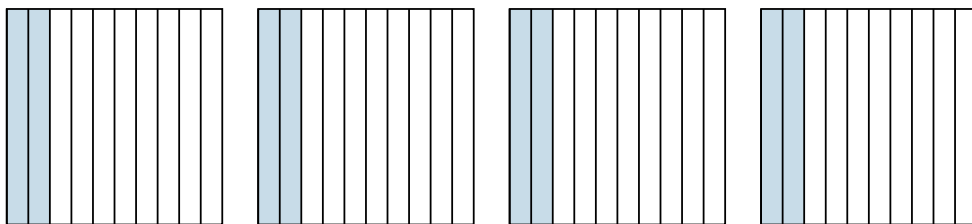


Usa il modello visivo per risolvere ogni problema.

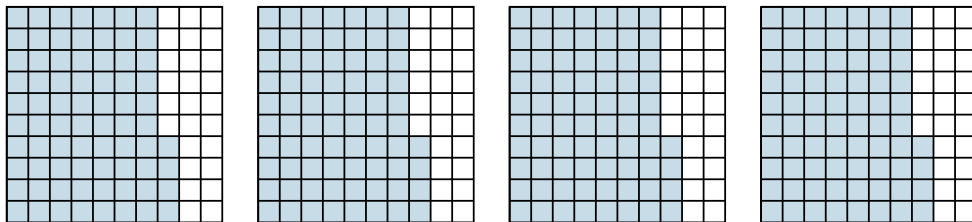
1) $4 \times 0,51 =$



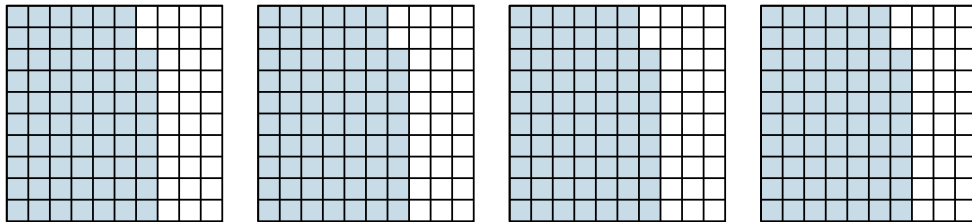
2) $4 \times 0,2 =$



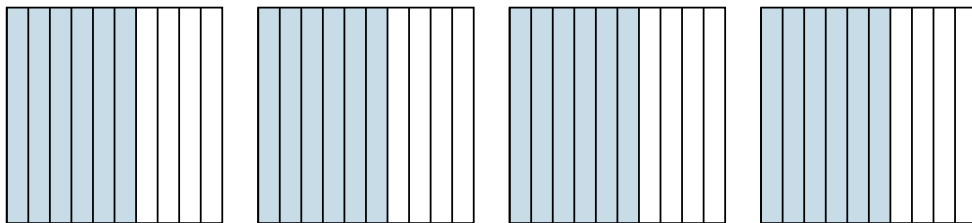
3) $4 \times 0,74 =$



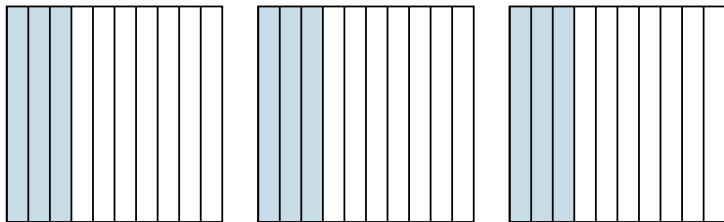
4) $4 \times 0,68 =$



5) $4 \times 0,6 =$



6) $3 \times 0,3 =$



Risposte

1. $\frac{204}{100} = 2,04$

2. $\frac{8}{10} = 0,8$

3. $\frac{296}{100} = 2,96$

4. $\frac{272}{100} = 2,72$

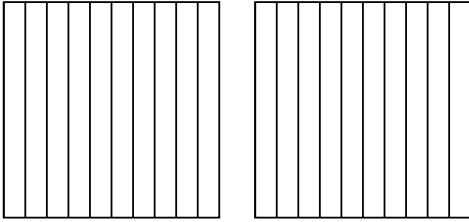
5. $\frac{24}{10} = 2,4$

6. $\frac{9}{10} = 0,9$

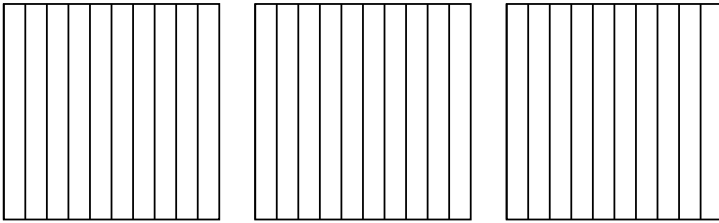


Usa il modello visivo per risolvere ogni problema.

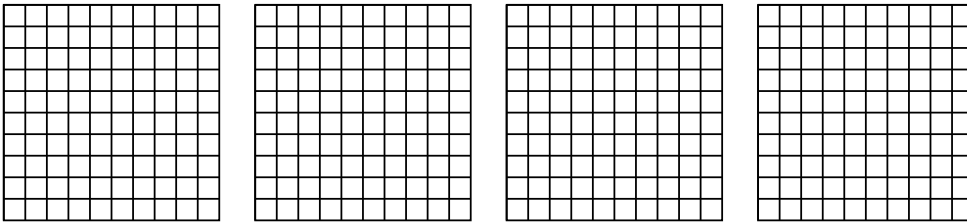
1) $2 \times 0,7 =$




2) $3 \times 0,5 =$



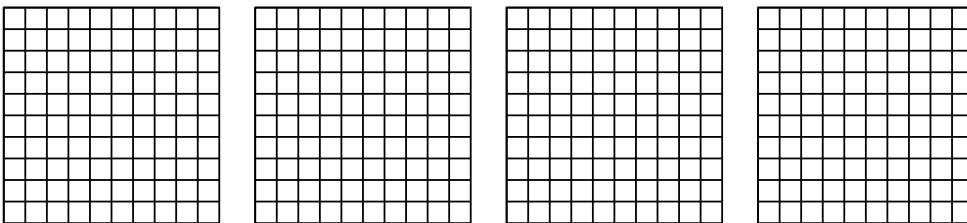
3) $4 \times 0,92 =$



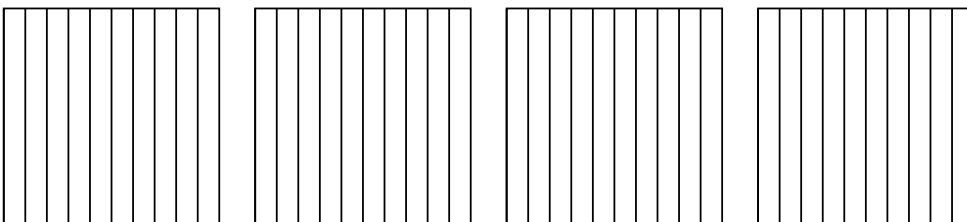
4) $3 \times 0,73 =$



5) $4 \times 0,20 =$



6) $4 \times 0,7 =$



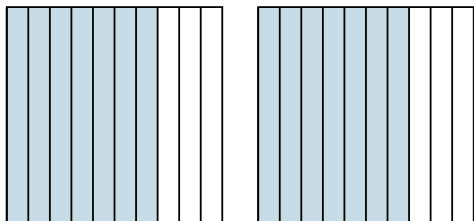
Risposte

- 1. _____
- 2. _____
- 3. _____
- 4. _____
- 5. _____
- 6. _____

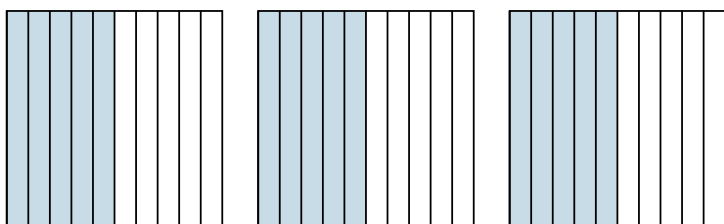


Usa il modello visivo per risolvere ogni problema.

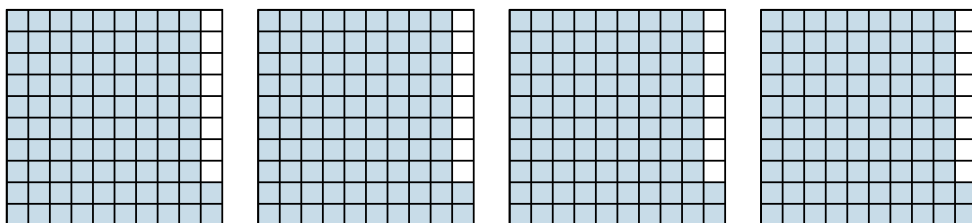
1) $2 \times 0,7 =$



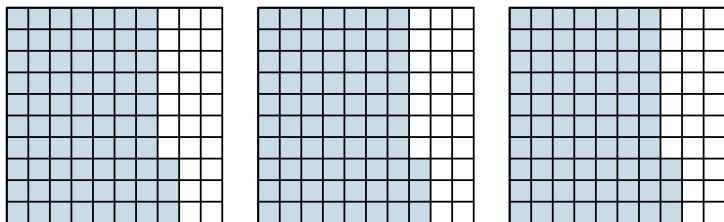
2) $3 \times 0,5 =$



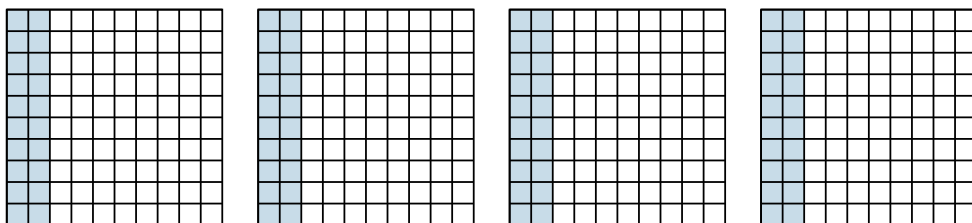
3) $4 \times 0,92 =$



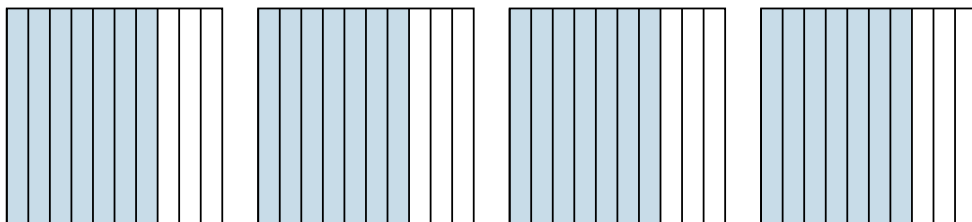
4) $3 \times 0,73 =$



5) $4 \times 0,20 =$



6) $4 \times 0,7 =$



Risposte

1. $\frac{14}{10} = 1,4$

2. $\frac{15}{10} = 1,5$

3. $\frac{368}{100} = 3,68$

4. $\frac{219}{100} = 2,19$


5. $\frac{80}{100} = 0,8$

6. $\frac{28}{10} = 2,8$

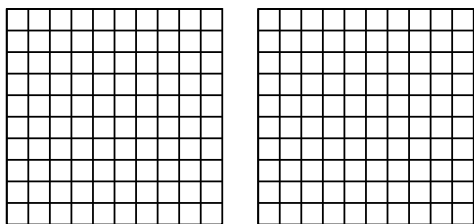


Usa il modello visivo per risolvere ogni problema.

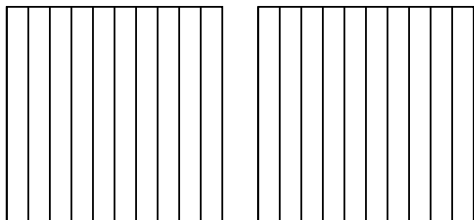
1) $3 \times 0,18 =$



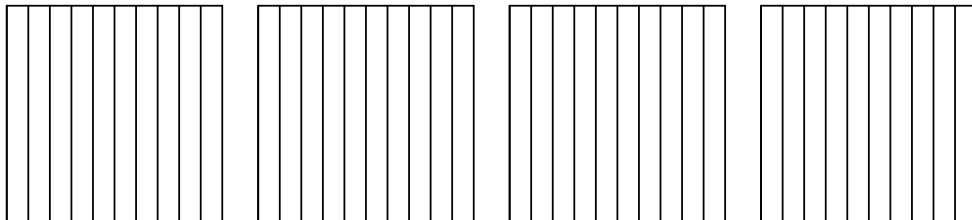
2) $2 \times 0,53 =$



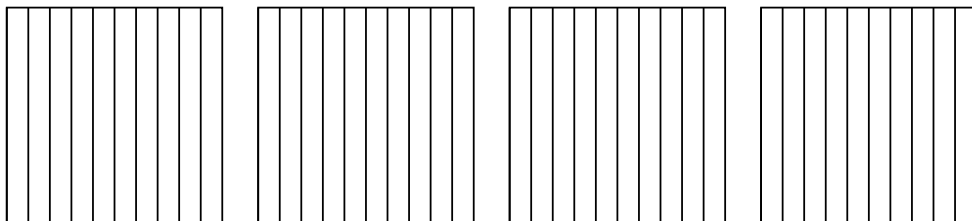
3) $2 \times 0,4 =$



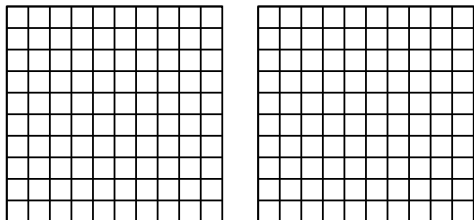
4) $4 \times 0,7 =$



5) $4 \times 0,8 =$



6) $2 \times 0,38 =$



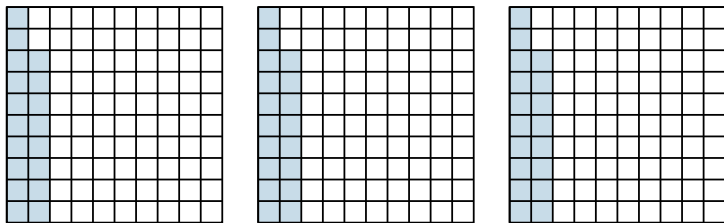
Risposte

- 1. _____
- 2. _____
- 3. _____
- 4. _____
- 5. _____
- 6. _____

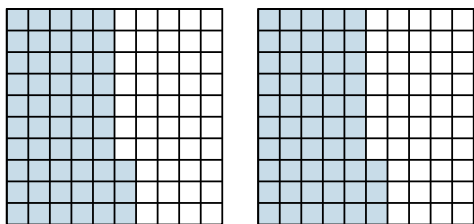


Usa il modello visivo per risolvere ogni problema.

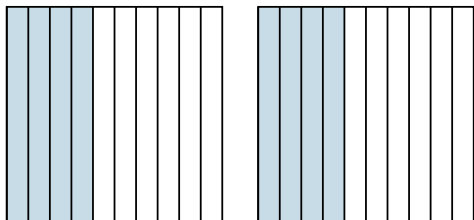
1) $3 \times 0,18 =$



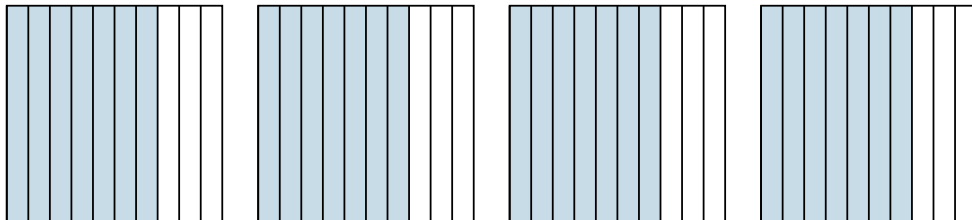
2) $2 \times 0,53 =$



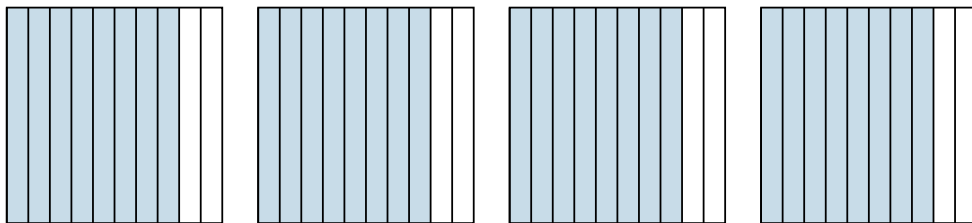
3) $2 \times 0,4 =$



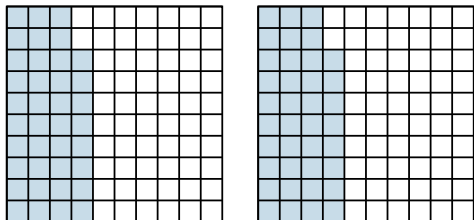
4) $4 \times 0,7 =$



5) $4 \times 0,8 =$



6) $2 \times 0,38 =$



Risposte

1. $\frac{54}{100} = 0,54$

2. $\frac{106}{100} = 1,06$

3. $\frac{8}{10} = 0,8$

4. $\frac{28}{10} = 2,8$

5. $\frac{32}{10} = 3,2$

6. $\frac{76}{100} = 0,76$