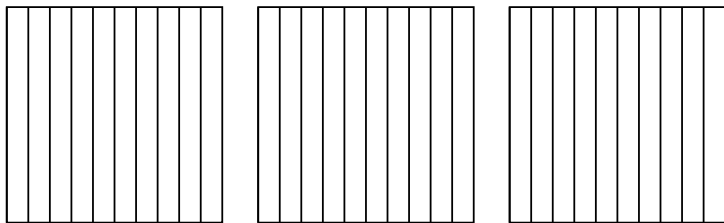


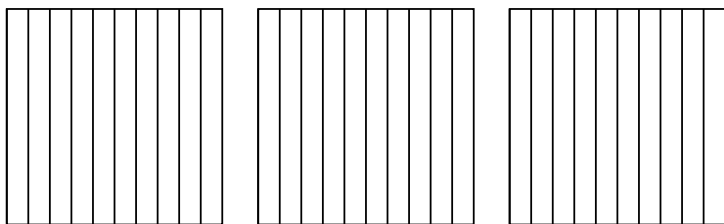


Usa il modello visivo per risolvere ogni problema.

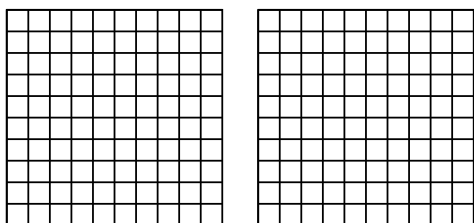
1)  $3 \times 0,1 =$



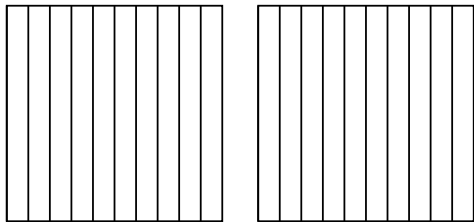
2)  $3 \times 0,7 =$



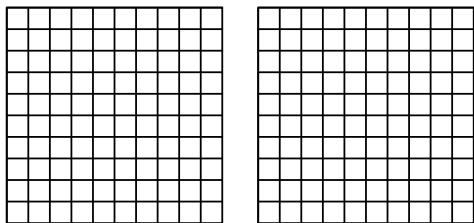
3)  $2 \times 0,28 =$



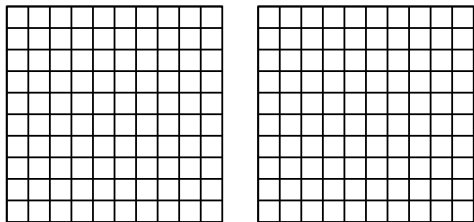
4)  $2 \times 0,1 =$



5)  $2 \times 0,95 =$



6)  $2 \times 0,18 =$



**Risposte**

1. \_\_\_\_\_

2. \_\_\_\_\_

3. \_\_\_\_\_

4. \_\_\_\_\_

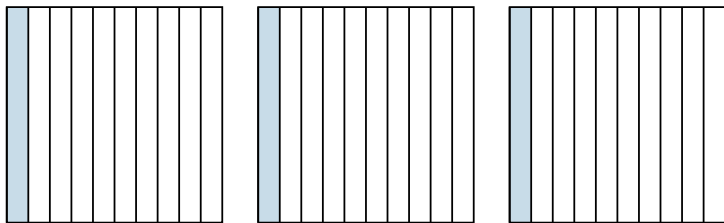
5. \_\_\_\_\_

6. \_\_\_\_\_




Usa il modello visivo per risolvere ogni problema.

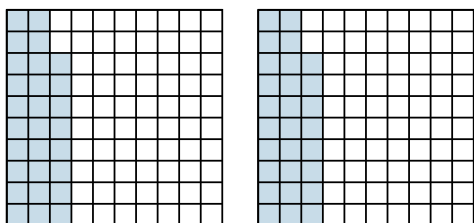
1)  $3 \times 0,1 =$



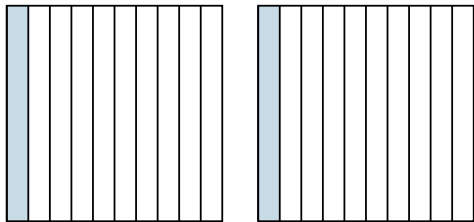
2)  $3 \times 0,7 =$



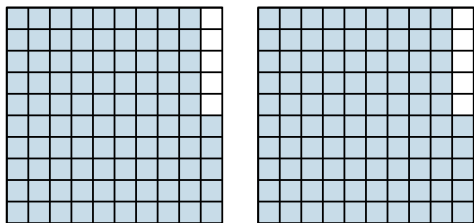
3)  $2 \times 0,28 =$



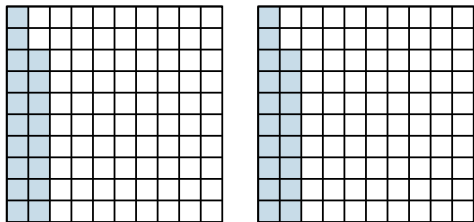
4)  $2 \times 0,1 =$



5)  $2 \times 0,95 =$



6)  $2 \times 0,18 =$



**Risposte**

1.  $\frac{3}{10} = 0,3$

2.  $\frac{21}{10} = 2,1$

3.  $\frac{56}{100} = 0,56$

4.  $\frac{2}{10} = 0,2$

5.  $\frac{190}{100} = 1,9$

6.  $\frac{36}{100} = 0,36$