
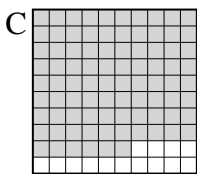

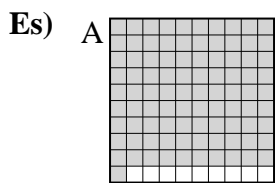




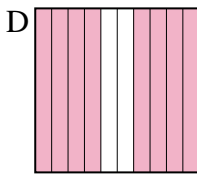
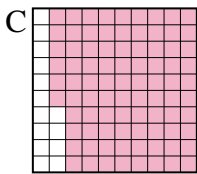
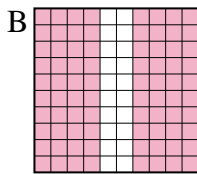
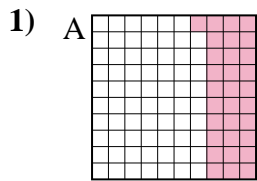
Metti in ordine i seguenti schemi dal più piccolo al più grande, in base alle parti colorate

Risposte



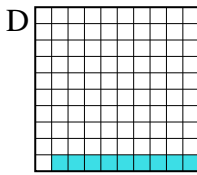
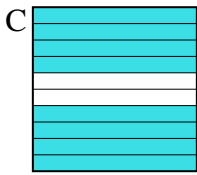
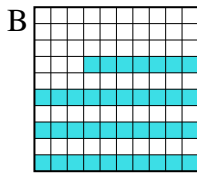
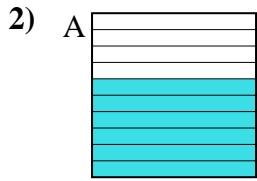
piccolo 0.2 - B
0.6 - D
0.86 - C
grande 0.91 - A

Es. **B,D,C,A**



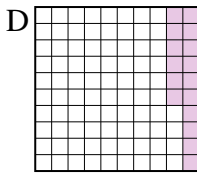
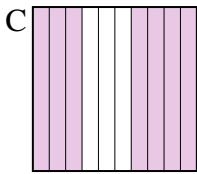
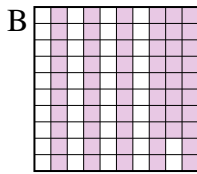
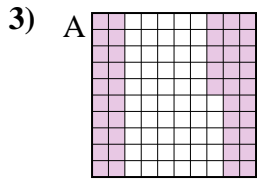
piccolo _____

grande _____



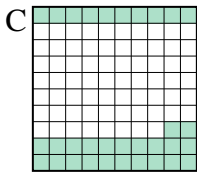
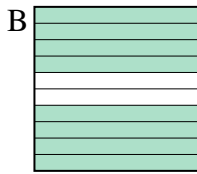
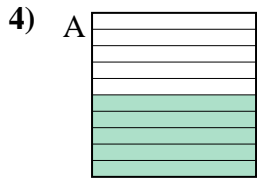
piccolo _____

grande _____



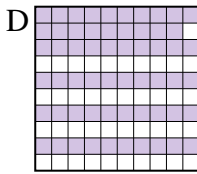
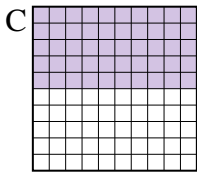
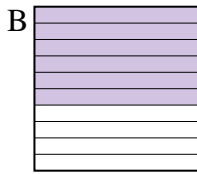
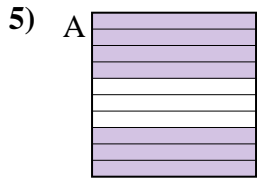
piccolo _____

grande _____



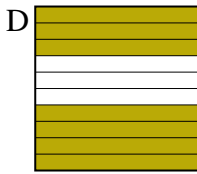

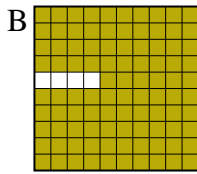
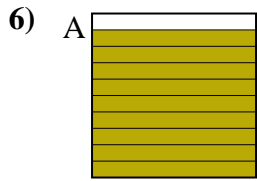
piccolo _____

grande _____



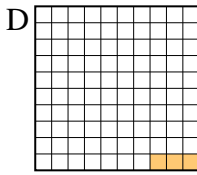
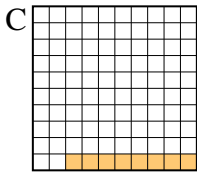
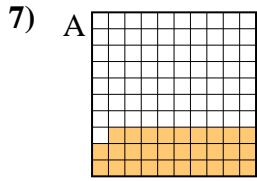
piccolo _____

grande _____



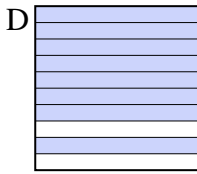
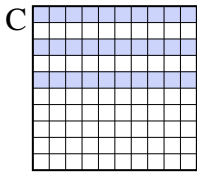
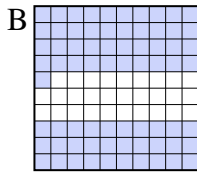
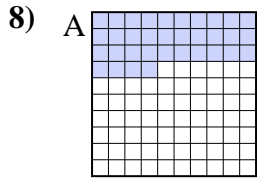
piccolo _____

grande _____



piccolo _____

grande _____



piccolo _____

grande _____

1. _____
2. _____
3. _____
4. _____
5. _____
6. _____
7. _____
8. _____



Metti in ordine i seguenti schemi dal più piccolo al più grande, in base alle parti colorate

Es)	A	B	C	D	piccolo $\frac{0.2 - B}{0.6 - D}$	
					grande $\frac{0.91 - A}{0.91 - A}$	
1)	A	B	C	D	piccolo $\frac{0.31 - A}{0.8 - B}$	
					grande $\frac{0.86 - C}{0.86 - C}$	
2)	A	B	C	D	piccolo $\frac{0.09 - D}{0.37 - B}$	
					grande $\frac{0.6 - A}{0.8 - C}$	
3)	A	B	C	D	piccolo $\frac{0.16 - D}{0.45 - A}$	
					grande $\frac{0.58 - B}{0.7 - C}$	
4)	A	B	C	D	piccolo $\frac{0.2 - D}{0.32 - C}$	
					grande $\frac{0.5 - A}{0.8 - B}$	
5)	A	B	C	D	piccolo $\frac{0.5 - C}{0.59 - D}$	
					grande $\frac{0.6 - B}{0.7 - A}$	
6)	A	B	C	D	piccolo $\frac{0.1 - C}{0.7 - D}$	
					grande $\frac{0.9 - A}{0.96 - B}$	
7)	A	B	C	D	piccolo $\frac{0.03 - D}{0.08 - C}$	
					grande $\frac{0.1 - B}{0.29 - A}$	
8)	A	B	C	D	piccolo $\frac{0.3 - C}{0.34 - A}$	
					grande $\frac{0.71 - B}{0.8 - D}$	

Risposte

- Es. B,D,C,A
1. A,B,B,C
2. D,B,A,C
3. D,A,B,C
4. D,C,A,B
5. C,D,B,A
6. C,D,A,B
7. D,C,B,A
8. C,A,B,D