
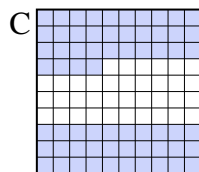

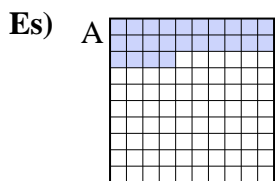




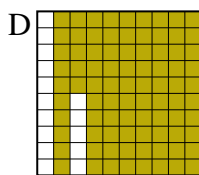
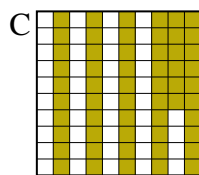
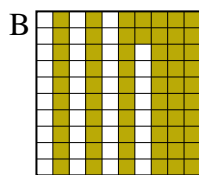
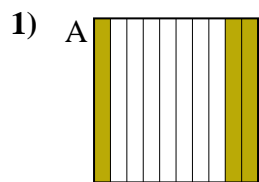
Metti in ordine i seguenti schemi dal più piccolo al più grande, in base alle parti colorate

**Risposte**

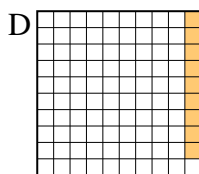
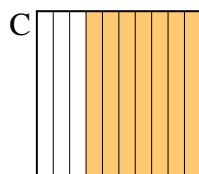
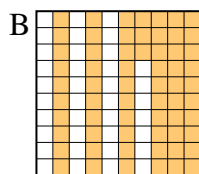
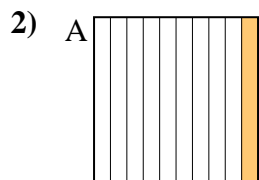


piccolo 0.2 - D  
0.24 - A  
0.4 - B  
 grande 0.64 - C

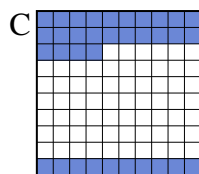

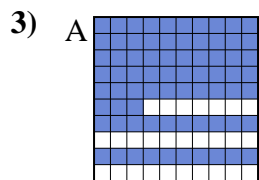
Es. **D,A,B,C**



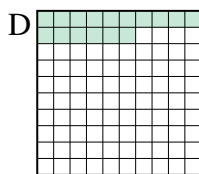


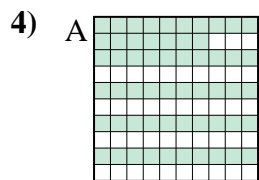
piccolo \_\_\_\_\_  
 grande \_\_\_\_\_



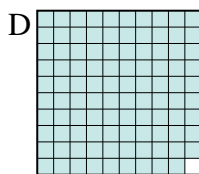
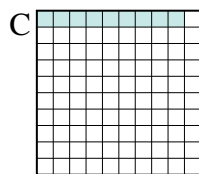

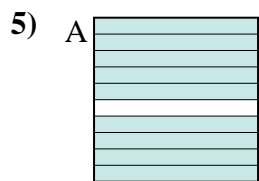
piccolo \_\_\_\_\_  
 grande \_\_\_\_\_



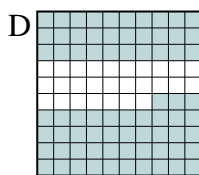
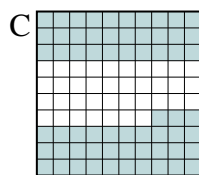
piccolo \_\_\_\_\_  
 grande \_\_\_\_\_



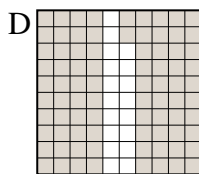
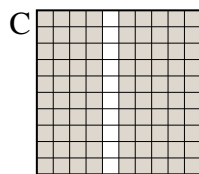
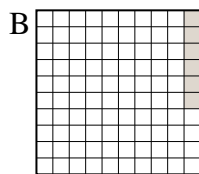
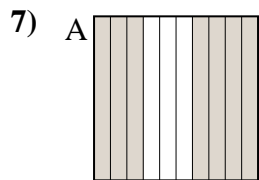
piccolo \_\_\_\_\_  
 grande \_\_\_\_\_




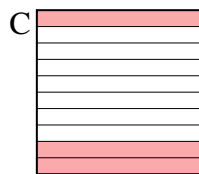
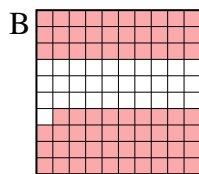
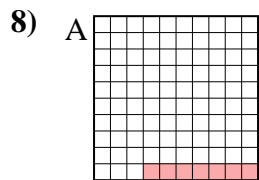
piccolo \_\_\_\_\_  
 grande \_\_\_\_\_



piccolo \_\_\_\_\_  
 grande \_\_\_\_\_



piccolo \_\_\_\_\_  
 grande \_\_\_\_\_



piccolo \_\_\_\_\_  
 grande \_\_\_\_\_

1. \_\_\_\_\_
2. \_\_\_\_\_
3. \_\_\_\_\_
4. \_\_\_\_\_
5. \_\_\_\_\_
6. \_\_\_\_\_
7. \_\_\_\_\_
8. \_\_\_\_\_



Metti in ordine i seguenti schemi dal più piccolo al più grande, in base alle parti colorate

Es)	A	B	C	D	piccolo $\frac{0.2 - D}{0.24 - A}$	
					grande $\frac{0.4 - B}{0.64 - C}$	
1)	A	B	C	D	piccolo $\frac{0.3 - A}{0.56 - C}$	
					grande $\frac{0.62 - B}{0.85 - D}$	
2)	A	B	C	D	piccolo $\frac{0.09 - D}{0.1 - A}$	
					grande $\frac{0.63 - B}{0.7 - C}$	
3)	A	B	C	D	piccolo $\frac{0.3 - B}{0.34 - C}$	
					grande $\frac{0.7 - D}{0.73 - A}$	
4)	A	B	C	D	piccolo $\frac{0.16 - D}{0.4 - B}$	
					grande $\frac{0.57 - A}{0.9 - C}$	
5)	A	B	C	D	piccolo $\frac{0.09 - C}{0.3 - B}$	
					grande $\frac{0.9 - A}{0.99 - D}$	
6)	A	B	C	D	piccolo $\frac{0.3 - A}{0.4 - B}$	
					grande $\frac{0.63 - C}{0.73 - D}$	
7)	A	B	C	D	piccolo $\frac{0.06 - B}{0.7 - A}$	
					grande $\frac{0.82 - D}{0.9 - C}$	
8)	A	B	C	D	piccolo $\frac{0.07 - A}{0.2 - D}$	
					grande $\frac{0.3 - C}{0.69 - B}$	

**Risposte**

- Es. D,A,B,C
1. A,C,B,D
2. D,A,B,C
3. B,C,D,A
4. D,B,A,C
5. C,B,A,D
6. A,B,C,D
7. B,A,D,C
8. A,D,C,B