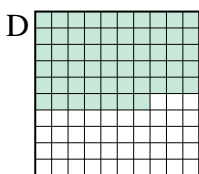
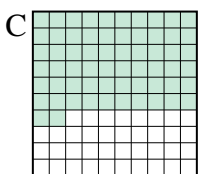
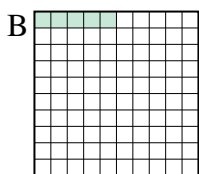
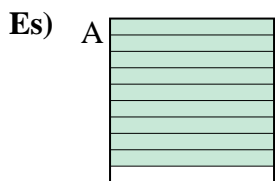




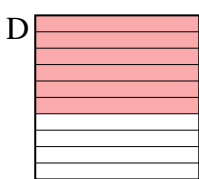
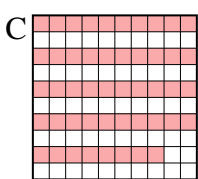
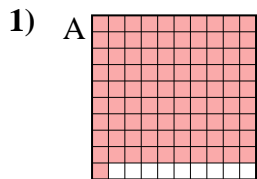
Metti in ordine i seguenti schemi dal più piccolo al più grande, in base alle parti colorate

**Risposte**

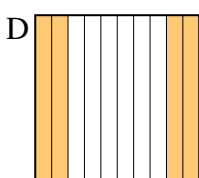
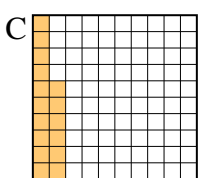
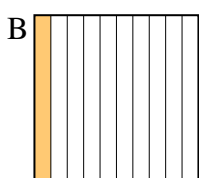
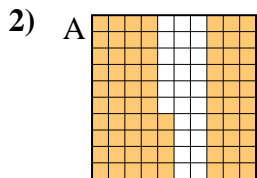


piccolo 0.05 - B  
0.57 - D  
0.62 - C  
grande 0.9 - A

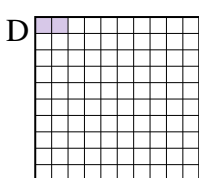
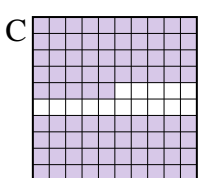

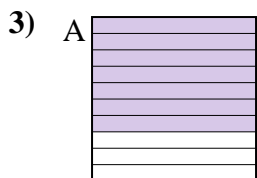
Es. **B,D,C,A**



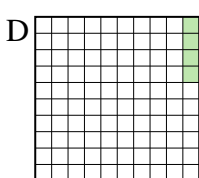
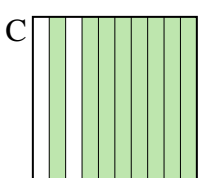
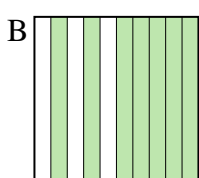
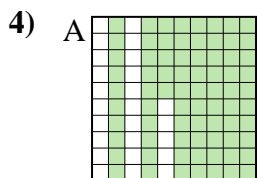
piccolo \_\_\_\_\_  
\_\_\_\_\_  
\_\_\_\_\_  
grande \_\_\_\_\_



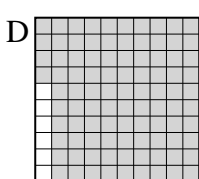
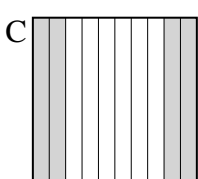
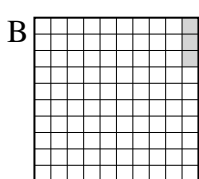
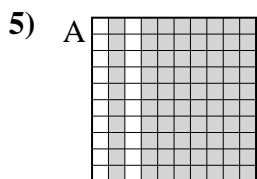
piccolo \_\_\_\_\_  
\_\_\_\_\_  
\_\_\_\_\_  
grande \_\_\_\_\_



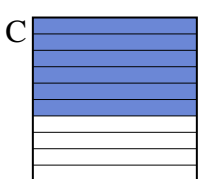
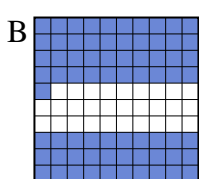
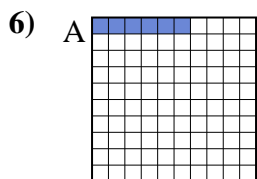
piccolo \_\_\_\_\_  
\_\_\_\_\_  
\_\_\_\_\_  
grande \_\_\_\_\_



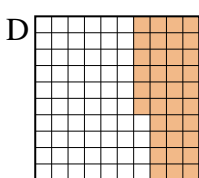
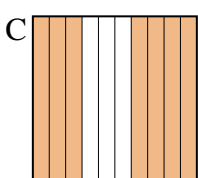
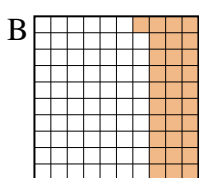
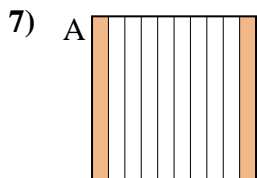
piccolo \_\_\_\_\_  
\_\_\_\_\_  
\_\_\_\_\_  
grande \_\_\_\_\_



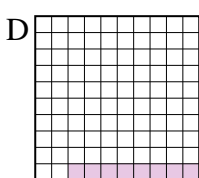
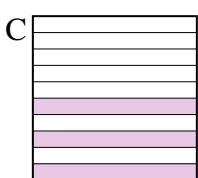
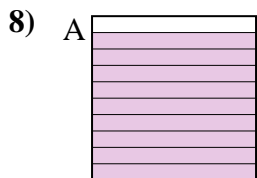
piccolo \_\_\_\_\_  
\_\_\_\_\_  
\_\_\_\_\_  
grande \_\_\_\_\_



piccolo \_\_\_\_\_  
\_\_\_\_\_  
\_\_\_\_\_  
grande \_\_\_\_\_



piccolo \_\_\_\_\_  
\_\_\_\_\_  
\_\_\_\_\_  
grande \_\_\_\_\_


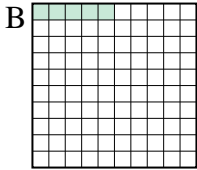
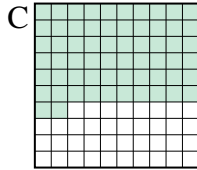
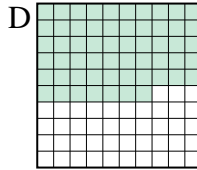
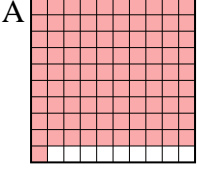

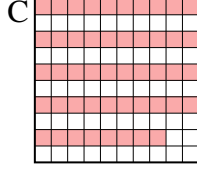

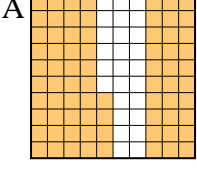
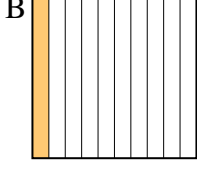
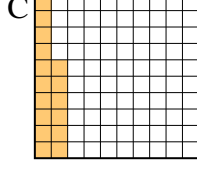
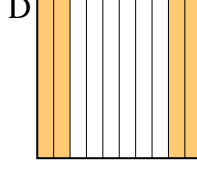


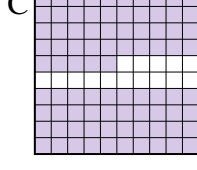
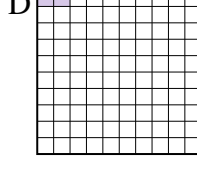
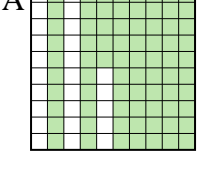
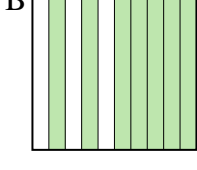
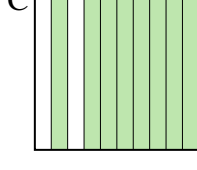


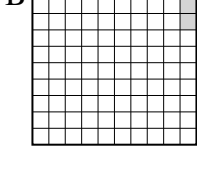
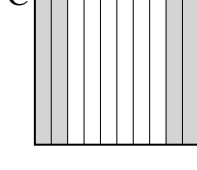


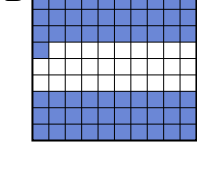


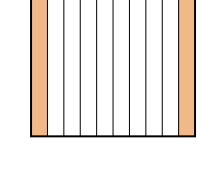
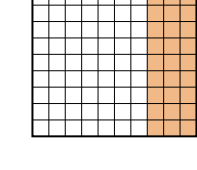
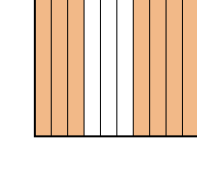
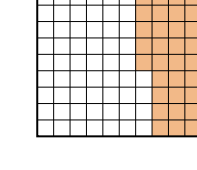






piccolo \_\_\_\_\_  
\_\_\_\_\_  
\_\_\_\_\_  
grande \_\_\_\_\_

1. \_\_\_\_\_
2. \_\_\_\_\_
3. \_\_\_\_\_
4. \_\_\_\_\_
5. \_\_\_\_\_
6. \_\_\_\_\_
7. \_\_\_\_\_
8. \_\_\_\_\_



Metti in ordine i seguenti schemi dal più piccolo al più grande, in base alle parti colorate

Es)	A 	B 	C 	D 	piccolo $\frac{0.05 - B}{0.57 - D}$	
					grande $\frac{0.62 - C}{0.9 - A}$	
1)	A 	B 	C 	D 	piccolo $\frac{0.48 - C}{0.5 - B}$	
					grande $\frac{0.6 - D}{0.91 - A}$	
2)	A 	B 	C 	D 	piccolo $\frac{0.1 - B}{0.16 - C}$	
					grande $\frac{0.4 - D}{0.74 - A}$	
3)	A 	B 	C 	D 	piccolo $\frac{0.02 - D}{0.1 - B}$	
					grande $\frac{0.7 - A}{0.85 - C}$	
4)	A 	B 	C 	D 	piccolo $\frac{0.04 - D}{0.7 - B}$	
					grande $\frac{0.75 - A}{0.8 - C}$	
5)	A 	B 	C 	D 	piccolo $\frac{0.03 - B}{0.4 - C}$	
					grande $\frac{0.8 - A}{0.94 - D}$	
6)	A 	B 	C 	D 	piccolo $\frac{0.06 - A}{0.6 - C}$	
					grande $\frac{0.7 - D}{0.71 - B}$	
7)	A 	B 	C 	D 	piccolo $\frac{0.2 - A}{0.31 - B}$	
					grande $\frac{0.36 - D}{0.7 - C}$	
8)	A 	B 	C 	D 	piccolo $\frac{0.08 - D}{0.3 - C}$	
					grande $\frac{0.4 - B}{0.9 - A}$	

**Risposte**

- Es. **B,D,C,A**
1. **C,B,D,A**
2. **B,C,D,A**
3. **D,B,A,C**
4. **D,B,A,C**
5. **B,C,A,D**
6. **A,C,D,B**
7. **A,B,D,C**
8. **D,C,B,A**