
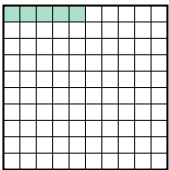







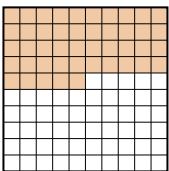

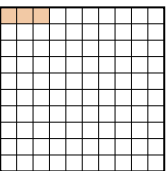
Metti in ordine i seguenti schemi dal più piccolo al più grande, in base alle parti colorate

**Risposte**

Es) A  B  C  D 

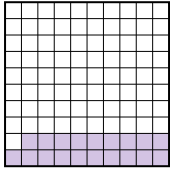


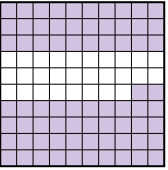
piccolo 0.05 - B  
0.09 - C  
0.5 - A  
grande 0.6 - D

Es. **B,C,A,D**

1) A  B  C  D 

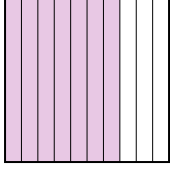
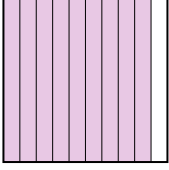
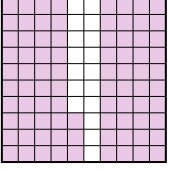
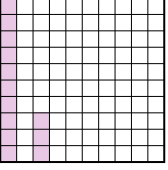
piccolo \_\_\_\_\_  
\_\_\_\_\_

grande \_\_\_\_\_  
\_\_\_\_\_

2) A  B  C  D 

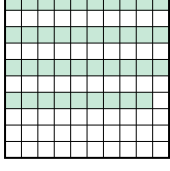

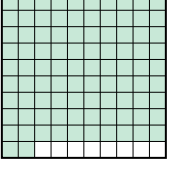
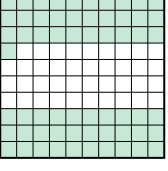
piccolo \_\_\_\_\_  
\_\_\_\_\_

grande \_\_\_\_\_  
\_\_\_\_\_

3) A  B  C  D 

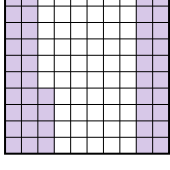


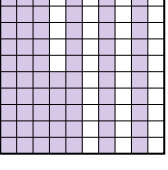
piccolo \_\_\_\_\_  
\_\_\_\_\_

grande \_\_\_\_\_  
\_\_\_\_\_

4) A  B  C  D 

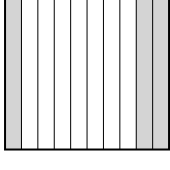

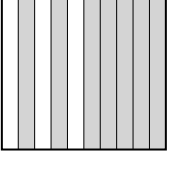

piccolo \_\_\_\_\_  
\_\_\_\_\_

grande \_\_\_\_\_  
\_\_\_\_\_

5) A  B  C  D 

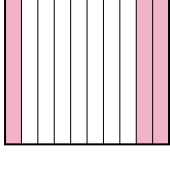
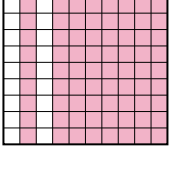
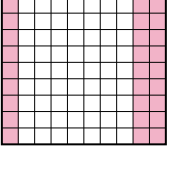
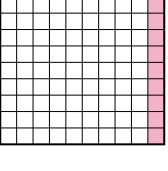
piccolo \_\_\_\_\_  
\_\_\_\_\_

grande \_\_\_\_\_  
\_\_\_\_\_

6) A  B  C  D 





piccolo \_\_\_\_\_  
\_\_\_\_\_

grande \_\_\_\_\_  
\_\_\_\_\_

7) A  B  C  D 

piccolo \_\_\_\_\_  
\_\_\_\_\_

grande \_\_\_\_\_  
\_\_\_\_\_

8) A  B  C  D 

piccolo \_\_\_\_\_  
\_\_\_\_\_

grande \_\_\_\_\_  
\_\_\_\_\_

1. \_\_\_\_\_
2. \_\_\_\_\_
3. \_\_\_\_\_
4. \_\_\_\_\_
5. \_\_\_\_\_
6. \_\_\_\_\_
7. \_\_\_\_\_
8. \_\_\_\_\_



Metti in ordine i seguenti schemi dal più piccolo al più grande, in base alle parti colorate

Es)	A	B	C	D	piccolo $\frac{0.05 - B}{0.09 - C}$	
					grande $\frac{0.5 - A}{0.6 - D}$	
1)	A	B	C	D	piccolo $\frac{0.03 - D}{0.1 - C}$	
					grande $\frac{0.4 - A}{0.45 - B}$	
2)	A	B	C	D	piccolo $\frac{0.01 - C}{0.19 - A}$	
					grande $\frac{0.72 - D}{0.8 - B}$	
3)	A	B	C	D	piccolo $\frac{0.13 - D}{0.7 - A}$	
					grande $\frac{0.83 - C}{0.9 - B}$	
4)	A	B	C	D	piccolo $\frac{0.39 - A}{0.61 - D}$	
					grande $\frac{0.8 - B}{0.92 - C}$	
5)	A	B	C	D	piccolo $\frac{0.3 - C}{0.44 - A}$	
					grande $\frac{0.65 - D}{0.91 - B}$	
6)	A	B	C	D	piccolo $\frac{0.03 - D}{0.14 - B}$	
					grande $\frac{0.3 - A}{0.7 - C}$	
7)	A	B	C	D	piccolo $\frac{0.1 - D}{0.3 - A}$	
					grande $\frac{0.31 - C}{0.81 - B}$	
8)	A	B	C	D	piccolo $\frac{0.1 - D}{0.6 - B}$	
					grande $\frac{0.7 - A}{0.9 - C}$	

**Risposte**

- Es. B,C,A,D
1. D,C,A,B
2. C,A,D,B
3. D,A,C,B
4. A,D,B,C
5. C,A,D,B
6. D,B,A,C
7. D,A,C,B
8. D,B,A,C