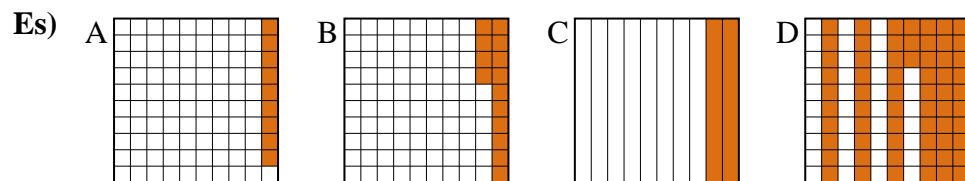




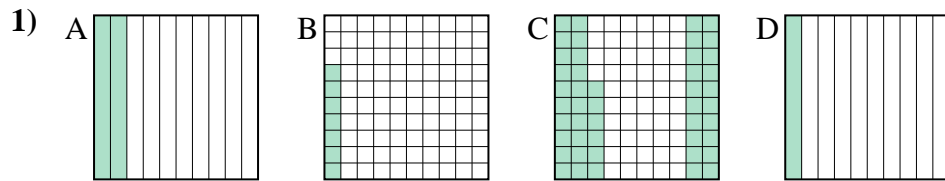
Metti in ordine i seguenti schemi dal più piccolo al più grande, in base alle parti colorate



piccolo 0.09 - A
0.14 - B
0.2 - C
grande 0.63 - D

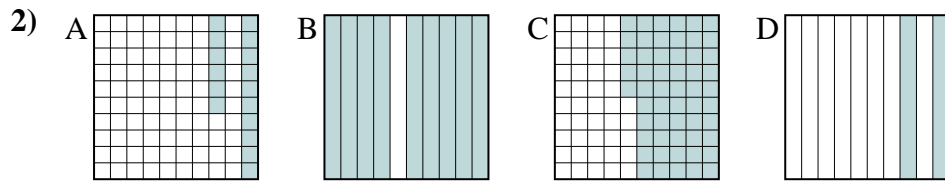
Risposte

Es. A,B,C,D



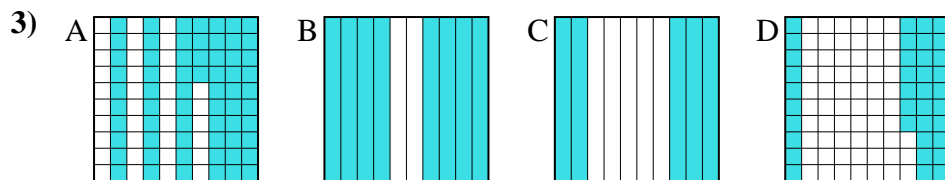
piccolo _____

grande _____



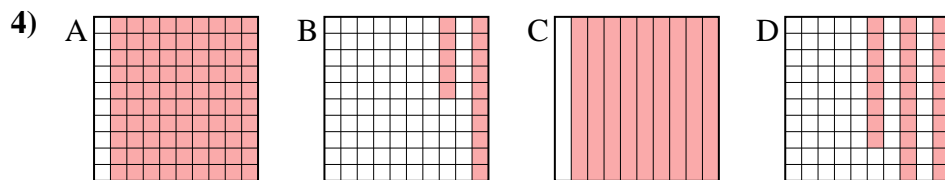
piccolo _____

grande _____



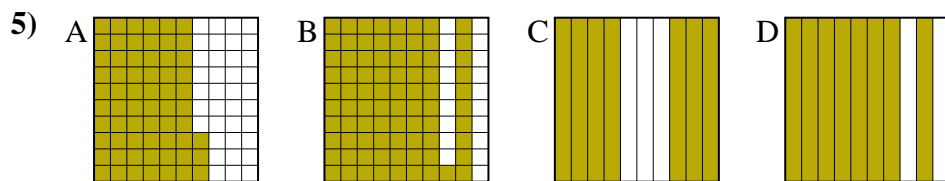
piccolo _____

grande _____



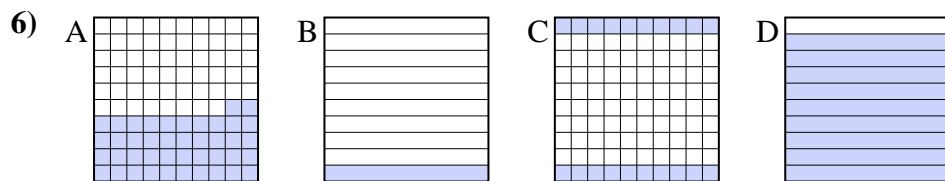
piccolo _____

grande _____



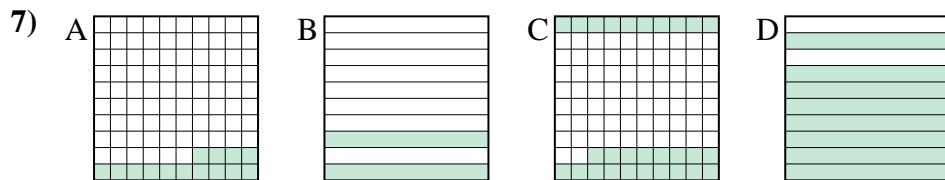
piccolo _____

grande _____



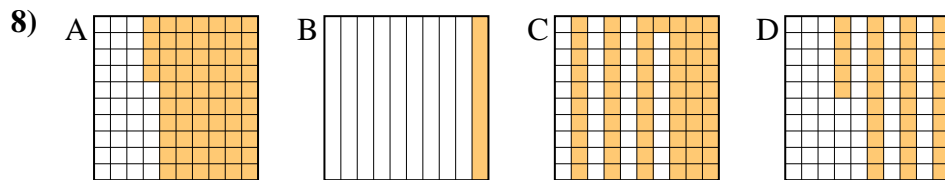
piccolo _____

grande _____



piccolo _____

grande _____



piccolo _____

grande _____

1. _____
2. _____
3. _____
4. _____
5. _____
6. _____
7. _____
8. _____



Metti in ordine i seguenti schemi dal più piccolo al più grande, in base alle parti colorate

Es)	A	B	C	D	piccolo $\frac{0.09 - A}{0.14 - B}$	
					$\frac{0.2 - C}{0.63 - D}$	
1)	A	B	C	D	piccolo $\frac{0.07 - B}{0.1 - D}$	
					$\frac{0.2 - A}{0.46 - C}$	
2)	A	B	C	D	piccolo $\frac{0.16 - A}{0.2 - D}$	
					$\frac{0.55 - C}{0.9 - B}$	
3)	A	B	C	D	piccolo $\frac{0.37 - D}{0.5 - C}$	
					$\frac{0.64 - A}{0.8 - B}$	
4)	A	B	C	D	piccolo $\frac{0.15 - B}{0.28 - D}$	
					$\frac{0.9 - A}{0.9 - A}$	
5)	A	B	C	D	piccolo $\frac{0.63 - A}{0.7 - C}$	
					$\frac{0.8 - D}{0.81 - B}$	
6)	A	B	C	D	piccolo $\frac{0.1 - B}{0.2 - C}$	
					$\frac{0.42 - A}{0.9 - D}$	
7)	A	B	C	D	piccolo $\frac{0.14 - A}{0.2 - B}$	
					$\frac{0.28 - C}{0.8 - D}$	
8)	A	B	C	D	piccolo $\frac{0.1 - B}{0.35 - D}$	
					$\frac{0.61 - C}{0.64 - A}$	

Risposte

- Es. A,B,C,D
1. B,D,A,C
2. A,D,C,B
3. D,C,A,B
4. B,D,A,A
5. A,C,D,B
6. B,C,A,D
7. A,B,C,D
8. B,D,C,A