
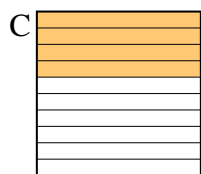
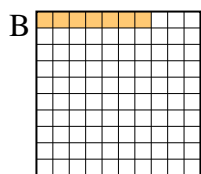
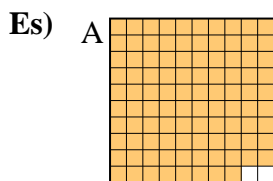




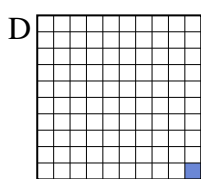
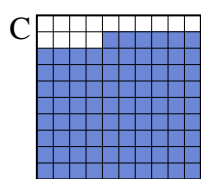
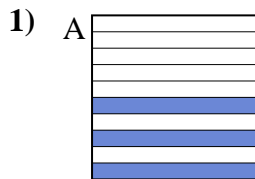
Metti in ordine i seguenti schemi dal più piccolo al più grande, in base alle parti colorate

Risposte




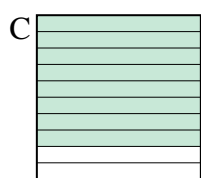
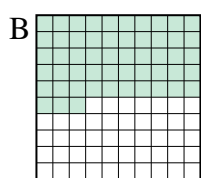
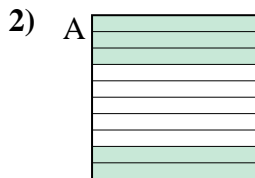
piccolo 0.07 - B
0.1 - D
0.4 - C
grande 0.98 - A

Es. **B,D,C,A**



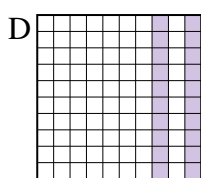
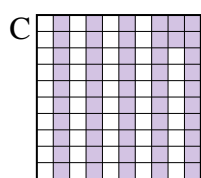
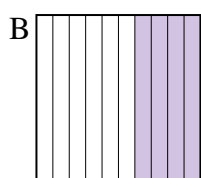
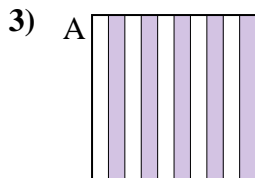
piccolo _____

grande _____




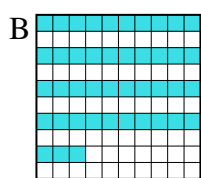
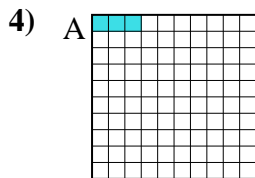
piccolo _____

grande _____



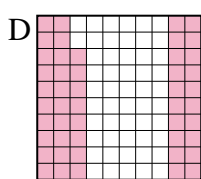
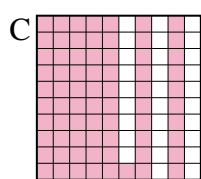
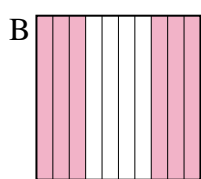
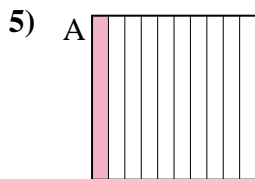
piccolo _____

grande _____



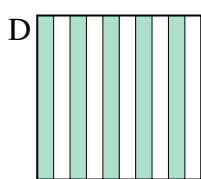
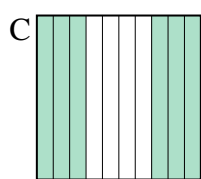
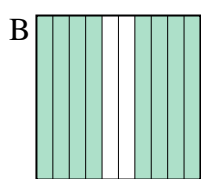
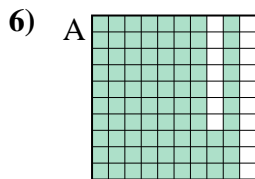
piccolo _____

grande _____



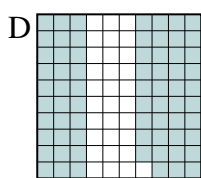
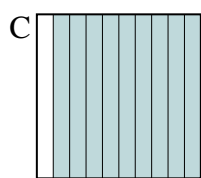
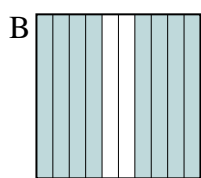
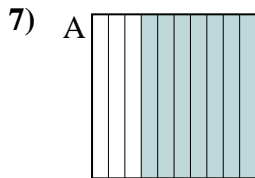
piccolo _____

grande _____



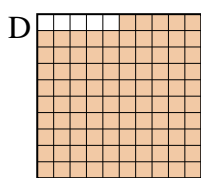
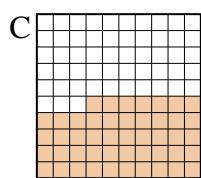
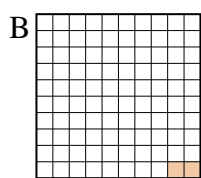
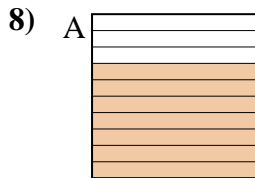
piccolo _____

grande _____



piccolo _____

grande _____



piccolo _____

grande _____

1. _____
2. _____
3. _____
4. _____
5. _____
6. _____
7. _____
8. _____



Metti in ordine i seguenti schemi dal più piccolo al più grande, in base alle parti colorate

Es)	A	B	C	D	piccolo <u>0.07 - B</u> <u>0.1 - D</u> <u>0.4 - C</u>
					grande <u>0.98 - A</u>
1)	A	B	C	D	piccolo <u>0.01 - D</u> <u>0.3 - A</u> <u>0.86 - C</u>
					grande <u>0.9 - B</u>
2)	A	B	C	D	piccolo <u>0.1 - D</u> <u>0.5 - A</u> <u>0.53 - B</u>
					grande <u>0.8 - C</u>
3)	A	B	C	D	piccolo <u>0.2 - D</u> <u>0.4 - B</u> <u>0.5 - A</u>
					grande <u>0.52 - C</u>
4)	A	B	C	D	piccolo <u>0.03 - A</u> <u>0.2 - C</u> <u>0.43 - B</u>
					grande <u>0.9 - D</u>
5)	A	B	C	D	piccolo <u>0.1 - A</u> <u>0.48 - D</u> <u>0.6 - B</u>
					grande <u>0.71 - C</u>
6)	A	B	C	D	piccolo <u>0.5 - D</u> <u>0.6 - C</u> <u>0.8 - B</u>
					grande <u>0.83 - A</u>
7)	A	B	C	D	piccolo <u>0.69 - D</u> <u>0.7 - A</u> <u>0.8 - B</u>
					grande <u>0.9 - C</u>
8)	A	B	C	D	piccolo <u>0.02 - B</u> <u>0.47 - C</u> <u>0.7 - A</u>
					grande <u>0.95 - D</u>

Risposte

- Es. **B,D,C,A**
1. **D,A,C,B**
2. **D,A,B,C**
3. **D,B,A,C**
4. **A,C,B,D**
5. **A,D,B,C**
6. **D,C,B,A**
7. **D,A,B,C**
8. **B,C,A,D**