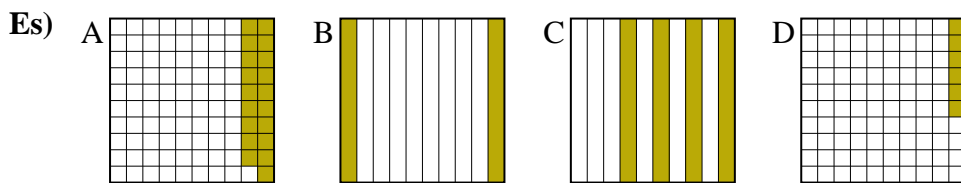




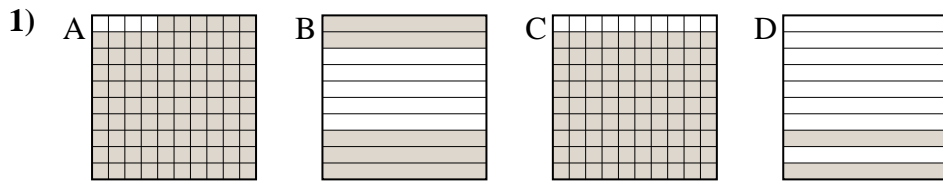
Metti in ordine i seguenti schemi dal più piccolo al più grande, in base alle parti colorate

**Risposte**

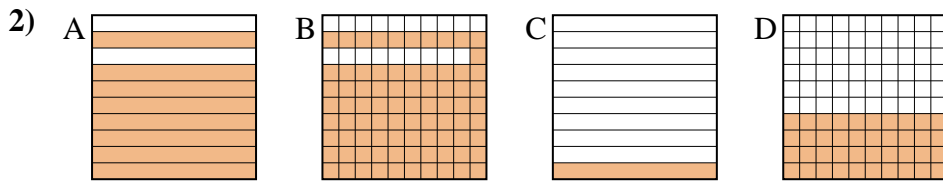


piccolo 0.06 - D  
0.19 - A  
0.2 - B  
grande 0.4 - C

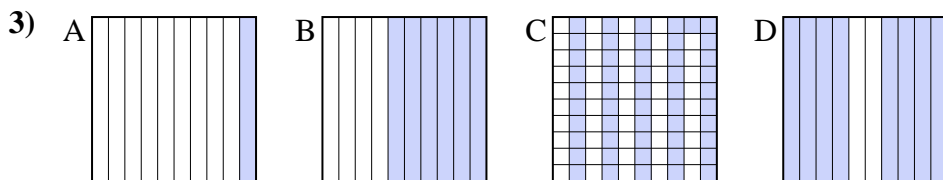
Es. **D,A,B,C**



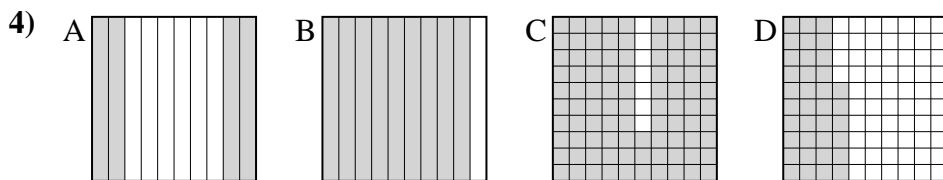
piccolo \_\_\_\_\_  
\_\_\_\_\_  
grande \_\_\_\_\_



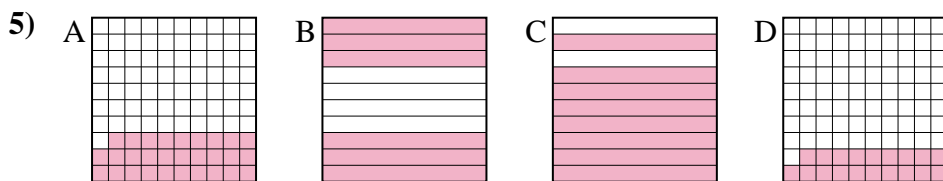
piccolo \_\_\_\_\_  
\_\_\_\_\_  
grande \_\_\_\_\_



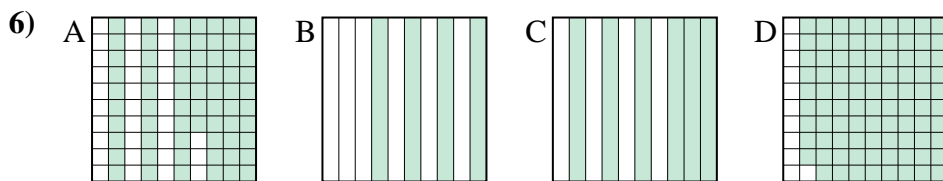
piccolo \_\_\_\_\_  
\_\_\_\_\_  
grande \_\_\_\_\_



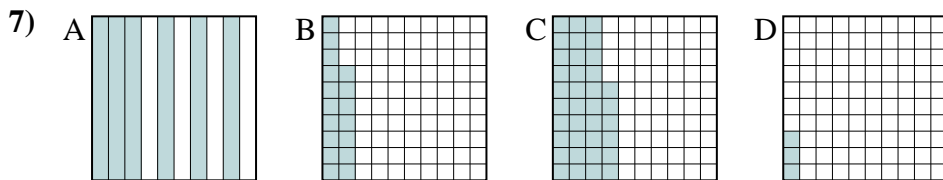
piccolo \_\_\_\_\_  
\_\_\_\_\_  
grande \_\_\_\_\_



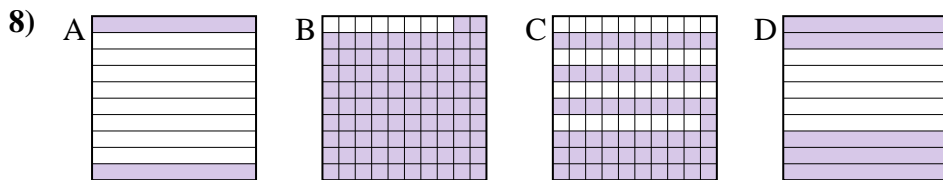
piccolo \_\_\_\_\_  
\_\_\_\_\_  
grande \_\_\_\_\_



piccolo \_\_\_\_\_  
\_\_\_\_\_  
grande \_\_\_\_\_



piccolo \_\_\_\_\_  
\_\_\_\_\_  
grande \_\_\_\_\_



piccolo \_\_\_\_\_  
\_\_\_\_\_  
grande \_\_\_\_\_

1. \_\_\_\_\_
2. \_\_\_\_\_
3. \_\_\_\_\_
4. \_\_\_\_\_
5. \_\_\_\_\_
6. \_\_\_\_\_
7. \_\_\_\_\_
8. \_\_\_\_\_



Metti in ordine i seguenti schemi dal più piccolo al più grande, in base alle parti colorate

Es)	A	B	C	D	piccolo <u>0.06 - D</u> <u>0.19 - A</u> <u>0.2 - B</u>
					grande <u>0.4 - C</u>
1)	A	B	C	D	piccolo <u>0.2 - D</u> <u>0.5 - B</u> <u>0.9 - C</u>
					grande <u>0.96 - A</u>
2)	A	B	C	D	piccolo <u>0.1 - C</u> <u>0.4 - D</u> <u>0.8 - A</u>
					grande <u>0.81 - B</u>
3)	A	B	C	D	piccolo <u>0.1 - A</u> <u>0.51 - C</u> <u>0.6 - B</u>
					grande <u>0.8 - D</u>
4)	A	B	C	D	piccolo <u>0.36 - D</u> <u>0.4 - A</u> <u>0.9 - B</u>
					grande <u>0.93 - C</u>
5)	A	B	C	D	piccolo <u>0.19 - D</u> <u>0.29 - A</u> <u>0.6 - B</u>
					grande <u>0.8 - C</u>
6)	A	B	C	D	piccolo <u>0.4 - B</u> <u>0.6 - C</u> <u>0.67 - A</u>
					grande <u>0.89 - D</u>
7)	A	B	C	D	piccolo <u>0.03 - D</u> <u>0.17 - B</u> <u>0.36 - C</u>
					grande <u>0.6 - A</u>
8)	A	B	C	D	piccolo <u>0.2 - A</u> <u>0.5 - D</u> <u>0.61 - C</u>
					grande <u>0.92 - B</u>

**Risposte**

- Es. D,A,B,C
1. D,B,C,A
2. C,D,A,B
3. A,C,B,D
4. D,A,B,C
5. D,A,B,C
6. B,C,A,D
7. D,B,C,A
8. A,D,C,B