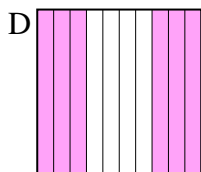
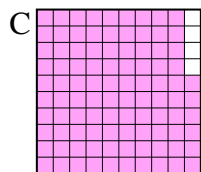
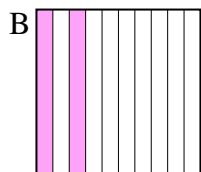
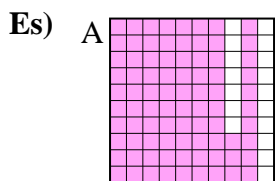




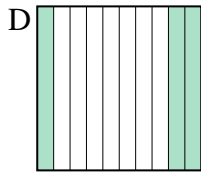
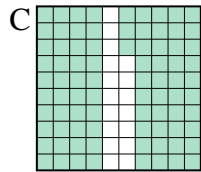
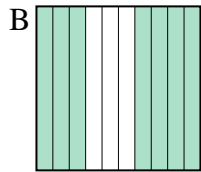
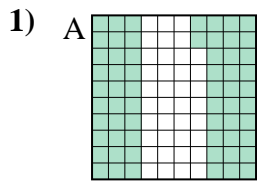
Metti in ordine i seguenti schemi dal più piccolo al più grande, in base alle parti colorate

Risposte



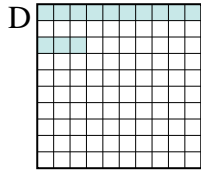
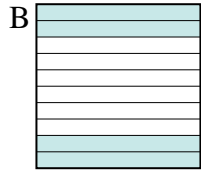
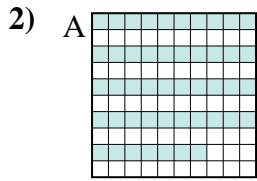
piccolo 0.2 - B
0.6 - D
0.83 - A
grande 0.96 - C

Es. **B,D,A,C**



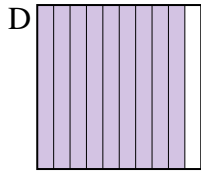
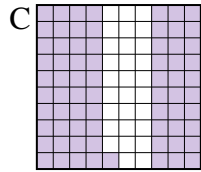
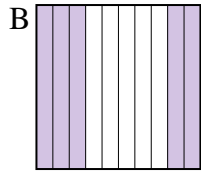
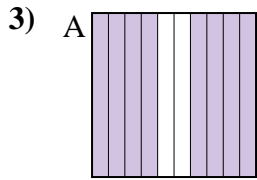
piccolo _____

grande _____



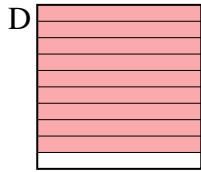
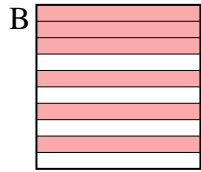
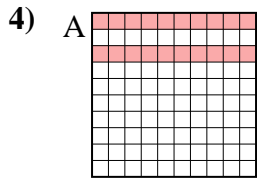
piccolo _____

grande _____



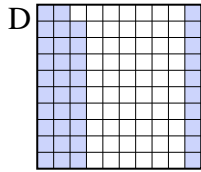
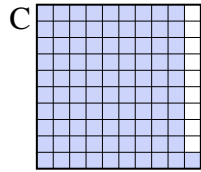
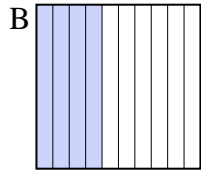
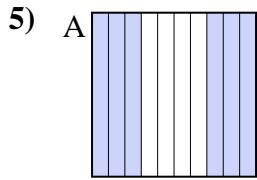
piccolo _____

grande _____



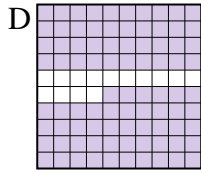
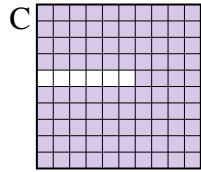
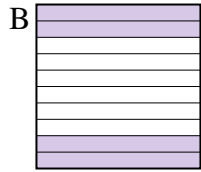
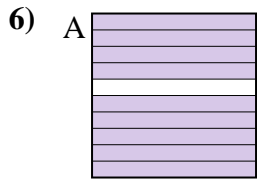
piccolo _____

grande _____



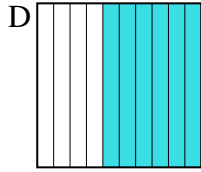
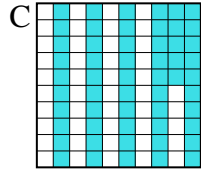
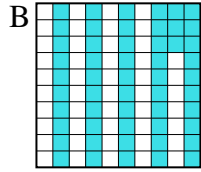
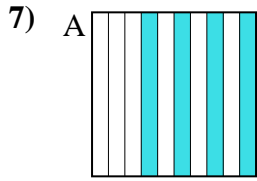
piccolo _____

grande _____



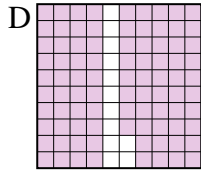
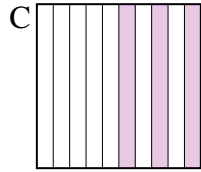
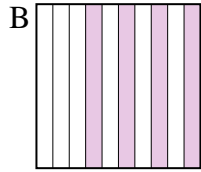
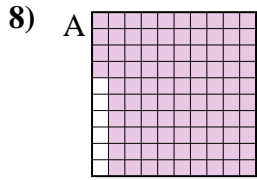
piccolo _____

grande _____



piccolo _____

grande _____



piccolo _____

grande _____

1. _____
2. _____
3. _____
4. _____
5. _____
6. _____
7. _____
8. _____



Metti in ordine i seguenti schemi dal più piccolo al più grande, in base alle parti colorate

Es)	A	B	C	D	piccolo $\frac{0.2 - B}{0.6 - D}$	
					grande $\frac{0.83 - A}{0.96 - C}$	
1)	A	B	C	D	piccolo $\frac{0.3 - D}{0.62 - A}$	
					grande $\frac{0.7 - B}{0.83 - C}$	
2)	A	B	C	D	piccolo $\frac{0.13 - D}{0.4 - B}$	
					grande $\frac{0.47 - A}{0.7 - C}$	
3)	A	B	C	D	piccolo $\frac{0.5 - B}{0.71 - C}$	
					grande $\frac{0.8 - A}{0.9 - D}$	
4)	A	B	C	D	piccolo $\frac{0.1 - C}{0.2 - A}$	
					grande $\frac{0.6 - B}{0.9 - D}$	
5)	A	B	C	D	piccolo $\frac{0.39 - D}{0.4 - B}$	
					grande $\frac{0.6 - A}{0.91 - C}$	
6)	A	B	C	D	piccolo $\frac{0.4 - B}{0.86 - D}$	
					grande $\frac{0.9 - A}{0.94 - C}$	
7)	A	B	C	D	piccolo $\frac{0.4 - A}{0.53 - B}$	
					grande $\frac{0.55 - C}{0.6 - D}$	
8)	A	B	C	D	piccolo $\frac{0.3 - C}{0.4 - B}$	
					grande $\frac{0.88 - D}{0.94 - A}$	

Risposte

- Es. B,D,A,C
1. D,A,B,C
2. D,B,A,C
3. B,C,A,D
4. C,A,B,D
5. D,B,A,C
6. B,D,A,C
7. A,B,C,D
8. C,B,D,A