
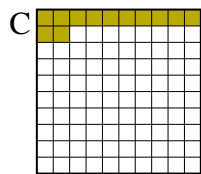
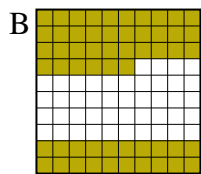
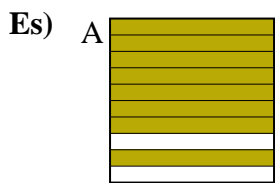




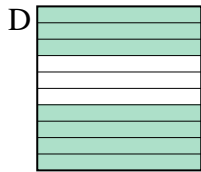
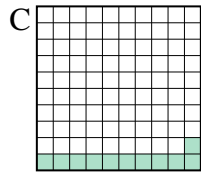

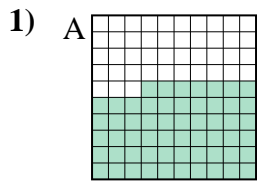
Metti in ordine i seguenti schemi dal più piccolo al più grande, in base alle parti colorate

**Risposte**

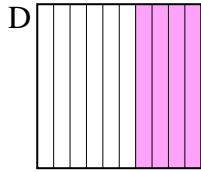
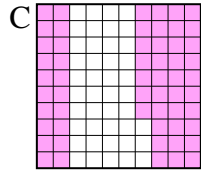
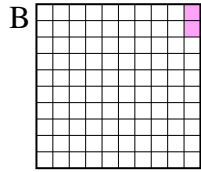
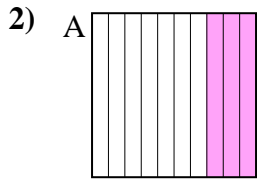


piccolo 0.12 - C  
0.56 - B  
0.7 - D  
 grande 0.8 - A

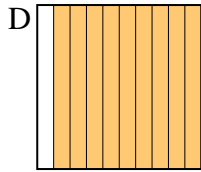
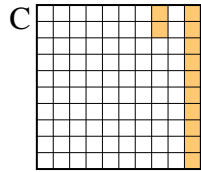
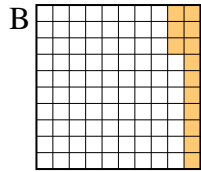
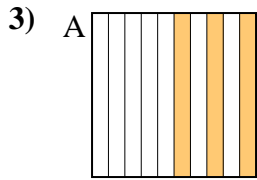
Es. C,B,D,A



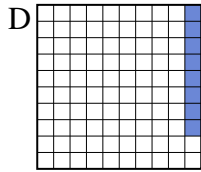
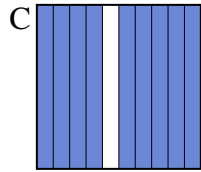
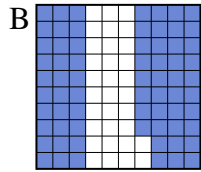
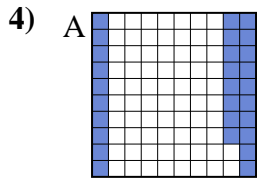
piccolo \_\_\_\_\_  
 grande \_\_\_\_\_




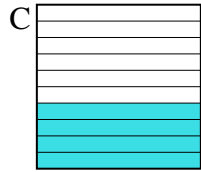
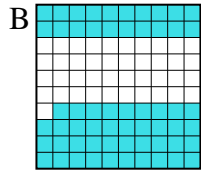
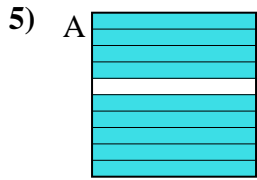
piccolo \_\_\_\_\_  
 grande \_\_\_\_\_



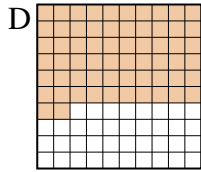
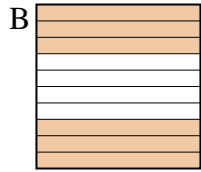
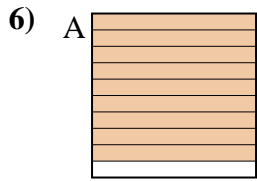
piccolo \_\_\_\_\_  
 grande \_\_\_\_\_



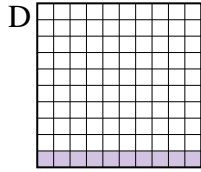
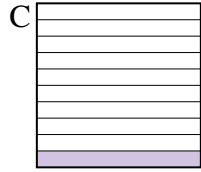
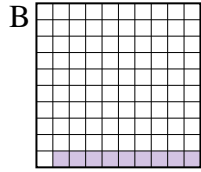
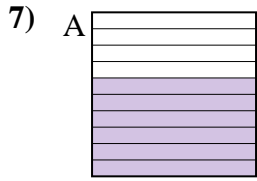
piccolo \_\_\_\_\_  
 grande \_\_\_\_\_



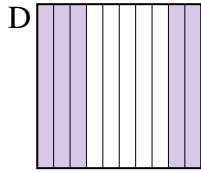
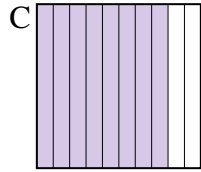
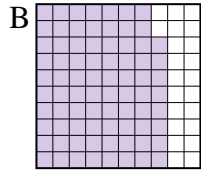
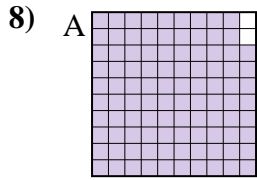
piccolo \_\_\_\_\_  
 grande \_\_\_\_\_



piccolo \_\_\_\_\_  
 grande \_\_\_\_\_



piccolo \_\_\_\_\_  
 grande \_\_\_\_\_



piccolo \_\_\_\_\_  
 grande \_\_\_\_\_

1. \_\_\_\_\_
2. \_\_\_\_\_
3. \_\_\_\_\_
4. \_\_\_\_\_
5. \_\_\_\_\_
6. \_\_\_\_\_
7. \_\_\_\_\_
8. \_\_\_\_\_



Metti in ordine i seguenti schemi dal più piccolo al più grande, in base alle parti colorate

Es)	A	B	C	D	piccolo $\frac{0.12 - C}{0.56 - B}$
					grande $\frac{0.7 - D}{0.8 - A}$
1)	A	B	C	D	piccolo $\frac{0.11 - C}{0.57 - A}$
					grande $\frac{0.7 - D}{0.9 - B}$
2)	A	B	C	D	piccolo $\frac{0.02 - B}{0.3 - A}$
					grande $\frac{0.4 - D}{0.57 - C}$
3)	A	B	C	D	piccolo $\frac{0.12 - C}{0.13 - B}$
					grande $\frac{0.3 - A}{0.9 - D}$
4)	A	B	C	D	piccolo $\frac{0.08 - D}{0.28 - A}$
					grande $\frac{0.68 - B}{0.9 - C}$
5)	A	B	C	D	piccolo $\frac{0.3 - D}{0.4 - C}$
					grande $\frac{0.59 - B}{0.9 - A}$
6)	A	B	C	D	piccolo $\frac{0.2 - C}{0.6 - B}$
					grande $\frac{0.62 - D}{0.9 - A}$
7)	A	B	C	D	piccolo $\frac{0.09 - B}{0.1 - C}$
					grande $\frac{0.1 - C}{0.6 - A}$
8)	A	B	C	D	piccolo $\frac{0.5 - D}{0.78 - B}$
					grande $\frac{0.8 - C}{0.98 - A}$

**Risposte**

- Es. C,B,D,A
1. C,A,D,B
2. B,A,D,C
3. C,B,A,D
4. D,A,B,C
5. D,C,B,A
6. C,B,D,A
7. B,C,C,A
8. D,B,C,A