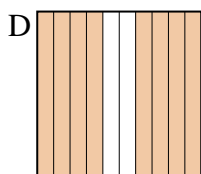
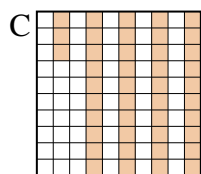
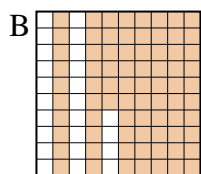
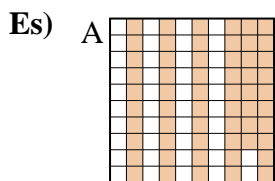




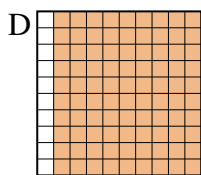
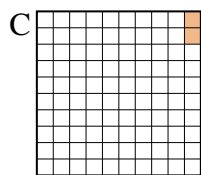
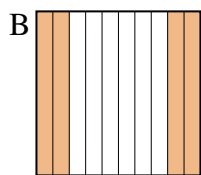
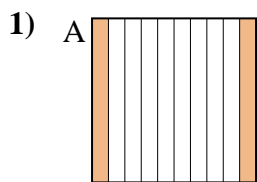
Metti in ordine i seguenti schemi dal più piccolo al più grande, in base alle parti colorate

**Risposte**



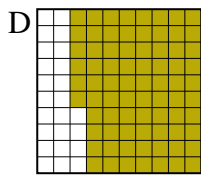
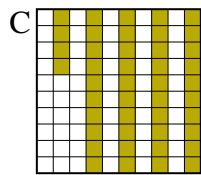
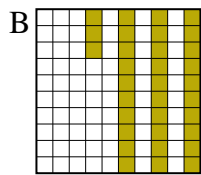
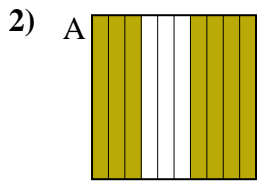
piccolo 0.43 - C  
0.58 - A  
0.76 - B  
grande 0.8 - D

Es. C,A,B,D




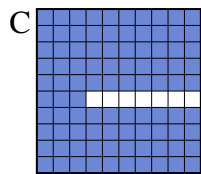
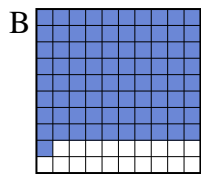
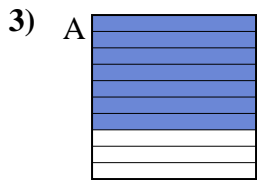
piccolo \_\_\_\_\_  
\_\_\_\_\_

grande \_\_\_\_\_  
\_\_\_\_\_



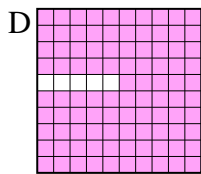
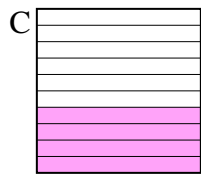
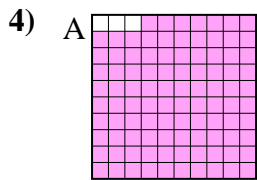
piccolo \_\_\_\_\_  
\_\_\_\_\_

grande \_\_\_\_\_  
\_\_\_\_\_



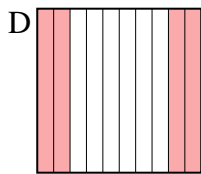
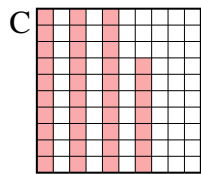
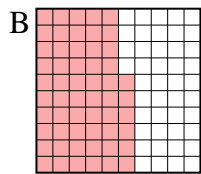
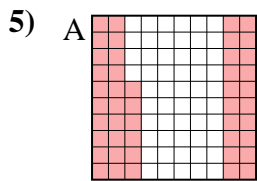
piccolo \_\_\_\_\_  
\_\_\_\_\_

grande \_\_\_\_\_  
\_\_\_\_\_



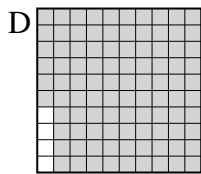
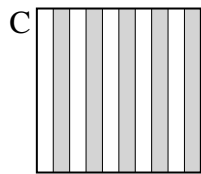
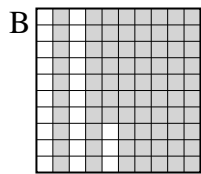
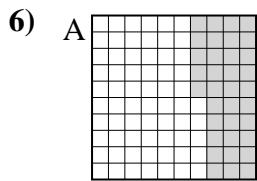
piccolo \_\_\_\_\_  
\_\_\_\_\_

grande \_\_\_\_\_  
\_\_\_\_\_



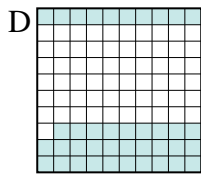
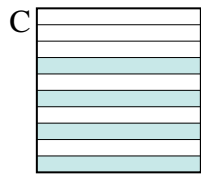
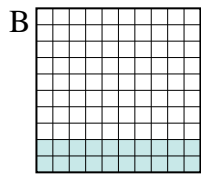
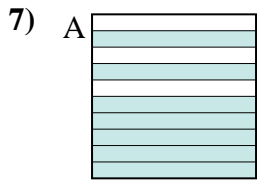
piccolo \_\_\_\_\_  
\_\_\_\_\_

grande \_\_\_\_\_  
\_\_\_\_\_



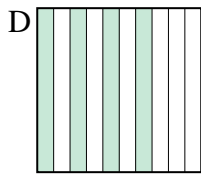
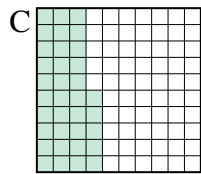
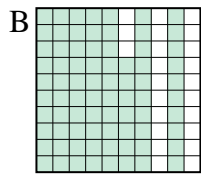
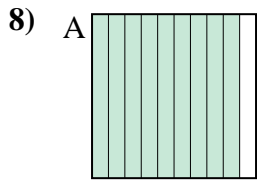
piccolo \_\_\_\_\_  
\_\_\_\_\_

grande \_\_\_\_\_  
\_\_\_\_\_



piccolo \_\_\_\_\_  
\_\_\_\_\_

grande \_\_\_\_\_  
\_\_\_\_\_



piccolo \_\_\_\_\_  
\_\_\_\_\_

grande \_\_\_\_\_  
\_\_\_\_\_

1. \_\_\_\_\_
2. \_\_\_\_\_
3. \_\_\_\_\_
4. \_\_\_\_\_
5. \_\_\_\_\_
6. \_\_\_\_\_
7. \_\_\_\_\_
8. \_\_\_\_\_



Metti in ordine i seguenti schemi dal più piccolo al più grande, in base alle parti colorate

Es)	A	B	C	D	piccolo <u>0.43 - C</u> <u>0.58 - A</u> <u>0.76 - B</u>
					grande <u>0.8 - D</u>
1)	A	B	C	D	piccolo <u>0.02 - C</u> <u>0.2 - A</u> <u>0.4 - B</u>
					grande <u>0.9 - D</u>
2)	A	B	C	D	piccolo <u>0.33 - B</u> <u>0.44 - C</u> <u>0.7 - A</u>
					grande <u>0.76 - D</u>
3)	A	B	C	D	piccolo <u>0.7 - A</u> <u>0.81 - B</u> <u>0.9 - D</u>
					grande <u>0.93 - C</u>
4)	A	B	C	D	piccolo <u>0.1 - B</u> <u>0.4 - C</u> <u>0.95 - D</u>
					grande <u>0.97 - A</u>
5)	A	B	C	D	piccolo <u>0.37 - C</u> <u>0.4 - D</u> <u>0.46 - A</u>
					grande <u>0.56 - B</u>
6)	A	B	C	D	piccolo <u>0.35 - A</u> <u>0.5 - C</u> <u>0.77 - B</u>
					grande <u>0.96 - D</u>
7)	A	B	C	D	piccolo <u>0.2 - B</u> <u>0.39 - D</u> <u>0.4 - C</u>
					grande <u>0.7 - A</u>
8)	A	B	C	D	piccolo <u>0.35 - C</u> <u>0.4 - D</u> <u>0.77 - B</u>
					grande <u>0.9 - A</u>

**Risposte**

- Es. C,A,B,D
1. C,A,B,D
2. B,C,A,D
3. A,B,D,C
4. B,C,D,A
5. C,D,A,B
6. A,C,B,D
7. B,D,C,A
8. C,D,B,A