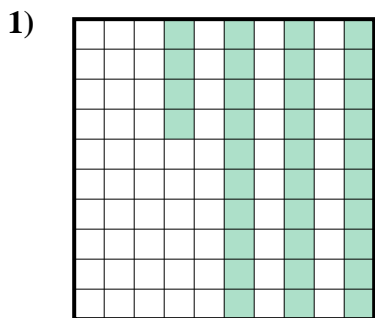


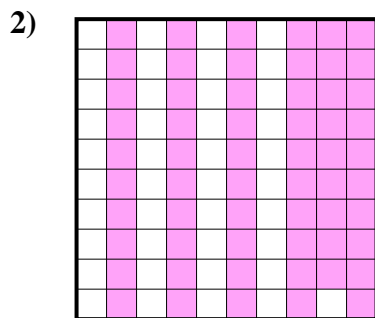


Determina quale lettera rappresenta la quantità colorata del tutto.

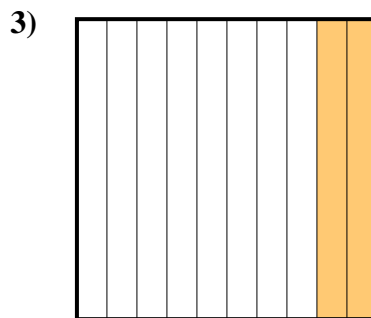
Risposte



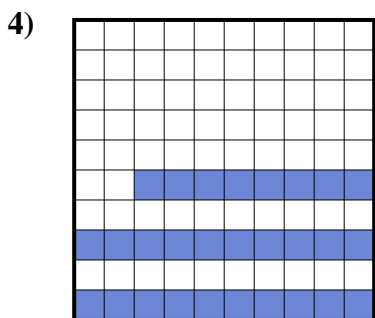
- A. 0,034
- B. 3,4
- C. 340,00
- D. 0,34




- A. 590,00
- B. 0,59
- C. 0,059
- D. 59



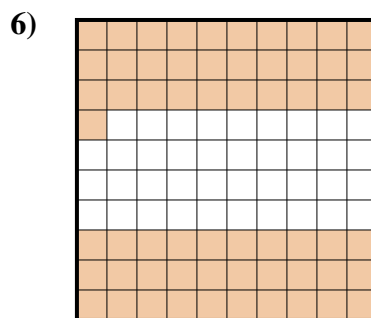
- A. 200,00
- B. 20
- C. 0,2
- D. 0,02



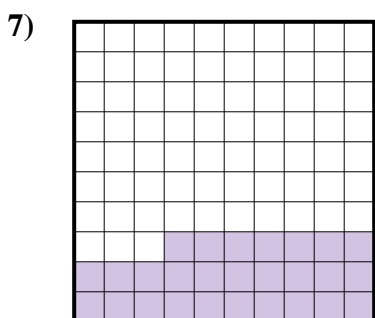
- A. 0,028
- B. 280,00
- C. 0,28
- D. 28




- A. 300,00
- B. 0,3
- C. 0,03
- D. 3



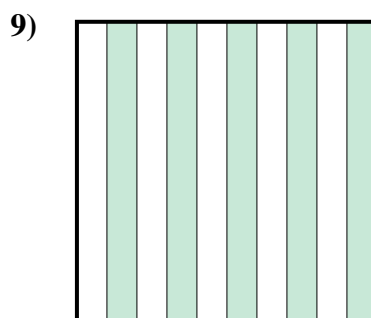
- A. 610,0
- B. 0,61
- C. 61
- D. 6,1



- A. 0,27
- B. 27
- C. 2,7
- D. 270,00



- A. 100,00
- B. 0,1
- C. 0,01
- D. 1



- A. 0,05
- B. 500,0
- C. 500,00
- D. 0,5

1. _____

2. _____

3. _____

4. _____

5. _____

6. _____

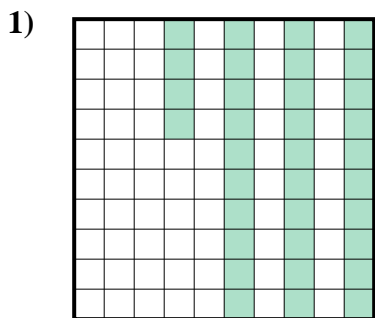
7. _____

8. _____

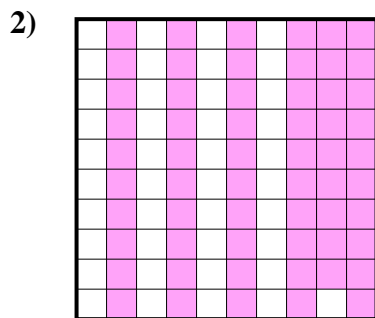
9. _____



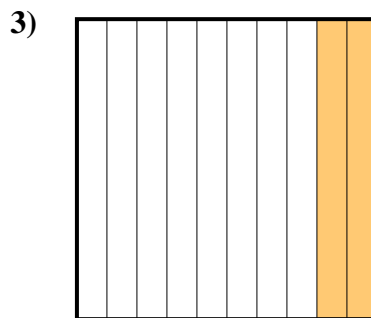
Determina quale lettera rappresenta la quantità colorata del tutto.



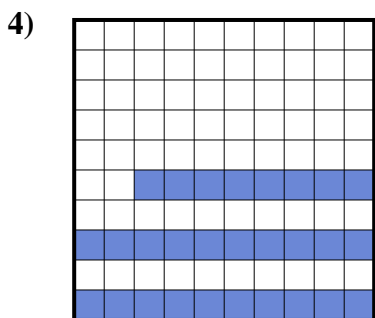
- A. 0,034
- B. 3,4
- C. 340,00
- D. 0,34




- A. 590,00
- B. 0,59
- C. 0,059
- D. 59



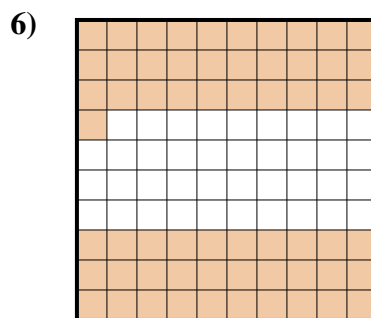
- A. 200,00
- B. 20
- C. 0,2
- D. 0,02



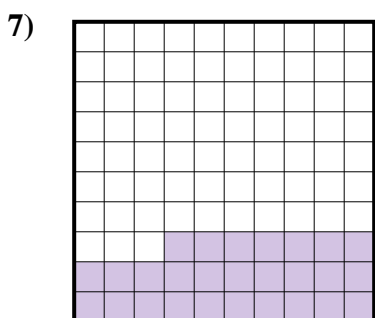
- A. 0,028
- B. 280,00
- C. 0,28
- D. 28




- A. 300,00
- B. 0,3
- C. 0,03
- D. 3



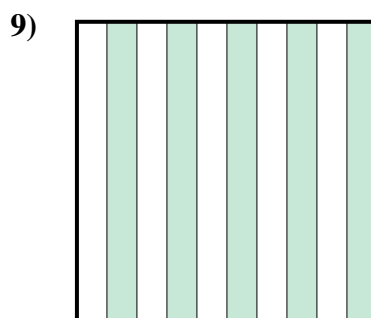
- A. 610,0
- B. 0,61
- C. 61
- D. 6,1



- A. 0,27
- B. 27
- C. 2,7
- D. 270,00



- A. 100,00
- B. 0,1
- C. 0,01
- D. 1



- A. 0,05
- B. 500,0
- C. 500,00
- D. 0,5

Risposte

- 1. **D**
- 2. **B**
- 3. **C**
- 4. **C**
- 5. **B**
- 6. **B**
- 7. **A**
- 8. **B**
- 9. **D**