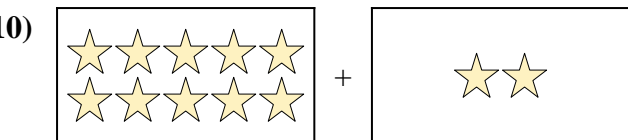
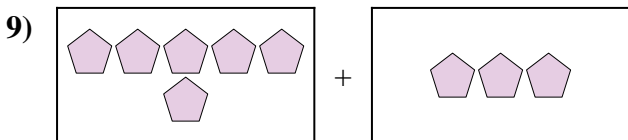
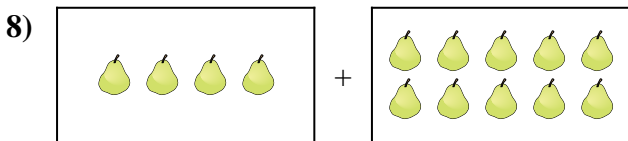
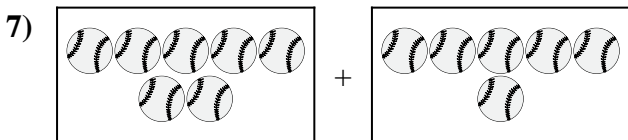

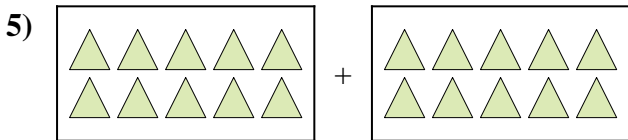
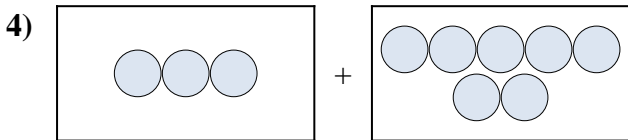
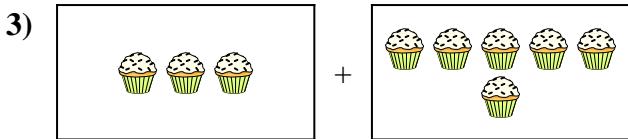
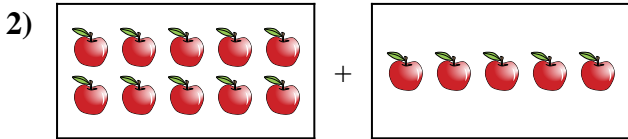
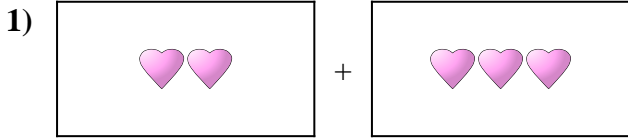




Esprimi il problema visivo come un'equazione con risposta.

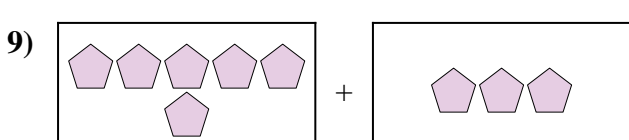
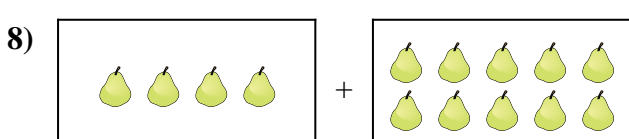
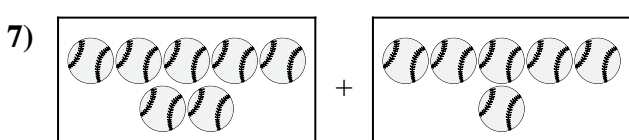

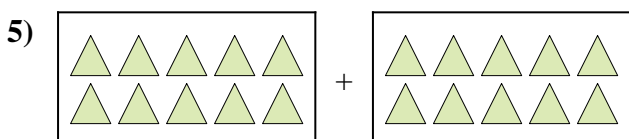
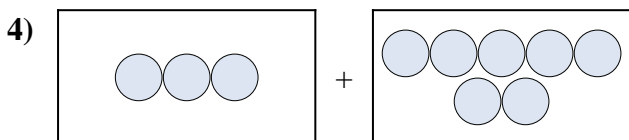

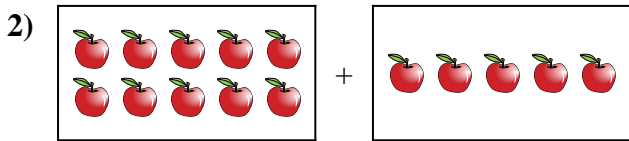
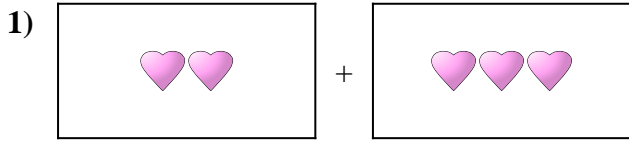
Risposte



1. _____
2. _____
3. _____
4. _____
5. _____
6. _____
7. _____
8. _____
9. _____
10. _____



Esprimi il problema visivo come un'equazione con risposta.



Risposte

1. $2 + 3 = 5$

2. $10 + 5 = 15$

3. $3 + 6 = 9$

4. $3 + 7 = 10$

5. $10 + 10 = 20$

6. $10 + 3 = 13$

7. $7 + 6 = 13$

8. $4 + 10 = 14$

9. $6 + 3 = 9$

10. $10 + 2 = 12$