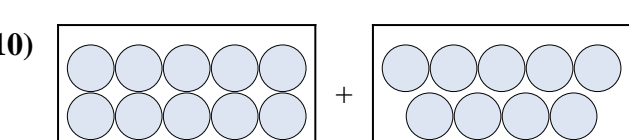
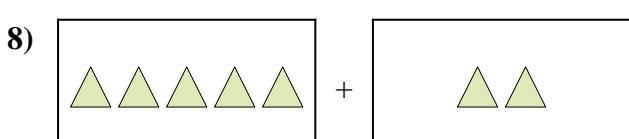
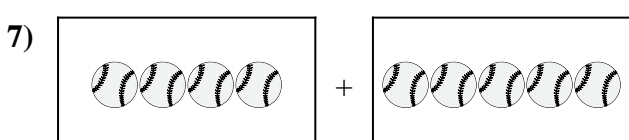
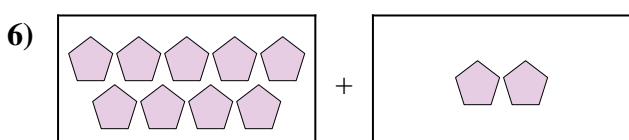
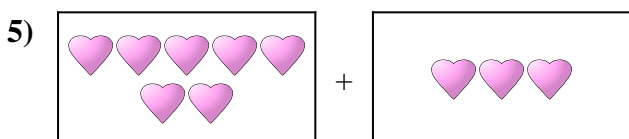
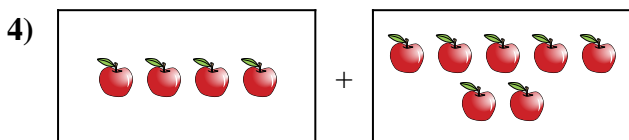
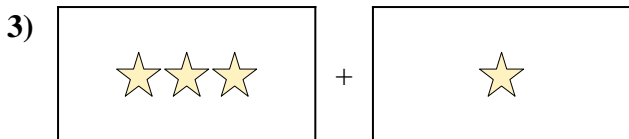
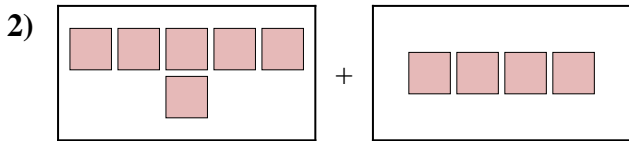
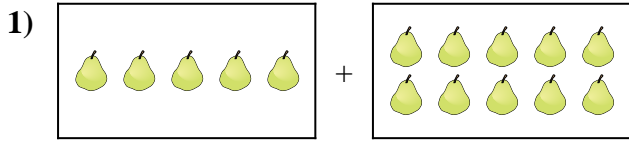




Esprimi il problema visivo come un'equazione con risposta.

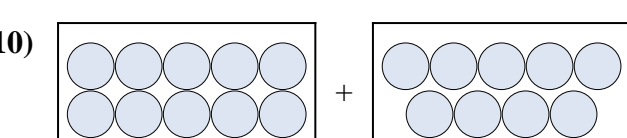
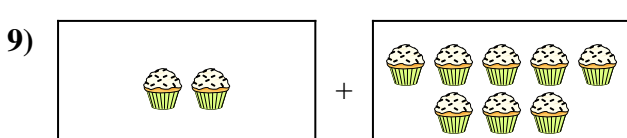
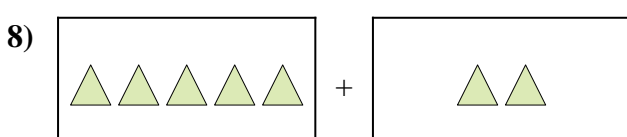
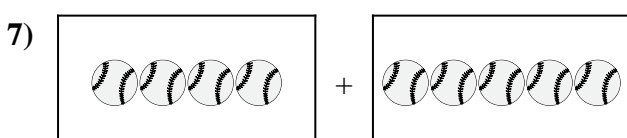
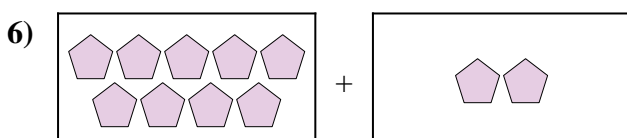
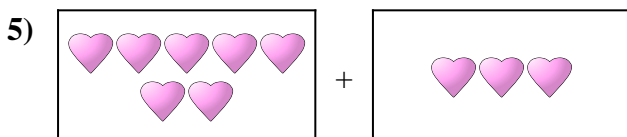
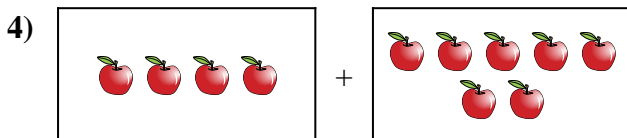
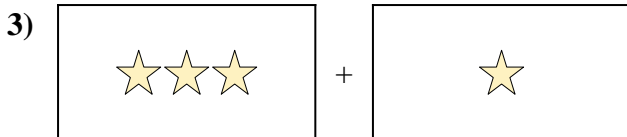
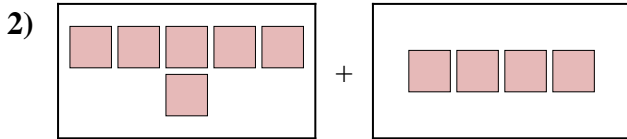
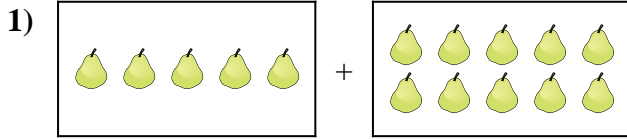


Risposte

1. _____
2. _____
3. _____
4. _____
5. _____
6. _____
7. _____
8. _____
9. _____
10. _____



Esprimi il problema visivo come un'equazione con risposta.



Risposte

1. **5 + 10 = 15**

2. **6 + 4 = 10**

3. **3 + 1 = 4**

4. **4 + 7 = 11**

5. **7 + 3 = 10**

6. **9 + 2 = 11**

7. **4 + 5 = 9**

8. **5 + 2 = 7**

9. **2 + 8 = 10**

10. **10 + 9 = 19**