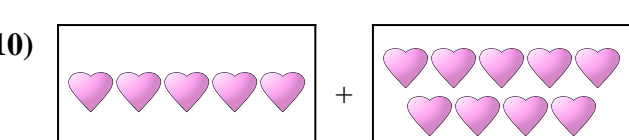
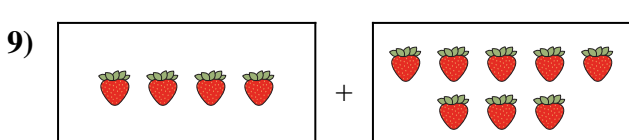
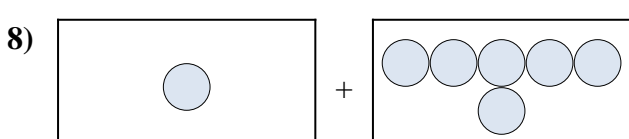
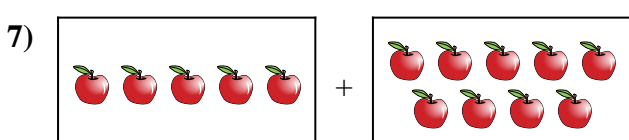

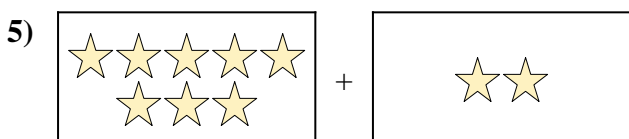
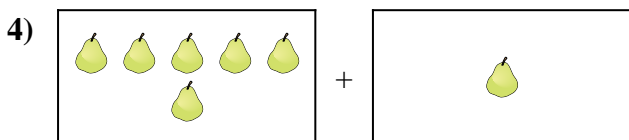
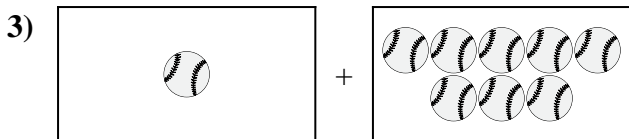
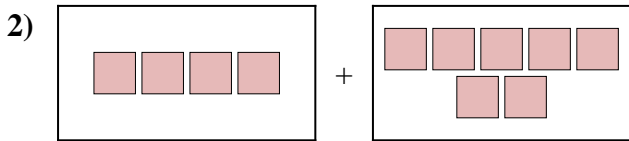
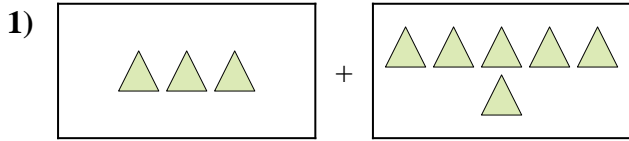




Esprimi il problema visivo come un'equazione con risposta.

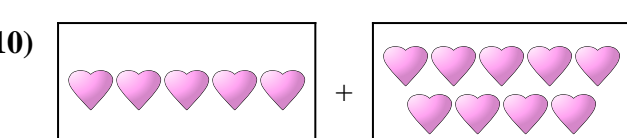

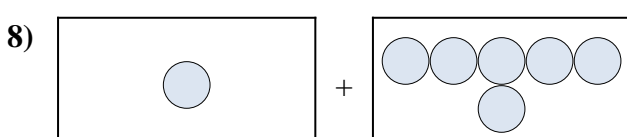
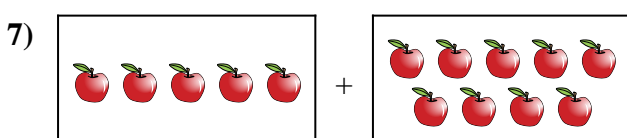

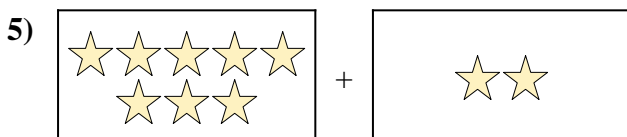
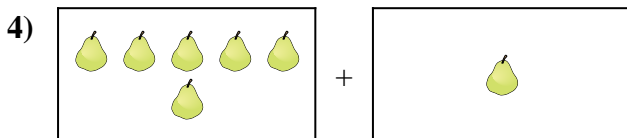
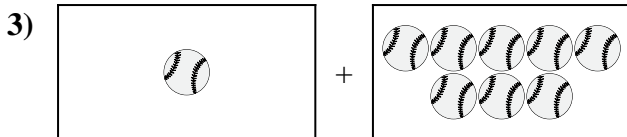
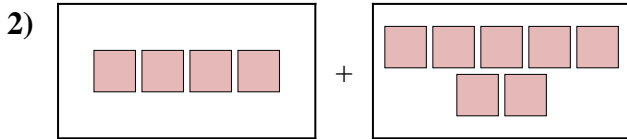
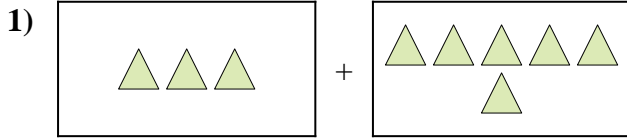


Risposte

1. _____
2. _____
3. _____
4. _____
5. _____
6. _____
7. _____
8. _____
9. _____
10. _____



Esprimi il problema visivo come un'equazione con risposta.



Risposte

1. $3 + 6 = 9$

2. $4 + 7 = 11$

3. $1 + 8 = 9$

4. $6 + 1 = 7$

5. $8 + 2 = 10$

6. $10 + 9 = 19$

7. $5 + 9 = 14$

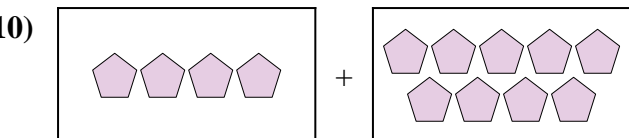
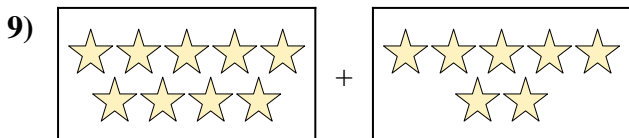
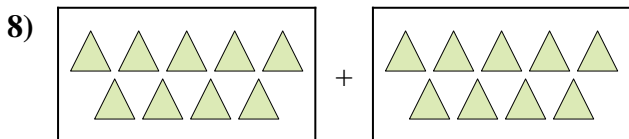

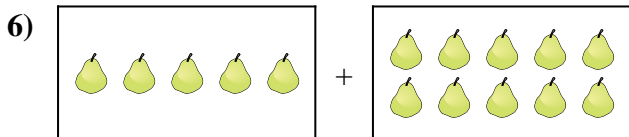
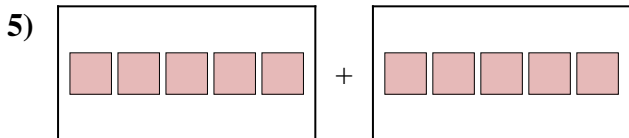
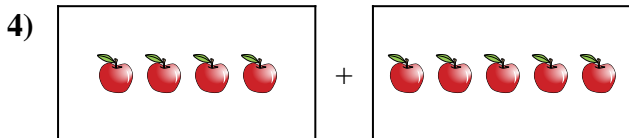

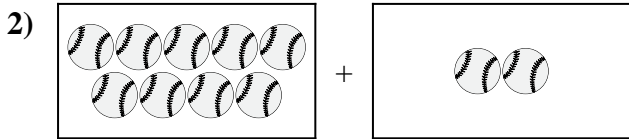
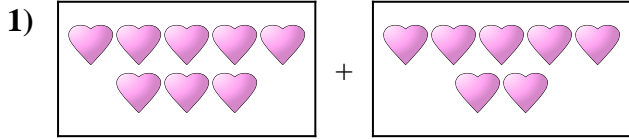
8. $1 + 6 = 7$

9. $4 + 8 = 12$

10. $5 + 9 = 14$



Esprimi il problema visivo come un'equazione con risposta.

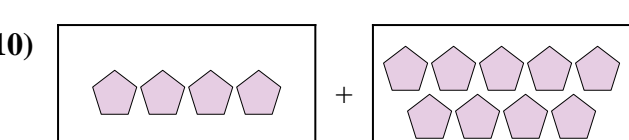
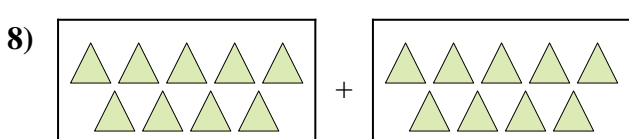

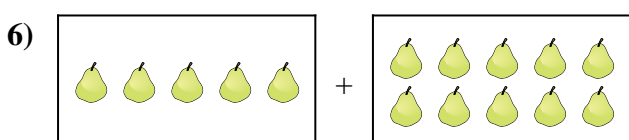
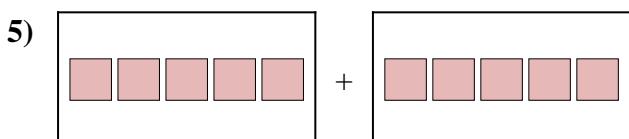
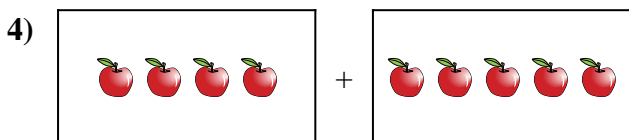

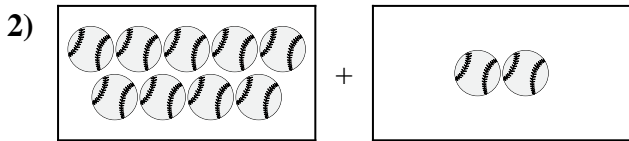



Risposte

1. _____
2. _____
3. _____
4. _____
5. _____
6. _____
7. _____
8. _____
9. _____
10. _____



Esprimi il problema visivo come un'equazione con risposta.



Risposte

1. $8 + 7 = 15$

2. $9 + 2 = 11$

3. $8 + 7 = 15$

4. $4 + 5 = 9$

5. $5 + 5 = 10$

6. $5 + 10 = 15$

7. $5 + 7 = 12$

8. $9 + 9 = 18$

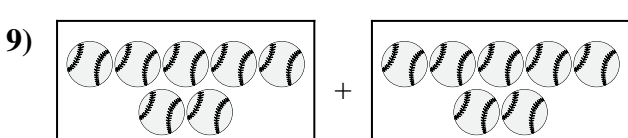
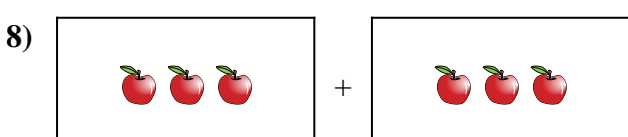
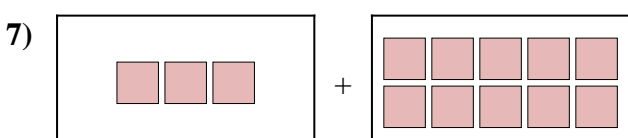
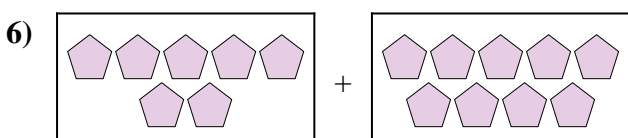
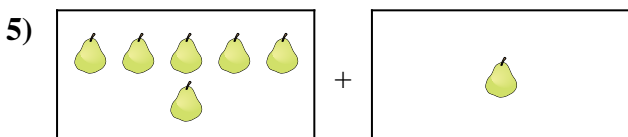
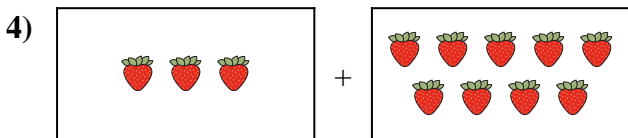
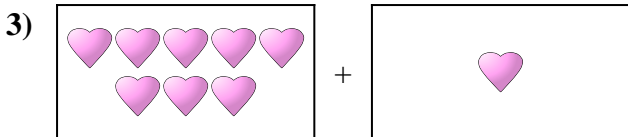
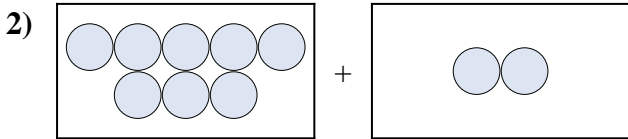

9. $9 + 7 = 16$

10. $4 + 9 = 13$



Esprimi il problema visivo come un'equazione con risposta.

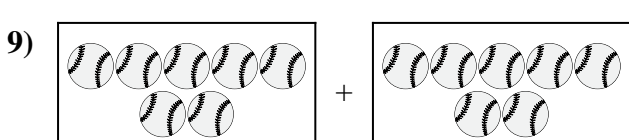
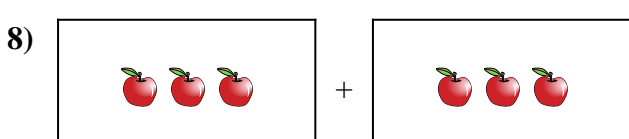
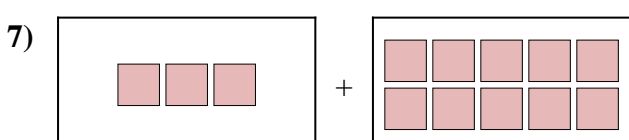
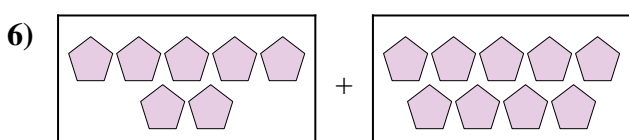
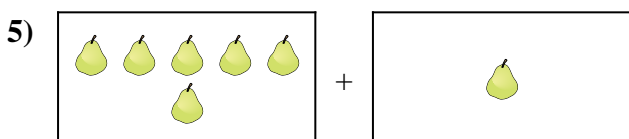
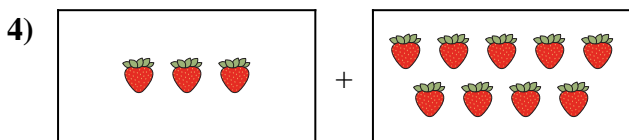
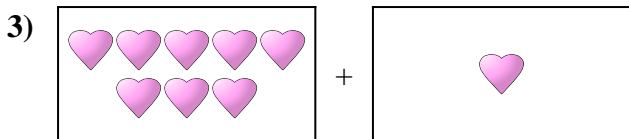
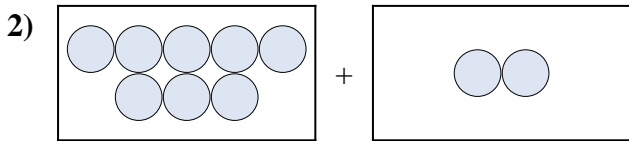

Risposte



1. _____
2. _____
3. _____
4. _____
5. _____
6. _____
7. _____
8. _____
9. _____
10. _____



Esprimi il problema visivo come un'equazione con risposta.



Risposte

1. $9 + 1 = 10$

2. $8 + 2 = 10$

3. $8 + 1 = 9$

4. $3 + 9 = 12$

5. $6 + 1 = 7$

6. $7 + 9 = 16$

7. $3 + 10 = 13$

8. $3 + 3 = 6$

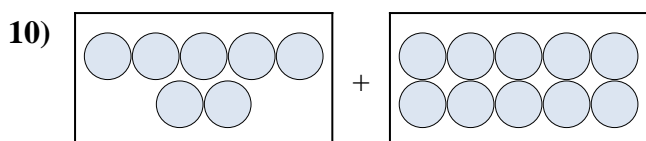

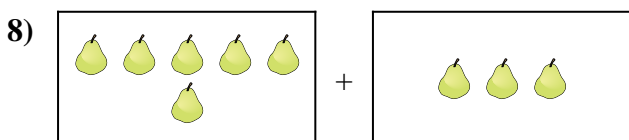

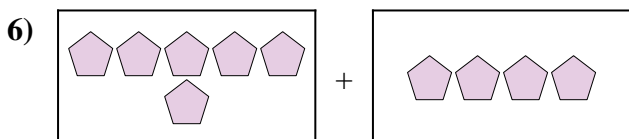
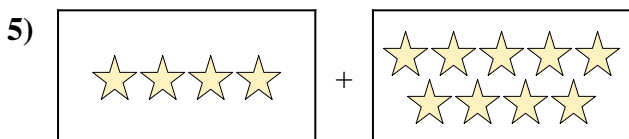
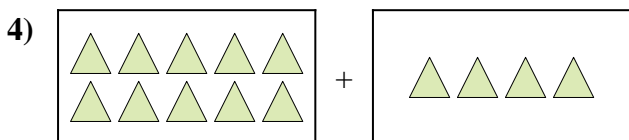
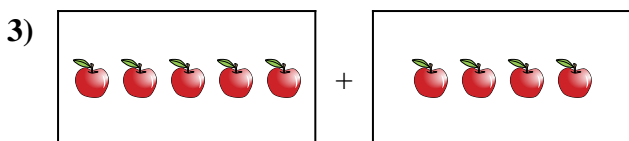
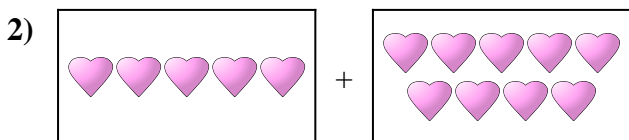
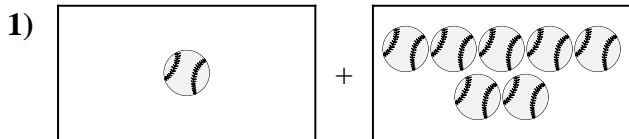
9. $7 + 7 = 14$

10. $5 + 2 = 7$



Esprimi il problema visivo come un'equazione con risposta.

Risposte



1. _____

2. _____

3. _____

4. _____

5. _____

6. _____

7. _____

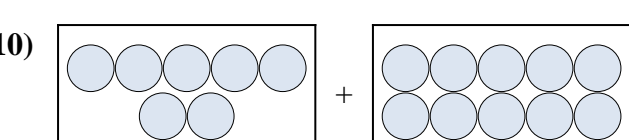

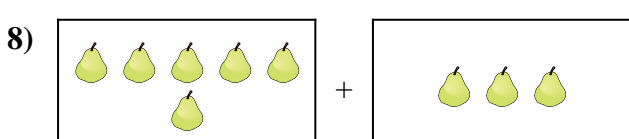

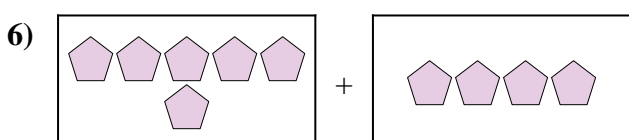
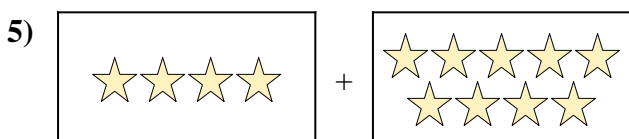
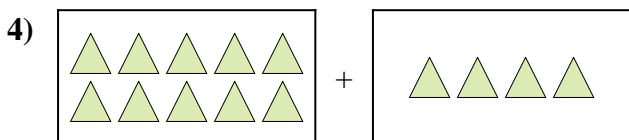
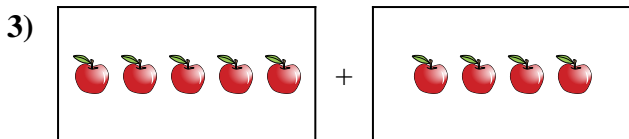
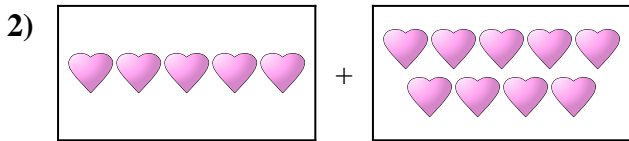
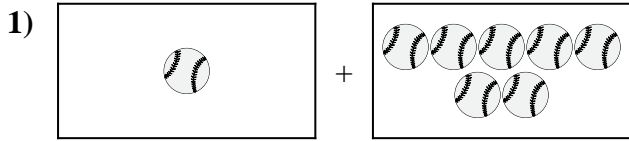
8. _____

9. _____

10. _____



Esprimi il problema visivo come un'equazione con risposta.



Risposte

1. $1 + 7 = 8$

2. $5 + 9 = 14$

3. $5 + 4 = 9$

4. $10 + 4 = 14$

5. $4 + 9 = 13$

6. $6 + 4 = 10$

7. $6 + 10 = 16$

8. $6 + 3 = 9$

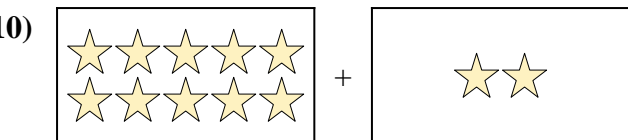
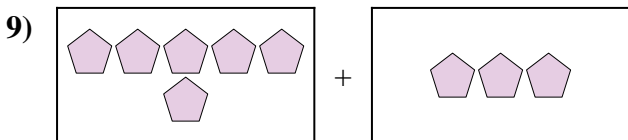
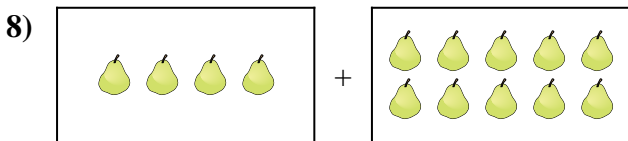
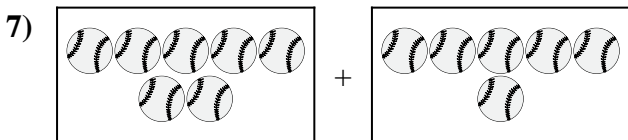

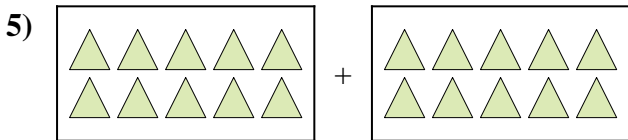
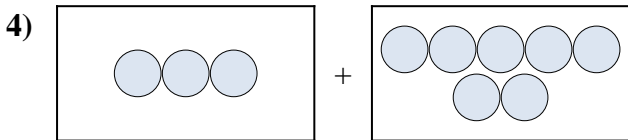
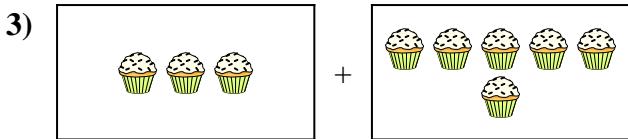
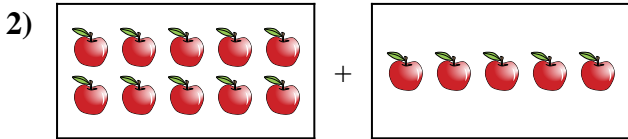
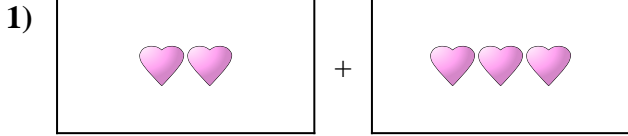
9. $7 + 4 = 11$

10. $7 + 10 = 17$



Esprimi il problema visivo come un'equazione con risposta.

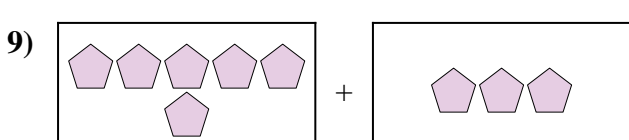
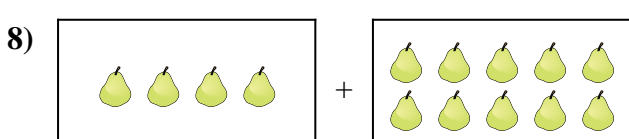
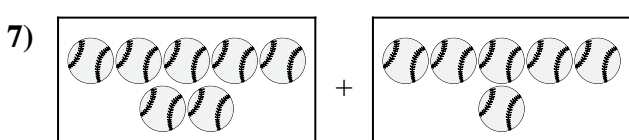

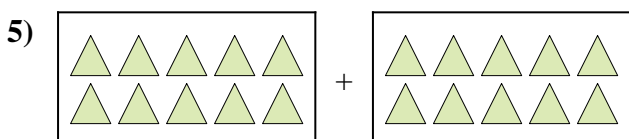
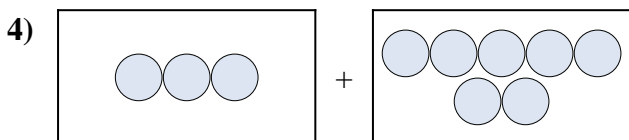

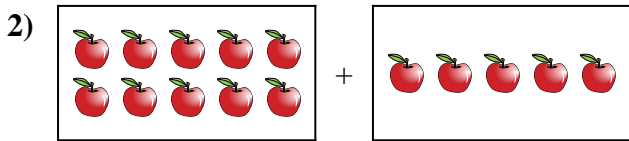
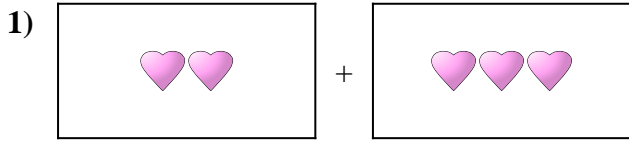
Risposte



1. _____
2. _____
3. _____
4. _____
5. _____
6. _____
7. _____
8. _____
9. _____
10. _____



Esprimi il problema visivo come un'equazione con risposta.



Risposte

1. $2 + 3 = 5$

2. $10 + 5 = 15$

3. $3 + 6 = 9$

4. $3 + 7 = 10$

5. $10 + 10 = 20$

6. $10 + 3 = 13$

7. $7 + 6 = 13$

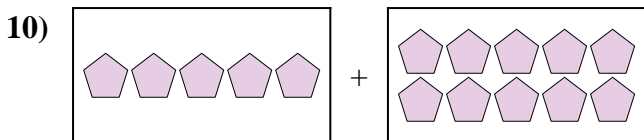
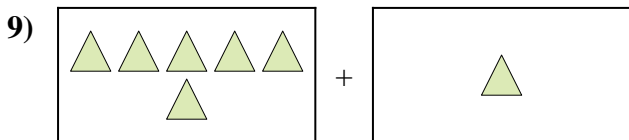
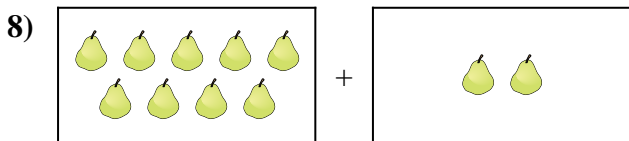
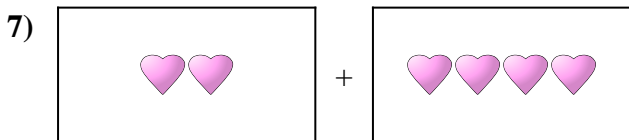
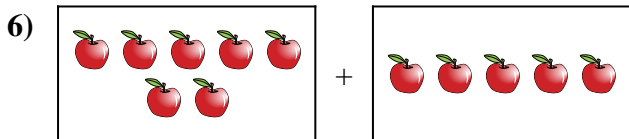
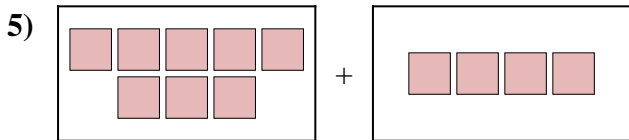
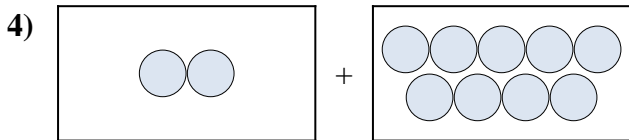
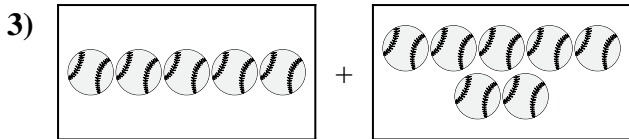

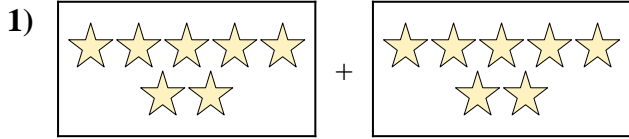
8. $4 + 10 = 14$

9. $6 + 3 = 9$

10. $10 + 2 = 12$



Esprimi il problema visivo come un'equazione con risposta.

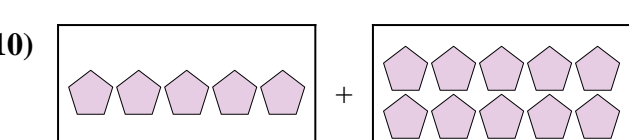
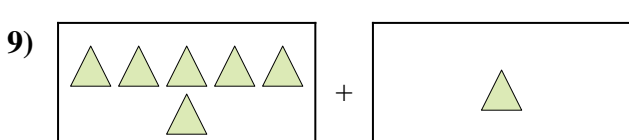
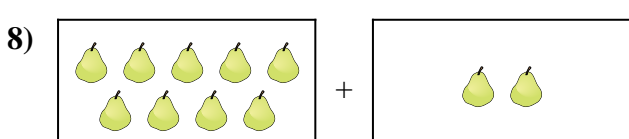
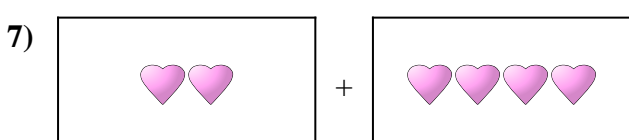
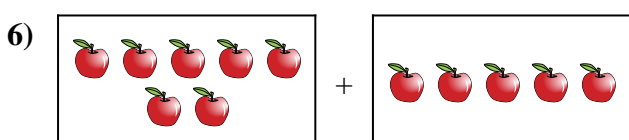
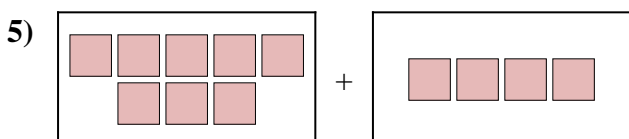
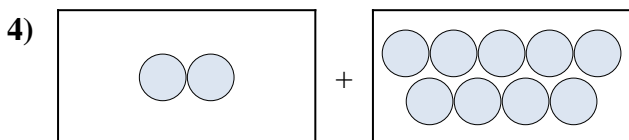
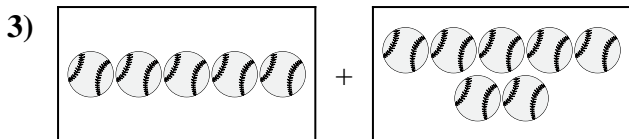

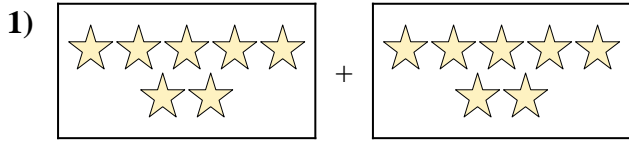


Risposte

1. _____
2. _____
3. _____
4. _____
5. _____
6. _____
7. _____
8. _____
9. _____
10. _____



Esprimi il problema visivo come un'equazione con risposta.



Risposte

1. $7 + 7 = 14$

2. $6 + 1 = 7$

3. $5 + 7 = 12$

4. $2 + 9 = 11$

5. $8 + 4 = 12$

6. $7 + 5 = 12$

7. $2 + 4 = 6$

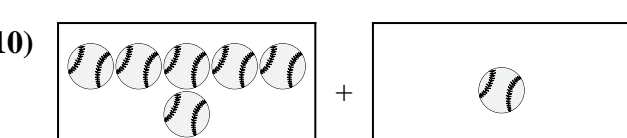
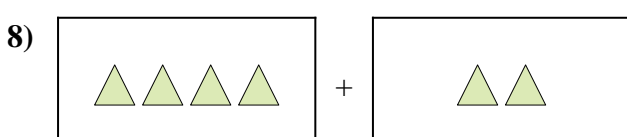
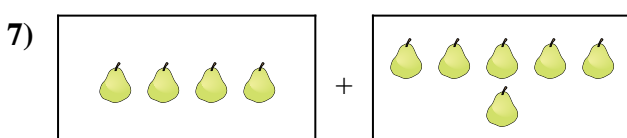
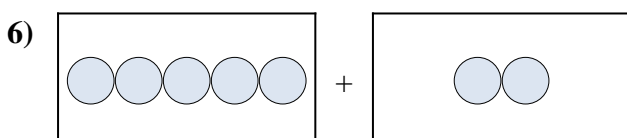
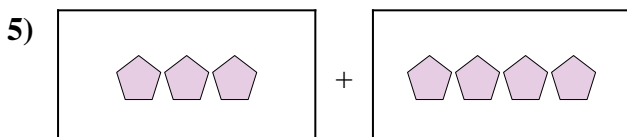
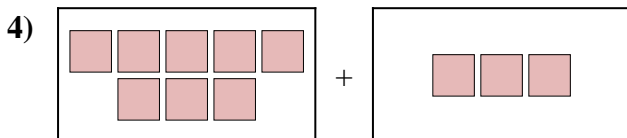

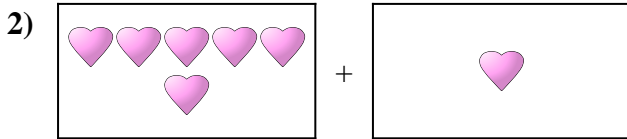
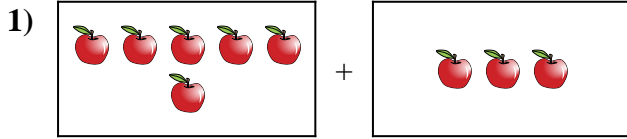
8. $9 + 2 = 11$

9. $6 + 1 = 7$

10. $5 + 10 = 15$



Esprimi il problema visivo come un'equazione con risposta.

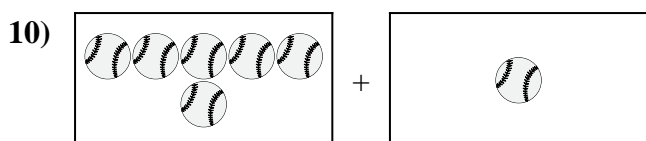
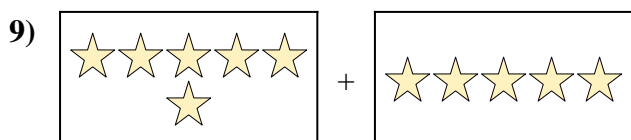
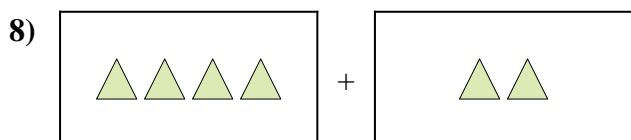
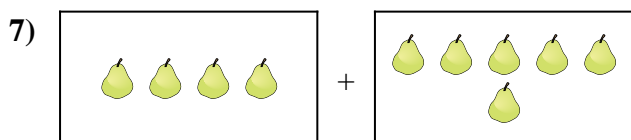
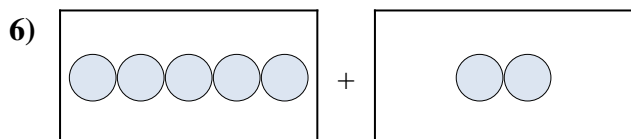
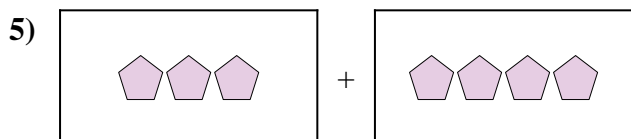
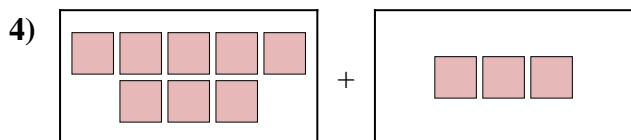

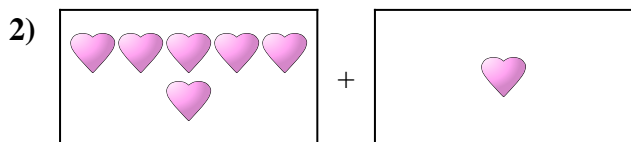
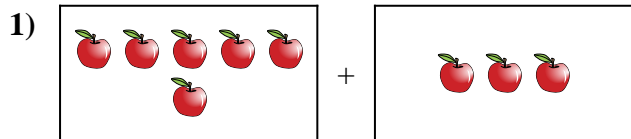


Risposte

1. _____
2. _____
3. _____
4. _____
5. _____
6. _____
7. _____
8. _____
9. _____
10. _____



Esprimi il problema visivo come un'equazione con risposta.



Risposte

1. $6 + 3 = 9$

2. $6 + 1 = 7$

3. $10 + 4 = 14$

4. $8 + 3 = 11$

5. $3 + 4 = 7$

6. $5 + 2 = 7$

7. $4 + 6 = 10$

8. $4 + 2 = 6$


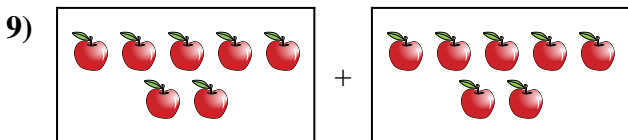
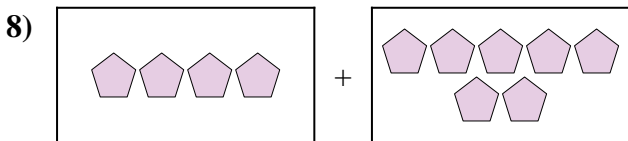
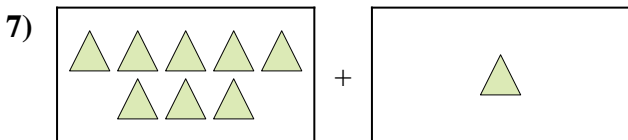
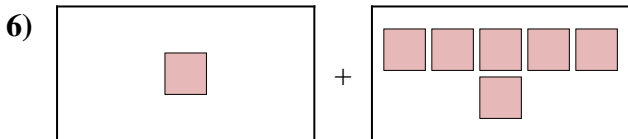
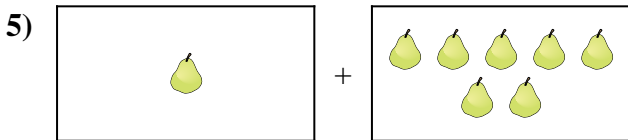
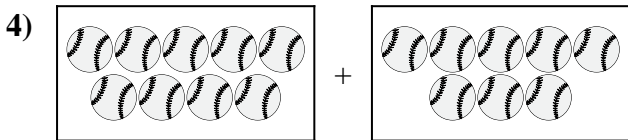
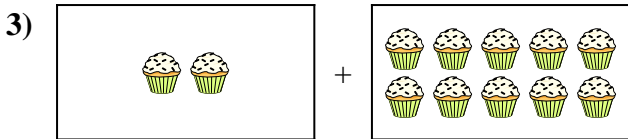
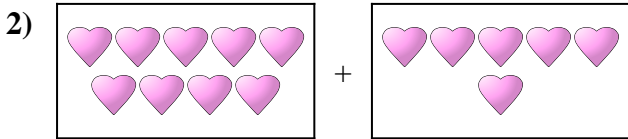
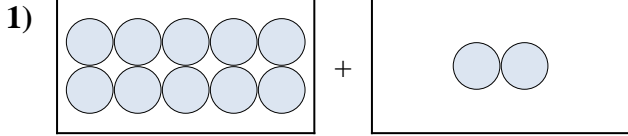
9. $6 + 5 = 11$

10. $6 + 1 = 7$



Esprimi il problema visivo come un'equazione con risposta.


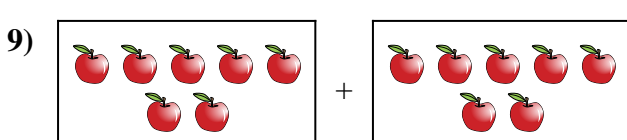
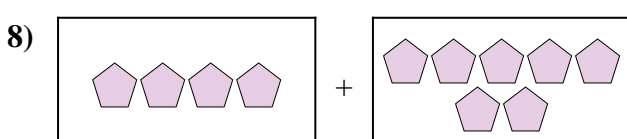
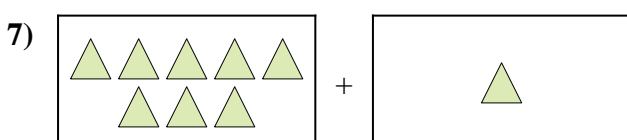
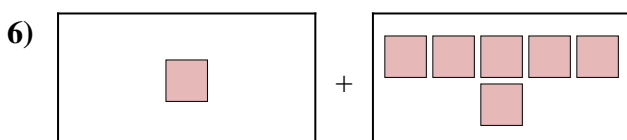
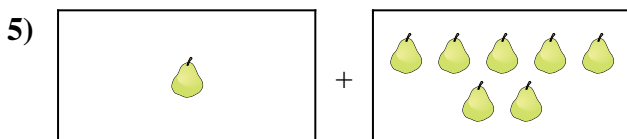
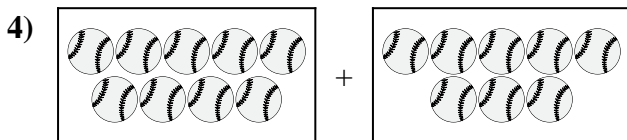
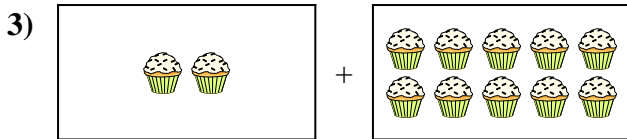
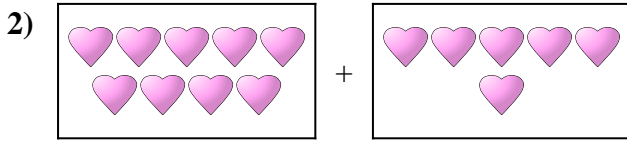
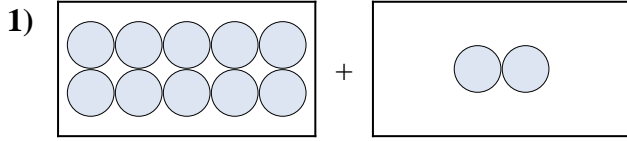
Risposte



1. _____
2. _____
3. _____
4. _____
5. _____
6. _____
7. _____
8. _____
9. _____
10. _____



Esprimi il problema visivo come un'equazione con risposta.



Risposte

1. **10 + 2 = 12**

2. **9 + 6 = 15**

3. **2 + 10 = 12**

4. **9 + 8 = 17**

5. **1 + 7 = 8**

6. **1 + 6 = 7**

7. **8 + 1 = 9**

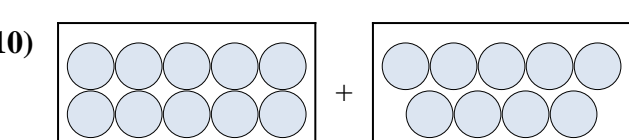
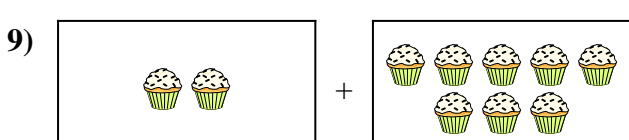
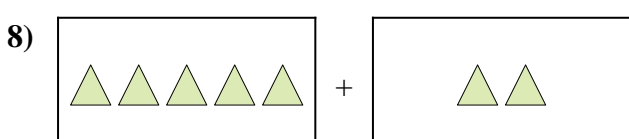
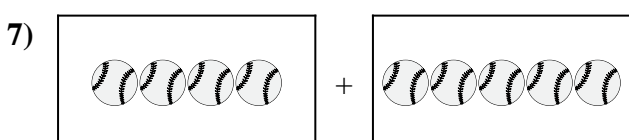
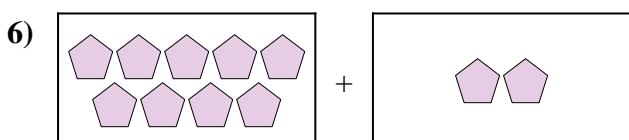
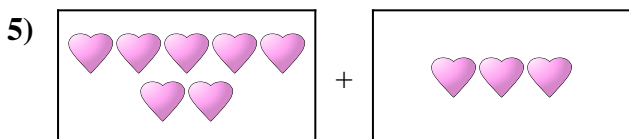
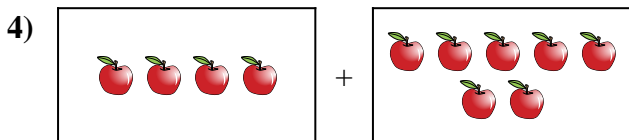
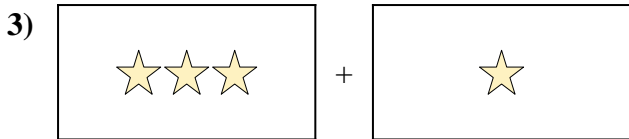
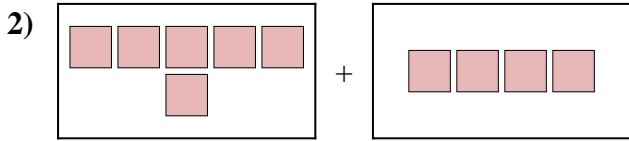
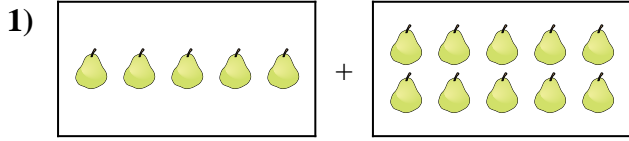
8. **4 + 7 = 11**

9. **7 + 7 = 14**

10. **9 + 7 = 16**



Esprimi il problema visivo come un'equazione con risposta.

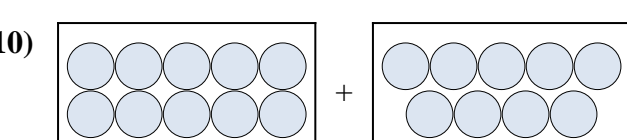
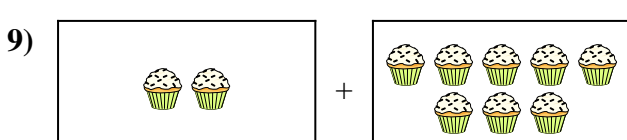
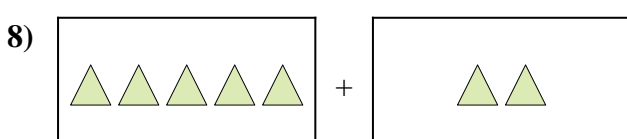
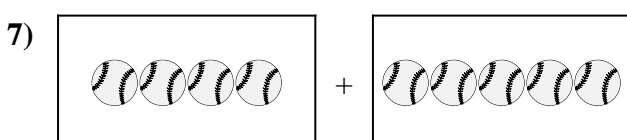
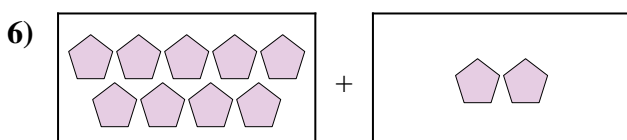
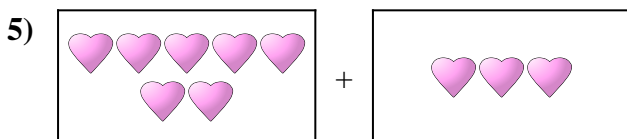
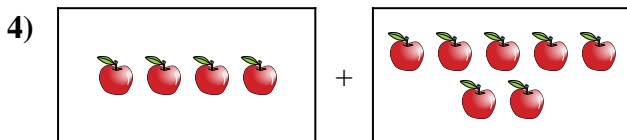
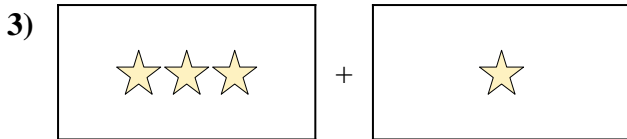
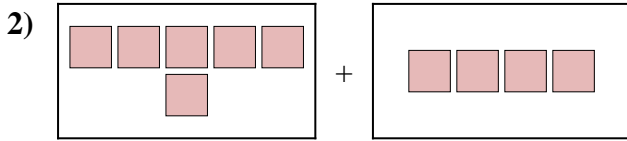
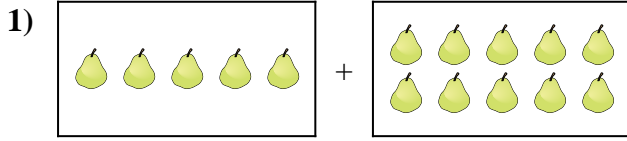


Risposte

1. _____
2. _____
3. _____
4. _____
5. _____
6. _____
7. _____
8. _____
9. _____
10. _____



Esprimi il problema visivo come un'equazione con risposta.



Risposte

1. $5 + 10 = 15$

2. $6 + 4 = 10$

3. $3 + 1 = 4$

4. $4 + 7 = 11$

5. $7 + 3 = 10$

6. $9 + 2 = 11$

7. $4 + 5 = 9$

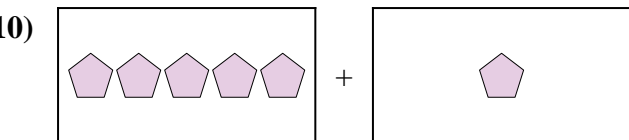
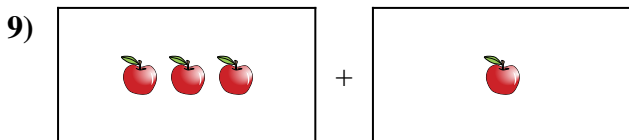
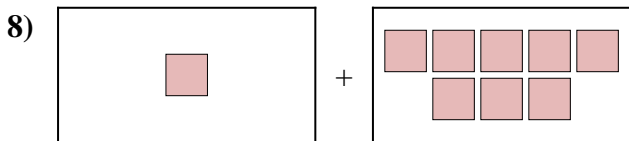
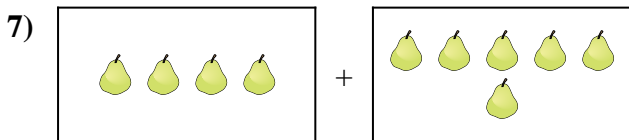

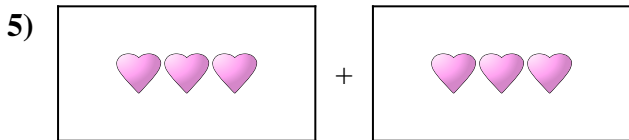
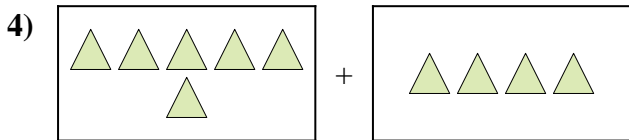
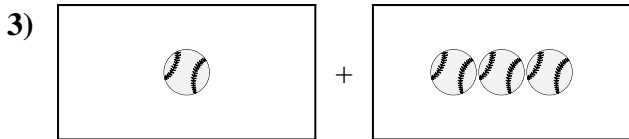
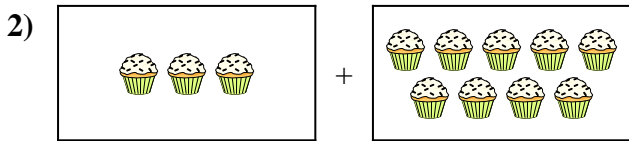
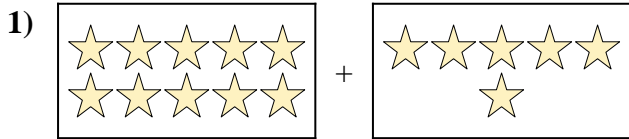
8. $5 + 2 = 7$

9. $2 + 8 = 10$

10. $10 + 9 = 19$



Esprimi il problema visivo come un'equazione con risposta.

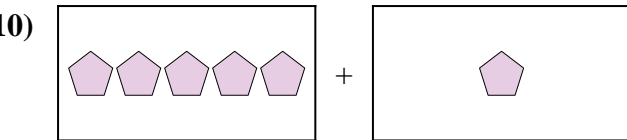
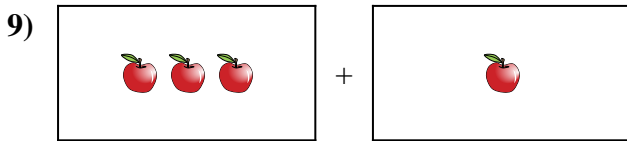
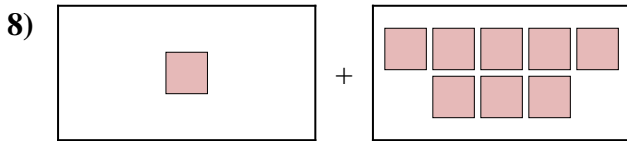
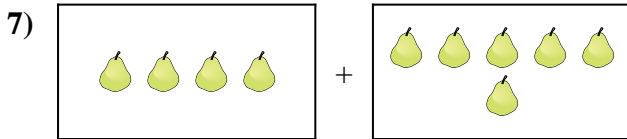

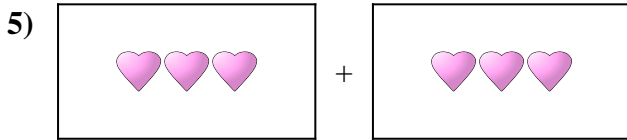
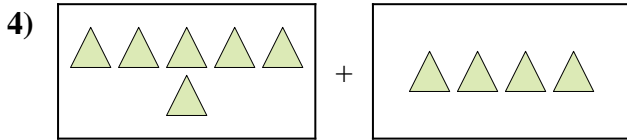
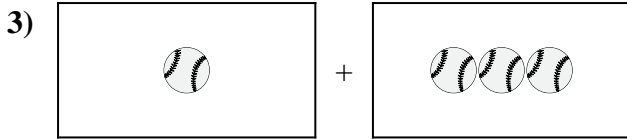

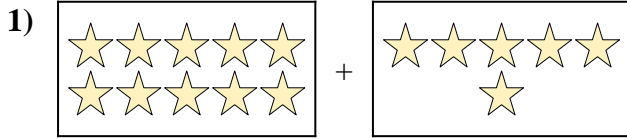


Risposte

1. _____
2. _____
3. _____
4. _____
5. _____
6. _____
7. _____
8. _____
9. _____
10. _____



Esprimi il problema visivo come un'equazione con risposta.



Risposte

1. **10 + 6 = 16**

2. **3 + 9 = 12**

3. **1 + 3 = 4**

4. **6 + 4 = 10**

5. **3 + 3 = 6**

6. **7 + 3 = 10**

7. **4 + 6 = 10**

8. **1 + 8 = 9**

9. **3 + 1 = 4**

10. **5 + 1 = 6**