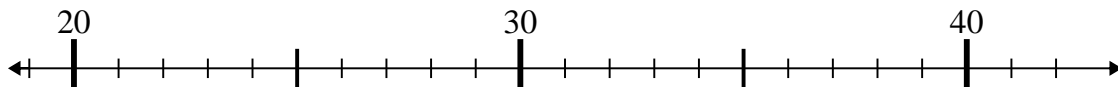


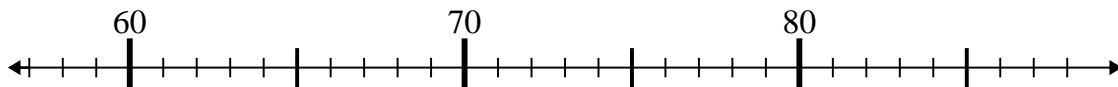


Usa la linea numerata per risolvere il problema.

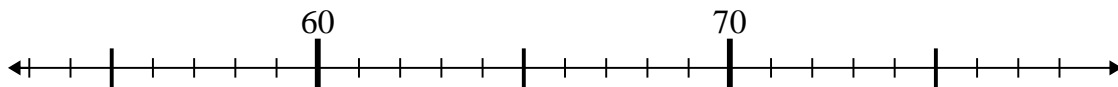
1)  $31 + 4 =$



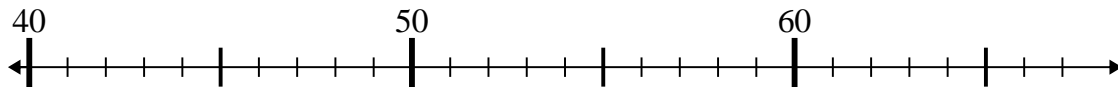
2)  $76 - 18 =$



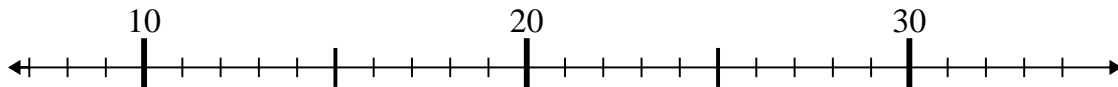
3)  $57 + 5 =$



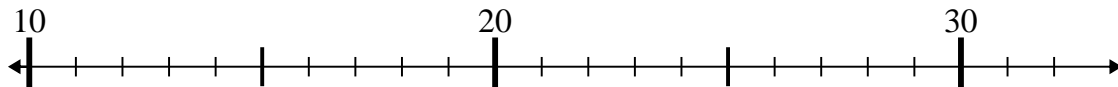
4)  $40 + 8 =$



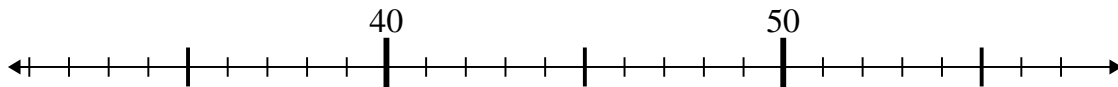
5)  $8 + 20 =$



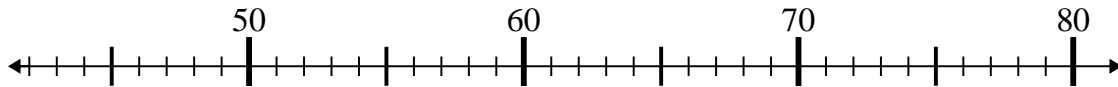
6)  $13 + 4 =$



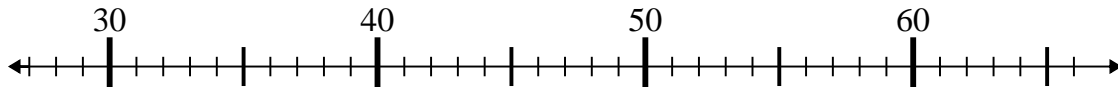
7)  $56 - 18 =$



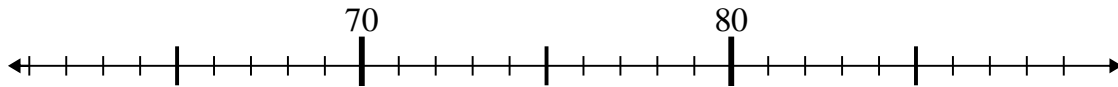
8)  $61 - 13 =$



9)  $40 + 16 =$



10)  $78 + 3 =$

**Risposte**

1. \_\_\_\_\_

2. \_\_\_\_\_

3. \_\_\_\_\_

4. \_\_\_\_\_

5. \_\_\_\_\_

6. \_\_\_\_\_

7. \_\_\_\_\_

8. \_\_\_\_\_

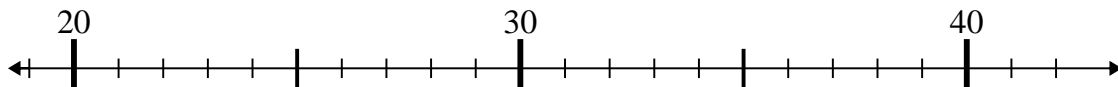
9. \_\_\_\_\_

10. \_\_\_\_\_

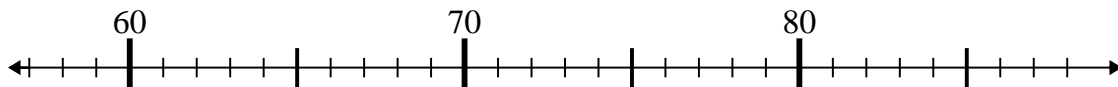


Usa la linea numerata per risolvere il problema.

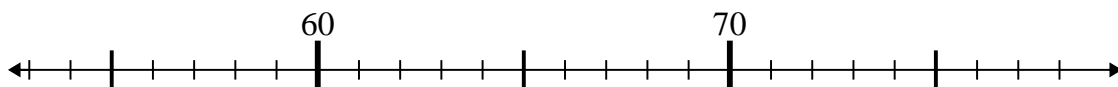
1)  $31 + 4 =$



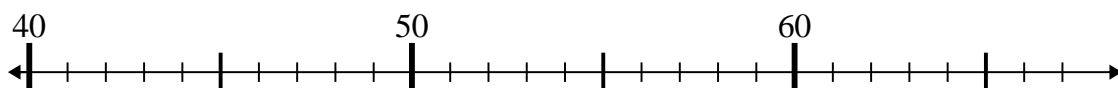
2)  $76 - 18 =$



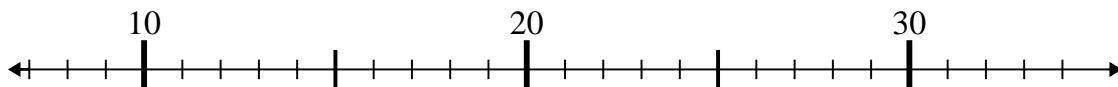
3)  $57 + 5 =$



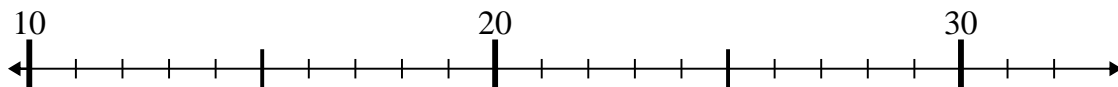
4)  $40 + 8 =$



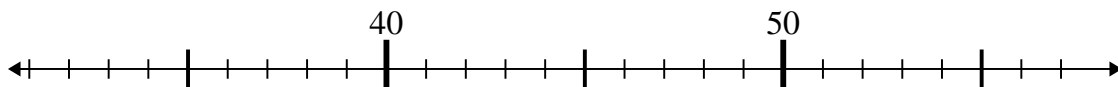
5)  $8 + 20 =$



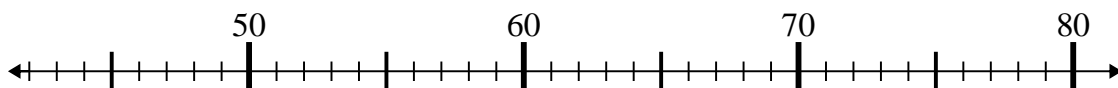
6)  $13 + 4 =$



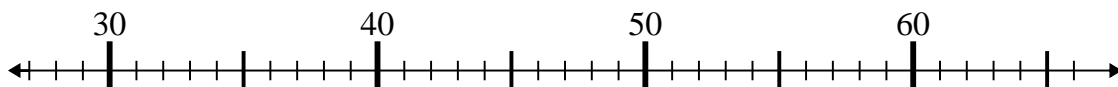
7)  $56 - 18 =$



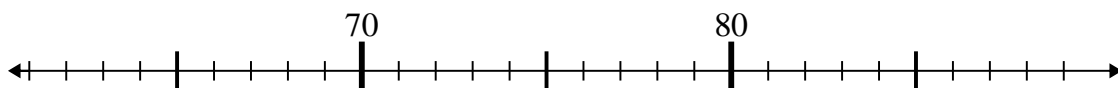
8)  $61 - 13 =$



9)  $40 + 16 =$



10)  $78 + 3 =$



**Risposte**

1. 35

2. 58

3. 62

4. 48

5. 28

6. 17

7. 38

8. 48

9. 56

10. 81