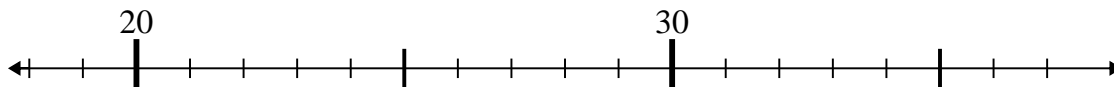


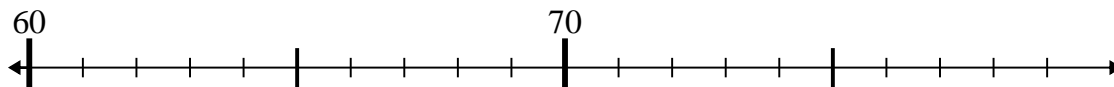


Usa la linea numerata per risolvere il problema.

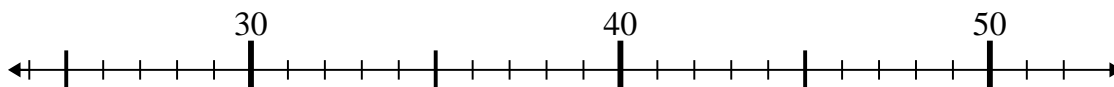
1)  $23 - 4 =$



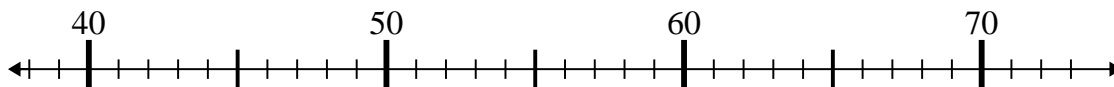
2)  $73 - 6 =$



3)  $44 + 2 =$



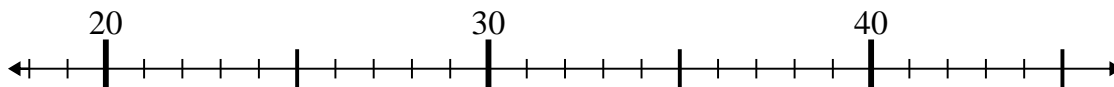
4)  $42 + 1 =$



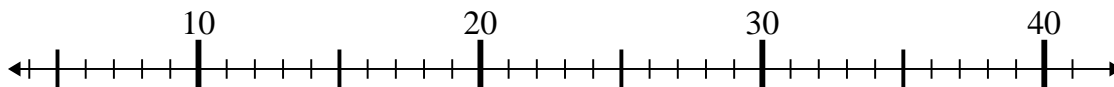
5)  $40 + 13 =$



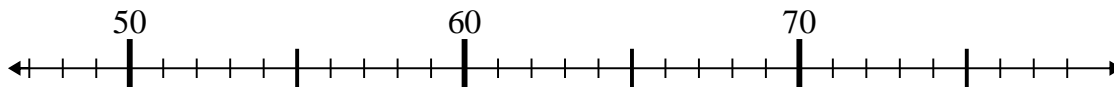
6)  $26 + 0 =$



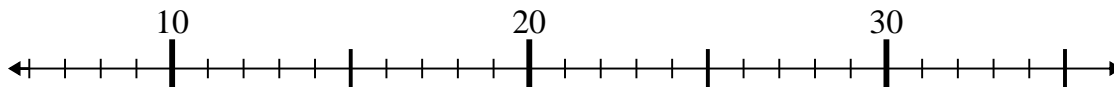
7)  $36 - 27 =$



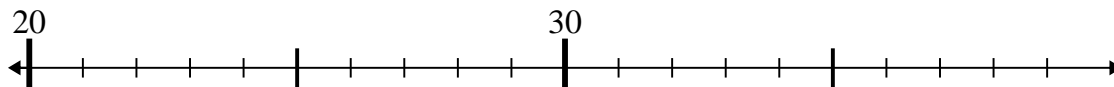
8)  $54 - 5 =$



9)  $10 + 1 =$



10)  $24 + 1 =$



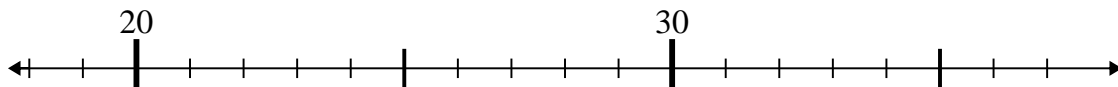
**Risposte**

- 1. \_\_\_\_\_
- 2. \_\_\_\_\_
- 3. \_\_\_\_\_
- 4. \_\_\_\_\_
- 5. \_\_\_\_\_
- 6. \_\_\_\_\_
- 7. \_\_\_\_\_
- 8. \_\_\_\_\_
- 9. \_\_\_\_\_
- 10. \_\_\_\_\_

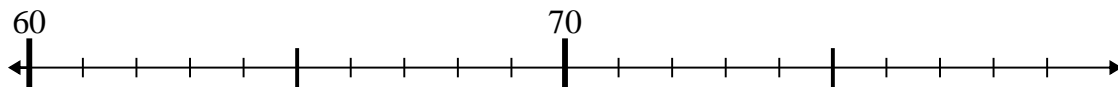


Usa la linea numerata per risolvere il problema.

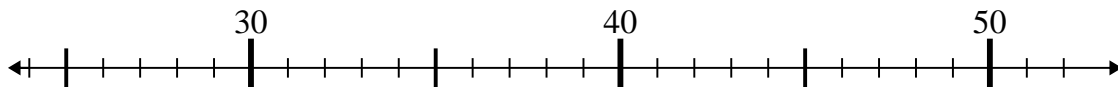
1)  $23 - 4 =$



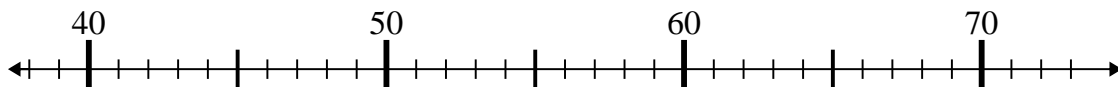
2)  $73 - 6 =$



3)  $44 + 2 =$



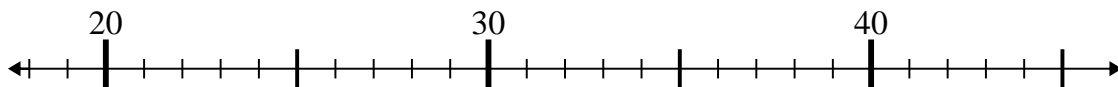
4)  $42 + 1 =$



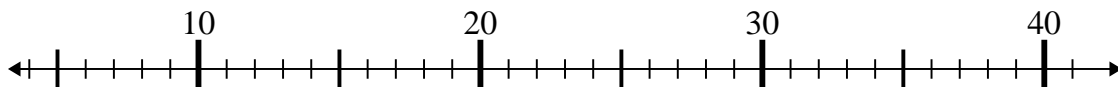
5)  $40 + 13 =$



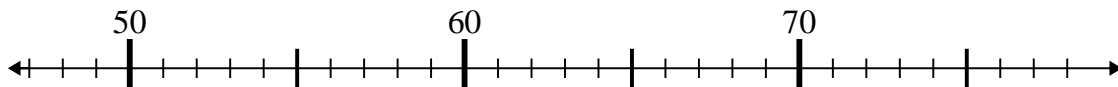
6)  $26 + 0 =$



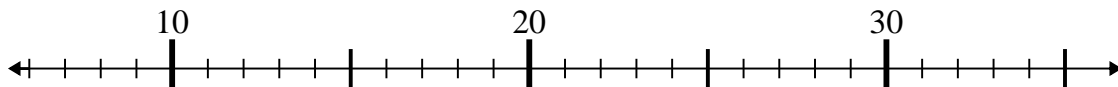
7)  $36 - 27 =$



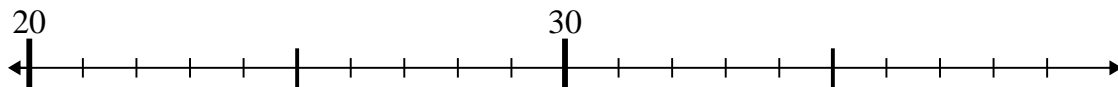
8)  $54 - 5 =$



9)  $10 + 1 =$



10)  $24 + 1 =$



**Risposte**

1. 19

2. 67

3. 46

4. 43

5. 53

6. 26

7. 9

8. 49

9. 11

10. 25