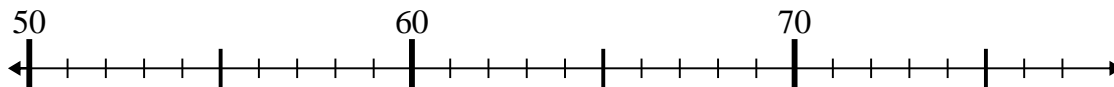


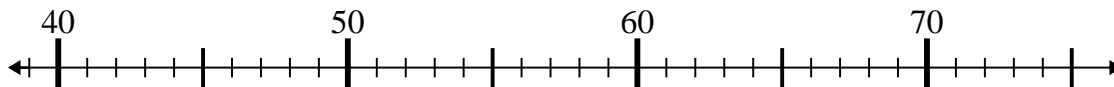


Usa la linea numerata per risolvere il problema.

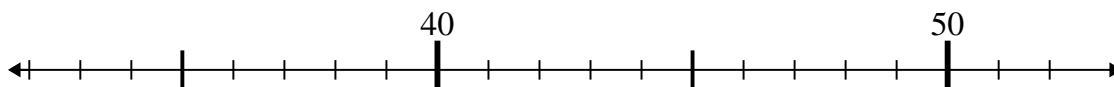
1) $70 - 16 =$



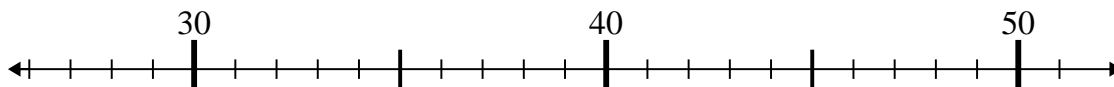
2) $39 + 6 =$



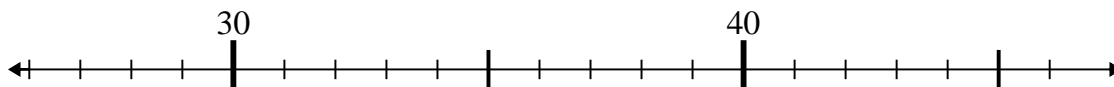
3) $46 + 3 =$



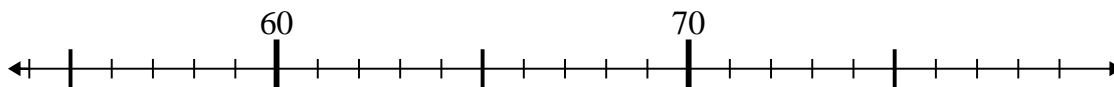
4) $31 + 8 =$



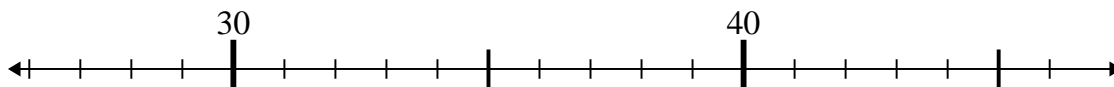
5) $36 - 1 =$



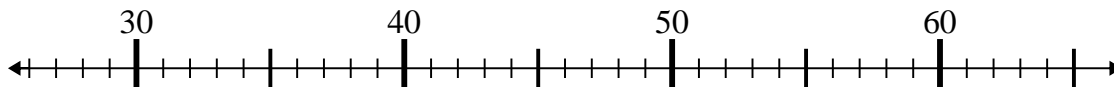
6) $70 + 8 =$



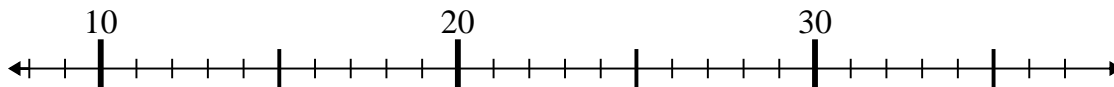
7) $46 - 1 =$



8) $27 + 8 =$



9) $18 + 1 =$



10) $25 + 3 =$



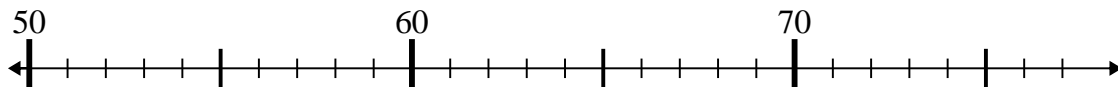
Risposte

1. _____
2. _____
3. _____
4. _____
5. _____
6. _____
7. _____
8. _____
9. _____
10. _____

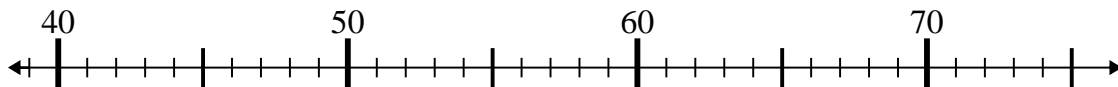


Usa la linea numerata per risolvere il problema.

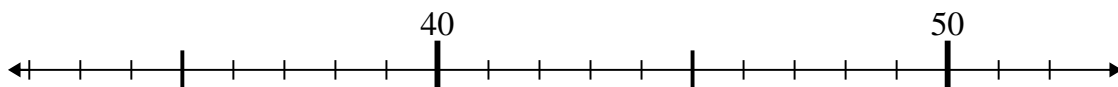
1) $70 - 16 =$



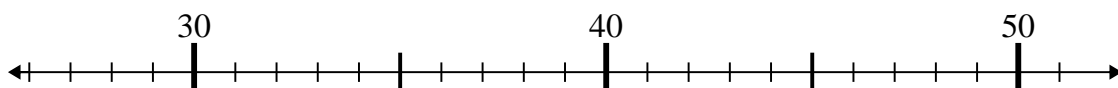
2) $39 + 6 =$



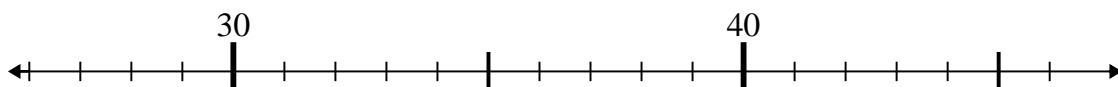
3) $46 + 3 =$



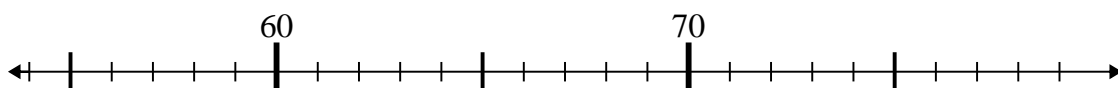
4) $31 + 8 =$



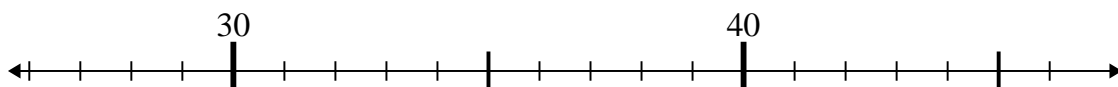
5) $36 - 1 =$



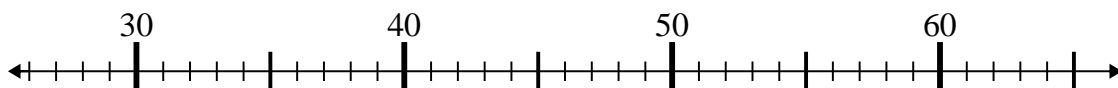
6) $70 + 8 =$



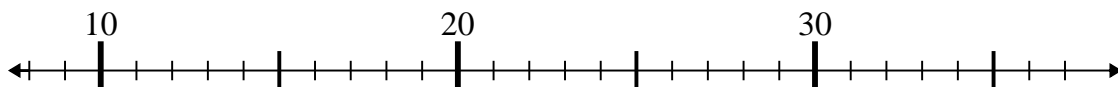
7) $46 - 1 =$



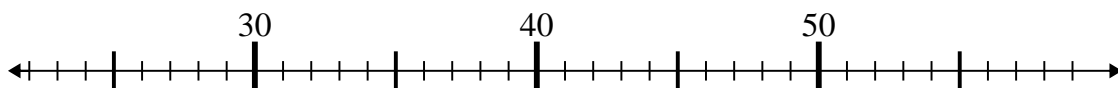
8) $27 + 8 =$



9) $18 + 1 =$



10) $25 + 3 =$



Risposte

1. 54

2. 45

3. 49

4. 39

5. 35

6. 78

7. 45

8. 35

9. 19

10. 28