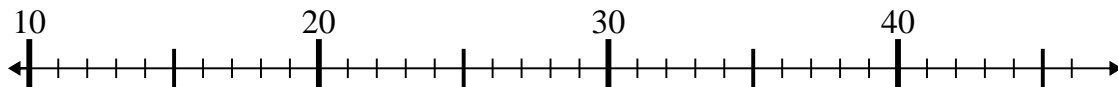


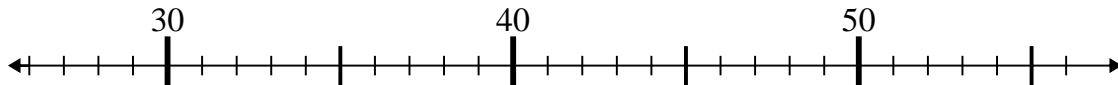


Usa la linea numerata per risolvere il problema.

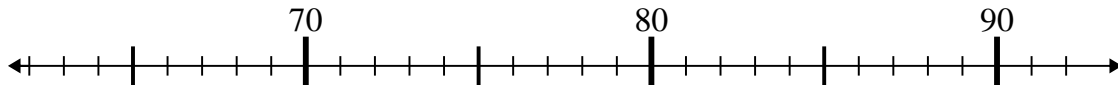
1) $24 - 11 =$



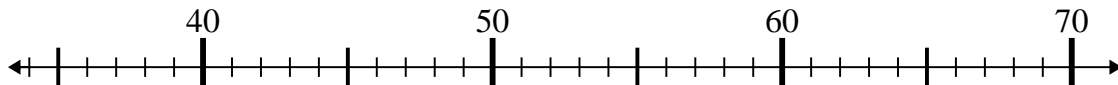
2) $29 + 6 =$



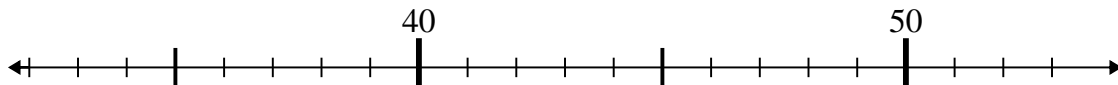
3) $72 + 7 =$



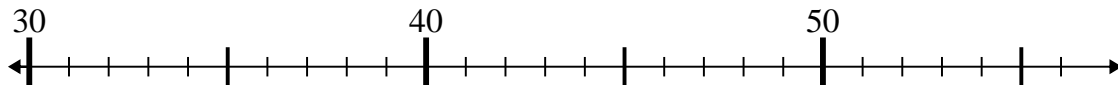
4) $41 + 16 =$



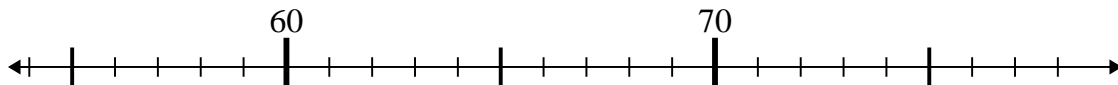
5) $51 - 3 =$



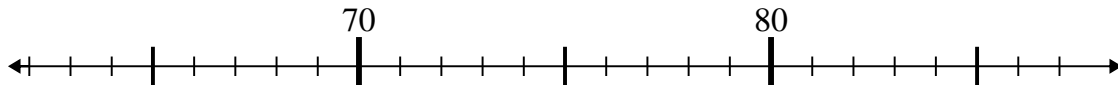
6) $35 - 0 =$



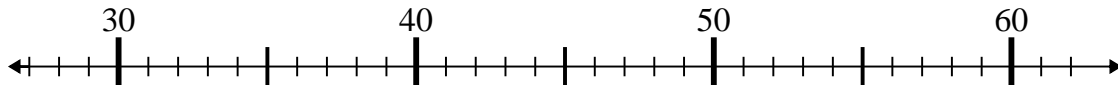
7) $65 + 10 =$



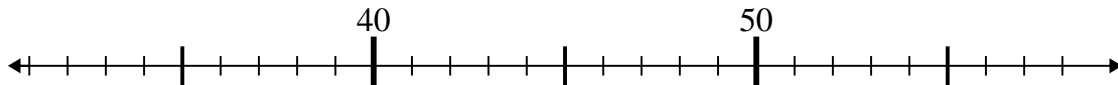
8) $65 + 14 =$



9) $57 - 16 =$



10) $58 - 19 =$



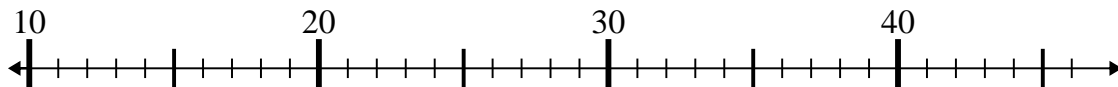
Risposte

1. _____
2. _____
3. _____
4. _____
5. _____
6. _____
7. _____
8. _____
9. _____
10. _____

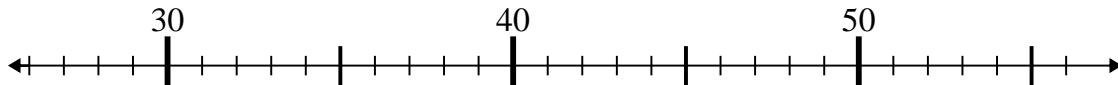


Usa la linea numerata per risolvere il problema.

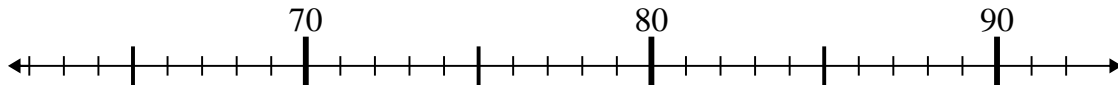
1) $24 - 11 =$



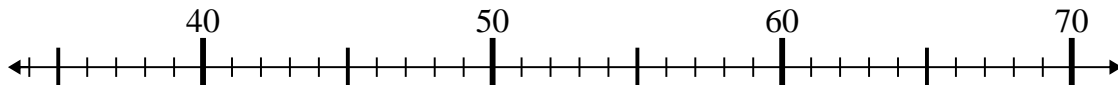
2) $29 + 6 =$



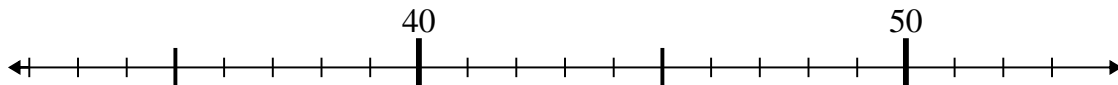
3) $72 + 7 =$



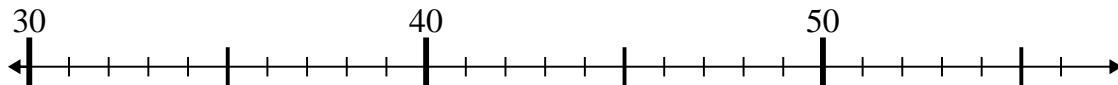
4) $41 + 16 =$



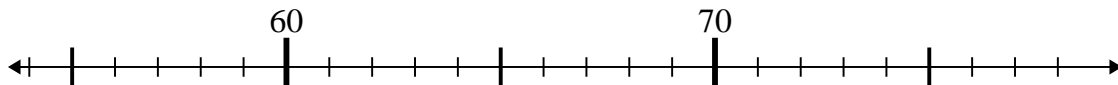
5) $51 - 3 =$



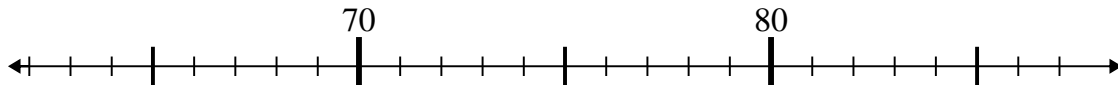
6) $35 - 0 =$



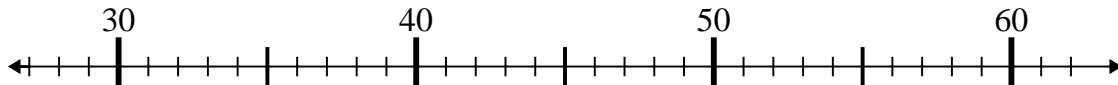
7) $65 + 10 =$



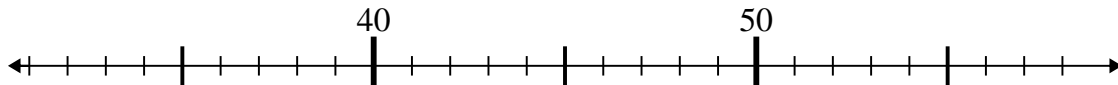
8) $65 + 14 =$



9) $57 - 16 =$



10) $58 - 19 =$



Risposte

1. **13**

2. **35**

3. **79**

4. **57**

5. **48**

6. **35**

7. **75**

8. **79**

9. **41**

10. **39**