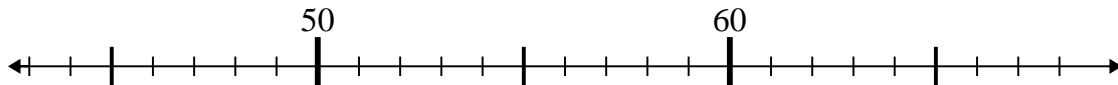


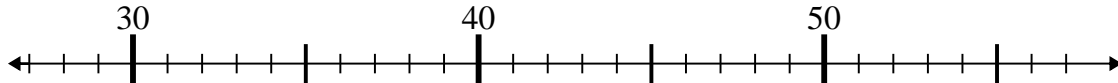


Usa la linea numerata per risolvere il problema.

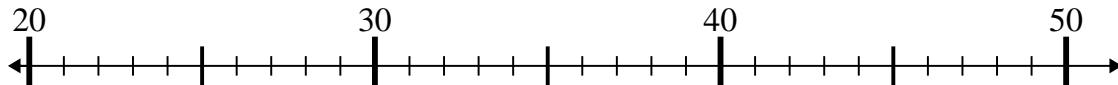
1) $59 - 4 =$



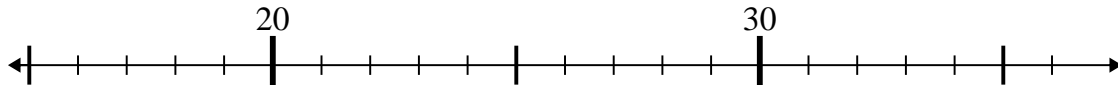
2) $57 - 0 =$



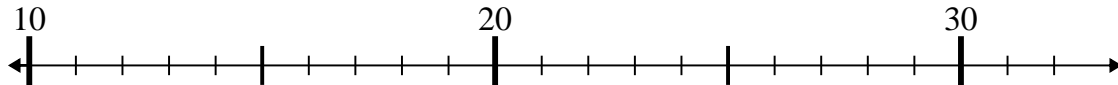
3) $33 - 8 =$



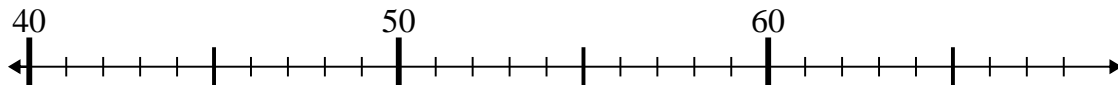
4) $36 - 3 =$



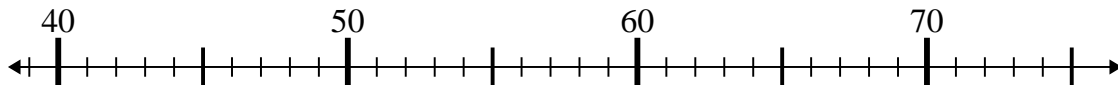
5) $25 - 7 =$



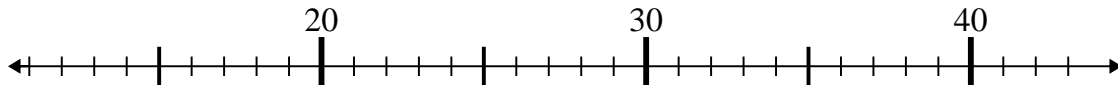
6) $50 + 4 =$



7) $65 - 7 =$



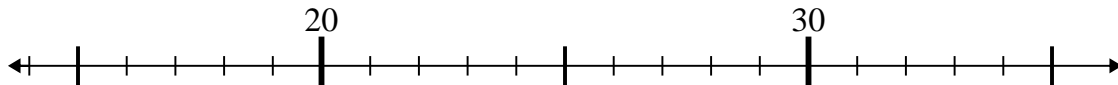
8) $40 - 19 =$



9) $46 + 2 =$



10) $35 - 1 =$

**Risposte**

1. _____

2. _____

3. _____

4. _____

5. _____

6. _____

7. _____

8. _____

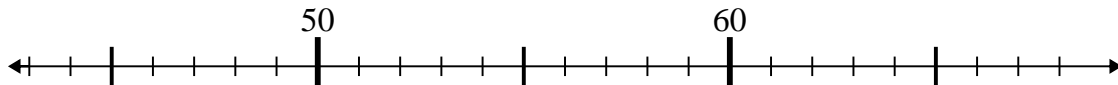
9. _____

10. _____

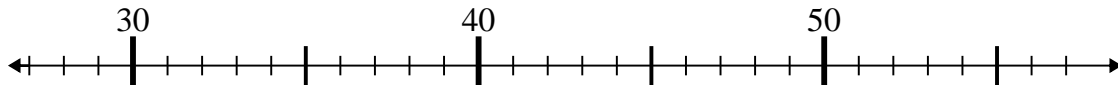


Usa la linea numerata per risolvere il problema.

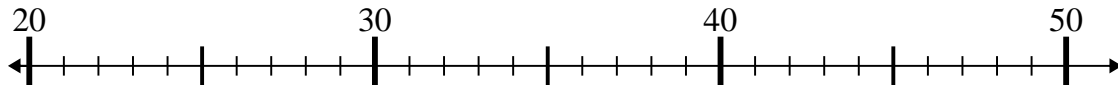
1) $59 - 4 =$



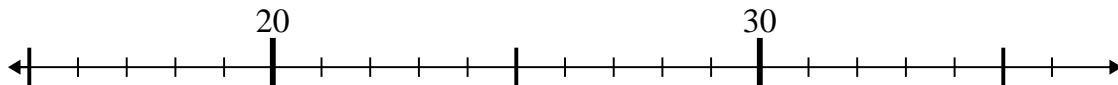
2) $57 - 0 =$



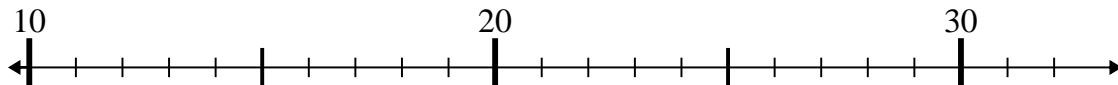
3) $33 - 8 =$



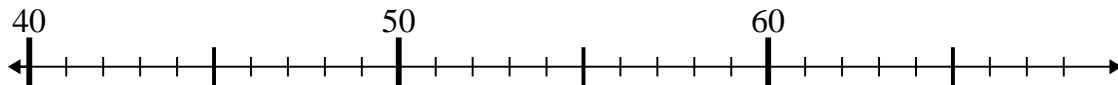
4) $36 - 3 =$



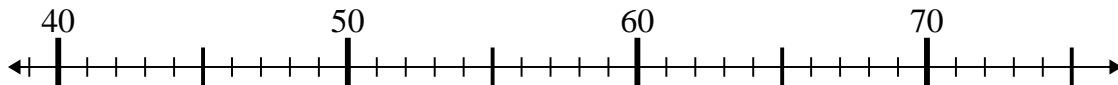
5) $25 - 7 =$



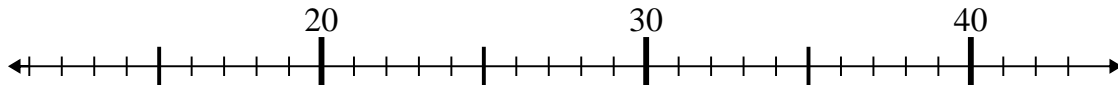
6) $50 + 4 =$



7) $65 - 7 =$



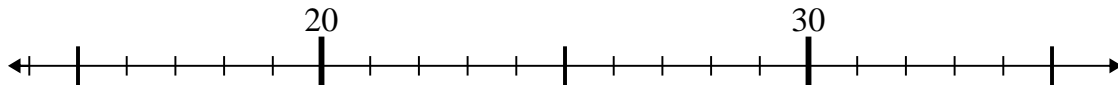
8) $40 - 19 =$



9) $46 + 2 =$



10) $35 - 1 =$



Risposte

1. 55

2. 57

3. 25

4. 33

5. 18

6. 54

7. 58

8. 21

9. 48

10. 34