



Determina quale lettera rappresenta graficamente la somma numerica.

1)  $\frac{2}{3} + \frac{1}{3}$

3)  $\frac{5}{8} + \frac{4}{8}$

5)  $\frac{8}{10} + \frac{5}{10}$

7)  $\frac{5}{8} + \frac{6}{8}$

9)  $\frac{7}{10} + \frac{3}{10}$

11)  $\frac{4}{6} + \frac{5}{6}$

13)  $\frac{4}{10} + \frac{5}{10}$

2)  $\frac{2}{5} + \frac{1}{5}$

4)  $\frac{6}{8} + \frac{4}{8}$

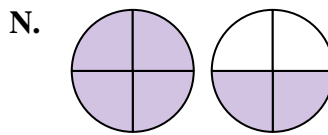
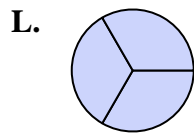
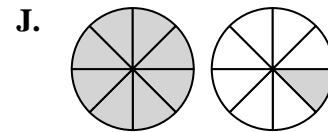
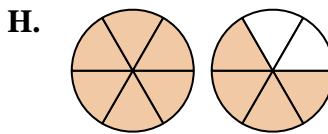
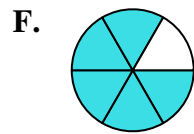
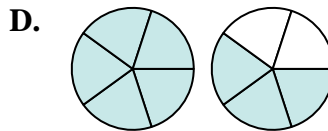
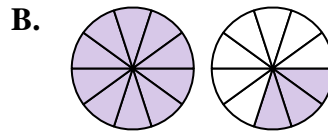
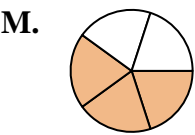
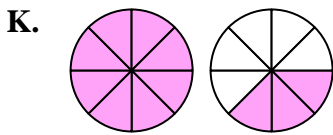
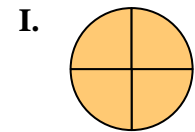
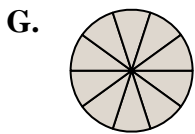
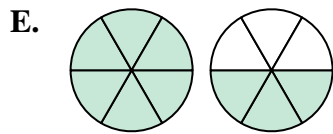
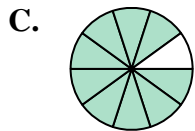
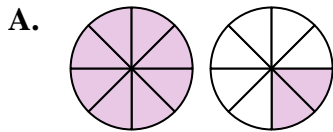
6)  $\frac{1}{6} + \frac{4}{6}$

8)  $\frac{3}{4} + \frac{3}{4}$

10)  $\frac{2}{4} + \frac{2}{4}$

12)  $\frac{5}{6} + \frac{5}{6}$

14)  $\frac{4}{5} + \frac{4}{5}$

**Risposte**

1. \_\_\_\_\_

2. \_\_\_\_\_

3. \_\_\_\_\_

4. \_\_\_\_\_

5. \_\_\_\_\_

6. \_\_\_\_\_

7. \_\_\_\_\_

8. \_\_\_\_\_

9. \_\_\_\_\_

10. \_\_\_\_\_

11. \_\_\_\_\_

12. \_\_\_\_\_

13. \_\_\_\_\_

14. \_\_\_\_\_



Determina quale lettera rappresenta graficamente la somma numerica.

1)  $\frac{2}{3} + \frac{1}{3}$

2)  $\frac{2}{5} + \frac{1}{5}$

3)  $\frac{5}{8} + \frac{4}{8}$

4)  $\frac{6}{8} + \frac{4}{8}$

5)  $\frac{8}{10} + \frac{5}{10}$

6)  $1\frac{4}{6} + \frac{4}{6}$

7)  $\frac{5}{8} + \frac{6}{8}$

8)  $\frac{3}{4} + \frac{3}{4}$

9)  $\frac{7}{10} + \frac{3}{10}$

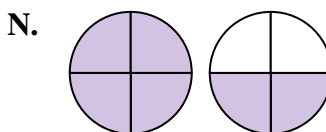
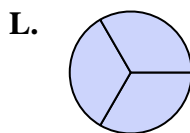
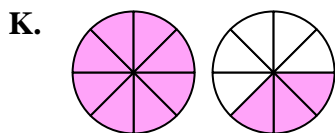
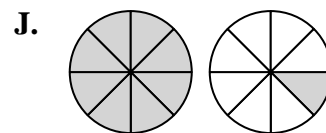
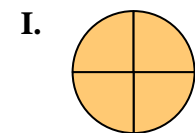
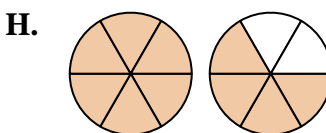
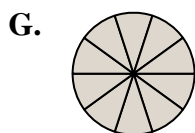
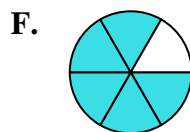
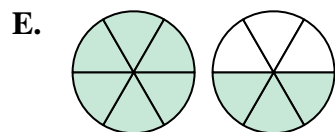
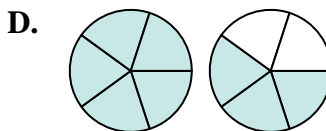
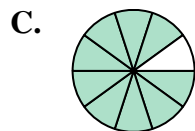
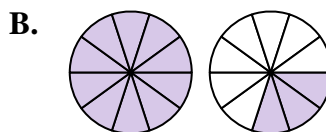
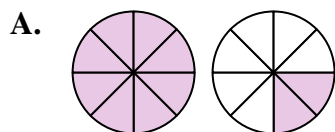
10)  $\frac{2}{4} + \frac{2}{4}$

11)  $\frac{4}{6} + \frac{5}{6}$

12)  $\frac{5}{6} + \frac{5}{6}$

13)  $\frac{4}{10} + \frac{5}{10}$

14)  $\frac{4}{5} + \frac{4}{5}$

**Risposte**

1.     **L**  $\frac{3}{3}$     

2.     **M**  $\frac{3}{5}$     

3.     **J**  $1\frac{1}{8}$     

4.     **A**  $1\frac{2}{8}$     

5.     **B**  $1\frac{3}{10}$     

6.     **F**  $\frac{5}{6}$     

7.     **K**  $1\frac{3}{8}$     

8.     **N**  $1\frac{2}{4}$     

9.     **G**  $\frac{10}{10}$     

10.     **I**  $\frac{4}{4}$     

11.     **E**  $1\frac{3}{6}$     

12.     **H**  $1\frac{4}{6}$     

13.     **C**  $\frac{9}{10}$     

14.     **D**  $1\frac{3}{5}$