



Determina quale lettera rappresenta graficamente la somma numerica.

1) $\frac{9}{10} + \frac{7}{10}$

3) $\frac{4}{6} + \frac{1}{6}$

5) $\frac{2}{6} + \frac{1}{6}$

7) $\frac{2}{5} + \frac{1}{5}$

9) $\frac{1}{2} + \frac{1}{2}$

11) $\frac{8}{10} + \frac{5}{10}$

13) $\frac{2}{8} + \frac{3}{8}$

2) $\frac{9}{10} + \frac{1}{10}$

4) $\frac{6}{8} + \frac{3}{8}$

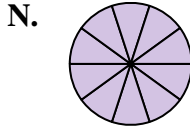
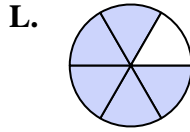
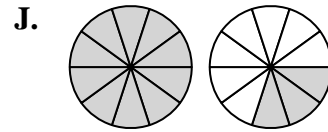
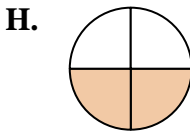
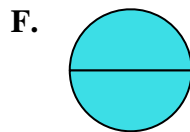
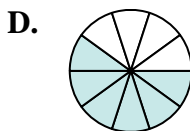
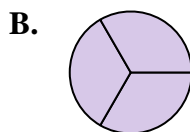
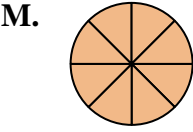
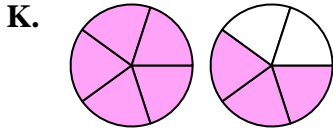
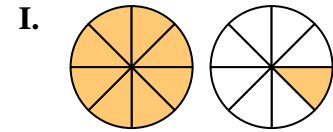
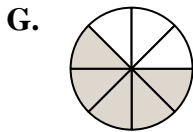
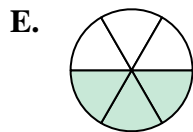
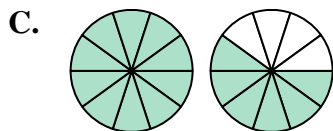
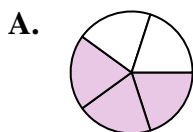
6) $\frac{3}{10} + \frac{3}{10}$

8) $\frac{7}{8} + \frac{1}{8}$

10) $\frac{4}{5} + \frac{4}{5}$

12) $\frac{1}{3} + \frac{2}{3}$

14) $\frac{1}{4} + \frac{1}{4}$

**Risposte**

1. _____

2. _____

3. _____

4. _____

5. _____

6. _____

7. _____

8. _____

9. _____

10. _____

11. _____

12. _____

13. _____

14. _____



Determina quale lettera rappresenta graficamente la somma numerica.

1) $\frac{9}{10} + \frac{7}{10}$

3) $\frac{4}{6} + \frac{1}{6}$

5) $\frac{2}{6} + \frac{1}{6}$

7) $\frac{2}{5} + \frac{1}{5}$

9) $\frac{1}{2} + \frac{1}{2}$

11) $\frac{8}{10} + \frac{5}{10}$

13) $\frac{2}{8} + \frac{3}{8}$

2) $\frac{9}{10} + \frac{1}{10}$

4) $\frac{6}{8} + \frac{3}{8}$

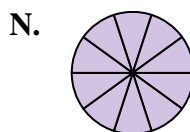
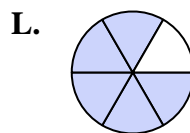
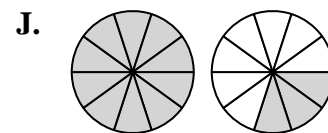
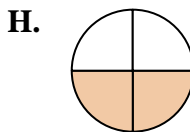
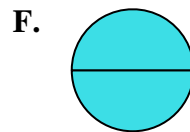
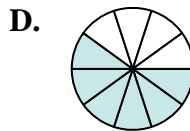
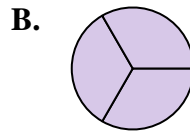
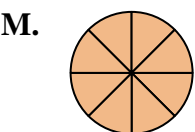
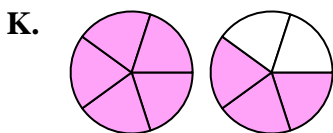
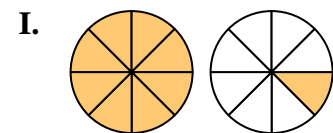
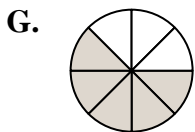
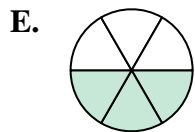
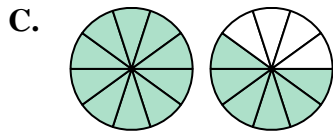
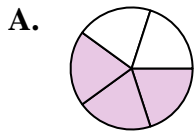
6) $\frac{3}{10} + \frac{3}{10}$

8) $\frac{7}{8} + \frac{1}{8}$

10) $\frac{4}{5} + \frac{4}{5}$

12) $\frac{1}{3} + \frac{2}{3}$

14) $\frac{1}{4} + \frac{1}{4}$

**Risposte**

1. **C** $1 \frac{6}{10}$

2. **N** $1 \frac{10}{10}$

3. **L** $\frac{5}{6}$

4. **I** $1 \frac{1}{8}$

5. **E** $\frac{3}{6}$

6. **D** $\frac{6}{10}$

7. **A** $\frac{3}{5}$

8. **M** $\frac{8}{8}$

9. **F** $\frac{2}{2}$

10. **K** $1 \frac{3}{5}$

11. **J** $1 \frac{3}{10}$

12. **B** $\frac{3}{3}$

13. **G** $\frac{5}{8}$

14. **H** $\frac{2}{4}$